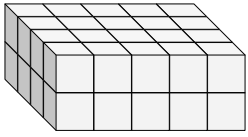


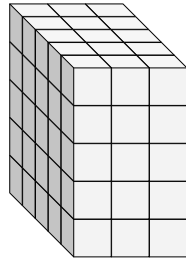


Find the length, width and height of the rectangular prism. Then find the volume.

Ex)



1)



Answers

Ex. 4 5 2 40

1. _____

2. _____

3. _____

4. _____

5. _____

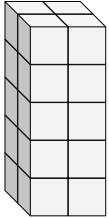
6. _____

7. _____

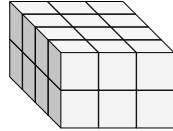
8. _____

9. _____

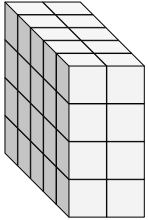
2)



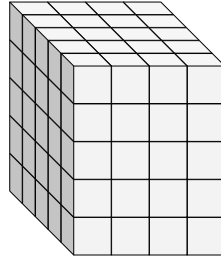
3)



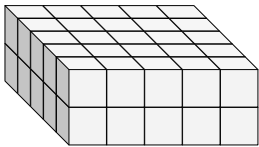
4)



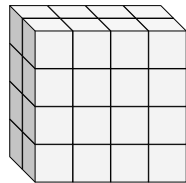
5)



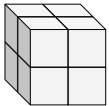
6)



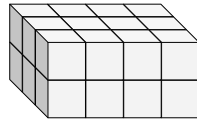
7)



8)

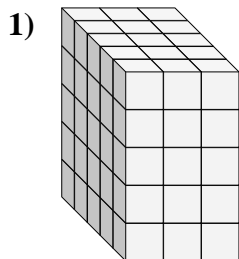
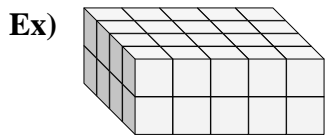


9)





Find the length, width and height of the rectangular prism. Then find the volume.



Answers
Ex. 4 5 2 40

1. 5 3 5 75

2. 2 2 5 20

3. 4 3 2 24

4. 5 2 4 40

5. 5 4 5 100

6. 5 5 2 50

7. 2 4 4 32

8. 2 2 2 8

9. 3 4 2 24

