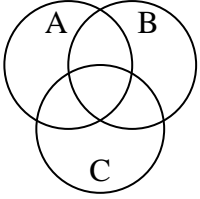


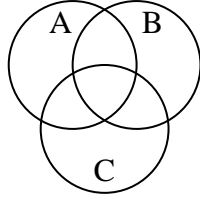


Shade the region shown.

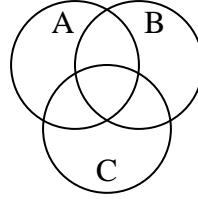
1) $(A \cap B) - C$



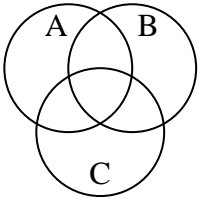
2) $C \cup (B - A)$



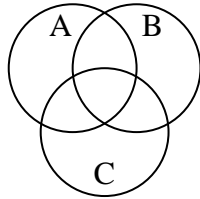
3) $A \cap C$



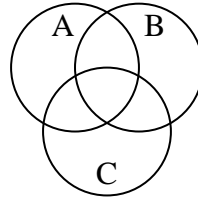
4) $A \cap C \cap B$



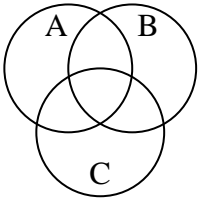
5) $A - (C \cup B)$



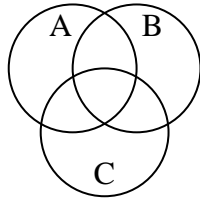
6) A



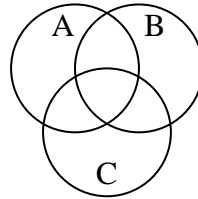
7) $B \cap A$



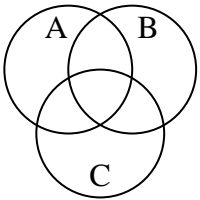
8) $B - (C \cup A)$



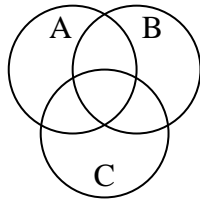
9) $B \cup (A - C)$



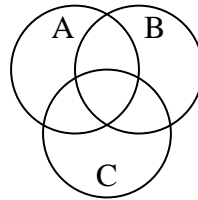
10) $(B \cap C) - A$



11) $C \cup A$



12) $C \cap B$



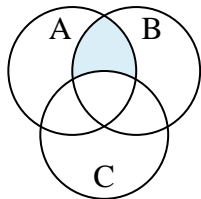
Answers

1. _____
2. _____
3. _____
4. _____
5. _____
6. _____
7. _____
8. _____
9. _____
10. _____
11. _____
12. _____

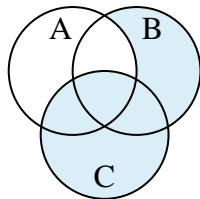


Shade the region shown.

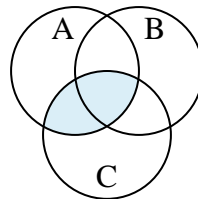
1) $(A \cap B) - C$



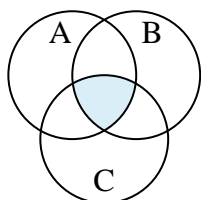
2) $C \cup (B - A)$



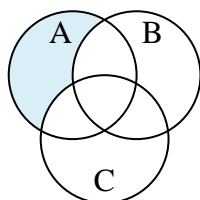
3) $A \cap C$



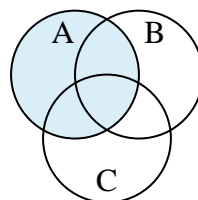
4) $A \cap C \cap B$



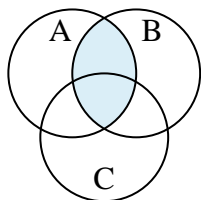
5) $A - (C \cup B)$



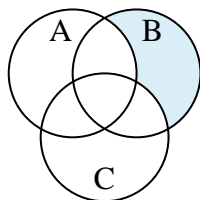
6) A



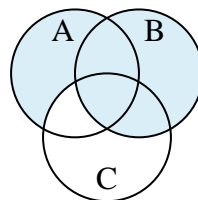
7) $B \cap A$



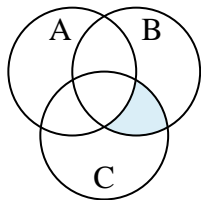
8) $B - (C \cup A)$



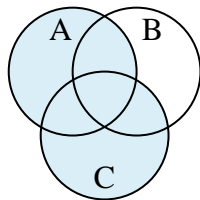
9) $B \cup (A - C)$



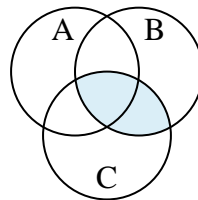
10) $(B \cap C) - A$



11) $C \cup A$



12) $C \cap B$

**Answers**

1. $(A \cap B) - C$

2. $C \cup (B - A)$

3. $A \cap C$

4. $A \cap C \cap B$

5. $A - (C \cup B)$

6. A

7. $B \cap A$

8. $B - (C \cup A)$

9. $B \cup (A - C)$

10. $(B \cap C) - A$

11. $C \cup A$

12. $C \cap B$