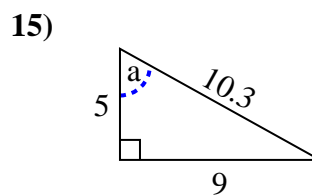
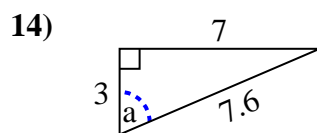
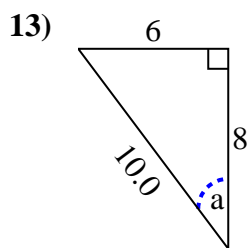
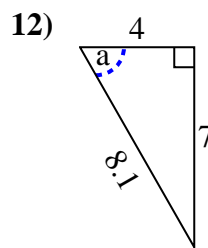
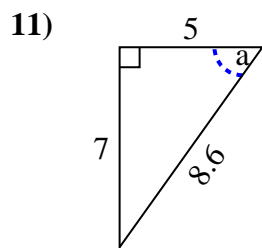
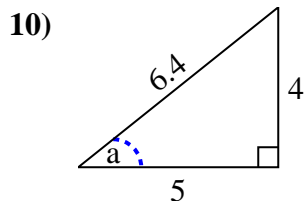
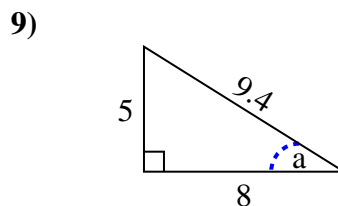
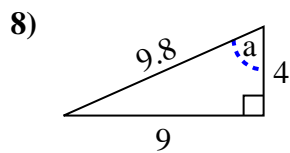
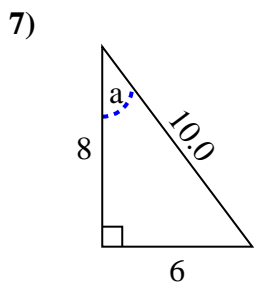
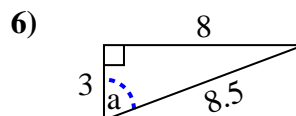
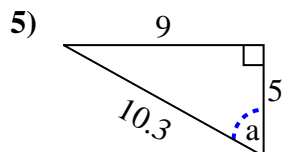
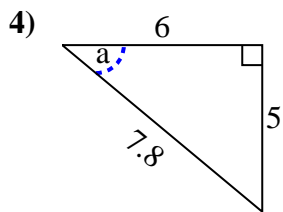
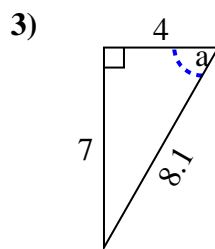
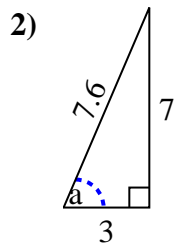
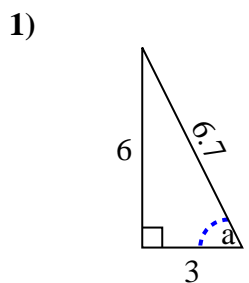


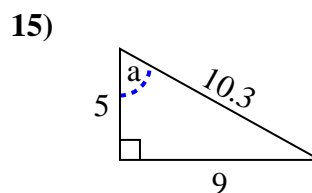
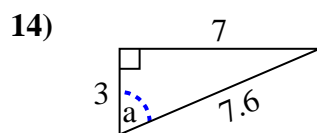
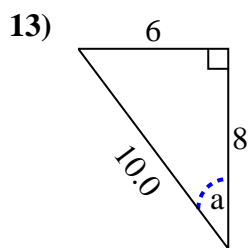
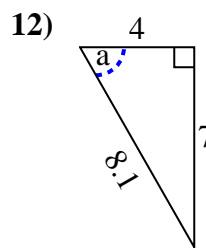
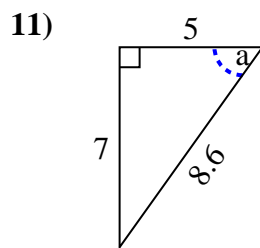
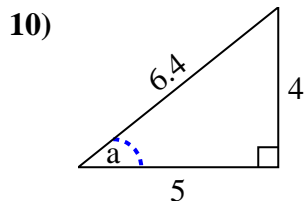
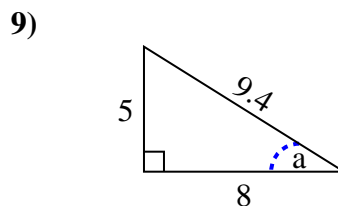
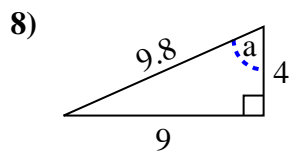
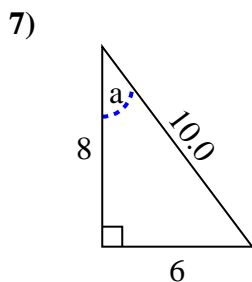
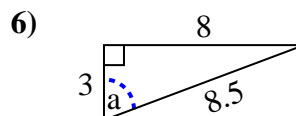
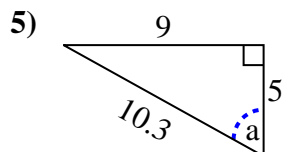
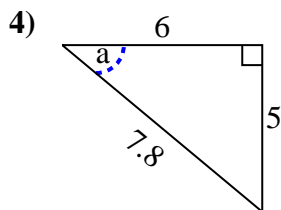
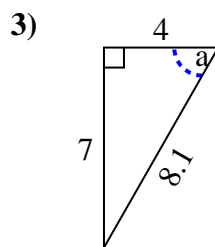
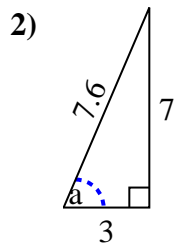
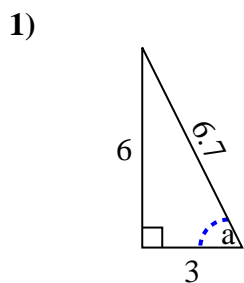


Identify the Opposite, Adjacent and Hypotenuse of Angle a.

Answers



1. \_\_\_\_\_
2. \_\_\_\_\_
3. \_\_\_\_\_
4. \_\_\_\_\_
5. \_\_\_\_\_
6. \_\_\_\_\_
7. \_\_\_\_\_
8. \_\_\_\_\_
9. \_\_\_\_\_
10. \_\_\_\_\_
11. \_\_\_\_\_
12. \_\_\_\_\_
13. \_\_\_\_\_
14. \_\_\_\_\_
15. \_\_\_\_\_

Identify the Opposite, Adjacent and Hypotenuse of Angle  $a$ .Answers1. 6, 3, 6.72. 7, 3, 7.63. 7, 4, 8.14. 5, 6, 7.85. 9, 5, 10.36. 8, 3, 8.57. 6, 8, 10.08. 9, 4, 9.89. 5, 8, 9.410. 4, 5, 6.411. 7, 5, 8.612. 7, 4, 8.113. 6, 8, 10.014. 7, 3, 7.615. 9, 5, 10.3