



Solve each problem.

Answers

1) Start: 7:10

Elapsed: \_\_\_\_\_

End: 8:40

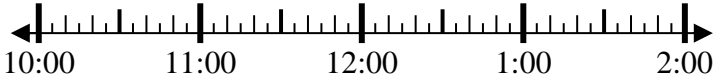


1. \_\_\_\_\_

2) Start: 10:00

Elapsed: \_\_\_\_\_

End: 11:20



2. \_\_\_\_\_

3) Start: 6:10

Elapsed: \_\_\_\_\_

End: 7:35



3. \_\_\_\_\_

4) Start: 11:15

Elapsed: \_\_\_\_\_

End: 2:05

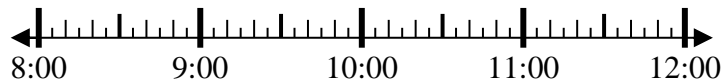


4. \_\_\_\_\_

5) Start: 8:35

Elapsed: \_\_\_\_\_

End: 10:30

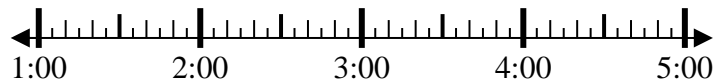


5. \_\_\_\_\_

6) Start: 1:45

Elapsed: \_\_\_\_\_

End: 3:15



6. \_\_\_\_\_

7) Start: 4:45

Elapsed: \_\_\_\_\_

End: 7:35



7. \_\_\_\_\_

8) Start: 11:15

Elapsed: \_\_\_\_\_

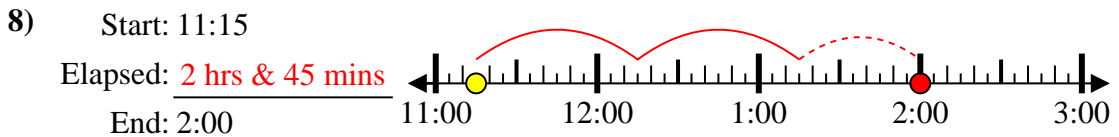
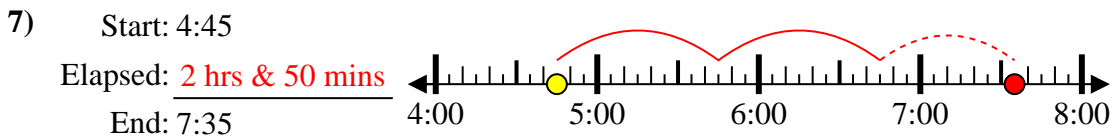
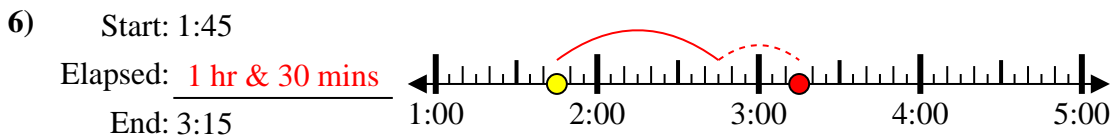
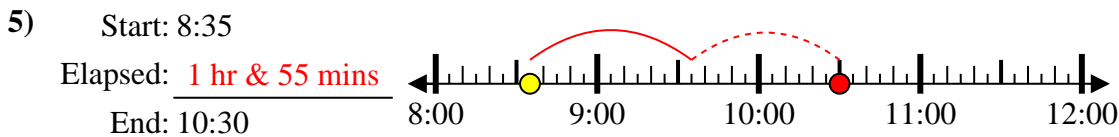
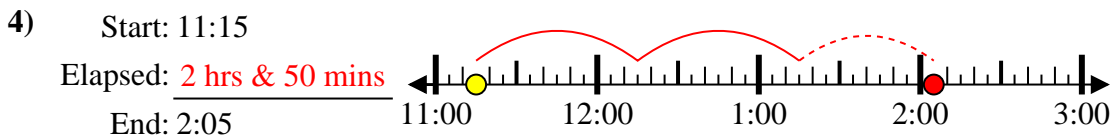
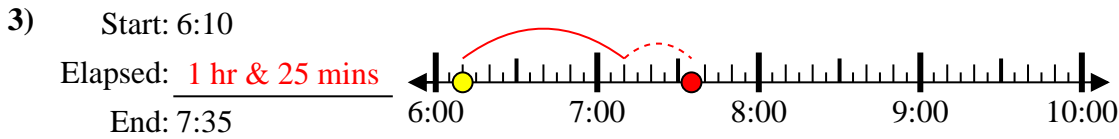
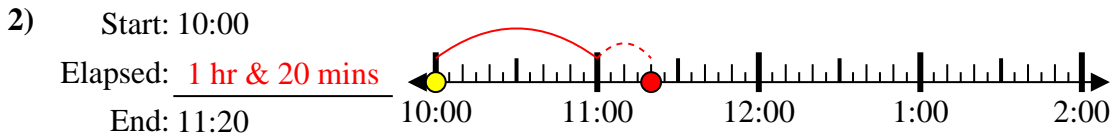
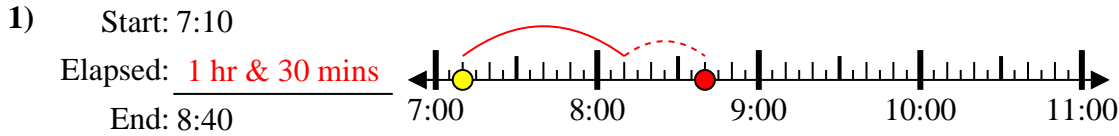
End: 2:00



8. \_\_\_\_\_



Solve each problem.



Answers

1. 1 hr & 30 mins
2. 1 hr & 20 mins
3. 1 hr & 25 mins
4. 2 hrs & 50 mins
5. 1 hr & 55 mins
6. 1 hr & 30 mins
7. 2 hrs & 50 mins
8. 2 hrs & 45 mins