

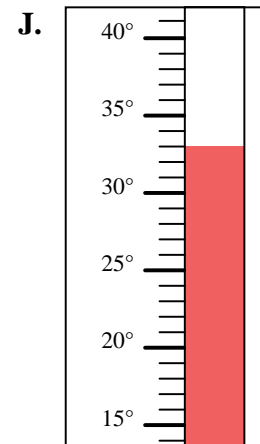
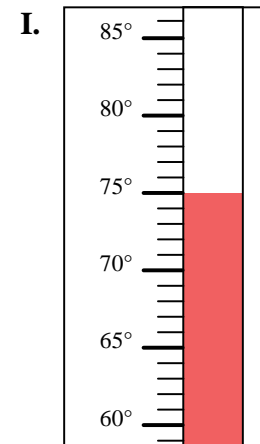
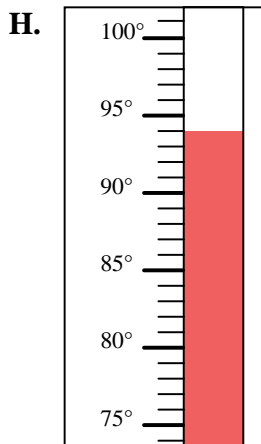
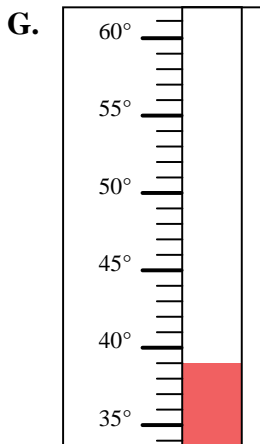
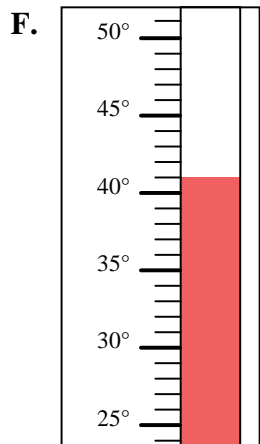
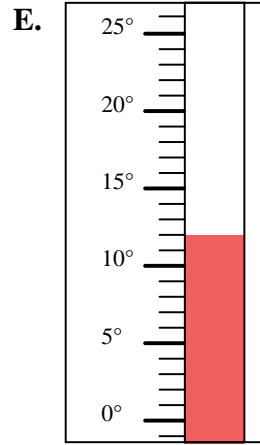
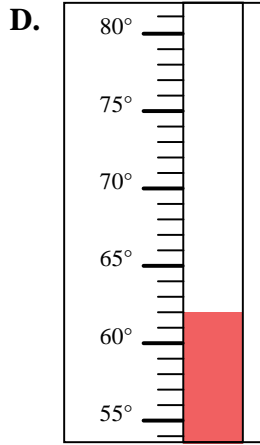
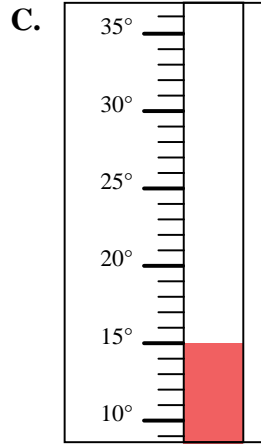
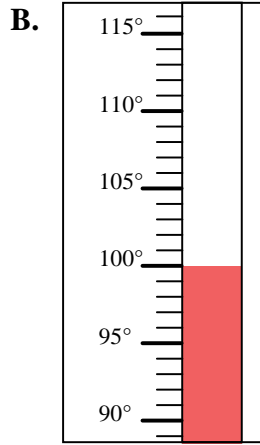
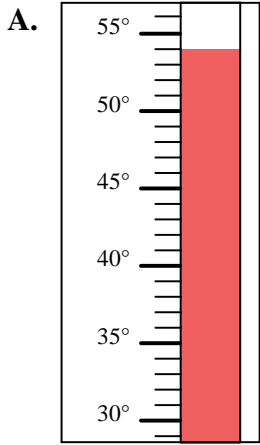


Determine which letter best answers each question.

Answers

- 1) Which thermometer best represents the temperature 75°?
- 2) Which thermometer best represents the temperature 39°?
- 3) Which thermometer best represents the temperature 100°?
- 4) Which thermometer best represents the temperature 15°?
- 5) Which thermometer best represents the temperature 62°?
- 6) Which thermometer best represents the temperature 12°?
- 7) Which thermometer best represents the temperature 94°?
- 8) Which thermometer best represents the temperature 54°?
- 9) Which thermometer best represents the temperature 41°?
- 10) Which thermometer best represents the temperature 33°?

1. _____
2. _____
3. _____
4. _____
5. _____
6. _____
7. _____
8. _____
9. _____
10. _____





Determine which letter best answers each question.

Answers

- 1) Which thermometer best represents the temperature 75°?
- 2) Which thermometer best represents the temperature 39°?
- 3) Which thermometer best represents the temperature 100°?
- 4) Which thermometer best represents the temperature 15°?
- 5) Which thermometer best represents the temperature 62°?
- 6) Which thermometer best represents the temperature 12°?
- 7) Which thermometer best represents the temperature 94°?
- 8) Which thermometer best represents the temperature 54°?
- 9) Which thermometer best represents the temperature 41°?
- 10) Which thermometer best represents the temperature 33°?

1. **I**
2. **G**
3. **B**
4. **C**
5. **D**
6. **E**
7. **H**
8. **A**
9. **F**
10. **J**

