



Solve each problem using a tape diagram.

Answers

1) A clown had 61 balloons. He gave 43 away at a party. How many balloons would he have left over?

1. _____

2) A waiter has 61 customers. If 14 left, how many customers would the waiter still have?

2. _____

3) A pet store had 52 gerbils. If they sold 24 of them, how many would they have left?

3. _____

4) A baker made 62 cakes. 18 were chocolate and the rest were vanilla. How many cakes were vanilla?

4. _____

5) A museum had 67 paintings. If they got rid of 25 of them, how many pictures would they have left?

5. _____

6) Will owned 52 video games for his Playstation and Xbox. 20 of the games were for Xbox. How many games does Will have for playstation?

6. _____

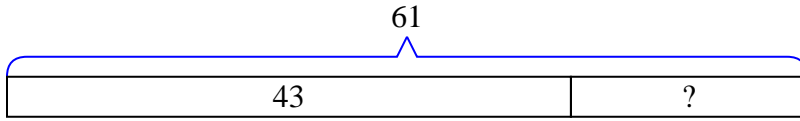
7) Oliver had 88 cherries. He ate 43 of them. How many cherries does Oliver have left?

7. _____

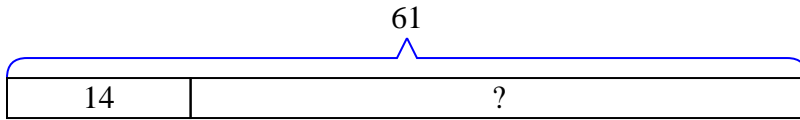


Solve each problem using a tape diagram.

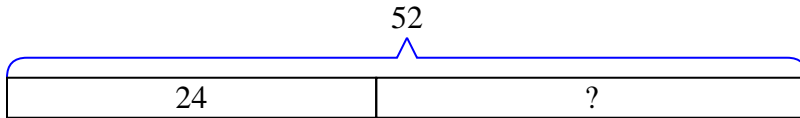
- 1) A clown had 61 balloons. He gave 43 away at a party. How many balloons would he have left over?



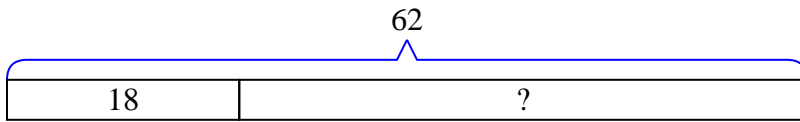
- 2) A waiter has 61 customers. If 14 left, how many customers would the waiter still have?



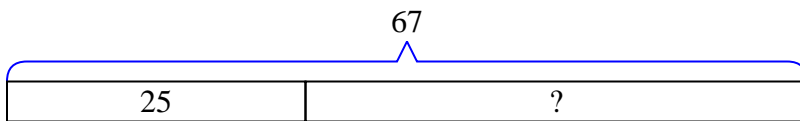
- 3) A pet store had 52 gerbils. If they sold 24 of them, how many would they have left?



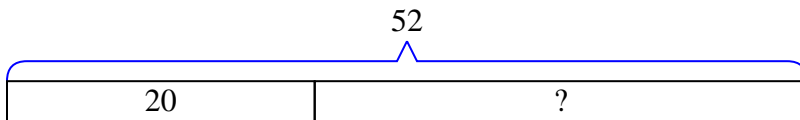
- 4) A baker made 62 cakes. 18 were chocolate and the rest were vanilla. How many cakes were vanilla?



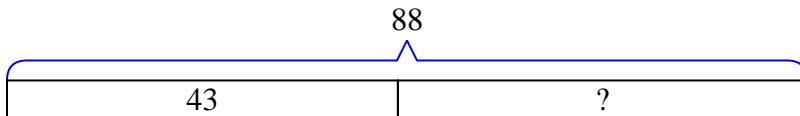
- 5) A museum had 67 paintings. If they got rid of 25 of them, how many pictures would they have left?



- 6) Will owned 52 video games for his Playstation and Xbox. 20 of the games were for Xbox. How many games does Will have for playstation?



- 7) Oliver had 88 cherries. He ate 43 of them. How many cherries does Oliver have left?

Answers

1. 18
2. 47
3. 28
4. 44
5. 42
6. 32
7. 45