



Solve each problem using a tape diagram.

- 1) Janet had 62 3DS games. If she gave 30 to her friend, how many would she have left?
  
- 2) A store has 35 shirts. If 16 are long sleeve, how many are short sleeve?
  
- 3) Emily had 88 pieces of candy. 47 pieces are chocolate and the rest are sugary. How many pieces of candy does Emily have that are sugary?
  
- 4) For Halloween Billy got 58 pounds of candy. If he gave 20 pounds to Carol, how many pounds would he have left?
  
- 5) Gwen had 48 pencils. If she used 14 of them, how many would she have left?
  
- 6) A store had 67 sodas on Monday. If they sold 47 of them on Tuesday, how many would they have left on Wednesday?
  
- 7) Oliver owned 74 video games for his Playstation and Xbox. 31 of the games were for Xbox. How many games does Oliver have for playstation?

Answers

1. \_\_\_\_\_

2. \_\_\_\_\_

3. \_\_\_\_\_

4. \_\_\_\_\_

5. \_\_\_\_\_

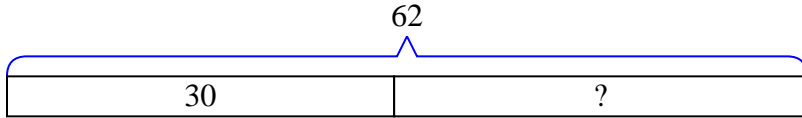
6. \_\_\_\_\_

7. \_\_\_\_\_

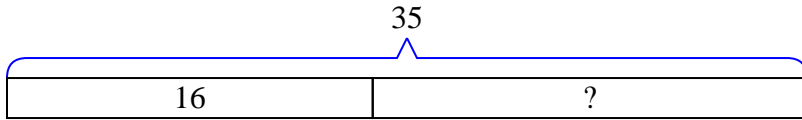


Solve each problem using a tape diagram.

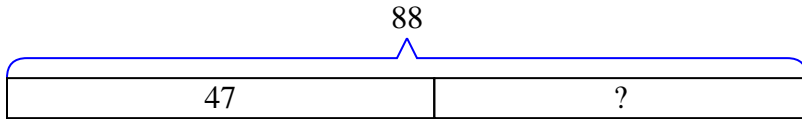
- 1) Janet had 62 3DS games. If she gave 30 to her friend, how many would she have left?



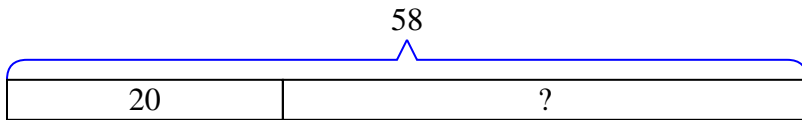
- 2) A store has 35 shirts. If 16 are long sleeve, how many are short sleeve?



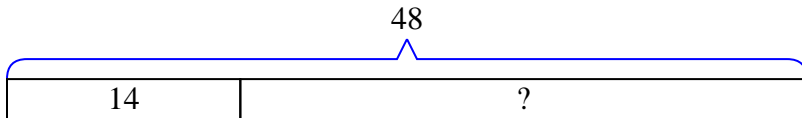
- 3) Emily had 88 pieces of candy. 47 pieces are chocolate and the rest are sugary. How many pieces of candy does Emily have that are sugary?



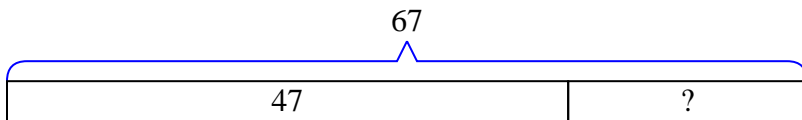
- 4) For Halloween Billy got 58 pounds of candy. If he gave 20 pounds to Carol, how many pounds would he have left?



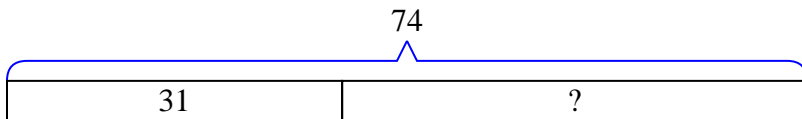
- 5) Gwen had 48 pencils. If she used 14 of them, how many would she have left?



- 6) A store had 67 sodas on Monday. If they sold 47 of them on Tuesday, how many would they have left on Wednesday?



- 7) Oliver owned 74 video games for his Playstation and Xbox. 31 of the games were for Xbox. How many games does Oliver have for playstation?



Answers

1. 32  
 2. 19  
 3. 41  
 4. 38  
 5. 34  
 6. 20  
 7. 43