



Solve each problem using a tape diagram.

Ex) Maria and her friend had two piles of candy. Maria's pile had 37 pieces and her friend had 93 pieces. How many pieces would her friend have to give Maria so that they both had the same amount?

**Answers**Ex. 28

1. \_\_\_\_\_

2. \_\_\_\_\_

3. \_\_\_\_\_

4. \_\_\_\_\_

1) In high school 91 students signed up for the morning art class and 49 signed up for the afternoon class. How many students should be moved from the morning to afternoon so that each class has the same number of students?

2) Adam had 2 display cases of collectibles. He wanted to organize them so each case had the same number of collectibles. One case had 62 collectibles and the other had 30. How many should he move so that each case has the same amount?

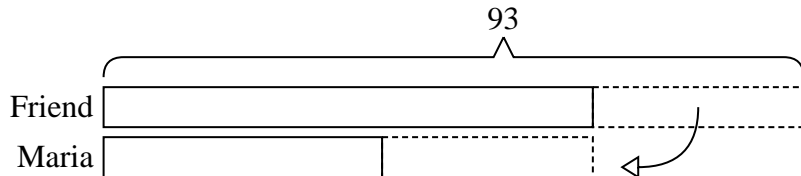
3) A car salesman had 96 cars in one of his lots and 38 in another lot. He decided to move some cars from Lot 1 into Lot 2 so that Lot 2 looked fuller. How many cars should he move so that each lot has the same amount?

4) There are 87 sodas on the top shelf and 41 sodas on the bottom shelf. How many sodas should be moved from the top shelf to the bottom shelf so that each shelf has the same amount?

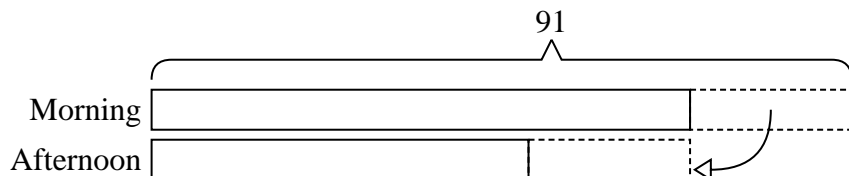


Solve each problem using a tape diagram.

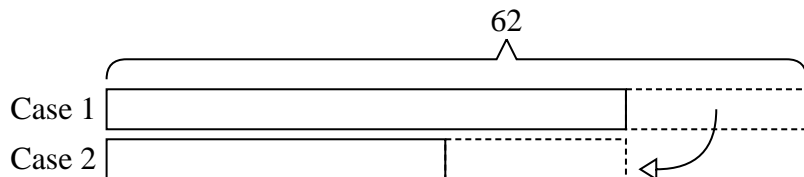
- Ex) Maria and her friend had two piles of candy. Maria's pile had 37 pieces and her friend had 93 pieces. How many pieces would her friend have to give Maria so that they both had the same amount?



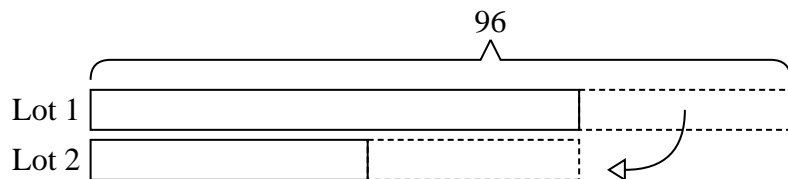
- 1) In high school 91 students signed up for the morning art class and 49 signed up for the afternoon class. How many students should be moved from the morning to afternoon so that each class has the same number of students?



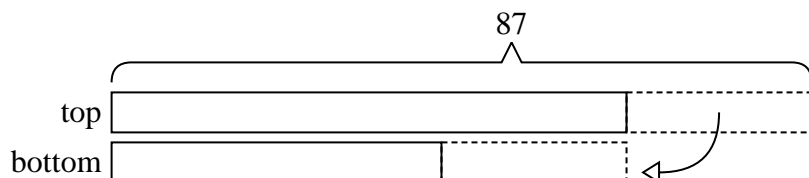
- 2) Adam had 2 display cases of collectibles. He wanted to organize them so each case had the same number of collectibles. One case had 62 collectibles and the other had 30. How many should he move so that each case has the same amount?



- 3) A car salesman had 96 cars in one of his lots and 38 in another lot. He decided to move some cars from Lot 1 into Lot 2 so that Lot 2 looked fuller. How many cars should he move so that each lot has the same amount?



- 4) There are 87 sodas on the top shelf and 41 sodas on the bottom shelf. How many sodas should be moved from the top shelf to the bottom shelf so that each shelf has the same amount?

**Answers**Ex. 281. 212. 163. 294. 23