



Solve each problem.

Answers

1) Olivia picked up 46 pieces of paper from the floor. If Adam picked up 30 pieces, how many did they pick up total?

1. _____

2) Roger had 16 books. During the book fair he bought 19 more. How many books did Roger have total?

2. _____

3) For a party Ned spent 19 dollars on food and 47 dollars on drinks. How much did Ned spend total?

3. _____

4) Maria had 20 pieces of candy. Her friend gave her 38 more pieces. How many pieces of candy did Maria have total?

4. _____

5) Will had \$14. Later he sold some of his old toys and got another \$34. How much money does he have total?

5. _____

6) Robin spent 47 minutes drawing at school and 20 minutes drawing at home. How many minutes total did she spend drawing?

6. _____

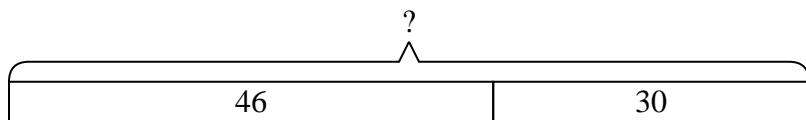
7) Mike had 31 dollars saved up. After doing some chores his mother gave him another 43 dollars. How much money does he have total?

7. _____

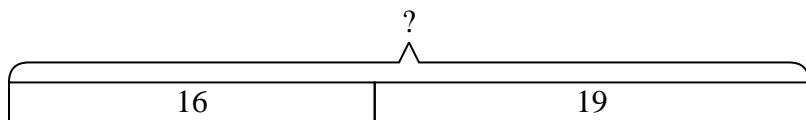


Solve each problem.

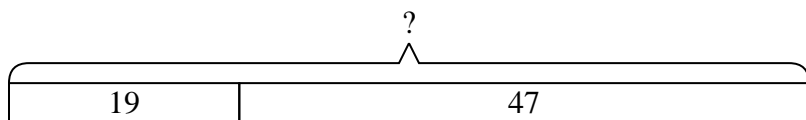
- 1) Olivia picked up 46 pieces of paper from the floor. If Adam picked up 30 pieces, how many did they pick up total?



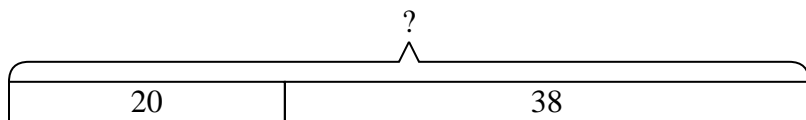
- 2) Roger had 16 books. During the book fair he bought 19 more. How many books did Roger have total?



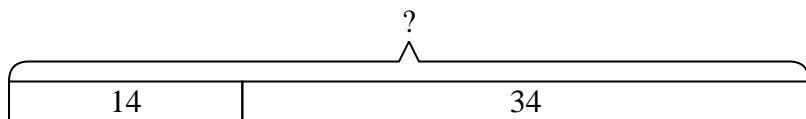
- 3) For a party Ned spent 19 dollars on food and 47 dollars on drinks. How much did Ned spend total?



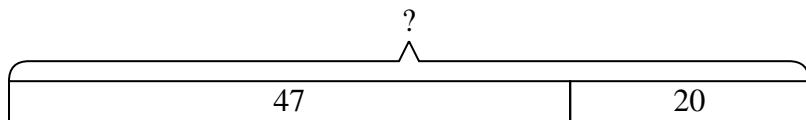
- 4) Maria had 20 pieces of candy. Her friend gave her 38 more pieces. How many pieces of candy did Maria have total?



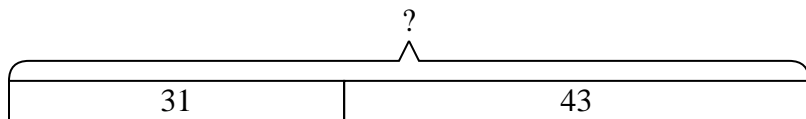
- 5) Will had \$14. Later he sold some of his old toys and got another \$34. How much money does he have total?



- 6) Robin spent 47 minutes drawing at school and 20 minutes drawing at home. How many minutes total did she spend drawing?



- 7) Mike had 31 dollars saved up. After doing some chores his mother gave him another 43 dollars. How much money does he have total?



Answers

1. 76

2. 35

3. 66

4. 58

5. 48

6. 67

7. 74