



Match each table with the appropriate graph.

Answers

1)

Name	Cans Recycled
Allen	
Beth	
Rick	
Andrea	
Dale	

2)

Name	Cans Recycled
Allen	
Beth	
Rick	
Andrea	
Dale	

3)

Name	Cans Recycled
Allen	
Beth	
Rick	
Andrea	
Dale	

4)

Name	Cans Recycled
Allen	
Beth	
Rick	
Andrea	
Dale	

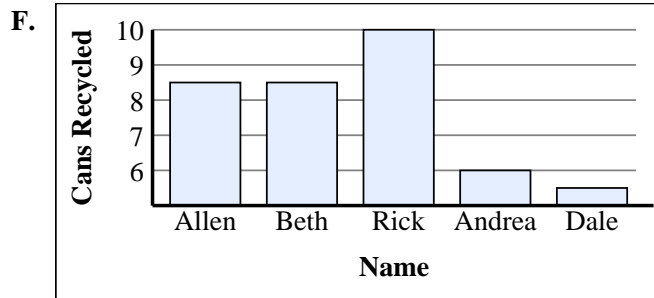
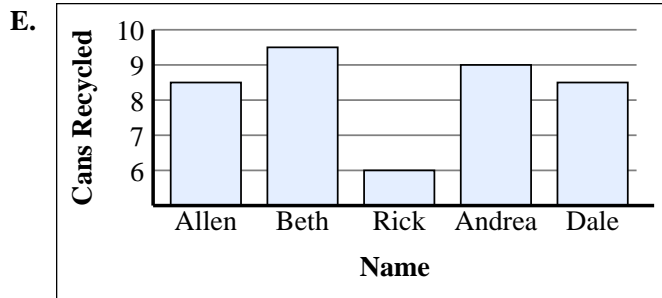
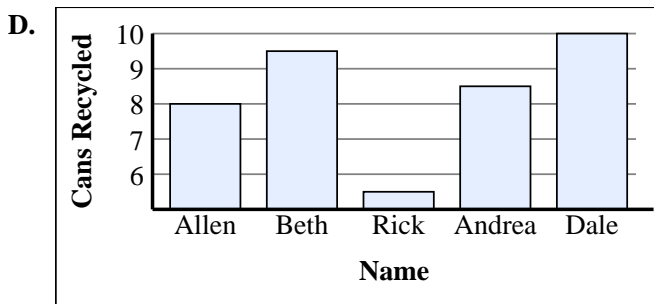
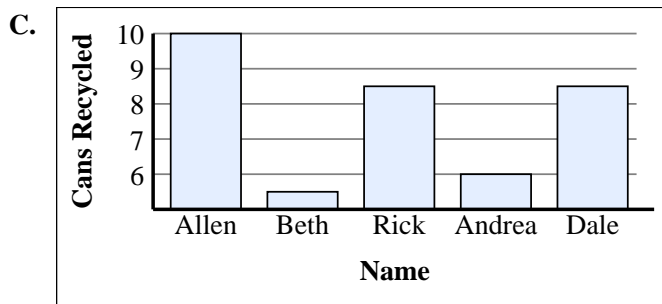

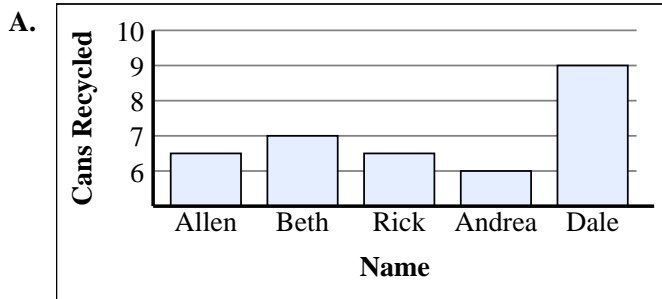
5)

Name	Cans Recycled
Allen	
Beth	
Rick	
Andrea	
Dale	

6)

Name	Cans Recycled
Allen	
Beth	
Rick	
Andrea	
Dale	

1. _____
2. _____
3. _____
4. _____
5. _____
6. _____





Match each table with the appropriate graph.

Answers

1)

Name	Cans Recycled
Allen	
Beth	
Rick	
Andrea	
Dale	

2)

Name	Cans Recycled
Allen	
Beth	
Rick	
Andrea	
Dale	

3)

Name	Cans Recycled
Allen	
Beth	
Rick	
Andrea	
Dale	

4)

Name	Cans Recycled
Allen	
Beth	
Rick	
Andrea	
Dale	

5)

Name	Cans Recycled
Allen	
Beth	
Rick	
Andrea	
Dale	

6)

Name	Cans Recycled
Allen	
Beth	
Rick	
Andrea	
Dale	

1. **F**

2. **C**

3. **D**

4. **A**

5. **E**

6. **B**

