



Express each number using tally marks.

1) 81 \_\_\_\_\_

2) 91 \_\_\_\_\_

3) 45 \_\_\_\_\_

4) 63 \_\_\_\_\_

5) 64 \_\_\_\_\_

6) 18 \_\_\_\_\_

7) 59 \_\_\_\_\_

8) 71 \_\_\_\_\_

9) 37 \_\_\_\_\_

10) 79 \_\_\_\_\_

11) 31 \_\_\_\_\_

12) 80 \_\_\_\_\_



Express each number using tally marks.

1) 81 \_\_\_\_\_

2) 91 \_\_\_\_\_

3) 45 \_\_\_\_\_

4) 63 \_\_\_\_\_

5) 64 \_\_\_\_\_

6) 18 \_\_\_\_\_

7) 59 \_\_\_\_\_

8) 71 \_\_\_\_\_

9) 37 \_\_\_\_\_

10) 79 \_\_\_\_\_

11) 31 \_\_\_\_\_

12) 80 \_\_\_\_\_



Express each number using tally marks.

1) 79 \_\_\_\_\_

2) 25 \_\_\_\_\_

3) 80 \_\_\_\_\_

4) 73 \_\_\_\_\_

5) 72 \_\_\_\_\_

6) 64 \_\_\_\_\_

7) 90 \_\_\_\_\_

8) 63 \_\_\_\_\_

9) 52 \_\_\_\_\_

10) 84 \_\_\_\_\_

11) 92 \_\_\_\_\_

12) 56 \_\_\_\_\_



Express each number using tally marks.

1) 79 \_\_\_\_\_

2) 25 \_\_\_\_\_

3) 80 \_\_\_\_\_

4) 73 \_\_\_\_\_

5) 72 \_\_\_\_\_

6) 64 \_\_\_\_\_

7) 90 \_\_\_\_\_

8) 63 \_\_\_\_\_

9) 52 \_\_\_\_\_

10) 84 \_\_\_\_\_

11) 92 \_\_\_\_\_

12) 56 \_\_\_\_\_



Express each number using tally marks.

1) 56 \_\_\_\_\_

2) 62 \_\_\_\_\_

3) 23 \_\_\_\_\_

4) 69 \_\_\_\_\_

5) 49 \_\_\_\_\_

6) 60 \_\_\_\_\_

7) 28 \_\_\_\_\_

8) 25 \_\_\_\_\_

9) 16 \_\_\_\_\_

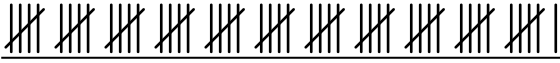
10) 93 \_\_\_\_\_


11) 61 \_\_\_\_\_


12) 27 \_\_\_\_\_



Express each number using tally marks.

1) 56 

2) 62 

3) 23 

4) 69 

5) 49 

6) 60 

7) 28 

8) 25 

9) 16 

10) 93 

11) 61 

12) 27 



Express each number using tally marks.

1) 26 \_\_\_\_\_

2) 36 \_\_\_\_\_

3) 47 \_\_\_\_\_

4) 21 \_\_\_\_\_

5) 19 \_\_\_\_\_

6) 30 \_\_\_\_\_

7) 91 \_\_\_\_\_

8) 98 \_\_\_\_\_

9) 70 \_\_\_\_\_


10) 97 \_\_\_\_\_

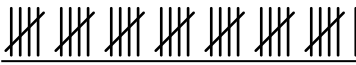
11) 22 \_\_\_\_\_

12) 35 \_\_\_\_\_




Express each number using tally marks.


1) 26 


2) 36 


3) 47 

4) 21 


5) 19 


6) 30 

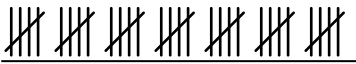
7) 91 

8) 98 

9) 70 

10) 97 

11) 22 

12) 35 





Express each number using tally marks.

1) 22 \_\_\_\_\_

2) 51 \_\_\_\_\_

3) 71 \_\_\_\_\_

4) 54 \_\_\_\_\_

5) 16 \_\_\_\_\_

6) 7 \_\_\_\_\_

7) 13 \_\_\_\_\_

8) 61 \_\_\_\_\_

9) 19 \_\_\_\_\_


10) 6 \_\_\_\_\_


11) 37 \_\_\_\_\_

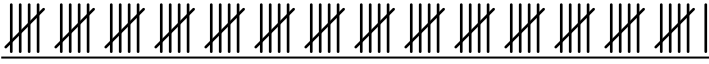
12) 34 \_\_\_\_\_





Express each number using tally marks.


1) 22 

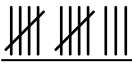
2) 51 


3) 71 


4) 54 


5) 16 


6) 7 

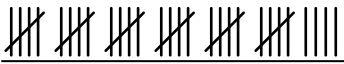
7) 13 

8) 61 

9) 19 

10) 6 

11) 37 

12) 34 



Express each number using tally marks.

1) 88 \_\_\_\_\_

2) 95 \_\_\_\_\_

3) 21 \_\_\_\_\_

4) 22 \_\_\_\_\_

5) 44 \_\_\_\_\_

6) 73 \_\_\_\_\_

7) 15 \_\_\_\_\_

8) 34 \_\_\_\_\_

9) 96 \_\_\_\_\_

10) 6 \_\_\_\_\_

11) 23 \_\_\_\_\_

12) 100 \_\_\_\_\_



Express each number using tally marks.

1) 88 \_\_\_\_\_

2) 95 \_\_\_\_\_

3) 21 \_\_\_\_\_

4) 22 \_\_\_\_\_

5) 44 \_\_\_\_\_

6) 73 \_\_\_\_\_

7) 15 \_\_\_\_\_

8) 34 \_\_\_\_\_

9) 96 \_\_\_\_\_

10) 6 \_\_\_\_\_

11) 23 \_\_\_\_\_

12) 100 \_\_\_\_\_



Express each number using tally marks.

1) 16 \_\_\_\_\_

2) 21 \_\_\_\_\_

3) 89 \_\_\_\_\_

4) 70 \_\_\_\_\_

5) 61 \_\_\_\_\_

6) 72 \_\_\_\_\_

7) 58 \_\_\_\_\_

8) 44 \_\_\_\_\_

9) 55 \_\_\_\_\_




10) 94 \_\_\_\_\_

11) 62 \_\_\_\_\_

12) 95 \_\_\_\_\_



Express each number using tally marks.

1) 16 2) 21 3) 89 4) 70 5) 61 6) 72 7) 58 8) 44 9) 55 10) 94 11) 62 12) 95 



Express each number using tally marks.

1) 43 \_\_\_\_\_

2) 23 \_\_\_\_\_

3) 71 \_\_\_\_\_

4) 19 \_\_\_\_\_

5) 47 \_\_\_\_\_

6) 7 \_\_\_\_\_

7) 69 \_\_\_\_\_

8) 74 \_\_\_\_\_

9) 64 \_\_\_\_\_

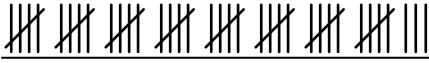
10) 78 \_\_\_\_\_


11) 32 \_\_\_\_\_

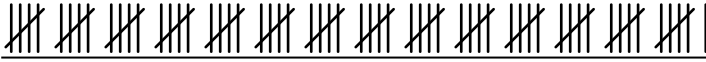
12) 65 \_\_\_\_\_

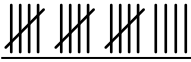


Express each number using tally marks.


1) 43 


2) 23 

3) 71 


4) 19 


5) 47 


6) 7 

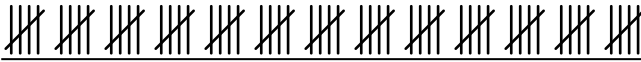
7) 69 

8) 74 

9) 64 

10) 78 

11) 32 

12) 65 





Express each number using tally marks.

1) 54 \_\_\_\_\_

2) 10 \_\_\_\_\_

3) 85 \_\_\_\_\_

4) 77 \_\_\_\_\_

5) 83 \_\_\_\_\_

6) 84 \_\_\_\_\_

7) 86 \_\_\_\_\_

8) 28 \_\_\_\_\_

9) 19 \_\_\_\_\_

10) 72 \_\_\_\_\_

11) 44 \_\_\_\_\_

12) 52 \_\_\_\_\_



Express each number using tally marks.

1) 54 

---

2) 10 

---

3) 85 

---

4) 77 

---

5) 83 

---

6) 84 

---

7) 86 

---

8) 28 

---

9) 19 

---

10) 72 

---

11) 44 

---

12) 52 

---



Express each number using tally marks.

1) 61 \_\_\_\_\_

2) 35 \_\_\_\_\_

3) 49 \_\_\_\_\_

4) 15 \_\_\_\_\_

5) 52 \_\_\_\_\_

6) 16 \_\_\_\_\_

7) 75 \_\_\_\_\_

8) 12 \_\_\_\_\_

9) 11 \_\_\_\_\_


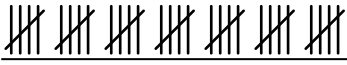
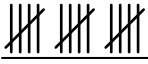


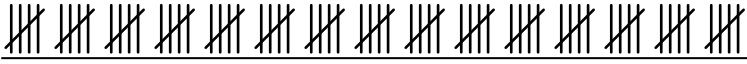




10) 31 \_\_\_\_\_

11) 37 \_\_\_\_\_

12) 87 \_\_\_\_\_



Express each number using tally marks.

1) 61 2) 35 3) 49 4) 15 5) 52 6) 16 7) 75 8) 12 9) 11 10) 31 11) 37 12) 87 