



Use subtraction to solve the following problems.

Answers

$$\begin{array}{r} 1) \quad 8,002 \\ - 6,534 \\ \hline \end{array}$$

$$\begin{array}{r} 2) \quad 5,001 \\ - 4,051 \\ \hline \end{array}$$

$$\begin{array}{r} 3) \quad 8,003 \\ - \quad 386 \\ \hline \end{array}$$

$$\begin{array}{r} 4) \quad 5,004 \\ - 4,944 \\ \hline \end{array}$$

$$\begin{array}{r} 5) \quad 8,006 \\ - 4,953 \\ \hline \end{array}$$

$$\begin{array}{r} 6) \quad 5,009 \\ - \quad 906 \\ \hline \end{array}$$

$$\begin{array}{r} 7) \quad 6,005 \\ - 2,651 \\ \hline \end{array}$$

$$\begin{array}{r} 8) \quad 3,009 \\ - \quad 413 \\ \hline \end{array}$$

$$\begin{array}{r} 9) \quad 4,005 \\ - \quad 277 \\ \hline \end{array}$$

$$\begin{array}{r} 10) \quad 1,002 \\ - \quad 592 \\ \hline \end{array}$$

$$\begin{array}{r} 11) \quad 5,005 \\ - 2,913 \\ \hline \end{array}$$

$$\begin{array}{r} 12) \quad 9,008 \\ - 6,453 \\ \hline \end{array}$$

$$\begin{array}{r} 13) \quad 7,001 \\ - 6,777 \\ \hline \end{array}$$

$$\begin{array}{r} 14) \quad 4,002 \\ - 2,094 \\ \hline \end{array}$$

$$\begin{array}{r} 15) \quad 9,009 \\ - 3,285 \\ \hline \end{array}$$

$$\begin{array}{r} 16) \quad 9,009 \\ - 3,647 \\ \hline \end{array}$$

$$\begin{array}{r} 17) \quad 1,007 \\ - \quad 946 \\ \hline \end{array}$$

$$\begin{array}{r} 18) \quad 9,006 \\ - 5,065 \\ \hline \end{array}$$

$$\begin{array}{r} 19) \quad 9,006 \\ - 4,373 \\ \hline \end{array}$$

$$\begin{array}{r} 20) \quad 9,002 \\ - 1,475 \\ \hline \end{array}$$

1. _____
2. _____
3. _____
4. _____
5. _____
6. _____
7. _____
8. _____
9. _____
10. _____
11. _____
12. _____
13. _____
14. _____
15. _____
16. _____
17. _____
18. _____
19. _____
20. _____



Use subtraction to solve the following problems.

$$\begin{array}{r} 1) \quad 8,002 \\ - 6,534 \\ \hline 1,468 \end{array}$$

$$\begin{array}{r} 2) \quad 5,001 \\ - 4,051 \\ \hline 950 \end{array}$$

$$\begin{array}{r} 3) \quad 8,003 \\ - \quad 386 \\ \hline 7,617 \end{array}$$

$$\begin{array}{r} 4) \quad 5,004 \\ - 4,944 \\ \hline 60 \end{array}$$

$$\begin{array}{r} 5) \quad 8,006 \\ - 4,953 \\ \hline 3,053 \end{array}$$

$$\begin{array}{r} 6) \quad 5,009 \\ - \quad 906 \\ \hline 4,103 \end{array}$$

$$\begin{array}{r} 7) \quad 6,005 \\ - 2,651 \\ \hline 3,354 \end{array}$$

$$\begin{array}{r} 8) \quad 3,009 \\ - \quad 413 \\ \hline 2,596 \end{array}$$

$$\begin{array}{r} 9) \quad 4,005 \\ - \quad 277 \\ \hline 3,728 \end{array}$$

$$\begin{array}{r} 10) \quad 1,002 \\ - \quad 592 \\ \hline 410 \end{array}$$

$$\begin{array}{r} 11) \quad 5,005 \\ - 2,913 \\ \hline 2,092 \end{array}$$

$$\begin{array}{r} 12) \quad 9,008 \\ - 6,453 \\ \hline 2,555 \end{array}$$

$$\begin{array}{r} 13) \quad 7,001 \\ - 6,777 \\ \hline 224 \end{array}$$

$$\begin{array}{r} 14) \quad 4,002 \\ - 2,094 \\ \hline 1,908 \end{array}$$

$$\begin{array}{r} 15) \quad 9,009 \\ - 3,285 \\ \hline 5,724 \end{array}$$

$$\begin{array}{r} 16) \quad 9,009 \\ - 3,647 \\ \hline 5,362 \end{array}$$

$$\begin{array}{r} 17) \quad 1,007 \\ - \quad 946 \\ \hline 61 \end{array}$$

$$\begin{array}{r} 18) \quad 9,006 \\ - 5,065 \\ \hline 3,941 \end{array}$$

$$\begin{array}{r} 19) \quad 9,006 \\ - 4,373 \\ \hline 4,633 \end{array}$$

$$\begin{array}{r} 20) \quad 9,002 \\ - 1,475 \\ \hline 7,527 \end{array}$$

Answers

1. 1,468

2. 950

3. 7,617

4. 60

5. 3,053

6. 4,103

7. 3,354

8. 2,596

9. 3,728

10. 410

11. 2,092

12. 2,555

13. 224

14. 1,908

15. 5,724

16. 5,362

17. 61

18. 3,941

19. 4,633

20. 7,527



Use subtraction to solve the following problems.

Answers

3,053	410	60	2,596
7,617	3,354	3,728	2,555
2,092	4,103	1,468	950

$$\begin{array}{r} 1) \quad 8,002 \\ - 6,534 \\ \hline \end{array}$$

$$\begin{array}{r} 2) \quad 5,001 \\ - 4,051 \\ \hline \end{array}$$

$$\begin{array}{r} 3) \quad 8,003 \\ - \quad 386 \\ \hline \end{array}$$

$$\begin{array}{r} 4) \quad 5,004 \\ - 4,944 \\ \hline \end{array}$$

$$\begin{array}{r} 5) \quad 8,006 \\ - 4,953 \\ \hline \end{array}$$

$$\begin{array}{r} 6) \quad 5,009 \\ - \quad 906 \\ \hline \end{array}$$

$$\begin{array}{r} 7) \quad 6,005 \\ - 2,651 \\ \hline \end{array}$$

$$\begin{array}{r} 8) \quad 3,009 \\ - \quad 413 \\ \hline \end{array}$$

$$\begin{array}{r} 9) \quad 4,005 \\ - \quad 277 \\ \hline \end{array}$$

$$\begin{array}{r} 10) \quad 1,002 \\ - \quad 592 \\ \hline \end{array}$$

$$\begin{array}{r} 11) \quad 5,005 \\ - 2,913 \\ \hline \end{array}$$

$$\begin{array}{r} 12) \quad 9,008 \\ - 6,453 \\ \hline \end{array}$$

1. _____
2. _____
3. _____
4. _____
5. _____
6. _____
7. _____
8. _____
9. _____
10. _____
11. _____
12. _____



Use subtraction to solve the following problems.

Answers

$$\begin{array}{r} 1) \quad 9,004 \\ - 4,678 \\ \hline \end{array}$$

$$\begin{array}{r} 2) \quad 3,004 \\ - \quad 151 \\ \hline \end{array}$$

$$\begin{array}{r} 3) \quad 1,007 \\ - \quad 218 \\ \hline \end{array}$$

$$\begin{array}{r} 4) \quad 2,008 \\ - 1,632 \\ \hline \end{array}$$

$$\begin{array}{r} 5) \quad 6,001 \\ - 1,520 \\ \hline \end{array}$$

$$\begin{array}{r} 6) \quad 3,003 \\ - 1,561 \\ \hline \end{array}$$

$$\begin{array}{r} 7) \quad 1,001 \\ - \quad 452 \\ \hline \end{array}$$

$$\begin{array}{r} 8) \quad 7,001 \\ - 6,085 \\ \hline \end{array}$$

$$\begin{array}{r} 9) \quad 6,002 \\ - 4,693 \\ \hline \end{array}$$

$$\begin{array}{r} 10) \quad 3,001 \\ - \quad \quad 93 \\ \hline \end{array}$$

$$\begin{array}{r} 11) \quad 7,001 \\ - 1,400 \\ \hline \end{array}$$

$$\begin{array}{r} 12) \quad 2,006 \\ - 1,215 \\ \hline \end{array}$$

$$\begin{array}{r} 13) \quad 2,006 \\ - \quad 246 \\ \hline \end{array}$$

$$\begin{array}{r} 14) \quad 1,001 \\ - \quad 243 \\ \hline \end{array}$$

$$\begin{array}{r} 15) \quad 5,001 \\ - 2,151 \\ \hline \end{array}$$

$$\begin{array}{r} 16) \quad 3,006 \\ - 2,731 \\ \hline \end{array}$$

$$\begin{array}{r} 17) \quad 7,007 \\ - 2,133 \\ \hline \end{array}$$

$$\begin{array}{r} 18) \quad 6,006 \\ - 4,953 \\ \hline \end{array}$$

$$\begin{array}{r} 19) \quad 9,006 \\ - 6,276 \\ \hline \end{array}$$

$$\begin{array}{r} 20) \quad 3,006 \\ - 2,013 \\ \hline \end{array}$$

1. _____
2. _____
3. _____
4. _____
5. _____
6. _____
7. _____
8. _____
9. _____
10. _____
11. _____
12. _____
13. _____
14. _____
15. _____
16. _____
17. _____
18. _____
19. _____
20. _____



Use subtraction to solve the following problems.

$$\begin{array}{r} 1) \quad 9,004 \\ - 4,678 \\ \hline 4,326 \end{array}$$

$$\begin{array}{r} 2) \quad 3,004 \\ - \quad 151 \\ \hline 2,853 \end{array}$$

$$\begin{array}{r} 3) \quad 1,007 \\ - \quad 218 \\ \hline 789 \end{array}$$

$$\begin{array}{r} 4) \quad 2,008 \\ - 1,632 \\ \hline 376 \end{array}$$

$$\begin{array}{r} 5) \quad 6,001 \\ - 1,520 \\ \hline 4,481 \end{array}$$

$$\begin{array}{r} 6) \quad 3,003 \\ - 1,561 \\ \hline 1,442 \end{array}$$

$$\begin{array}{r} 7) \quad 1,001 \\ - \quad 452 \\ \hline 549 \end{array}$$

$$\begin{array}{r} 8) \quad 7,001 \\ - 6,085 \\ \hline 916 \end{array}$$

$$\begin{array}{r} 9) \quad 6,002 \\ - 4,693 \\ \hline 1,309 \end{array}$$

$$\begin{array}{r} 10) \quad 3,001 \\ - \quad \quad 93 \\ \hline 2,908 \end{array}$$

$$\begin{array}{r} 11) \quad 7,001 \\ - 1,400 \\ \hline 5,601 \end{array}$$

$$\begin{array}{r} 12) \quad 2,006 \\ - 1,215 \\ \hline 791 \end{array}$$

$$\begin{array}{r} 13) \quad 2,006 \\ - \quad 246 \\ \hline 1,760 \end{array}$$

$$\begin{array}{r} 14) \quad 1,001 \\ - \quad 243 \\ \hline 758 \end{array}$$

$$\begin{array}{r} 15) \quad 5,001 \\ - 2,151 \\ \hline 2,850 \end{array}$$

$$\begin{array}{r} 16) \quad 3,006 \\ - 2,731 \\ \hline 275 \end{array}$$

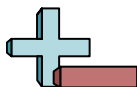
$$\begin{array}{r} 17) \quad 7,007 \\ - 2,133 \\ \hline 4,874 \end{array}$$

$$\begin{array}{r} 18) \quad 6,006 \\ - 4,953 \\ \hline 1,053 \end{array}$$

$$\begin{array}{r} 19) \quad 9,006 \\ - 6,276 \\ \hline 2,730 \end{array}$$

$$\begin{array}{r} 20) \quad 3,006 \\ - 2,013 \\ \hline 993 \end{array}$$

Answers1. 4,3262. 2,8533. 7894. 3765. 4,4816. 1,4427. 5498. 9169. 1,30910. 2,90811. 5,60112. 79113. 1,76014. 75815. 2,85016. 27517. 4,87418. 1,05319. 2,73020. 993



Use subtraction to solve the following problems.

Answers

791	4,481	789	916
5,601	376	549	2,853
4,326	1,442	2,908	1,309

1)
$$\begin{array}{r} 9,004 \\ - 4,678 \\ \hline \end{array}$$

2)
$$\begin{array}{r} 3,004 \\ - 151 \\ \hline \end{array}$$

3)
$$\begin{array}{r} 1,007 \\ - 218 \\ \hline \end{array}$$

4)
$$\begin{array}{r} 2,008 \\ - 1,632 \\ \hline \end{array}$$

5)
$$\begin{array}{r} 6,001 \\ - 1,520 \\ \hline \end{array}$$

6)
$$\begin{array}{r} 3,003 \\ - 1,561 \\ \hline \end{array}$$

7)
$$\begin{array}{r} 1,001 \\ - 452 \\ \hline \end{array}$$

8)
$$\begin{array}{r} 7,001 \\ - 6,085 \\ \hline \end{array}$$

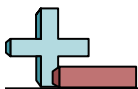
9)
$$\begin{array}{r} 6,002 \\ - 4,693 \\ \hline \end{array}$$

10)
$$\begin{array}{r} 3,001 \\ - 93 \\ \hline \end{array}$$

11)
$$\begin{array}{r} 7,001 \\ - 1,400 \\ \hline \end{array}$$

12)
$$\begin{array}{r} 2,006 \\ - 1,215 \\ \hline \end{array}$$

1. _____
2. _____
3. _____
4. _____
5. _____
6. _____
7. _____
8. _____
9. _____
10. _____
11. _____
12. _____



Use subtraction to solve the following problems.

Answers

$$\begin{array}{r} 1) \quad 5,009 \\ - 3,611 \\ \hline \end{array}$$

$$\begin{array}{r} 2) \quad 2,006 \\ - 1,573 \\ \hline \end{array}$$

$$\begin{array}{r} 3) \quad 9,002 \\ - 4,250 \\ \hline \end{array}$$

$$\begin{array}{r} 4) \quad 2,007 \\ - \quad 923 \\ \hline \end{array}$$

$$\begin{array}{r} 5) \quad 6,002 \\ - 3,444 \\ \hline \end{array}$$

$$\begin{array}{r} 6) \quad 8,004 \\ - 4,754 \\ \hline \end{array}$$

$$\begin{array}{r} 7) \quad 8,005 \\ - \quad 306 \\ \hline \end{array}$$

$$\begin{array}{r} 8) \quad 3,009 \\ - \quad 487 \\ \hline \end{array}$$

$$\begin{array}{r} 9) \quad 5,008 \\ - 2,414 \\ \hline \end{array}$$

$$\begin{array}{r} 10) \quad 5,004 \\ - 2,792 \\ \hline \end{array}$$

$$\begin{array}{r} 11) \quad 1,002 \\ - \quad 686 \\ \hline \end{array}$$

$$\begin{array}{r} 12) \quad 8,005 \\ - 5,720 \\ \hline \end{array}$$

$$\begin{array}{r} 13) \quad 4,008 \\ - \quad 586 \\ \hline \end{array}$$

$$\begin{array}{r} 14) \quad 9,007 \\ - 2,463 \\ \hline \end{array}$$

$$\begin{array}{r} 15) \quad 1,007 \\ - \quad 170 \\ \hline \end{array}$$

$$\begin{array}{r} 16) \quad 1,006 \\ - \quad 338 \\ \hline \end{array}$$

$$\begin{array}{r} 17) \quad 8,005 \\ - 1,741 \\ \hline \end{array}$$

$$\begin{array}{r} 18) \quad 7,002 \\ - 1,162 \\ \hline \end{array}$$

$$\begin{array}{r} 19) \quad 9,006 \\ - 2,288 \\ \hline \end{array}$$

$$\begin{array}{r} 20) \quad 6,005 \\ - 2,996 \\ \hline \end{array}$$

1. _____
2. _____
3. _____
4. _____
5. _____
6. _____
7. _____
8. _____
9. _____
10. _____
11. _____
12. _____
13. _____
14. _____
15. _____
16. _____
17. _____
18. _____
19. _____
20. _____



Use subtraction to solve the following problems.

$$\begin{array}{r} 1) \quad 5,009 \\ - 3,611 \\ \hline 1,398 \end{array}$$

$$\begin{array}{r} 2) \quad 2,006 \\ - 1,573 \\ \hline 433 \end{array}$$

$$\begin{array}{r} 3) \quad 9,002 \\ - 4,250 \\ \hline 4,752 \end{array}$$

$$\begin{array}{r} 4) \quad 2,007 \\ - \quad 923 \\ \hline 1,084 \end{array}$$

$$\begin{array}{r} 5) \quad 6,002 \\ - 3,444 \\ \hline 2,558 \end{array}$$

$$\begin{array}{r} 6) \quad 8,004 \\ - 4,754 \\ \hline 3,250 \end{array}$$

$$\begin{array}{r} 7) \quad 8,005 \\ - \quad 306 \\ \hline 7,699 \end{array}$$

$$\begin{array}{r} 8) \quad 3,009 \\ - \quad 487 \\ \hline 2,522 \end{array}$$

$$\begin{array}{r} 9) \quad 5,008 \\ - 2,414 \\ \hline 2,594 \end{array}$$

$$\begin{array}{r} 10) \quad 5,004 \\ - 2,792 \\ \hline 2,212 \end{array}$$

$$\begin{array}{r} 11) \quad 1,002 \\ - \quad 686 \\ \hline 316 \end{array}$$

$$\begin{array}{r} 12) \quad 8,005 \\ - 5,720 \\ \hline 2,285 \end{array}$$

$$\begin{array}{r} 13) \quad 4,008 \\ - \quad 586 \\ \hline 3,422 \end{array}$$

$$\begin{array}{r} 14) \quad 9,007 \\ - 2,463 \\ \hline 6,544 \end{array}$$

$$\begin{array}{r} 15) \quad 1,007 \\ - \quad 170 \\ \hline 837 \end{array}$$

$$\begin{array}{r} 16) \quad 1,006 \\ - \quad 338 \\ \hline 668 \end{array}$$

$$\begin{array}{r} 17) \quad 8,005 \\ - 1,741 \\ \hline 6,264 \end{array}$$

$$\begin{array}{r} 18) \quad 7,002 \\ - 1,162 \\ \hline 5,840 \end{array}$$

$$\begin{array}{r} 19) \quad 9,006 \\ - 2,288 \\ \hline 6,718 \end{array}$$

$$\begin{array}{r} 20) \quad 6,005 \\ - 2,996 \\ \hline 3,009 \end{array}$$

Answers

1. 1,398

2. 433

3. 4,752

4. 1,084

5. 2,558

6. 3,250

7. 7,699

8. 2,522

9. 2,594

10. 2,212

11. 316

12. 2,285

13. 3,422

14. 6,544

15. 837

16. 668

17. 6,264

18. 5,840

19. 6,718

20. 3,009



Use subtraction to solve the following problems.

Answers

316

2,212

2,558

2,522

1,084

7,699

1,398

3,250

433

4,752

2,594

2,285

1. _____

2. _____

3. _____

4. _____

5. _____

6. _____

7. _____

8. _____

9. _____

10. _____

11. _____

12. _____

$$\begin{array}{r} 1) \quad 5,009 \\ - 3,611 \\ \hline \end{array}$$

$$\begin{array}{r} 2) \quad 2,006 \\ - 1,573 \\ \hline \end{array}$$

$$\begin{array}{r} 3) \quad 9,002 \\ - 4,250 \\ \hline \end{array}$$

$$\begin{array}{r} 4) \quad 2,007 \\ - \quad 923 \\ \hline \end{array}$$

$$\begin{array}{r} 5) \quad 6,002 \\ - 3,444 \\ \hline \end{array}$$

$$\begin{array}{r} 6) \quad 8,004 \\ - 4,754 \\ \hline \end{array}$$

$$\begin{array}{r} 7) \quad 8,005 \\ - \quad 306 \\ \hline \end{array}$$

$$\begin{array}{r} 8) \quad 3,009 \\ - \quad 487 \\ \hline \end{array}$$

$$\begin{array}{r} 9) \quad 5,008 \\ - 2,414 \\ \hline \end{array}$$

$$\begin{array}{r} 10) \quad 5,004 \\ - 2,792 \\ \hline \end{array}$$

$$\begin{array}{r} 11) \quad 1,002 \\ - \quad 686 \\ \hline \end{array}$$

$$\begin{array}{r} 12) \quad 8,005 \\ - 5,720 \\ \hline \end{array}$$



Use subtraction to solve the following problems.

Answers

$$\begin{array}{r} 1) \quad 8,002 \\ - 4,125 \\ \hline \end{array}$$

$$\begin{array}{r} 2) \quad 3,004 \\ - 1,580 \\ \hline \end{array}$$

$$\begin{array}{r} 3) \quad 4,007 \\ - 2,985 \\ \hline \end{array}$$

$$\begin{array}{r} 4) \quad 9,001 \\ - 1,215 \\ \hline \end{array}$$

$$\begin{array}{r} 5) \quad 4,005 \\ - \quad 836 \\ \hline \end{array}$$

$$\begin{array}{r} 6) \quad 8,004 \\ - 1,637 \\ \hline \end{array}$$

$$\begin{array}{r} 7) \quad 7,001 \\ - 5,353 \\ \hline \end{array}$$

$$\begin{array}{r} 8) \quad 4,005 \\ - 1,109 \\ \hline \end{array}$$

$$\begin{array}{r} 9) \quad 1,003 \\ - \quad 545 \\ \hline \end{array}$$

$$\begin{array}{r} 10) \quad 8,004 \\ - 4,126 \\ \hline \end{array}$$

$$\begin{array}{r} 11) \quad 2,003 \\ - 1,104 \\ \hline \end{array}$$

$$\begin{array}{r} 12) \quad 7,003 \\ - 5,812 \\ \hline \end{array}$$

$$\begin{array}{r} 13) \quad 6,007 \\ - 5,881 \\ \hline \end{array}$$

$$\begin{array}{r} 14) \quad 3,004 \\ - 2,643 \\ \hline \end{array}$$

$$\begin{array}{r} 15) \quad 4,007 \\ - 1,641 \\ \hline \end{array}$$

$$\begin{array}{r} 16) \quad 5,009 \\ - 4,590 \\ \hline \end{array}$$

$$\begin{array}{r} 17) \quad 4,001 \\ - \quad 312 \\ \hline \end{array}$$

$$\begin{array}{r} 18) \quad 6,005 \\ - 4,882 \\ \hline \end{array}$$

$$\begin{array}{r} 19) \quad 5,008 \\ - 1,681 \\ \hline \end{array}$$

$$\begin{array}{r} 20) \quad 7,007 \\ - 1,731 \\ \hline \end{array}$$

1. _____

2. _____

3. _____

4. _____

5. _____

6. _____

7. _____

8. _____

9. _____

10. _____

11. _____

12. _____

13. _____

14. _____

15. _____

16. _____

17. _____

18. _____

19. _____

20. _____



Use subtraction to solve the following problems.

Answers

$$\begin{array}{r} 1) \quad 8,002 \\ - 4,125 \\ \hline 3,877 \end{array}$$

$$\begin{array}{r} 2) \quad 3,004 \\ - 1,580 \\ \hline 1,424 \end{array}$$

$$\begin{array}{r} 3) \quad 4,007 \\ - 2,985 \\ \hline 1,022 \end{array}$$

$$\begin{array}{r} 4) \quad 9,001 \\ - 1,215 \\ \hline 7,786 \end{array}$$

$$\begin{array}{r} 5) \quad 4,005 \\ - \quad 836 \\ \hline 3,169 \end{array}$$

$$\begin{array}{r} 6) \quad 8,004 \\ - 1,637 \\ \hline 6,367 \end{array}$$

$$\begin{array}{r} 7) \quad 7,001 \\ - 5,353 \\ \hline 1,648 \end{array}$$

$$\begin{array}{r} 8) \quad 4,005 \\ - 1,109 \\ \hline 2,896 \end{array}$$

$$\begin{array}{r} 9) \quad 1,003 \\ - \quad 545 \\ \hline 458 \end{array}$$

$$\begin{array}{r} 10) \quad 8,004 \\ - 4,126 \\ \hline 3,878 \end{array}$$

$$\begin{array}{r} 11) \quad 2,003 \\ - 1,104 \\ \hline 899 \end{array}$$

$$\begin{array}{r} 12) \quad 7,003 \\ - 5,812 \\ \hline 1,191 \end{array}$$

$$\begin{array}{r} 13) \quad 6,007 \\ - 5,881 \\ \hline 126 \end{array}$$

$$\begin{array}{r} 14) \quad 3,004 \\ - 2,643 \\ \hline 361 \end{array}$$

$$\begin{array}{r} 15) \quad 4,007 \\ - 1,641 \\ \hline 2,366 \end{array}$$

$$\begin{array}{r} 16) \quad 5,009 \\ - 4,590 \\ \hline 419 \end{array}$$

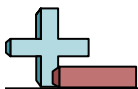
$$\begin{array}{r} 17) \quad 4,001 \\ - \quad 312 \\ \hline 3,689 \end{array}$$

$$\begin{array}{r} 18) \quad 6,005 \\ - 4,882 \\ \hline 1,123 \end{array}$$

$$\begin{array}{r} 19) \quad 5,008 \\ - 1,681 \\ \hline 3,327 \end{array}$$

$$\begin{array}{r} 20) \quad 7,007 \\ - 1,731 \\ \hline 5,276 \end{array}$$

1. 3,8772. 1,4243. 1,0224. 7,7865. 3,1696. 6,3677. 1,6488. 2,8969. 45810. 3,87811. 89912. 1,19113. 12614. 36115. 2,36616. 41917. 3,68918. 1,12319. 3,32720. 5,276



Use subtraction to solve the following problems.

Answers

1,648

3,878

458

899

3,877

1,191

3,169

6,367

7,786

2,896

1,424

1,022

$$\begin{array}{r} 1) \quad 8,002 \\ - 4,125 \\ \hline \end{array}$$

$$\begin{array}{r} 2) \quad 3,004 \\ - 1,580 \\ \hline \end{array}$$

$$\begin{array}{r} 3) \quad 4,007 \\ - 2,985 \\ \hline \end{array}$$

$$\begin{array}{r} 4) \quad 9,001 \\ - 1,215 \\ \hline \end{array}$$

$$\begin{array}{r} 5) \quad 4,005 \\ - \quad 836 \\ \hline \end{array}$$

$$\begin{array}{r} 6) \quad 8,004 \\ - 1,637 \\ \hline \end{array}$$

$$\begin{array}{r} 7) \quad 7,001 \\ - 5,353 \\ \hline \end{array}$$

$$\begin{array}{r} 8) \quad 4,005 \\ - 1,109 \\ \hline \end{array}$$

$$\begin{array}{r} 9) \quad 1,003 \\ - \quad 545 \\ \hline \end{array}$$

$$\begin{array}{r} 10) \quad 8,004 \\ - 4,126 \\ \hline \end{array}$$

$$\begin{array}{r} 11) \quad 2,003 \\ - 1,104 \\ \hline \end{array}$$

$$\begin{array}{r} 12) \quad 7,003 \\ - 5,812 \\ \hline \end{array}$$

1. _____

2. _____

3. _____

4. _____

5. _____

6. _____

7. _____

8. _____

9. _____

10. _____

11. _____

12. _____



Use subtraction to solve the following problems.

Answers

$$\begin{array}{r} 1) \quad 9,006 \\ - 6,202 \\ \hline \end{array}$$

$$\begin{array}{r} 2) \quad 3,006 \\ - \quad 711 \\ \hline \end{array}$$

$$\begin{array}{r} 3) \quad 9,005 \\ - 4,434 \\ \hline \end{array}$$

$$\begin{array}{r} 4) \quad 7,001 \\ - 6,842 \\ \hline \end{array}$$

$$\begin{array}{r} 5) \quad 2,005 \\ - \quad 832 \\ \hline \end{array}$$

$$\begin{array}{r} 6) \quad 5,001 \\ - 4,866 \\ \hline \end{array}$$

$$\begin{array}{r} 7) \quad 4,001 \\ - 1,373 \\ \hline \end{array}$$

$$\begin{array}{r} 8) \quad 4,006 \\ - 1,533 \\ \hline \end{array}$$

$$\begin{array}{r} 9) \quad 4,004 \\ - 1,246 \\ \hline \end{array}$$

$$\begin{array}{r} 10) \quad 8,008 \\ - 7,831 \\ \hline \end{array}$$

$$\begin{array}{r} 11) \quad 2,005 \\ - \quad 583 \\ \hline \end{array}$$

$$\begin{array}{r} 12) \quad 4,009 \\ - 1,718 \\ \hline \end{array}$$

$$\begin{array}{r} 13) \quad 9,002 \\ - 6,220 \\ \hline \end{array}$$

$$\begin{array}{r} 14) \quad 6,006 \\ - 4,623 \\ \hline \end{array}$$

$$\begin{array}{r} 15) \quad 4,005 \\ - 2,037 \\ \hline \end{array}$$

$$\begin{array}{r} 16) \quad 6,002 \\ - \quad 645 \\ \hline \end{array}$$

$$\begin{array}{r} 17) \quad 8,004 \\ - 1,138 \\ \hline \end{array}$$

$$\begin{array}{r} 18) \quad 5,003 \\ - \quad 354 \\ \hline \end{array}$$

$$\begin{array}{r} 19) \quad 3,008 \\ - \quad 23 \\ \hline \end{array}$$

$$\begin{array}{r} 20) \quad 4,001 \\ - 2,502 \\ \hline \end{array}$$

1. _____

2. _____

3. _____

4. _____

5. _____

6. _____

7. _____

8. _____

9. _____

10. _____

11. _____

12. _____

13. _____

14. _____

15. _____

16. _____

17. _____

18. _____

19. _____

20. _____



Use subtraction to solve the following problems.

Answers

$$\begin{array}{r} 1) \quad 9,006 \\ - 6,202 \\ \hline 2,804 \end{array}$$

$$\begin{array}{r} 2) \quad 3,006 \\ - \quad 711 \\ \hline 2,295 \end{array}$$

$$\begin{array}{r} 3) \quad 9,005 \\ - 4,434 \\ \hline 4,571 \end{array}$$

$$\begin{array}{r} 4) \quad 7,001 \\ - 6,842 \\ \hline 159 \end{array}$$

$$\begin{array}{r} 5) \quad 2,005 \\ - \quad 832 \\ \hline 1,173 \end{array}$$

$$\begin{array}{r} 6) \quad 5,001 \\ - 4,866 \\ \hline 135 \end{array}$$

$$\begin{array}{r} 7) \quad 4,001 \\ - 1,373 \\ \hline 2,628 \end{array}$$

$$\begin{array}{r} 8) \quad 4,006 \\ - 1,533 \\ \hline 2,473 \end{array}$$

$$\begin{array}{r} 9) \quad 4,004 \\ - 1,246 \\ \hline 2,758 \end{array}$$

$$\begin{array}{r} 10) \quad 8,008 \\ - 7,831 \\ \hline 177 \end{array}$$

$$\begin{array}{r} 11) \quad 2,005 \\ - \quad 583 \\ \hline 1,422 \end{array}$$

$$\begin{array}{r} 12) \quad 4,009 \\ - 1,718 \\ \hline 2,291 \end{array}$$

$$\begin{array}{r} 13) \quad 9,002 \\ - 6,220 \\ \hline 2,782 \end{array}$$

$$\begin{array}{r} 14) \quad 6,006 \\ - 4,623 \\ \hline 1,383 \end{array}$$

$$\begin{array}{r} 15) \quad 4,005 \\ - 2,037 \\ \hline 1,968 \end{array}$$

$$\begin{array}{r} 16) \quad 6,002 \\ - \quad 645 \\ \hline 5,357 \end{array}$$

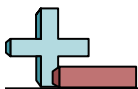
$$\begin{array}{r} 17) \quad 8,004 \\ - 1,138 \\ \hline 6,866 \end{array}$$

$$\begin{array}{r} 18) \quad 5,003 \\ - \quad 354 \\ \hline 4,649 \end{array}$$

$$\begin{array}{r} 19) \quad 3,008 \\ - \quad 23 \\ \hline 2,985 \end{array}$$

$$\begin{array}{r} 20) \quad 4,001 \\ - 2,502 \\ \hline 1,499 \end{array}$$

1. 2,8042. 2,2953. 4,5714. 1595. 1,1736. 1357. 2,6288. 2,4739. 2,75810. 17711. 1,42212. 2,29113. 2,78214. 1,38315. 1,96816. 5,35717. 6,86618. 4,64919. 2,98520. 1,499



Use subtraction to solve the following problems.

Answers

2,758	177	135	1,422
1,173	2,291	2,804	2,628
2,295	159	2,473	4,571

$$\begin{array}{r} 1) \quad 9,006 \\ - 6,202 \\ \hline \end{array}$$

$$\begin{array}{r} 2) \quad 3,006 \\ - \quad 711 \\ \hline \end{array}$$

$$\begin{array}{r} 3) \quad 9,005 \\ - 4,434 \\ \hline \end{array}$$

$$\begin{array}{r} 4) \quad 7,001 \\ - 6,842 \\ \hline \end{array}$$

$$\begin{array}{r} 5) \quad 2,005 \\ - \quad 832 \\ \hline \end{array}$$

$$\begin{array}{r} 6) \quad 5,001 \\ - 4,866 \\ \hline \end{array}$$

$$\begin{array}{r} 7) \quad 4,001 \\ - 1,373 \\ \hline \end{array}$$

$$\begin{array}{r} 8) \quad 4,006 \\ - 1,533 \\ \hline \end{array}$$

$$\begin{array}{r} 9) \quad 4,004 \\ - 1,246 \\ \hline \end{array}$$

$$\begin{array}{r} 10) \quad 8,008 \\ - 7,831 \\ \hline \end{array}$$

$$\begin{array}{r} 11) \quad 2,005 \\ - \quad 583 \\ \hline \end{array}$$

$$\begin{array}{r} 12) \quad 4,009 \\ - 1,718 \\ \hline \end{array}$$

1. _____
2. _____
3. _____
4. _____
5. _____
6. _____
7. _____
8. _____
9. _____
10. _____
11. _____
12. _____



Use subtraction to solve the following problems.

Answers

$$\begin{array}{r} 1) \quad 6,005 \\ - \quad 680 \\ \hline \end{array}$$

$$\begin{array}{r} 2) \quad 6,009 \\ - \quad 502 \\ \hline \end{array}$$

$$\begin{array}{r} 3) \quad 7,001 \\ - 4,251 \\ \hline \end{array}$$

$$\begin{array}{r} 4) \quad 3,001 \\ - 2,511 \\ \hline \end{array}$$

$$\begin{array}{r} 5) \quad 3,007 \\ - 1,298 \\ \hline \end{array}$$

$$\begin{array}{r} 6) \quad 2,001 \\ - 1,927 \\ \hline \end{array}$$

$$\begin{array}{r} 7) \quad 9,006 \\ - 1,116 \\ \hline \end{array}$$

$$\begin{array}{r} 8) \quad 3,009 \\ - 2,373 \\ \hline \end{array}$$

$$\begin{array}{r} 9) \quad 2,005 \\ - 1,630 \\ \hline \end{array}$$

$$\begin{array}{r} 10) \quad 9,006 \\ - 6,053 \\ \hline \end{array}$$

$$\begin{array}{r} 11) \quad 3,005 \\ - 2,268 \\ \hline \end{array}$$

$$\begin{array}{r} 12) \quad 3,003 \\ - 1,587 \\ \hline \end{array}$$

$$\begin{array}{r} 13) \quad 4,005 \\ - 2,079 \\ \hline \end{array}$$

$$\begin{array}{r} 14) \quad 1,003 \\ - \quad 858 \\ \hline \end{array}$$

$$\begin{array}{r} 15) \quad 1,004 \\ - \quad 962 \\ \hline \end{array}$$

$$\begin{array}{r} 16) \quad 7,001 \\ - 1,859 \\ \hline \end{array}$$

$$\begin{array}{r} 17) \quad 1,009 \\ - 1,005 \\ \hline \end{array}$$

$$\begin{array}{r} 18) \quad 4,001 \\ - \quad 944 \\ \hline \end{array}$$

$$\begin{array}{r} 19) \quad 5,003 \\ - 4,180 \\ \hline \end{array}$$

$$\begin{array}{r} 20) \quad 6,001 \\ - 4,027 \\ \hline \end{array}$$

1. _____

2. _____

3. _____

4. _____

5. _____

6. _____

7. _____

8. _____

9. _____

10. _____

11. _____

12. _____

13. _____

14. _____

15. _____

16. _____

17. _____

18. _____

19. _____

20. _____



Use subtraction to solve the following problems.

Answers

$$\begin{array}{r} 1) \quad 6,005 \\ - \quad 680 \\ \hline 5,325 \end{array}$$

$$\begin{array}{r} 2) \quad 6,009 \\ - \quad 502 \\ \hline 5,507 \end{array}$$

$$\begin{array}{r} 3) \quad 7,001 \\ - 4,251 \\ \hline 2,750 \end{array}$$

$$\begin{array}{r} 4) \quad 3,001 \\ - 2,511 \\ \hline 490 \end{array}$$

$$\begin{array}{r} 5) \quad 3,007 \\ - 1,298 \\ \hline 1,709 \end{array}$$

$$\begin{array}{r} 6) \quad 2,001 \\ - 1,927 \\ \hline 74 \end{array}$$

$$\begin{array}{r} 7) \quad 9,006 \\ - 1,116 \\ \hline 7,890 \end{array}$$

$$\begin{array}{r} 8) \quad 3,009 \\ - 2,373 \\ \hline 636 \end{array}$$

$$\begin{array}{r} 9) \quad 2,005 \\ - 1,630 \\ \hline 375 \end{array}$$

$$\begin{array}{r} 10) \quad 9,006 \\ - 6,053 \\ \hline 2,953 \end{array}$$

$$\begin{array}{r} 11) \quad 3,005 \\ - 2,268 \\ \hline 737 \end{array}$$

$$\begin{array}{r} 12) \quad 3,003 \\ - 1,587 \\ \hline 1,416 \end{array}$$

$$\begin{array}{r} 13) \quad 4,005 \\ - 2,079 \\ \hline 1,926 \end{array}$$

$$\begin{array}{r} 14) \quad 1,003 \\ - \quad 858 \\ \hline 145 \end{array}$$

$$\begin{array}{r} 15) \quad 1,004 \\ - \quad 962 \\ \hline 42 \end{array}$$

$$\begin{array}{r} 16) \quad 7,001 \\ - 1,859 \\ \hline 5,142 \end{array}$$

$$\begin{array}{r} 17) \quad 1,009 \\ - 1,005 \\ \hline 4 \end{array}$$

$$\begin{array}{r} 18) \quad 4,001 \\ - \quad 944 \\ \hline 3,057 \end{array}$$

$$\begin{array}{r} 19) \quad 5,003 \\ - 4,180 \\ \hline 823 \end{array}$$

$$\begin{array}{r} 20) \quad 6,001 \\ - 4,027 \\ \hline 1,974 \end{array}$$

1. 5,3252. 5,5073. 2,7504. 4905. 1,7096. 747. 7,8908. 6369. 37510. 2,95311. 73712. 1,41613. 1,92614. 14515. 4216. 5,14217. 418. 3,05719. 82320. 1,974



Use subtraction to solve the following problems.

Answers

490

7,890

5,507

1,709

2,750

636

737

375

74

1,416

5,325

2,953

$$\begin{array}{r} 1) \quad 6,005 \\ - \quad 680 \\ \hline \end{array}$$

$$\begin{array}{r} 2) \quad 6,009 \\ - \quad 502 \\ \hline \end{array}$$

$$\begin{array}{r} 3) \quad 7,001 \\ - 4,251 \\ \hline \end{array}$$

$$\begin{array}{r} 4) \quad 3,001 \\ - 2,511 \\ \hline \end{array}$$

$$\begin{array}{r} 5) \quad 3,007 \\ - 1,298 \\ \hline \end{array}$$

$$\begin{array}{r} 6) \quad 2,001 \\ - 1,927 \\ \hline \end{array}$$

$$\begin{array}{r} 7) \quad 9,006 \\ - 1,116 \\ \hline \end{array}$$

$$\begin{array}{r} 8) \quad 3,009 \\ - 2,373 \\ \hline \end{array}$$

$$\begin{array}{r} 9) \quad 2,005 \\ - 1,630 \\ \hline \end{array}$$

$$\begin{array}{r} 10) \quad 9,006 \\ - 6,053 \\ \hline \end{array}$$

$$\begin{array}{r} 11) \quad 3,005 \\ - 2,268 \\ \hline \end{array}$$

$$\begin{array}{r} 12) \quad 3,003 \\ - 1,587 \\ \hline \end{array}$$

1. _____
2. _____
3. _____
4. _____
5. _____
6. _____
7. _____
8. _____
9. _____
10. _____
11. _____
12. _____



Use subtraction to solve the following problems.

Answers

$$\begin{array}{r} 1) \quad 7,005 \\ - 2,601 \\ \hline \end{array}$$

$$\begin{array}{r} 2) \quad 5,007 \\ - 1,890 \\ \hline \end{array}$$

$$\begin{array}{r} 3) \quad 4,001 \\ - \quad 199 \\ \hline \end{array}$$

$$\begin{array}{r} 4) \quad 9,007 \\ - 8,793 \\ \hline \end{array}$$

$$\begin{array}{r} 5) \quad 7,001 \\ - 6,507 \\ \hline \end{array}$$

$$\begin{array}{r} 6) \quad 8,009 \\ - 2,778 \\ \hline \end{array}$$

$$\begin{array}{r} 7) \quad 2,007 \\ - \quad 656 \\ \hline \end{array}$$

$$\begin{array}{r} 8) \quad 7,008 \\ - 1,288 \\ \hline \end{array}$$

$$\begin{array}{r} 9) \quad 2,008 \\ - 1,148 \\ \hline \end{array}$$

$$\begin{array}{r} 10) \quad 8,008 \\ - 5,078 \\ \hline \end{array}$$

$$\begin{array}{r} 11) \quad 5,003 \\ - \quad 770 \\ \hline \end{array}$$

$$\begin{array}{r} 12) \quad 6,006 \\ - \quad 549 \\ \hline \end{array}$$

$$\begin{array}{r} 13) \quad 2,002 \\ - 1,189 \\ \hline \end{array}$$

$$\begin{array}{r} 14) \quad 7,001 \\ - \quad 983 \\ \hline \end{array}$$

$$\begin{array}{r} 15) \quad 7,005 \\ - 3,788 \\ \hline \end{array}$$

$$\begin{array}{r} 16) \quad 7,005 \\ - 5,561 \\ \hline \end{array}$$

$$\begin{array}{r} 17) \quad 4,002 \\ - 3,242 \\ \hline \end{array}$$

$$\begin{array}{r} 18) \quad 4,008 \\ - 3,262 \\ \hline \end{array}$$

$$\begin{array}{r} 19) \quad 9,005 \\ - 7,330 \\ \hline \end{array}$$

$$\begin{array}{r} 20) \quad 5,002 \\ - 3,509 \\ \hline \end{array}$$

1. _____

2. _____

3. _____

4. _____

5. _____

6. _____

7. _____

8. _____

9. _____

10. _____

11. _____

12. _____

13. _____

14. _____

15. _____

16. _____

17. _____

18. _____

19. _____

20. _____



Use subtraction to solve the following problems.

$$\begin{array}{r} 1) \quad 7,005 \\ - 2,601 \\ \hline 4,404 \end{array}$$

$$\begin{array}{r} 2) \quad 5,007 \\ - 1,890 \\ \hline 3,117 \end{array}$$

$$\begin{array}{r} 3) \quad 4,001 \\ - \quad 199 \\ \hline 3,802 \end{array}$$

$$\begin{array}{r} 4) \quad 9,007 \\ - 8,793 \\ \hline 214 \end{array}$$

$$\begin{array}{r} 5) \quad 7,001 \\ - 6,507 \\ \hline 494 \end{array}$$

$$\begin{array}{r} 6) \quad 8,009 \\ - 2,778 \\ \hline 5,231 \end{array}$$

$$\begin{array}{r} 7) \quad 2,007 \\ - \quad 656 \\ \hline 1,351 \end{array}$$

$$\begin{array}{r} 8) \quad 7,008 \\ - 1,288 \\ \hline 5,720 \end{array}$$

$$\begin{array}{r} 9) \quad 2,008 \\ - 1,148 \\ \hline 860 \end{array}$$

$$\begin{array}{r} 10) \quad 8,008 \\ - 5,078 \\ \hline 2,930 \end{array}$$

$$\begin{array}{r} 11) \quad 5,003 \\ - \quad 770 \\ \hline 4,233 \end{array}$$

$$\begin{array}{r} 12) \quad 6,006 \\ - \quad 549 \\ \hline 5,457 \end{array}$$

$$\begin{array}{r} 13) \quad 2,002 \\ - 1,189 \\ \hline 813 \end{array}$$

$$\begin{array}{r} 14) \quad 7,001 \\ - \quad 983 \\ \hline 6,018 \end{array}$$

$$\begin{array}{r} 15) \quad 7,005 \\ - 3,788 \\ \hline 3,217 \end{array}$$

$$\begin{array}{r} 16) \quad 7,005 \\ - 5,561 \\ \hline 1,444 \end{array}$$

$$\begin{array}{r} 17) \quad 4,002 \\ - 3,242 \\ \hline 760 \end{array}$$

$$\begin{array}{r} 18) \quad 4,008 \\ - 3,262 \\ \hline 746 \end{array}$$

$$\begin{array}{r} 19) \quad 9,005 \\ - 7,330 \\ \hline 1,675 \end{array}$$

$$\begin{array}{r} 20) \quad 5,002 \\ - 3,509 \\ \hline 1,493 \end{array}$$

Answers1. 4,4042. 3,1173. 3,8024. 2145. 4946. 5,2317. 1,3518. 5,7209. 86010. 2,93011. 4,23312. 5,45713. 81314. 6,01815. 3,21716. 1,44417. 76018. 74619. 1,67520. 1,493



Use subtraction to solve the following problems.

Answers

2,930

4,404

1,351

494

214

5,720

4,233

5,231

5,457

3,117

860

3,802

$$\begin{array}{r} 1) \quad 7,005 \\ - 2,601 \\ \hline \end{array}$$

$$\begin{array}{r} 2) \quad 5,007 \\ - 1,890 \\ \hline \end{array}$$

$$\begin{array}{r} 3) \quad 4,001 \\ - 199 \\ \hline \end{array}$$

$$\begin{array}{r} 4) \quad 9,007 \\ - 8,793 \\ \hline \end{array}$$

$$\begin{array}{r} 5) \quad 7,001 \\ - 6,507 \\ \hline \end{array}$$

$$\begin{array}{r} 6) \quad 8,009 \\ - 2,778 \\ \hline \end{array}$$

$$\begin{array}{r} 7) \quad 2,007 \\ - 656 \\ \hline \end{array}$$

$$\begin{array}{r} 8) \quad 7,008 \\ - 1,288 \\ \hline \end{array}$$

$$\begin{array}{r} 9) \quad 2,008 \\ - 1,148 \\ \hline \end{array}$$

$$\begin{array}{r} 10) \quad 8,008 \\ - 5,078 \\ \hline \end{array}$$

$$\begin{array}{r} 11) \quad 5,003 \\ - 770 \\ \hline \end{array}$$

$$\begin{array}{r} 12) \quad 6,006 \\ - 549 \\ \hline \end{array}$$

1. _____
2. _____
3. _____
4. _____
5. _____
6. _____
7. _____
8. _____
9. _____
10. _____
11. _____
12. _____



Use subtraction to solve the following problems.

Answers

$$\begin{array}{r} 1) \quad 6,009 \\ - \quad 971 \\ \hline \end{array}$$

$$\begin{array}{r} 2) \quad 2,003 \\ - 1,261 \\ \hline \end{array}$$

$$\begin{array}{r} 3) \quad 2,006 \\ - \quad 920 \\ \hline \end{array}$$

$$\begin{array}{r} 4) \quad 5,006 \\ - 2,496 \\ \hline \end{array}$$

$$\begin{array}{r} 5) \quad 6,003 \\ - 5,839 \\ \hline \end{array}$$

$$\begin{array}{r} 6) \quad 3,008 \\ - \quad 86 \\ \hline \end{array}$$

$$\begin{array}{r} 7) \quad 3,009 \\ - \quad 451 \\ \hline \end{array}$$

$$\begin{array}{r} 8) \quad 1,007 \\ - \quad 934 \\ \hline \end{array}$$

$$\begin{array}{r} 9) \quad 7,008 \\ - 3,616 \\ \hline \end{array}$$

$$\begin{array}{r} 10) \quad 3,003 \\ - \quad 187 \\ \hline \end{array}$$

$$\begin{array}{r} 11) \quad 6,008 \\ - 4,525 \\ \hline \end{array}$$

$$\begin{array}{r} 12) \quad 1,001 \\ - \quad 708 \\ \hline \end{array}$$

$$\begin{array}{r} 13) \quad 2,009 \\ - 1,968 \\ \hline \end{array}$$

$$\begin{array}{r} 14) \quad 4,008 \\ - 1,852 \\ \hline \end{array}$$

$$\begin{array}{r} 15) \quad 4,002 \\ - 3,694 \\ \hline \end{array}$$

$$\begin{array}{r} 16) \quad 6,004 \\ - 3,319 \\ \hline \end{array}$$

$$\begin{array}{r} 17) \quad 4,003 \\ - \quad 264 \\ \hline \end{array}$$

$$\begin{array}{r} 18) \quad 6,006 \\ - 5,697 \\ \hline \end{array}$$

$$\begin{array}{r} 19) \quad 3,008 \\ - 2,565 \\ \hline \end{array}$$

$$\begin{array}{r} 20) \quad 7,001 \\ - 6,726 \\ \hline \end{array}$$

1. _____
2. _____
3. _____
4. _____
5. _____
6. _____
7. _____
8. _____
9. _____
10. _____
11. _____
12. _____
13. _____
14. _____
15. _____
16. _____
17. _____
18. _____
19. _____
20. _____



Use subtraction to solve the following problems.

Answers

$$\begin{array}{r} 1) \quad 6,009 \\ - \quad 971 \\ \hline 5,038 \end{array}$$

$$\begin{array}{r} 2) \quad 2,003 \\ - 1,261 \\ \hline 742 \end{array}$$

$$\begin{array}{r} 3) \quad 2,006 \\ - \quad 920 \\ \hline 1,086 \end{array}$$

$$\begin{array}{r} 4) \quad 5,006 \\ - 2,496 \\ \hline 2,510 \end{array}$$

$$\begin{array}{r} 5) \quad 6,003 \\ - 5,839 \\ \hline 164 \end{array}$$

$$\begin{array}{r} 6) \quad 3,008 \\ - \quad 86 \\ \hline 2,922 \end{array}$$

$$\begin{array}{r} 7) \quad 3,009 \\ - \quad 451 \\ \hline 2,558 \end{array}$$

$$\begin{array}{r} 8) \quad 1,007 \\ - \quad 934 \\ \hline 73 \end{array}$$

$$\begin{array}{r} 9) \quad 7,008 \\ - 3,616 \\ \hline 3,392 \end{array}$$

$$\begin{array}{r} 10) \quad 3,003 \\ - \quad 187 \\ \hline 2,816 \end{array}$$

$$\begin{array}{r} 11) \quad 6,008 \\ - 4,525 \\ \hline 1,483 \end{array}$$

$$\begin{array}{r} 12) \quad 1,001 \\ - \quad 708 \\ \hline 293 \end{array}$$

$$\begin{array}{r} 13) \quad 2,009 \\ - 1,968 \\ \hline 41 \end{array}$$

$$\begin{array}{r} 14) \quad 4,008 \\ - 1,852 \\ \hline 2,156 \end{array}$$

$$\begin{array}{r} 15) \quad 4,002 \\ - 3,694 \\ \hline 308 \end{array}$$

$$\begin{array}{r} 16) \quad 6,004 \\ - 3,319 \\ \hline 2,685 \end{array}$$

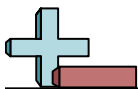
$$\begin{array}{r} 17) \quad 4,003 \\ - \quad 264 \\ \hline 3,739 \end{array}$$

$$\begin{array}{r} 18) \quad 6,006 \\ - 5,697 \\ \hline 309 \end{array}$$

$$\begin{array}{r} 19) \quad 3,008 \\ - 2,565 \\ \hline 443 \end{array}$$

$$\begin{array}{r} 20) \quad 7,001 \\ - 6,726 \\ \hline 275 \end{array}$$

1. 5,0382. 7423. 1,0864. 2,5105. 1646. 2,9227. 2,5588. 739. 3,39210. 2,81611. 1,48312. 29313. 4114. 2,15615. 30816. 2,68517. 3,73918. 30919. 44320. 275



Use subtraction to solve the following problems.

Answers

2,922	73	1,483	164
1,086	2,510	2,558	2,816
742	5,038	293	3,392

$$\begin{array}{r} 1) \quad 6,009 \\ - \quad 971 \\ \hline \end{array}$$

$$\begin{array}{r} 2) \quad 2,003 \\ - 1,261 \\ \hline \end{array}$$

$$\begin{array}{r} 3) \quad 2,006 \\ - \quad 920 \\ \hline \end{array}$$

$$\begin{array}{r} 4) \quad 5,006 \\ - 2,496 \\ \hline \end{array}$$

$$\begin{array}{r} 5) \quad 6,003 \\ - 5,839 \\ \hline \end{array}$$

$$\begin{array}{r} 6) \quad 3,008 \\ - \quad 86 \\ \hline \end{array}$$

$$\begin{array}{r} 7) \quad 3,009 \\ - \quad 451 \\ \hline \end{array}$$

$$\begin{array}{r} 8) \quad 1,007 \\ - \quad 934 \\ \hline \end{array}$$

$$\begin{array}{r} 9) \quad 7,008 \\ - 3,616 \\ \hline \end{array}$$

$$\begin{array}{r} 10) \quad 3,003 \\ - \quad 187 \\ \hline \end{array}$$

$$\begin{array}{r} 11) \quad 6,008 \\ - 4,525 \\ \hline \end{array}$$

$$\begin{array}{r} 12) \quad 1,001 \\ - \quad 708 \\ \hline \end{array}$$

1. _____
2. _____
3. _____
4. _____
5. _____
6. _____
7. _____
8. _____
9. _____
10. _____
11. _____
12. _____



Use subtraction to solve the following problems.

Answers

$$\begin{array}{r} 1) \quad 7,001 \\ - 4,090 \\ \hline \end{array}$$

$$\begin{array}{r} 2) \quad 5,008 \\ - \quad 18 \\ \hline \end{array}$$

$$\begin{array}{r} 3) \quad 2,006 \\ - 1,822 \\ \hline \end{array}$$

$$\begin{array}{r} 4) \quad 1,008 \\ - \quad 567 \\ \hline \end{array}$$

$$\begin{array}{r} 5) \quad 2,003 \\ - 1,797 \\ \hline \end{array}$$

$$\begin{array}{r} 6) \quad 7,009 \\ - 6,572 \\ \hline \end{array}$$

$$\begin{array}{r} 7) \quad 9,008 \\ - 4,891 \\ \hline \end{array}$$

$$\begin{array}{r} 8) \quad 1,009 \\ - \quad 19 \\ \hline \end{array}$$

$$\begin{array}{r} 9) \quad 5,008 \\ - \quad 621 \\ \hline \end{array}$$

$$\begin{array}{r} 10) \quad 2,005 \\ - \quad 94 \\ \hline \end{array}$$

$$\begin{array}{r} 11) \quad 9,004 \\ - 7,490 \\ \hline \end{array}$$

$$\begin{array}{r} 12) \quad 7,008 \\ - \quad 114 \\ \hline \end{array}$$

$$\begin{array}{r} 13) \quad 4,009 \\ - 2,929 \\ \hline \end{array}$$

$$\begin{array}{r} 14) \quad 3,008 \\ - 2,066 \\ \hline \end{array}$$

$$\begin{array}{r} 15) \quad 5,003 \\ - 4,734 \\ \hline \end{array}$$

$$\begin{array}{r} 16) \quad 6,005 \\ - 2,373 \\ \hline \end{array}$$

$$\begin{array}{r} 17) \quad 9,005 \\ - 7,032 \\ \hline \end{array}$$

$$\begin{array}{r} 18) \quad 5,004 \\ - 2,696 \\ \hline \end{array}$$

$$\begin{array}{r} 19) \quad 2,004 \\ - \quad 504 \\ \hline \end{array}$$

$$\begin{array}{r} 20) \quad 6,002 \\ - 3,550 \\ \hline \end{array}$$

1. _____

2. _____

3. _____

4. _____

5. _____

6. _____

7. _____

8. _____

9. _____

10. _____

11. _____

12. _____

13. _____

14. _____

15. _____

16. _____

17. _____

18. _____

19. _____

20. _____



Use subtraction to solve the following problems.

Answers

$$\begin{array}{r} 1) \quad 7,001 \\ - 4,090 \\ \hline 2,911 \end{array}$$

$$\begin{array}{r} 2) \quad 5,008 \\ - \quad 18 \\ \hline 4,990 \end{array}$$

$$\begin{array}{r} 3) \quad 2,006 \\ - 1,822 \\ \hline 184 \end{array}$$

$$\begin{array}{r} 4) \quad 1,008 \\ - \quad 567 \\ \hline 441 \end{array}$$

$$\begin{array}{r} 5) \quad 2,003 \\ - 1,797 \\ \hline 206 \end{array}$$

$$\begin{array}{r} 6) \quad 7,009 \\ - 6,572 \\ \hline 437 \end{array}$$

$$\begin{array}{r} 7) \quad 9,008 \\ - 4,891 \\ \hline 4,117 \end{array}$$

$$\begin{array}{r} 8) \quad 1,009 \\ - \quad 19 \\ \hline 990 \end{array}$$

$$\begin{array}{r} 9) \quad 5,008 \\ - \quad 621 \\ \hline 4,387 \end{array}$$

$$\begin{array}{r} 10) \quad 2,005 \\ - \quad 94 \\ \hline 1,911 \end{array}$$

$$\begin{array}{r} 11) \quad 9,004 \\ - 7,490 \\ \hline 1,514 \end{array}$$

$$\begin{array}{r} 12) \quad 7,008 \\ - \quad 114 \\ \hline 6,894 \end{array}$$

$$\begin{array}{r} 13) \quad 4,009 \\ - 2,929 \\ \hline 1,080 \end{array}$$

$$\begin{array}{r} 14) \quad 3,008 \\ - 2,066 \\ \hline 942 \end{array}$$

$$\begin{array}{r} 15) \quad 5,003 \\ - 4,734 \\ \hline 269 \end{array}$$

$$\begin{array}{r} 16) \quad 6,005 \\ - 2,373 \\ \hline 3,632 \end{array}$$

$$\begin{array}{r} 17) \quad 9,005 \\ - 7,032 \\ \hline 1,973 \end{array}$$

$$\begin{array}{r} 18) \quad 5,004 \\ - 2,696 \\ \hline 2,308 \end{array}$$

$$\begin{array}{r} 19) \quad 2,004 \\ - \quad 504 \\ \hline 1,500 \end{array}$$

$$\begin{array}{r} 20) \quad 6,002 \\ - 3,550 \\ \hline 2,452 \end{array}$$

1. 2,9112. 4,9903. 1844. 4415. 2066. 4377. 4,1178. 9909. 4,38710. 1,91111. 1,51412. 6,89413. 1,08014. 94215. 26916. 3,63217. 1,97318. 2,30819. 1,50020. 2,452



Use subtraction to solve the following problems.

Answers

2,911

437

4,387

4,990

206

990

4,117

1,514

1,911

184

441

6,894

$$\begin{array}{r} 1) \quad 7,001 \\ - 4,090 \\ \hline \end{array}$$

$$\begin{array}{r} 2) \quad 5,008 \\ - \quad 18 \\ \hline \end{array}$$

$$\begin{array}{r} 3) \quad 2,006 \\ - 1,822 \\ \hline \end{array}$$

$$\begin{array}{r} 4) \quad 1,008 \\ - \quad 567 \\ \hline \end{array}$$

$$\begin{array}{r} 5) \quad 2,003 \\ - 1,797 \\ \hline \end{array}$$

$$\begin{array}{r} 6) \quad 7,009 \\ - 6,572 \\ \hline \end{array}$$

$$\begin{array}{r} 7) \quad 9,008 \\ - 4,891 \\ \hline \end{array}$$

$$\begin{array}{r} 8) \quad 1,009 \\ - \quad 19 \\ \hline \end{array}$$

$$\begin{array}{r} 9) \quad 5,008 \\ - \quad 621 \\ \hline \end{array}$$

$$\begin{array}{r} 10) \quad 2,005 \\ - \quad 94 \\ \hline \end{array}$$

$$\begin{array}{r} 11) \quad 9,004 \\ - 7,490 \\ \hline \end{array}$$

$$\begin{array}{r} 12) \quad 7,008 \\ - \quad 114 \\ \hline \end{array}$$

1. _____
2. _____
3. _____
4. _____
5. _____
6. _____
7. _____
8. _____
9. _____
10. _____
11. _____
12. _____



Use subtraction to solve the following problems.

Answers

$$\begin{array}{r} 1) \quad 9,008 \\ - 7,564 \\ \hline \end{array}$$

$$\begin{array}{r} 2) \quad 8,004 \\ - 3,017 \\ \hline \end{array}$$

$$\begin{array}{r} 3) \quad 4,001 \\ - 3,594 \\ \hline \end{array}$$

$$\begin{array}{r} 4) \quad 7,003 \\ - 2,714 \\ \hline \end{array}$$

$$\begin{array}{r} 5) \quad 8,009 \\ - 1,626 \\ \hline \end{array}$$

$$\begin{array}{r} 6) \quad 2,001 \\ - 1,328 \\ \hline \end{array}$$

$$\begin{array}{r} 7) \quad 3,008 \\ - 2,465 \\ \hline \end{array}$$

$$\begin{array}{r} 8) \quad 9,002 \\ - \quad 674 \\ \hline \end{array}$$

$$\begin{array}{r} 9) \quad 9,006 \\ - 5,968 \\ \hline \end{array}$$

$$\begin{array}{r} 10) \quad 1,007 \\ - 1,006 \\ \hline \end{array}$$

$$\begin{array}{r} 11) \quad 2,003 \\ - 1,660 \\ \hline \end{array}$$

$$\begin{array}{r} 12) \quad 7,007 \\ - 1,631 \\ \hline \end{array}$$

$$\begin{array}{r} 13) \quad 1,001 \\ - \quad 249 \\ \hline \end{array}$$

$$\begin{array}{r} 14) \quad 5,009 \\ - 3,292 \\ \hline \end{array}$$

$$\begin{array}{r} 15) \quad 4,002 \\ - 3,003 \\ \hline \end{array}$$

$$\begin{array}{r} 16) \quad 6,008 \\ - \quad 806 \\ \hline \end{array}$$

$$\begin{array}{r} 17) \quad 2,001 \\ - \quad 223 \\ \hline \end{array}$$

$$\begin{array}{r} 18) \quad 4,008 \\ - \quad 558 \\ \hline \end{array}$$

$$\begin{array}{r} 19) \quad 1,007 \\ - \quad 762 \\ \hline \end{array}$$

$$\begin{array}{r} 20) \quad 7,002 \\ - 4,491 \\ \hline \end{array}$$

1. _____

2. _____

3. _____

4. _____

5. _____

6. _____

7. _____

8. _____

9. _____

10. _____

11. _____

12. _____

13. _____

14. _____

15. _____

16. _____

17. _____

18. _____

19. _____

20. _____



Use subtraction to solve the following problems.

Answers

$$\begin{array}{r} 1) \quad 9,008 \\ - 7,564 \\ \hline 1,444 \end{array}$$

$$\begin{array}{r} 2) \quad 8,004 \\ - 3,017 \\ \hline 4,987 \end{array}$$

$$\begin{array}{r} 3) \quad 4,001 \\ - 3,594 \\ \hline 407 \end{array}$$

$$\begin{array}{r} 4) \quad 7,003 \\ - 2,714 \\ \hline 4,289 \end{array}$$

$$\begin{array}{r} 5) \quad 8,009 \\ - 1,626 \\ \hline 6,383 \end{array}$$

$$\begin{array}{r} 6) \quad 2,001 \\ - 1,328 \\ \hline 673 \end{array}$$

$$\begin{array}{r} 7) \quad 3,008 \\ - 2,465 \\ \hline 543 \end{array}$$

$$\begin{array}{r} 8) \quad 9,002 \\ - \quad 674 \\ \hline 8,328 \end{array}$$

$$\begin{array}{r} 9) \quad 9,006 \\ - 5,968 \\ \hline 3,038 \end{array}$$

$$\begin{array}{r} 10) \quad 1,007 \\ - 1,006 \\ \hline 1 \end{array}$$

$$\begin{array}{r} 11) \quad 2,003 \\ - 1,660 \\ \hline 343 \end{array}$$

$$\begin{array}{r} 12) \quad 7,007 \\ - 1,631 \\ \hline 5,376 \end{array}$$

$$\begin{array}{r} 13) \quad 1,001 \\ - \quad 249 \\ \hline 752 \end{array}$$

$$\begin{array}{r} 14) \quad 5,009 \\ - 3,292 \\ \hline 1,717 \end{array}$$

$$\begin{array}{r} 15) \quad 4,002 \\ - 3,003 \\ \hline 999 \end{array}$$

$$\begin{array}{r} 16) \quad 6,008 \\ - \quad 806 \\ \hline 5,202 \end{array}$$

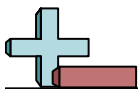
$$\begin{array}{r} 17) \quad 2,001 \\ - \quad 223 \\ \hline 1,778 \end{array}$$

$$\begin{array}{r} 18) \quad 4,008 \\ - \quad 558 \\ \hline 3,450 \end{array}$$

$$\begin{array}{r} 19) \quad 1,007 \\ - \quad 762 \\ \hline 245 \end{array}$$

$$\begin{array}{r} 20) \quad 7,002 \\ - 4,491 \\ \hline 2,511 \end{array}$$

1. 1,4442. 4,9873. 4074. 4,2895. 6,3836. 6737. 5438. 8,3289. 3,03810. 111. 34312. 5,37613. 75214. 1,71715. 99916. 5,20217. 1,77818. 3,45019. 24520. 2,511



Use subtraction to solve the following problems.

Answers

3,038

343

1

5,376

6,383

673

4,289

8,328

407

543

4,987

1,444

$$\begin{array}{r} 1) \quad 9,008 \\ - 7,564 \\ \hline \end{array}$$

$$\begin{array}{r} 2) \quad 8,004 \\ - 3,017 \\ \hline \end{array}$$

$$\begin{array}{r} 3) \quad 4,001 \\ - 3,594 \\ \hline \end{array}$$

$$\begin{array}{r} 4) \quad 7,003 \\ - 2,714 \\ \hline \end{array}$$

$$\begin{array}{r} 5) \quad 8,009 \\ - 1,626 \\ \hline \end{array}$$

$$\begin{array}{r} 6) \quad 2,001 \\ - 1,328 \\ \hline \end{array}$$

$$\begin{array}{r} 7) \quad 3,008 \\ - 2,465 \\ \hline \end{array}$$

$$\begin{array}{r} 8) \quad 9,002 \\ - \quad 674 \\ \hline \end{array}$$

$$\begin{array}{r} 9) \quad 9,006 \\ - 5,968 \\ \hline \end{array}$$

$$\begin{array}{r} 10) \quad 1,007 \\ - 1,006 \\ \hline \end{array}$$

$$\begin{array}{r} 11) \quad 2,003 \\ - 1,660 \\ \hline \end{array}$$

$$\begin{array}{r} 12) \quad 7,007 \\ - 1,631 \\ \hline \end{array}$$

1. _____
2. _____
3. _____
4. _____
5. _____
6. _____
7. _____
8. _____
9. _____
10. _____
11. _____
12. _____