


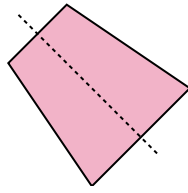


Determine if the line through the figure is a line of symmetry.

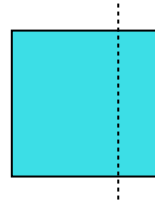
Ex)



1)



2)



Answers

Ex. no

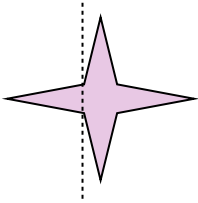
1. _____

2. _____

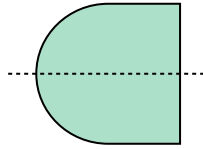
3. _____

4. _____

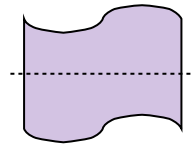
3)



4)



5)




5. _____

6. _____

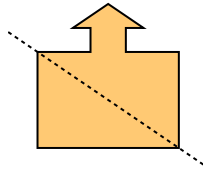
7. _____

8. _____

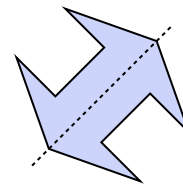
6)



7)



8)

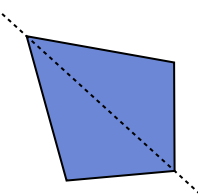


9. _____

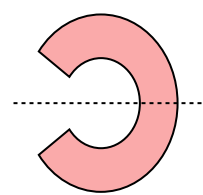
10. _____

11. _____

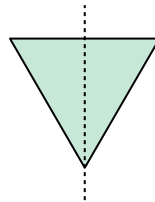
9)

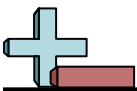


10)



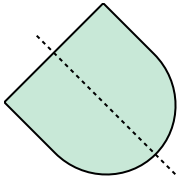
11)



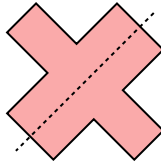


Determine if the line through the figure is a line of symmetry.

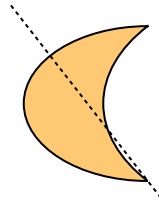
Ex)



1)



2)



Answers

Ex. yes

1. _____

2. _____

3. _____

4. _____

5. _____

6. _____

7. _____

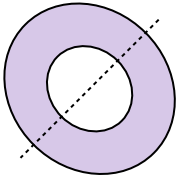
8. _____

9. _____

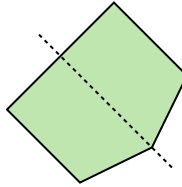
10. _____

11. _____

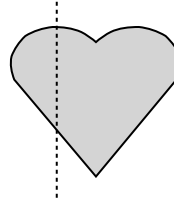
3)



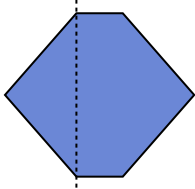
4)



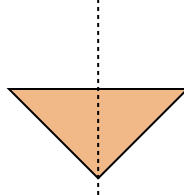
5)



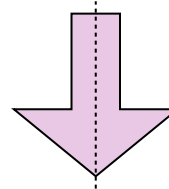
6)



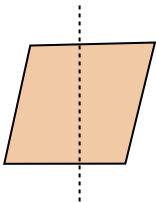
7)



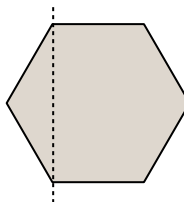
8)



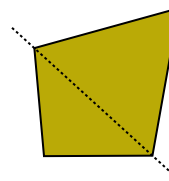
9)

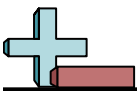


10)



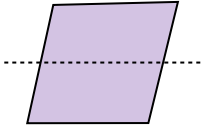
11)



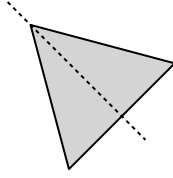


Determine if the line through the figure is a line of symmetry.

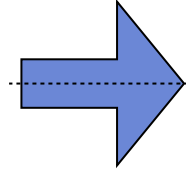
Ex)



1)



2)



Answers

Ex. no

1. _____

2. _____

3. _____

4. _____

5. _____

6. _____

7. _____

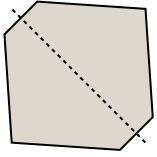
8. _____

9. _____

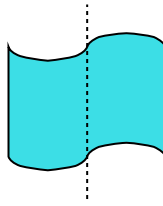
10. _____

11. _____


3)



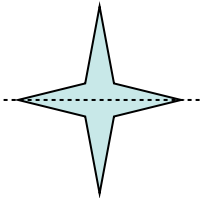
4)



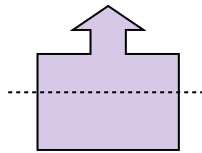
5)



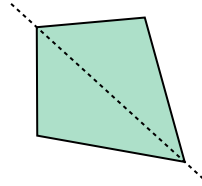
6)



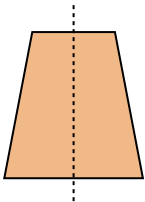
7)



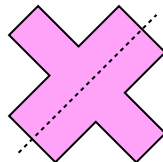
8)



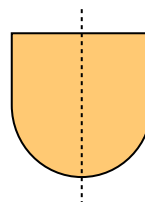
9)

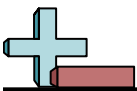


10)



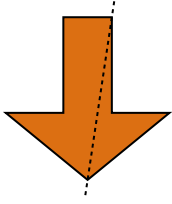
11)



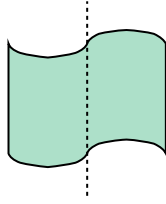


Determine if the line through the figure is a line of symmetry.

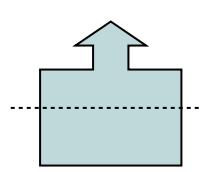
Ex)



1)



2)



Answers

Ex. no

1. _____

2. _____

3. _____

4. _____

5. _____

6. _____

7. _____

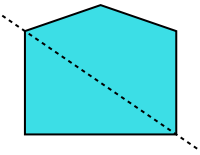
8. _____

9. _____

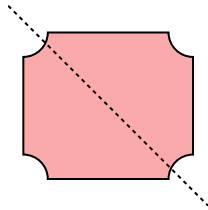
10. _____

11. _____

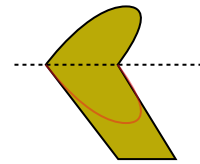
3)



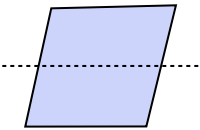
4)



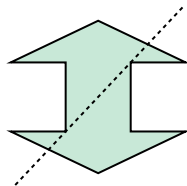
5)



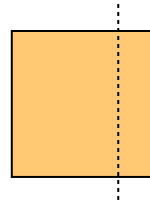
6)



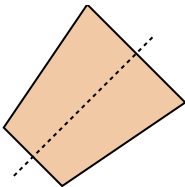
7)



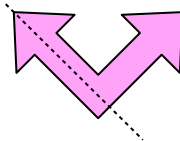
8)



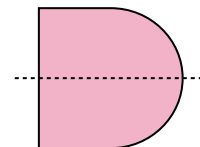
9)

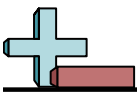


10)



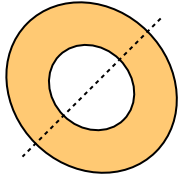
11)



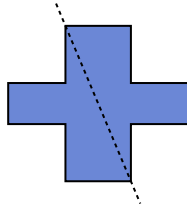


Determine if the line through the figure is a line of symmetry.

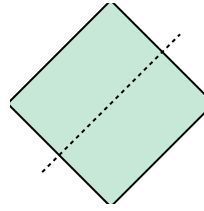
Ex)



1)



2)



Answers

Ex. yes

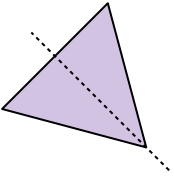
1. _____

2. _____

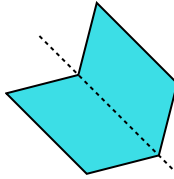
3. _____

4. _____

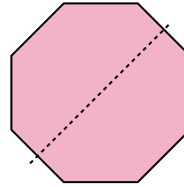
3)



4)



5)



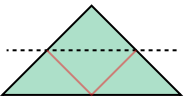
5. _____

6. _____


7. _____

8. _____

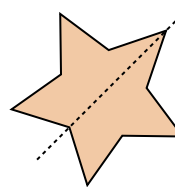
6)



7)



8)

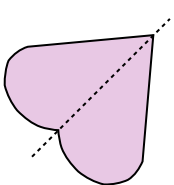


9. _____

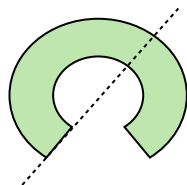
10. _____

11. _____

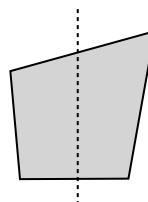
9)

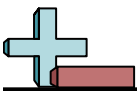


10)



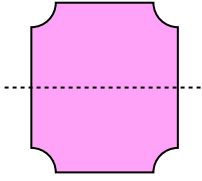
11)



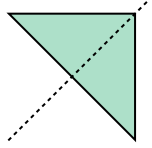


Determine if the line through the figure is a line of symmetry.

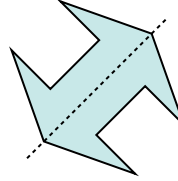
Ex)



1)



2)



Answers

Ex. yes

1. _____

2. _____

3. _____

4. _____

5. _____

6. _____

7. _____

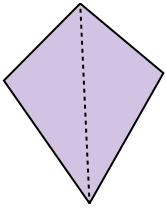
8. _____

9. _____

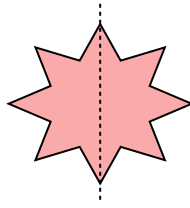
10. _____

11. _____

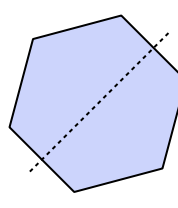
3)



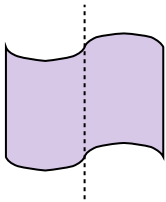
4)



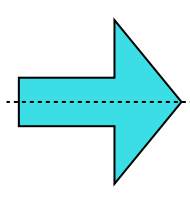
5)



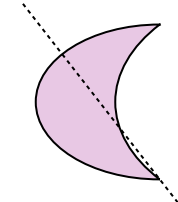
6)




7)



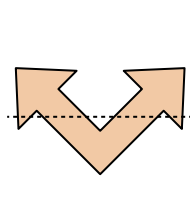
8)



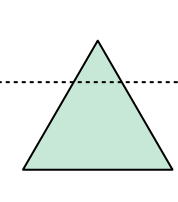
9)



10)



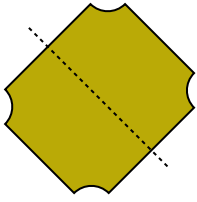
11)



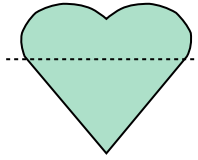


Determine if the line through the figure is a line of symmetry.

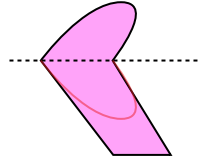
Ex)



1)



2)



Answers

Ex. yes

1. _____

2. _____

3. _____

4. _____

5. _____

6. _____

7. _____

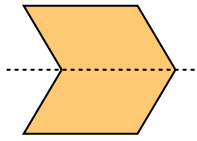
8. _____

9. _____


10. _____

11. _____

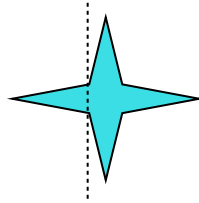
3)



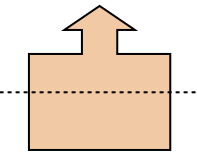
4)



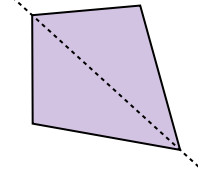
5)



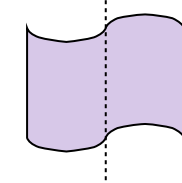
6)



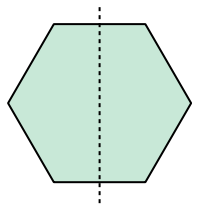
7)



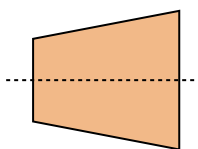
8)



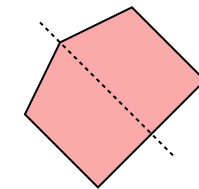
9)



10)



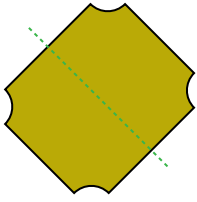
11)



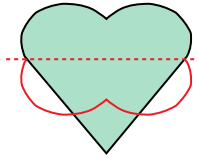


Determine if the line through the figure is a line of symmetry.

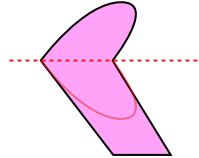
Ex)



1)



2)



Answers

Ex. yes

1. no

2. no

3. yes

4. no

5. no

6. no

7. yes

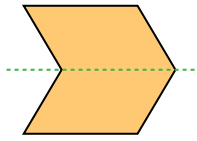
8. no

9. yes

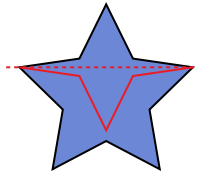
10. yes

11. yes

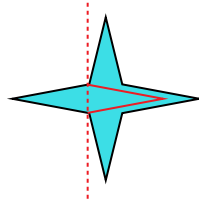
3)



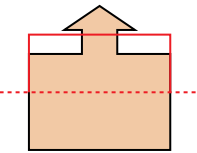
4)



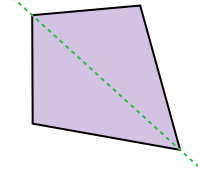
5)



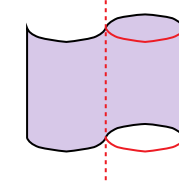
6)



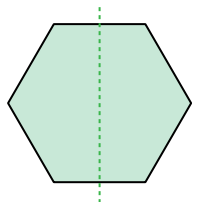
7)



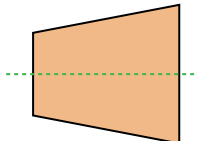
8)



9)



10)



11)

