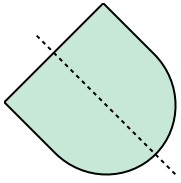


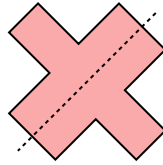


Determine if the line through the figure is a line of symmetry.

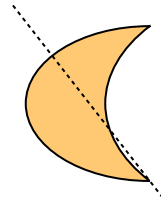
Ex)



1)



2)



**Answers**

Ex. yes

1. \_\_\_\_\_

2. \_\_\_\_\_

3. \_\_\_\_\_

4. \_\_\_\_\_

5. \_\_\_\_\_

6. \_\_\_\_\_

7. \_\_\_\_\_

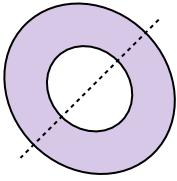
8. \_\_\_\_\_

9. \_\_\_\_\_

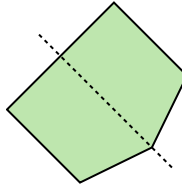
10. \_\_\_\_\_

11. \_\_\_\_\_

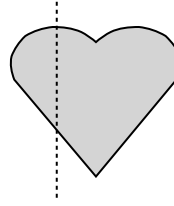
3)



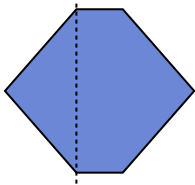
4)



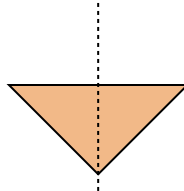
5)



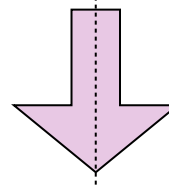
6)



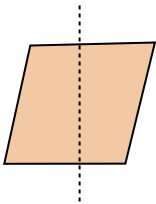
7)



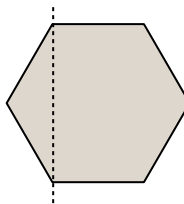
8)



9)



10)



11)

