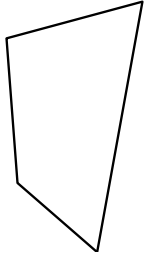




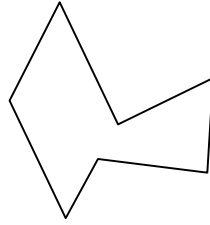
Identify the type of shape shown.

Answers

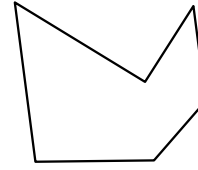
1)



2)



3)



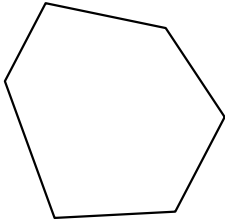
1. \_\_\_\_\_

2. \_\_\_\_\_

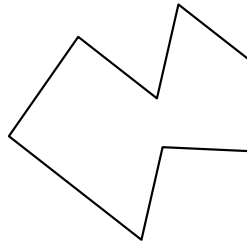
3. \_\_\_\_\_

4. \_\_\_\_\_

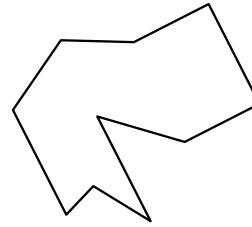
4)



5)



6)




5. \_\_\_\_\_

6. \_\_\_\_\_

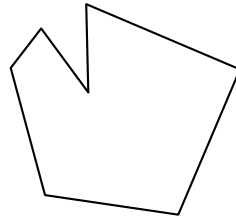
7. \_\_\_\_\_

8. \_\_\_\_\_

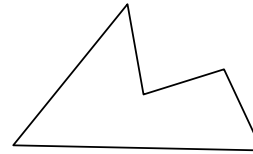
7)



8)



9)



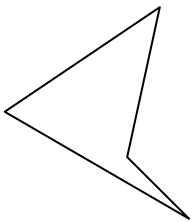
9. \_\_\_\_\_

10. \_\_\_\_\_

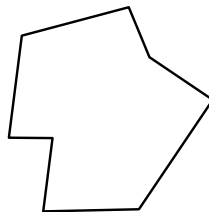
11. \_\_\_\_\_

12. \_\_\_\_\_

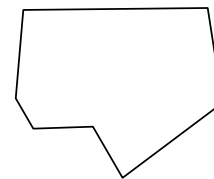
10)



11)



12)

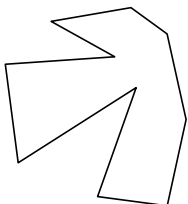


13. \_\_\_\_\_

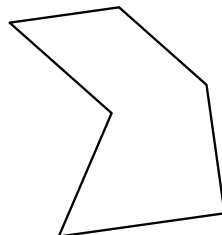
14. \_\_\_\_\_

15. \_\_\_\_\_

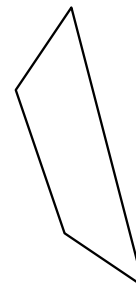
13)



14)



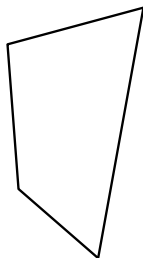
15)



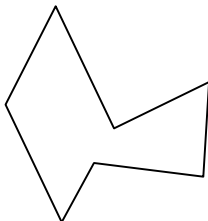


Identify the type of shape shown.

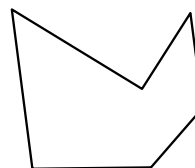
1)



2)



3)



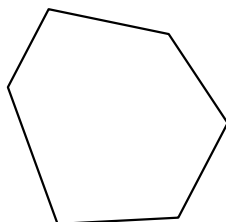
Answers

1. quadrilateral

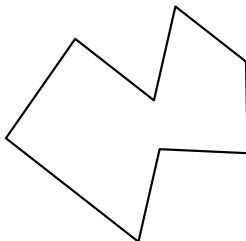
2. heptagon

3. hexagon

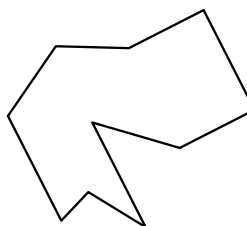
4)



5)



6)




4. hexagon

5. octagon

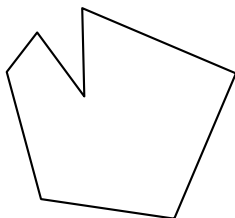
6. decagon

7. decagon

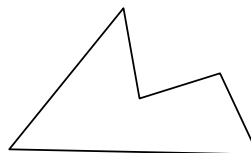
7)



8)



9)



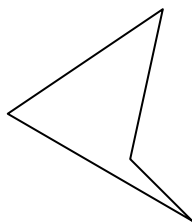
8. heptagon

9. pentagon

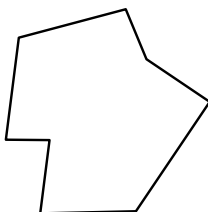
10. quadrilateral

11. octagon

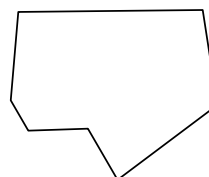
10)



11)



12)




12. heptagon

13. decagon

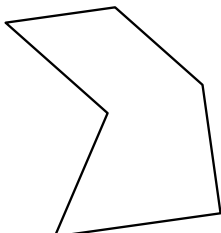
14. hexagon

15. quadrilateral

13)



14)



15)

