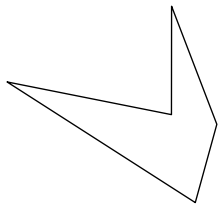


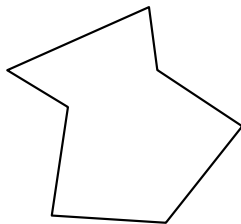


Identify the type of shape shown.


1)



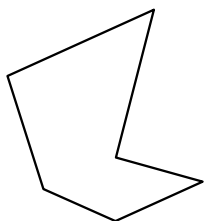
2)




3)



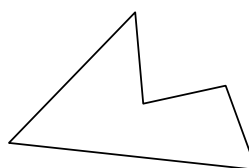
4)



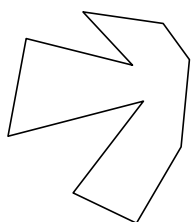
5)



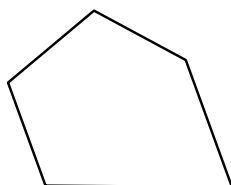
6)



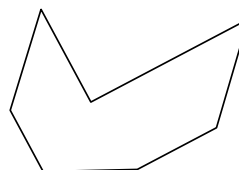
7)



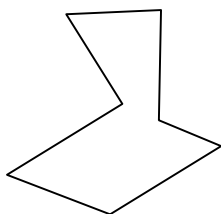
8)




9)



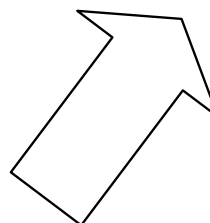
10)



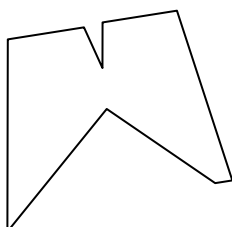
11)



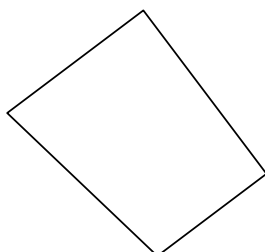
12)



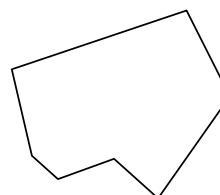
13)



14)



15)



Answers

1. \_\_\_\_\_

2. \_\_\_\_\_

3. \_\_\_\_\_

4. \_\_\_\_\_

5. \_\_\_\_\_

6. \_\_\_\_\_

7. \_\_\_\_\_

8. \_\_\_\_\_

9. \_\_\_\_\_

10. \_\_\_\_\_

11. \_\_\_\_\_

12. \_\_\_\_\_

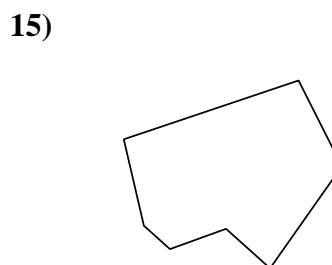
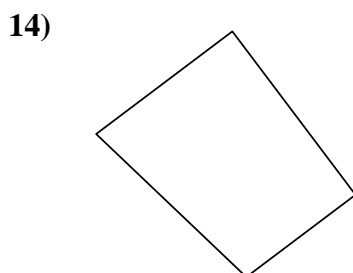
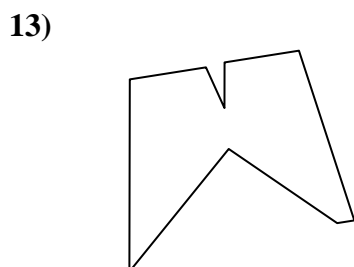
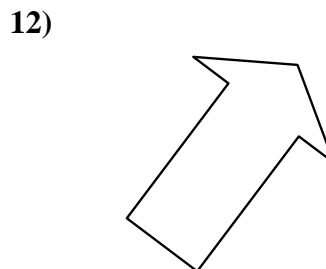
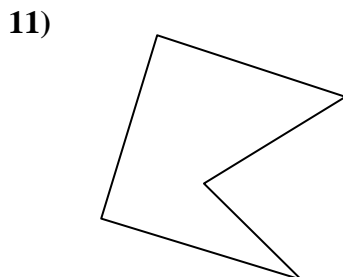
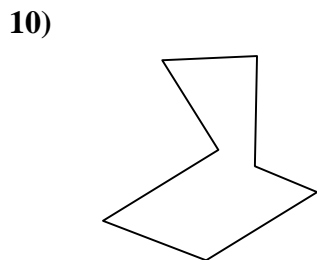

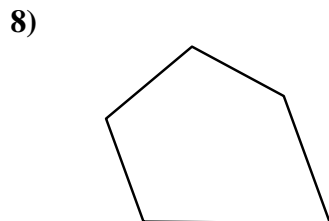
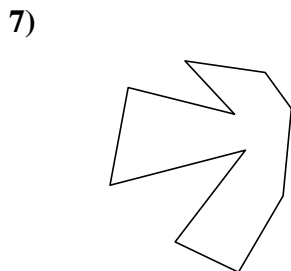
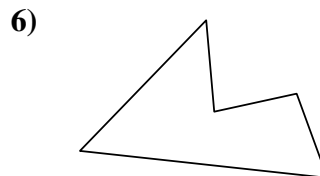

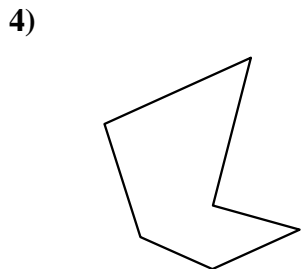
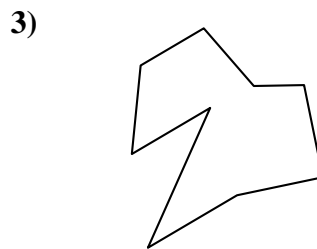

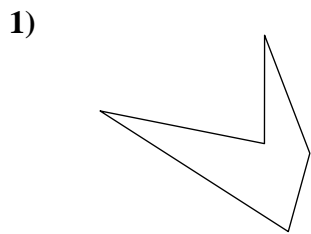
13. \_\_\_\_\_

14. \_\_\_\_\_

15. \_\_\_\_\_



Identify the type of shape shown.



Answers

1. pentagon

2. heptagon

3. nonagon

4. hexagon

5. octagon

6. pentagon

7. decagon

8. pentagon

9. heptagon

10. heptagon

11. pentagon

12. heptagon

13. nonagon

14. quadrilateral

15. heptagon