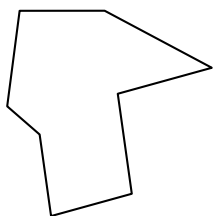


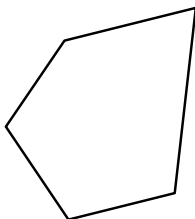


Identify the type of shape shown.


1)



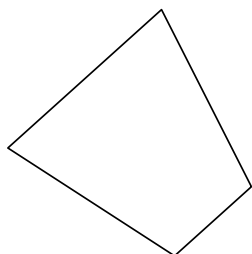
2)



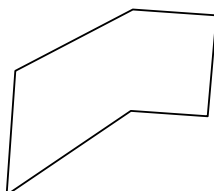
3)



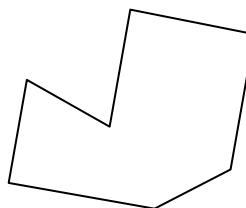
4)



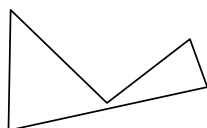
5)




6)



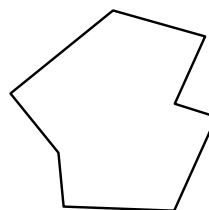
7)



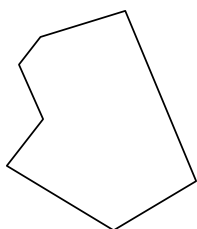
8)



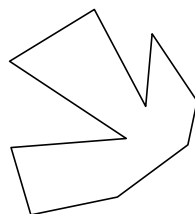
9)



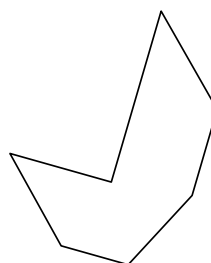
10)



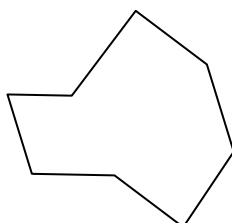
11)



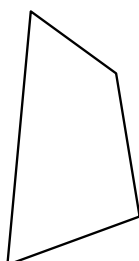
12)



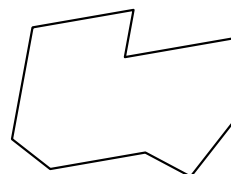
13)



14)



15)



Answers

1. \_\_\_\_\_

2. \_\_\_\_\_

3. \_\_\_\_\_

4. \_\_\_\_\_

5. \_\_\_\_\_

6. \_\_\_\_\_

7. \_\_\_\_\_

8. \_\_\_\_\_

9. \_\_\_\_\_

10. \_\_\_\_\_

11. \_\_\_\_\_

12. \_\_\_\_\_

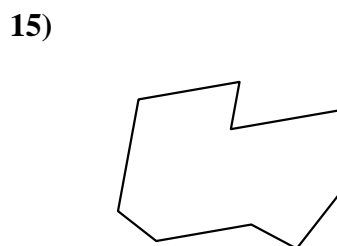
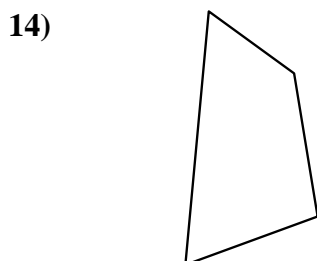
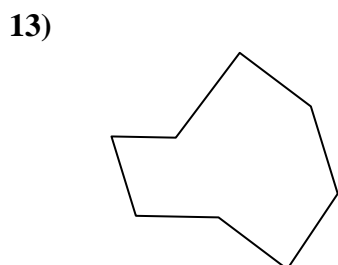
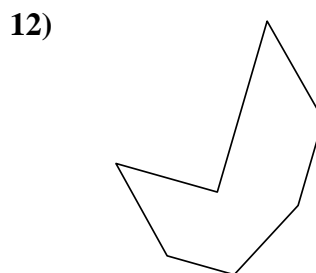
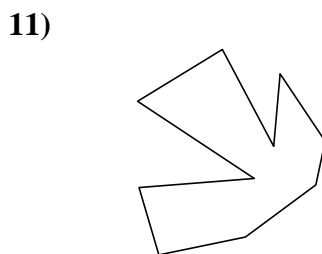
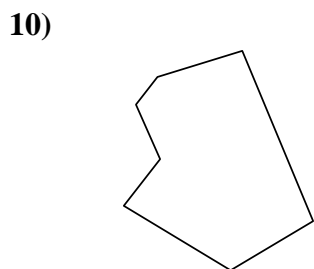
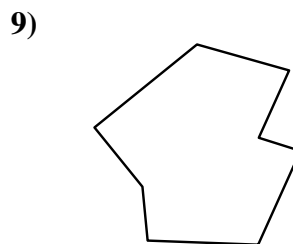
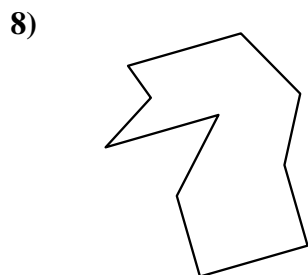
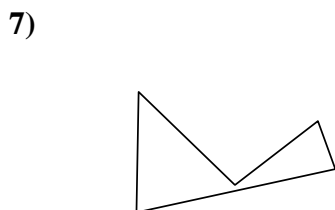

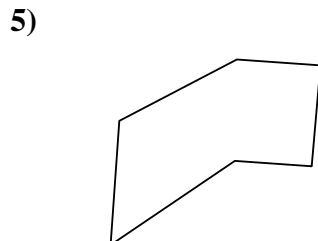
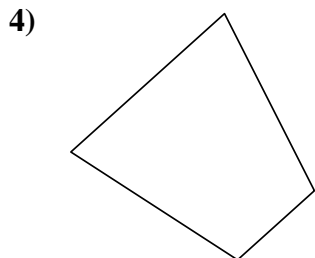
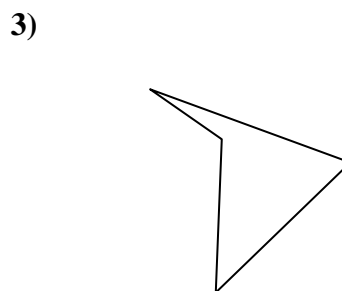
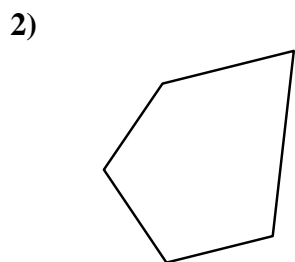
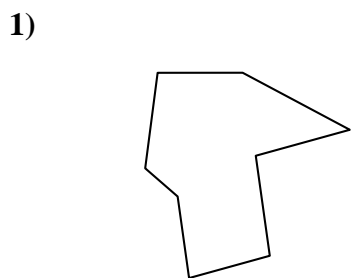
13. \_\_\_\_\_

14. \_\_\_\_\_

15. \_\_\_\_\_



Identify the type of shape shown.



Answers

1. octagon

2. pentagon

3. quadrilateral

4. quadrilateral

5. hexagon

6. heptagon

7. pentagon

8. decagon

9. octagon

10. heptagon

11. decagon

12. heptagon

13. octagon

14. quadrilateral

15. nonagon