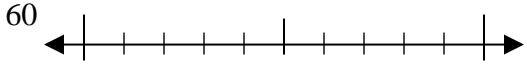




Use the numberlines to round each number to the nearest 10.

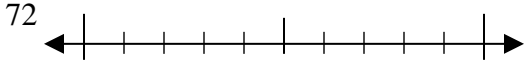
Answers

Ex)



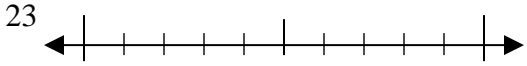
Ex. 60

1)



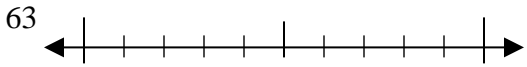
1. _____

2)



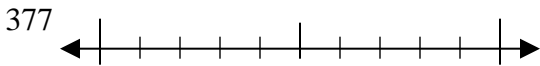
2. _____

3)



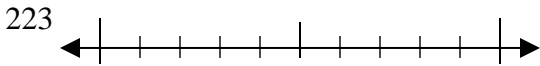
3. _____

4)



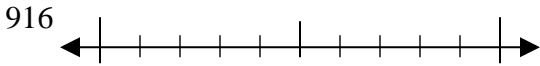
4. _____

5)



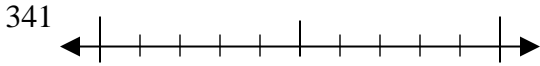
5. _____

6)



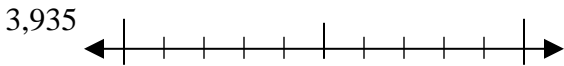
6. _____

7)



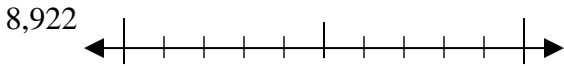
7. _____

8)



8. _____

9)

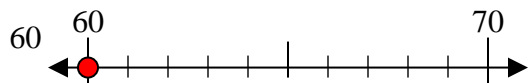


9. _____

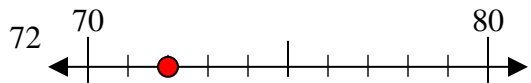


Use the numberlines to round each number to the nearest 10.

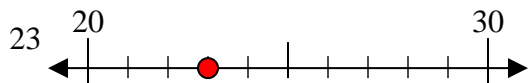
Ex)



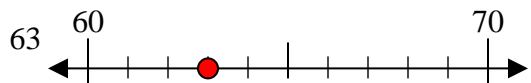
1)



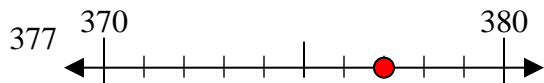
2)



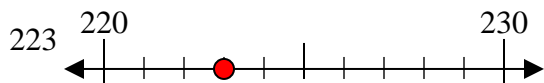
3)



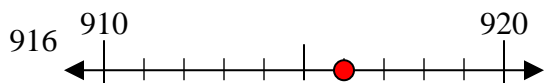
4)



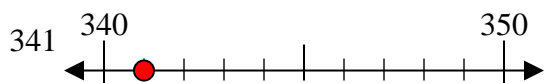
5)



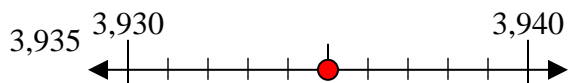
6)



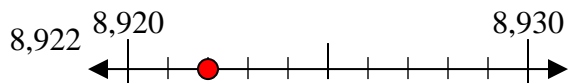
7)



8)



9)



Answers

Ex. 60

1. 70

2. 20

3. 60

4. 380

5. 220

6. 920

7. 340

8. 3940

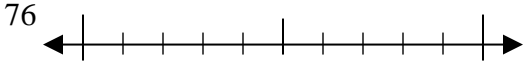
9. 8920



Use the numberlines to round each number to the nearest 10.

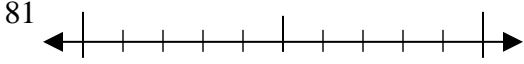
Answers

Ex)



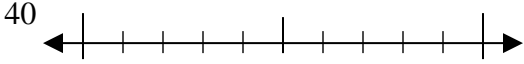
Ex. 80

1)



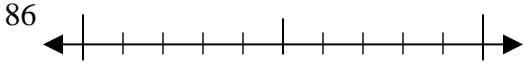
1. _____

2)



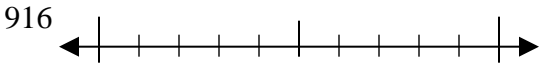
2. _____

3)



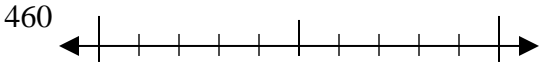
3. _____

4)



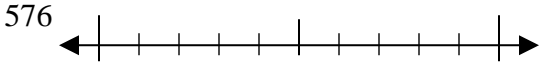
4. _____

5)



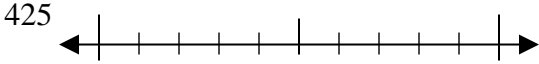
5. _____

6)



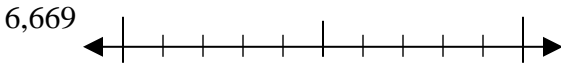
6. _____

7)



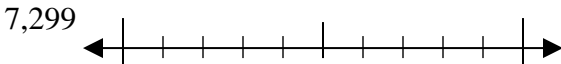
7. _____

8)



8. _____

9)

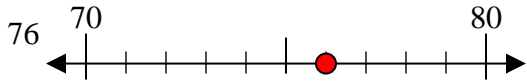


9. _____

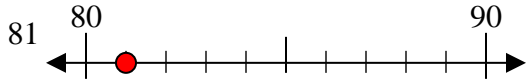


Use the numberlines to round each number to the nearest 10.

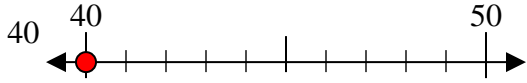
Ex)



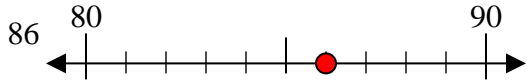
1)



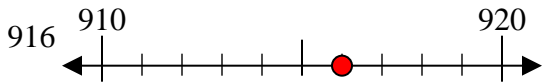
2)



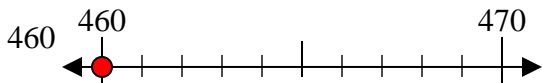
3)



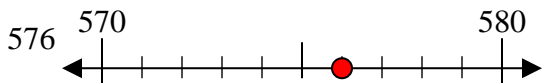
4)



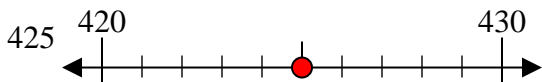
5)



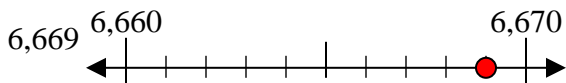
6)



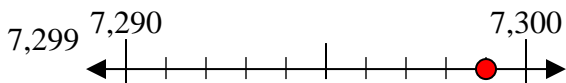
7)



8)



9)



Answers

Ex. 80

1. 80

2. 40

3. 90

4. 920

5. 460

6. 580

7. 430

8. 6670

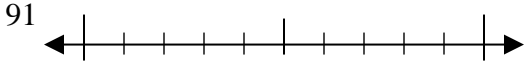
9. 7300



Use the numberlines to round each number to the nearest 10.

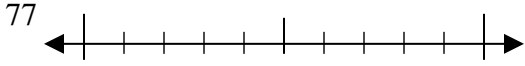
Answers

Ex)



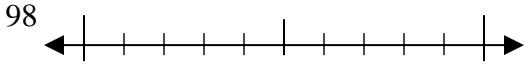
Ex. 90

1)



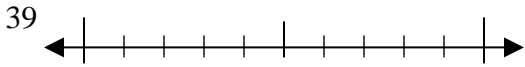
1. _____

2)



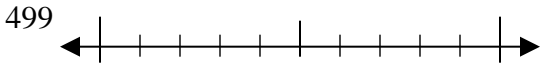
2. _____

3)



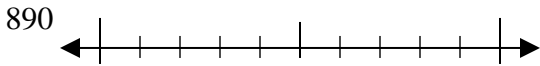
3. _____

4)



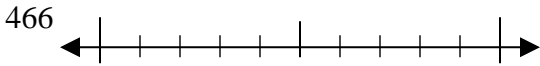
4. _____

5)



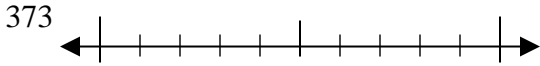
5. _____

6)



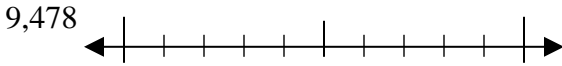
6. _____

7)



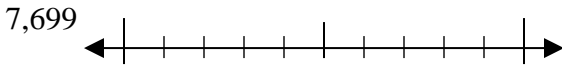
7. _____

8)



8. _____

9)

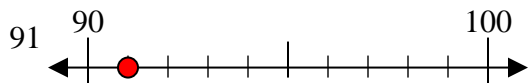


9. _____

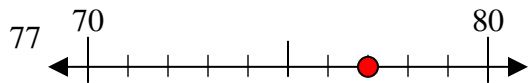


Use the numberlines to round each number to the nearest 10.

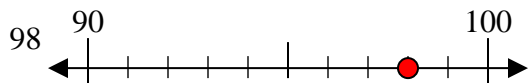
Ex)



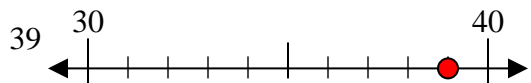
1)



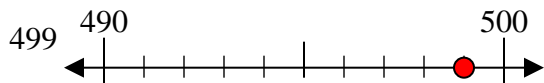
2)



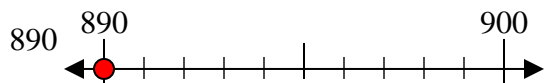
3)



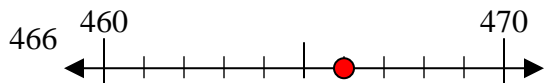
4)



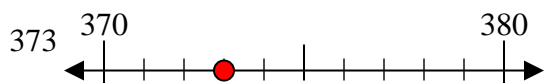
5)



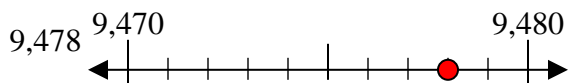
6)



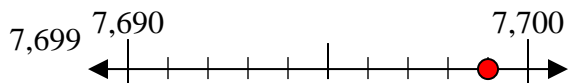
7)



8)



9)



Answers

Ex. 90

1. 80

2. 100

3. 40

4. 500

5. 890

6. 470

7. 370

8. 9480

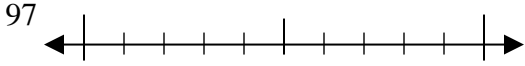
9. 7700



Use the numberlines to round each number to the nearest 10.

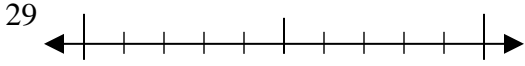
Answers

Ex)



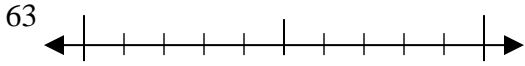
Ex. 100

1)



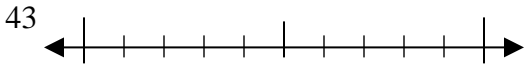
1. _____

2)



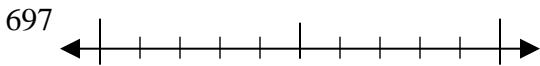
2. _____

3)



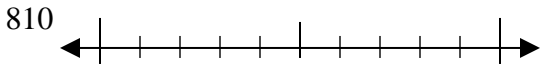
3. _____

4)



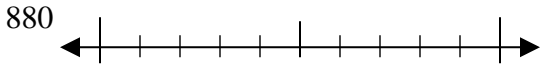
4. _____

5)



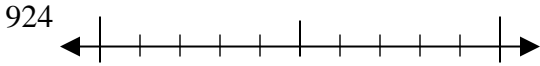
5. _____

6)



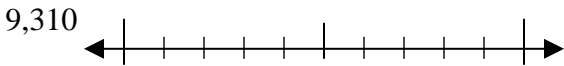
6. _____

7)



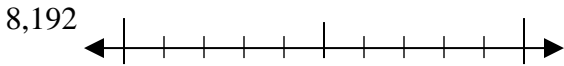
7. _____

8)



8. _____

9)

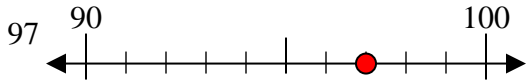


9. _____

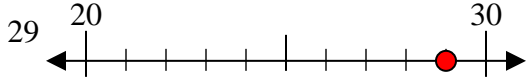


Use the numberlines to round each number to the nearest 10.

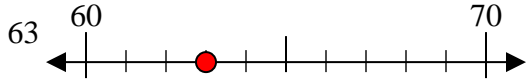
Ex)



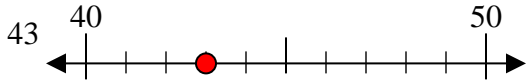
1)



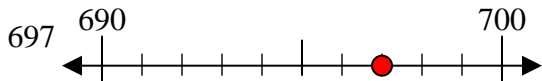
2)



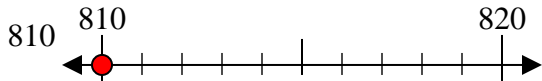
3)



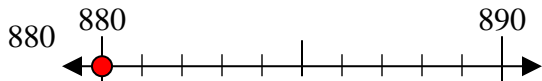
4)



5)



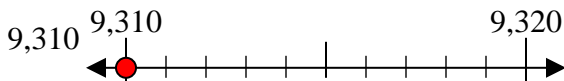
6)



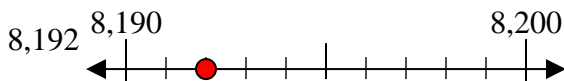
7)



8)



9)



Answers

Ex. 100

1. 30

2. 60

3. 40

4. 700

5. 810

6. 880

7. 920

8. 9310

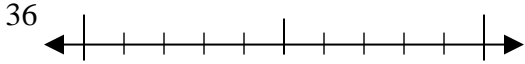
9. 8190



Use the numberlines to round each number to the nearest 10.

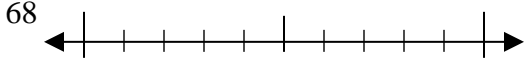
Answers

Ex)



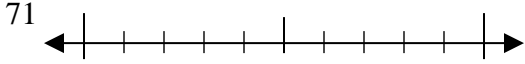
Ex. 40

1)



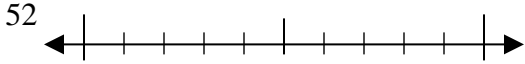
1. _____

2)



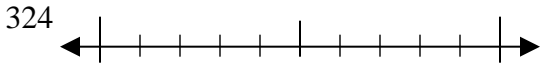
2. _____

3)



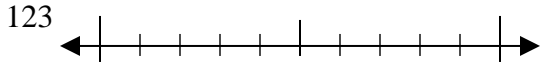
3. _____

4)



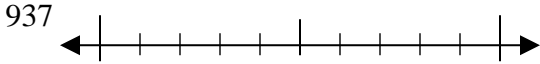
4. _____

5)



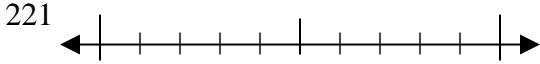
5. _____

6)



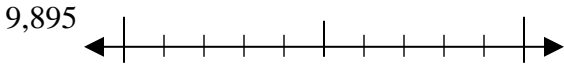
6. _____

7)



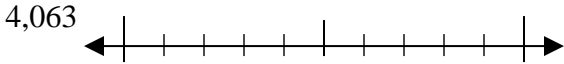
7. _____

8)



8. _____

9)

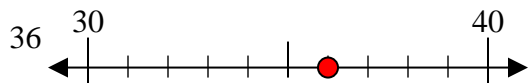


9. _____

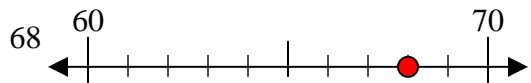


Use the numberlines to round each number to the nearest 10.

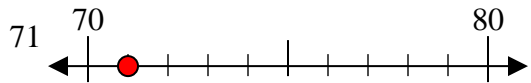
Ex)



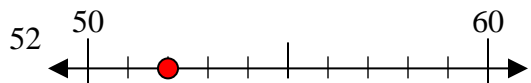
1)



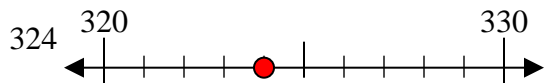
2)



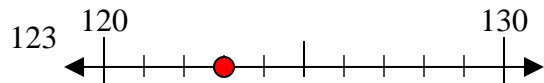
3)



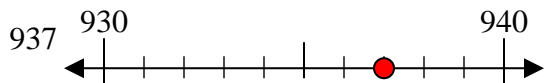
4)



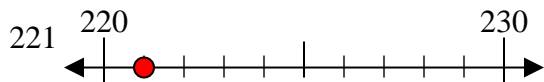
5)



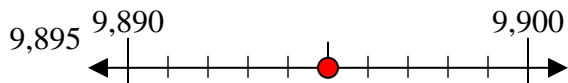
6)



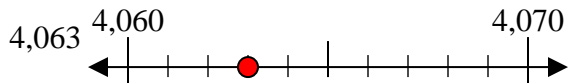
7)



8)



9)



Answers

Ex. 40

1. 70

2. 70

3. 50

4. 320

5. 120

6. 940

7. 220

8. 9900

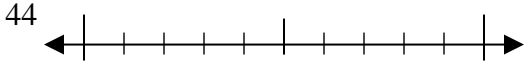
9. 4060



Use the numberlines to round each number to the nearest 10.

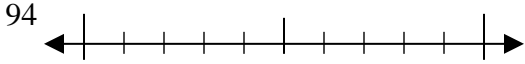
Answers

Ex)



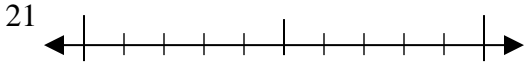
Ex. 40

1)



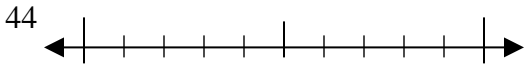
1. _____

2)



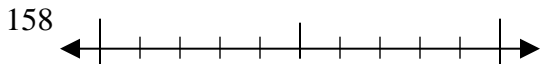
2. _____

3)



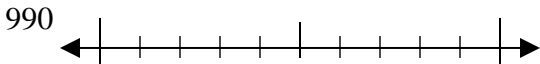
3. _____

4)



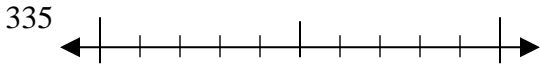
4. _____

5)



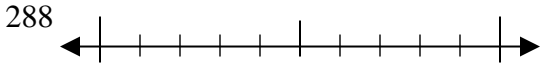
5. _____

6)



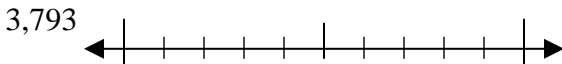
6. _____

7)



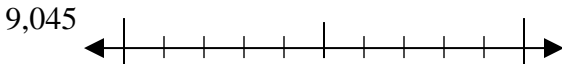
7. _____

8)



8. _____

9)

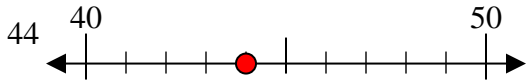


9. _____

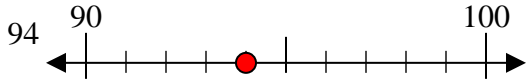


Use the numberlines to round each number to the nearest 10.

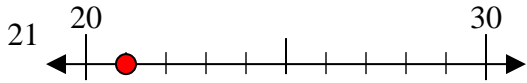
Ex)



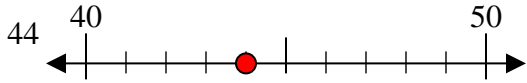
1)



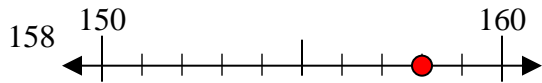
2)



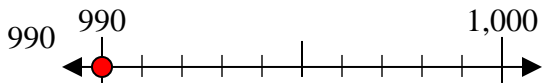
3)



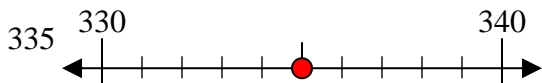
4)



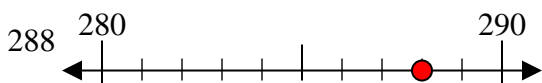
5)



6)



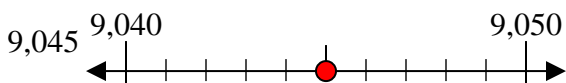
7)



8)



9)



Answers

Ex. 40

1. 90

2. 20

3. 40

4. 160

5. 990

6. 340

7. 290

8. 3790

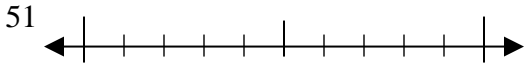
9. 9050



Use the numberlines to round each number to the nearest 10.

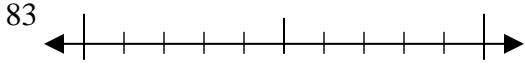
Answers

Ex)



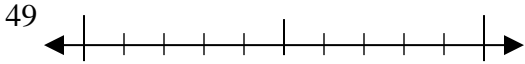
Ex. 50

1)



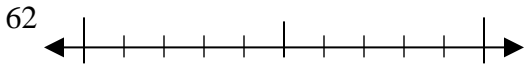
1. _____

2)



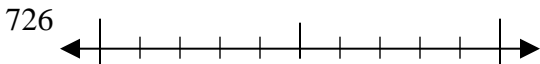
2. _____

3)



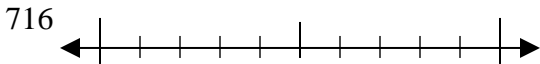
3. _____

4)



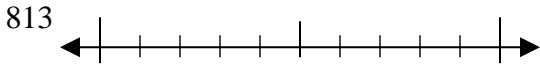
4. _____

5)



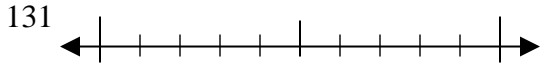
5. _____

6)



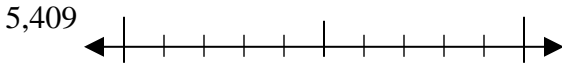
6. _____

7)



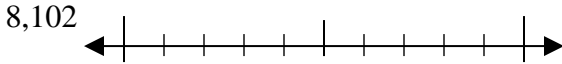
7. _____

8)



8. _____

9)

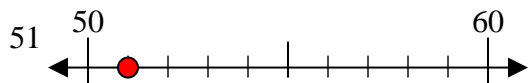


9. _____



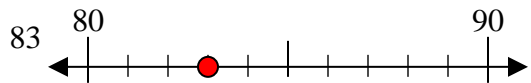
Use the numberlines to round each number to the nearest 10.

Ex)



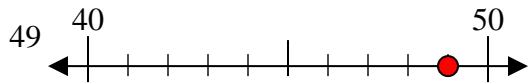
Ex. 50

1)



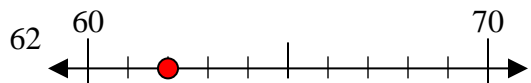
1. 80

2)



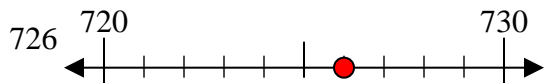
2. 50

3)



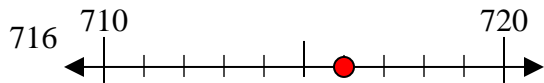
3. 60

4)



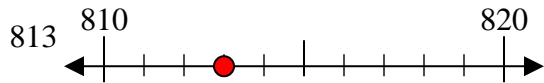
4. 730

5)



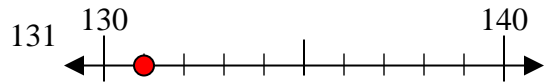
5. 720

6)



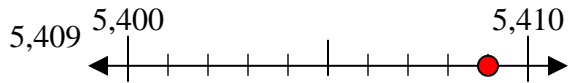
6. 810

7)



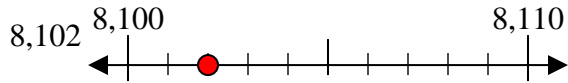
7. 130

8)



8. 5410

9)



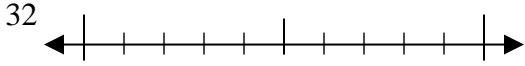
9. 8100

Answers

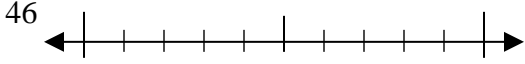


Use the numberlines to round each number to the nearest 10.

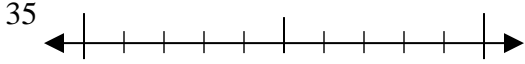
Ex)



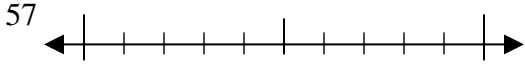
1)



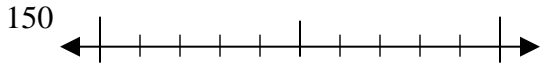
2)



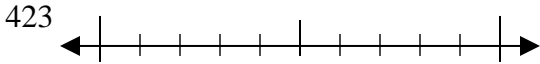
3)



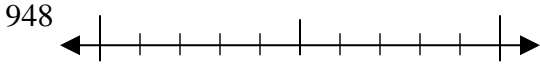
4)



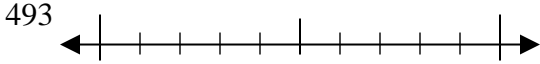
5)



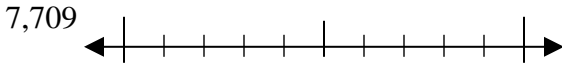
6)



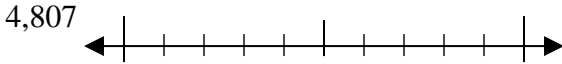
7)



8)



9)



Answers

Ex. 30

1. _____

2. _____

3. _____

4. _____

5. _____

6. _____

7. _____

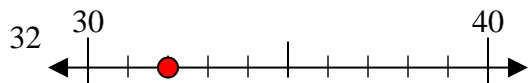
8. _____

9. _____



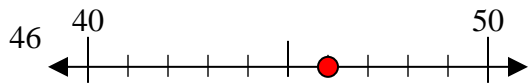
Use the numberlines to round each number to the nearest 10.

Ex)



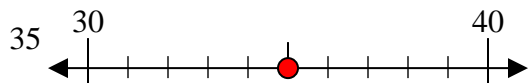
Ex. 30

1)



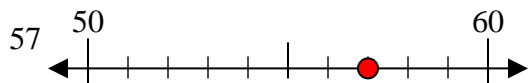
1. 50

2)



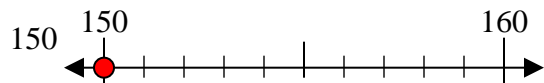
2. 40

3)



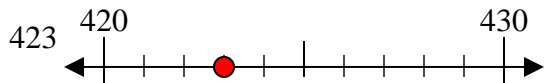
3. 60

4)



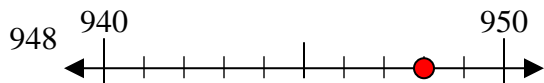
4. 150

5)



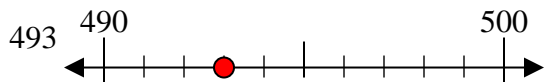
5. 420

6)



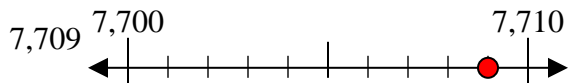
6. 950

7)



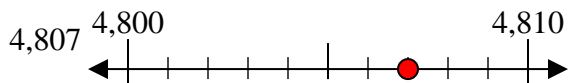
7. 490

8)



8. 7710

9)



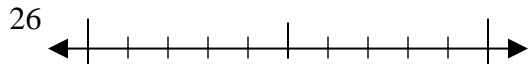
9. 4810

Answers



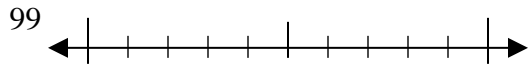
Use the numberlines to round each number to the nearest 10.

Ex)



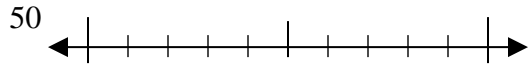
Ex. 30

1)



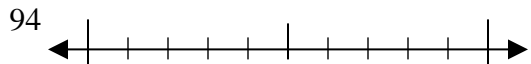
1. _____

2)



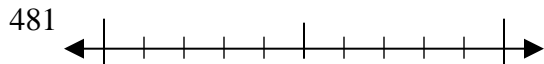
2. _____

3)



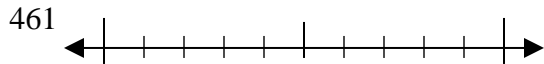
3. _____

4)



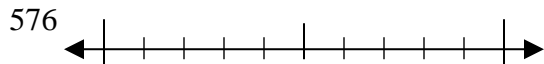
4. _____

5)



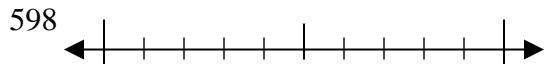
5. _____

6)



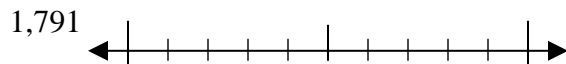
6. _____

7)



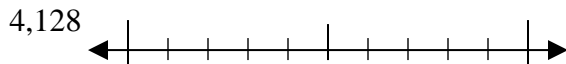
7. _____

8)



8. _____

9)



9. _____

Answers

Ex. 30

1. _____

2. _____

3. _____

4. _____

5. _____

6. _____

7. _____

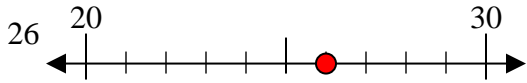
8. _____

9. _____

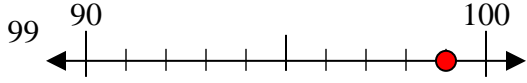


Use the numberlines to round each number to the nearest 10.

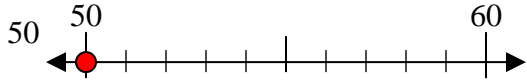
Ex)



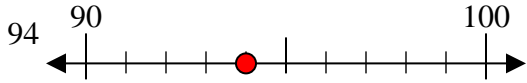
1)



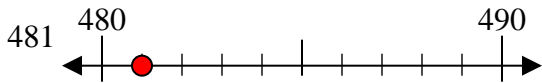
2)



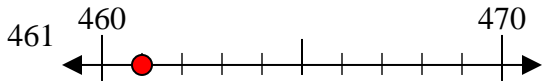
3)



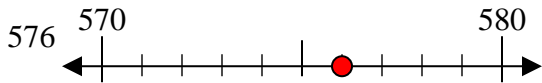
4)



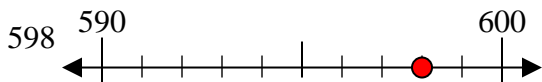
5)



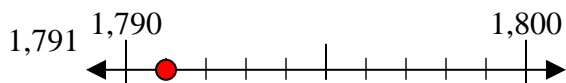
6)



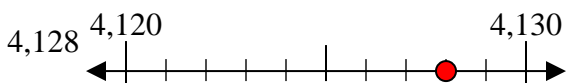
7)



8)



9)



Answers

Ex. 30

1. 100

2. 50

3. 90

4. 480

5. 460

6. 580

7. 600

8. 1790

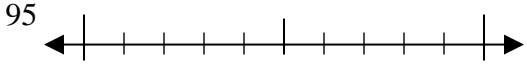
9. 4130



Use the numberlines to round each number to the nearest 10.

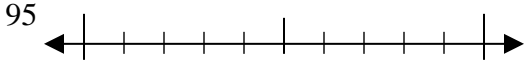
Answers

Ex)



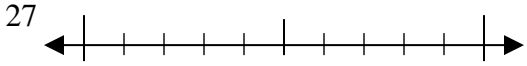
Ex. 100

1)



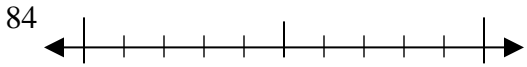
1. _____

2)



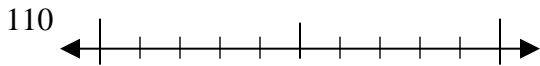
2. _____

3)



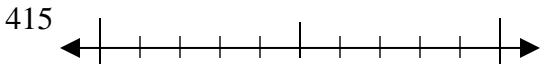
3. _____

4)



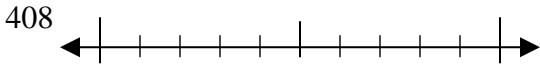
4. _____

5)



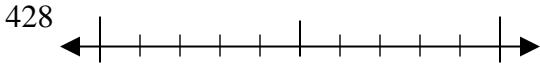
5. _____

6)



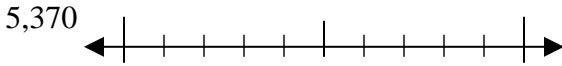
6. _____

7)



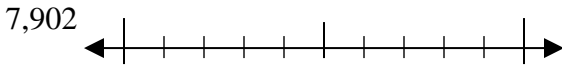
7. _____

8)



8. _____

9)

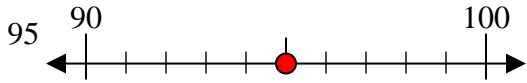


9. _____



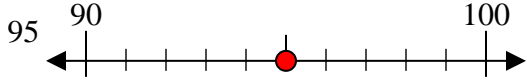
Use the numberlines to round each number to the nearest 10.

Ex)



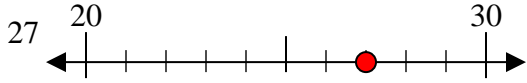
Ex. 100

1)



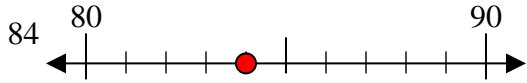
1. 100

2)



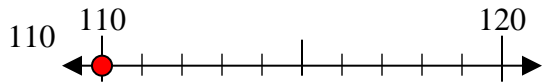
2. 30

3)



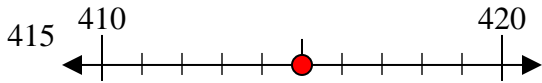
3. 80

4)



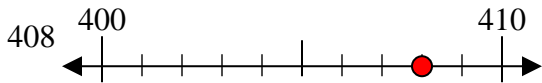
4. 110

5)



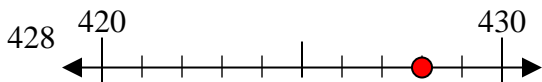
5. 420

6)



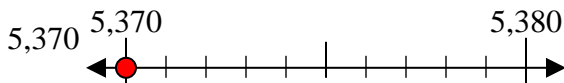
6. 410

7)



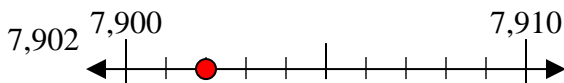
7. 430

8)



8. 5370

9)



9. 7900

Answers