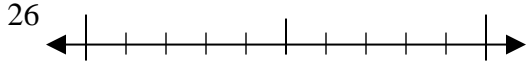




Use the numberlines to round each number to the nearest 10.

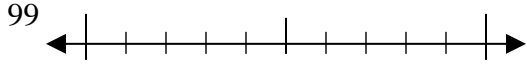
Answers

Ex)



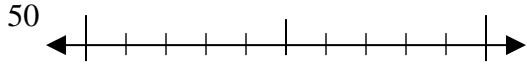
Ex. 30

1)



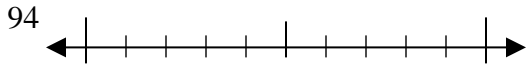
1. \_\_\_\_\_

2)



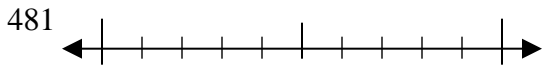
2. \_\_\_\_\_

3)



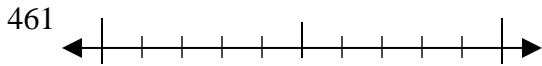
3. \_\_\_\_\_

4)



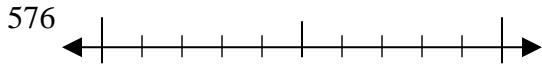
4. \_\_\_\_\_

5)



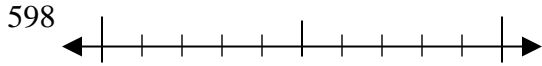
5. \_\_\_\_\_

6)



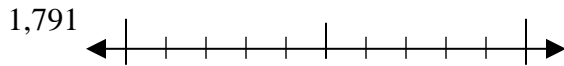
6. \_\_\_\_\_

7)



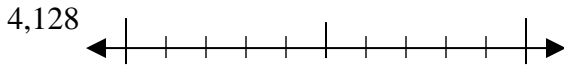
7. \_\_\_\_\_

8)



8. \_\_\_\_\_

9)

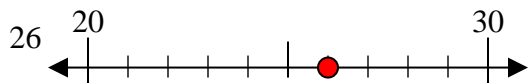


9. \_\_\_\_\_



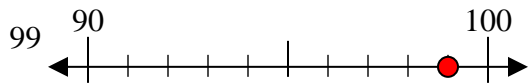
Use the numberlines to round each number to the nearest 10.

Ex)



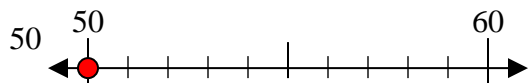
Ex. 30

1)



1. 100

2)



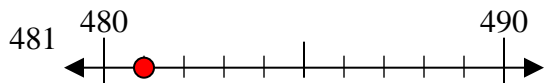
2. 50

3)



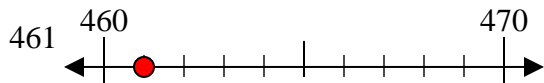
3. 90

4)



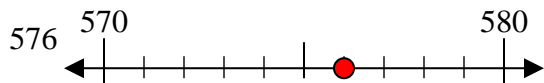
4. 480

5)



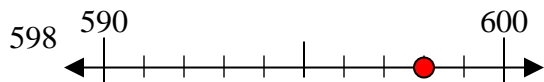
5. 460

6)



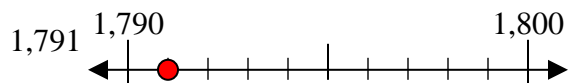
6. 580

7)



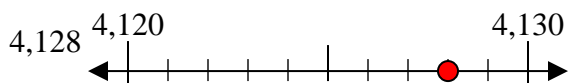
7. 600

8)



8. 1790

9)



9. 4130

Answers

Ex. 30

1. 100

2. 50

3. 90

4. 480

5. 460

6. 580

7. 600

8. 1790

9. 4130