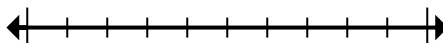




Mark the location (approximate) on the numberline and then solve.

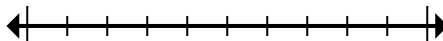
Answers

1) Round 636 to the nearest hundred.



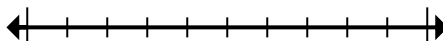
1. _____

2) Round 460,239 to the nearest hundred thousand.



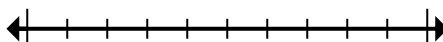
2. _____

3) Round 43,360,678 to the nearest hundred thousand.



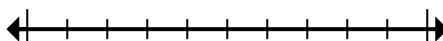
3. _____

4) Round 525 to the nearest hundred.



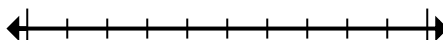
4. _____

5) Round 520,968 to the nearest hundred thousand.



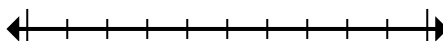
5. _____

6) Round 242,983 to the nearest ten thousand.



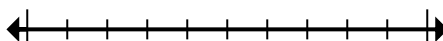
6. _____

7) Round 6,825,849 to the nearest hundred.



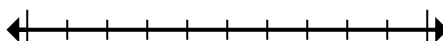
7. _____

8) Round 4,314 to the nearest thousand.



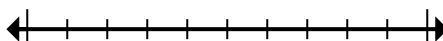
8. _____

9) Round 97,589 to the nearest ten thousand.



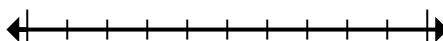
9. _____

10) Round 6,435 to the nearest thousand.



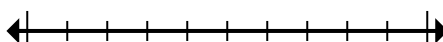
10. _____

11) Round 29,689,529 to the nearest hundred thousand.



11. _____

12) Round 4,801,539 to the nearest ten thousand.



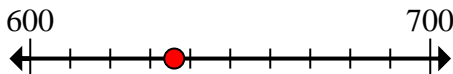
12. _____



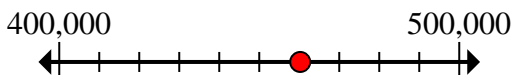
Mark the location (approximate) on the numberline and then solve.

Answers

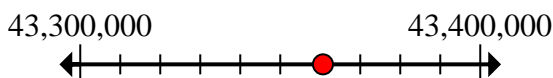
- 1) Round 636 to the nearest hundred.

1. 600

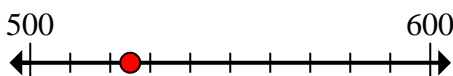
- 2) Round 460,239 to the nearest hundred thousand.

2. 500,000

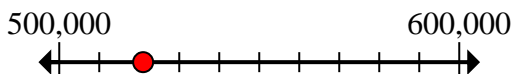
- 3) Round 43,360,678 to the nearest hundred thousand.

3. 43,400,000

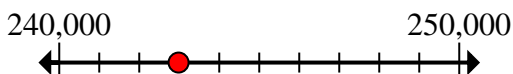
- 4) Round 525 to the nearest hundred.

4. 500

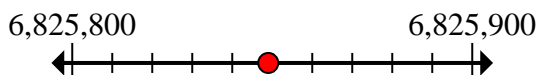
- 5) Round 520,968 to the nearest hundred thousand.

5. 500,000

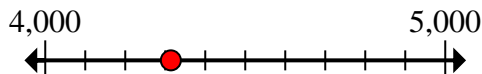
- 6) Round 242,983 to the nearest ten thousand.

6. 240,000

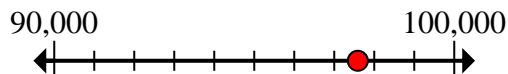
- 7) Round 6,825,849 to the nearest hundred.

7. 6,825,800

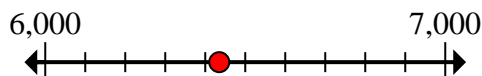
- 8) Round 4,314 to the nearest thousand.

8. 4,000

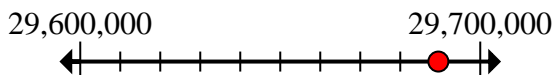
- 9) Round 97,589 to the nearest ten thousand.

9. 100,000

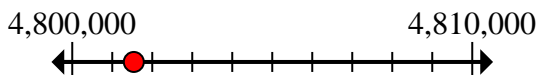
- 10) Round 6,435 to the nearest thousand.

10. 6,000

- 11) Round 29,689,529 to the nearest hundred thousand.

11. 29,700,000

- 12) Round 4,801,539 to the nearest ten thousand.

12. 4,800,000

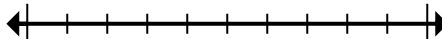


Mark the location (approximate) on the numberline and then solve.

Answers

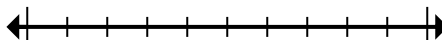
4,800,000	43,400,000	600	500
29,700,000	6,825,800	240,000	500,000
4,000	100,000	500,000	6,000

1) Round 636 to the nearest hundred.



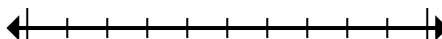
1. _____

2) Round 460,239 to the nearest hundred thousand.



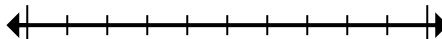
2. _____

3) Round 43,360,678 to the nearest hundred thousand.



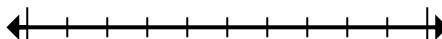
3. _____

4) Round 525 to the nearest hundred.



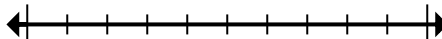
4. _____

5) Round 520,968 to the nearest hundred thousand.



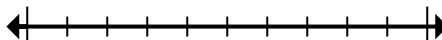
5. _____

6) Round 242,983 to the nearest ten thousand.



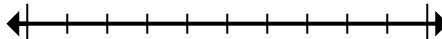
6. _____

7) Round 6,825,849 to the nearest hundred.



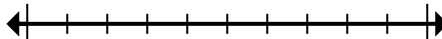
7. _____

8) Round 4,314 to the nearest thousand.



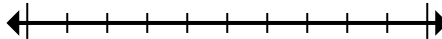
8. _____

9) Round 97,589 to the nearest ten thousand.



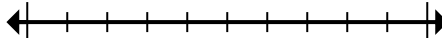
9. _____

10) Round 6,435 to the nearest thousand.



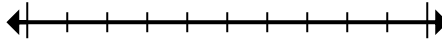
10. _____

11) Round 29,689,529 to the nearest hundred thousand.



11. _____

12) Round 4,801,539 to the nearest ten thousand.



12. _____