



Use the numberlines to round each number to the nearest 100.

Ex)

612



Ex. 600

1)

9,223



1. _____

2)

17,922



2. _____

3)

87,465



3. _____

4)

653



4. _____

5)

3,616



5. _____

6)

6,677



6. _____

7)

22,598



7. _____

8)

1,241



8. _____

9)

960



9. _____

10)

873



10. _____

Answers

Ex. 600

1. _____

2. _____

3. _____

4. _____

5. _____

6. _____

7. _____

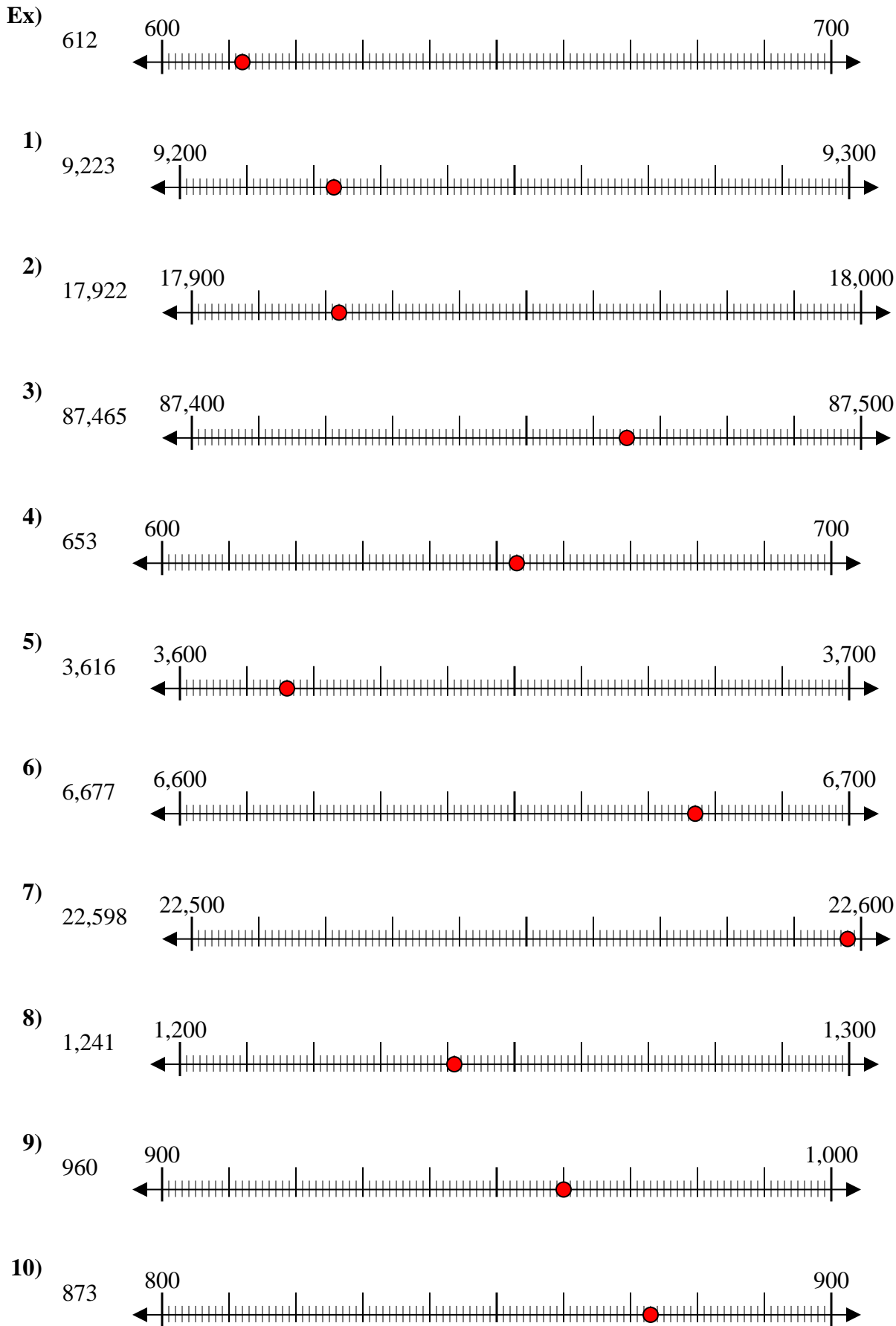
8. _____

9. _____

10. _____



Use the numberlines to round each number to the nearest 100.



Answers

- Ex. 600
1. 9,200
2. 17,900
3. 87,500
4. 700
5. 3,600
6. 6,700
7. 22,600
8. 1,200
9. 1,000
10. 900



Use the numberlines to round each number to the nearest 100.

Ex)

356



Ex. 400

1)

1,360



1. _____

2)

7,216



2. _____

3)

51,669



3. _____

4)

670



4. _____

5)

171



5. _____

6)

80,458



6. _____

7)

9,425



7. _____

8)

616



8. _____

9)

88,299



9. _____

10)

5,076



10. _____

Answers

Ex. 400

1. _____

2. _____

3. _____

4. _____

5. _____

6. _____

7. _____

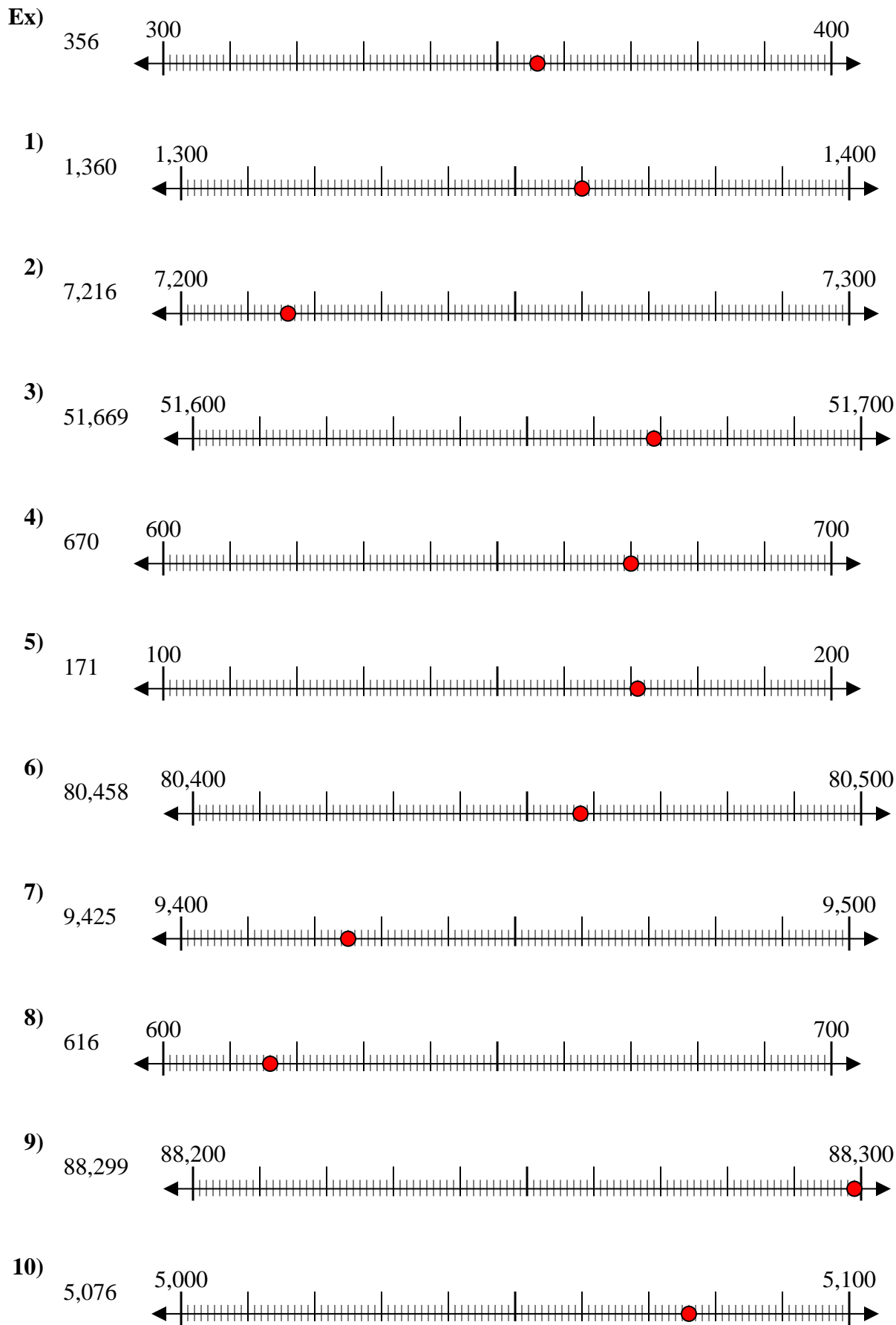
8. _____

9. _____

10. _____



Use the numberlines to round each number to the nearest 100.



Answers

- Ex. 400
1. 1,400
2. 7,200
3. 51,700
4. 700
5. 200
6. 80,500
7. 9,400
8. 600
9. 88,300
10. 5,100



Use the numberlines to round each number to the nearest 100.

Answers

Ex)

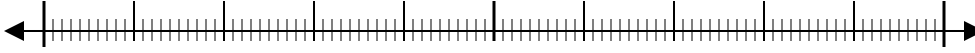
908



Ex. 900

1)

257



1. _____

2)

8,566



2. _____

3)

18,478



3. _____

4)

84,766



4. _____

5)

991



5. _____

6)

76,319



6. _____

7)

759



7. _____

8)

4,490



8. _____

9)

70,699



9. _____

10)

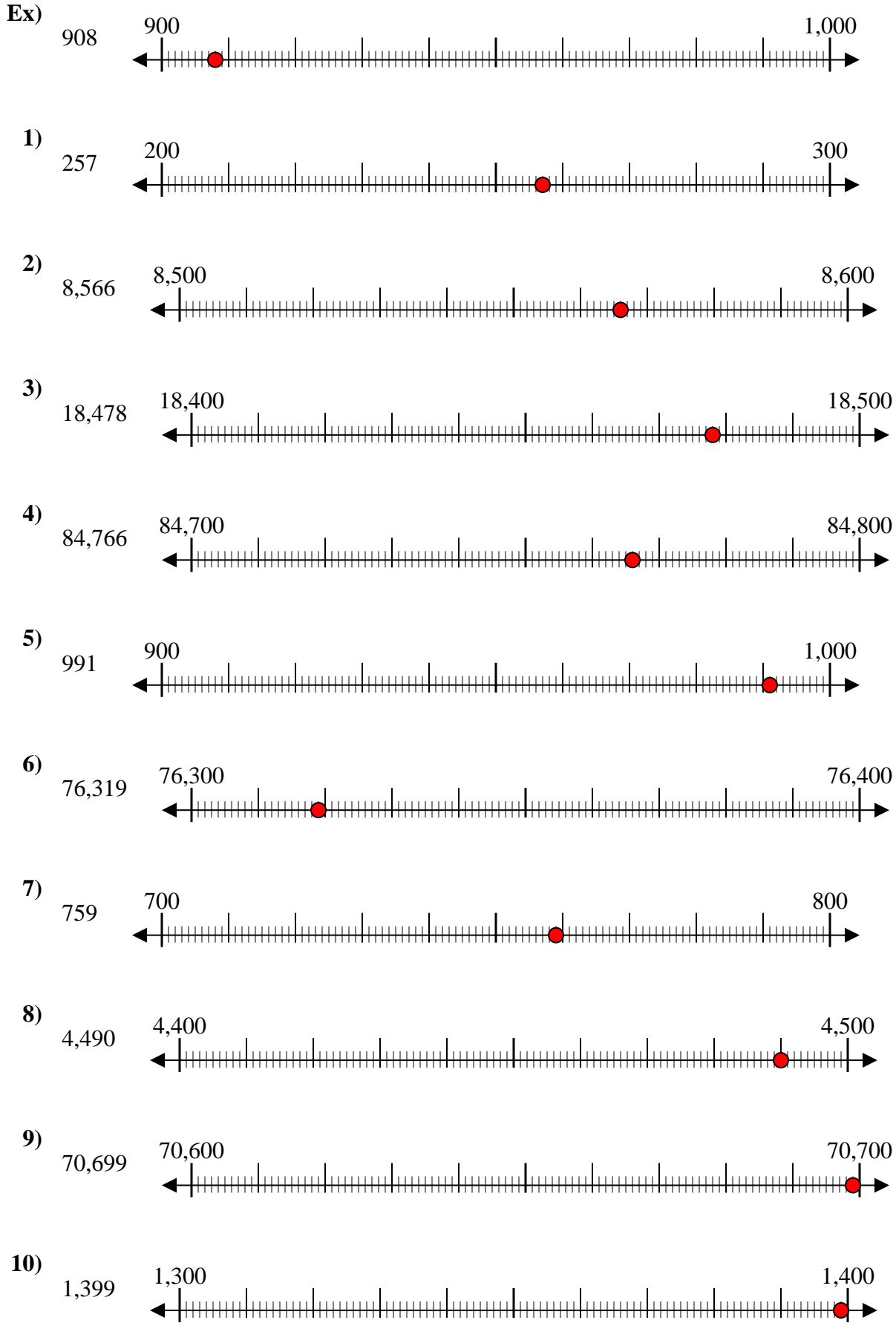
1,399



10. _____



Use the numberlines to round each number to the nearest 100.



Answers

- Ex. 900
1. 300
2. 8,600
3. 18,500
4. 84,800
5. 1,000
6. 76,300
7. 800
8. 4,500
9. 70,700
10. 1,400



Use the numberlines to round each number to the nearest 100.

Ex)

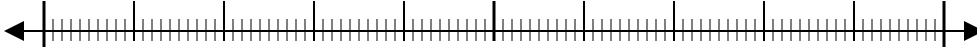
4,410



Ex. 4,400

1)

853



1. _____

2)

783



2. _____

3)

9,697



3. _____

4)

8,980



4. _____

5)

569



5. _____

6)

9,924



6. _____

7)

99,310



7. _____

8)

90,005



8. _____

9)

17,192



9. _____

10)

60,453

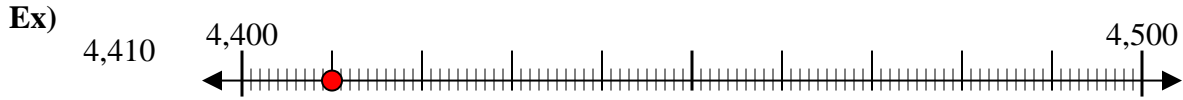


10. _____

Answers



Use the numberlines to round each number to the nearest 100.



Answers
Ex. **4,400**



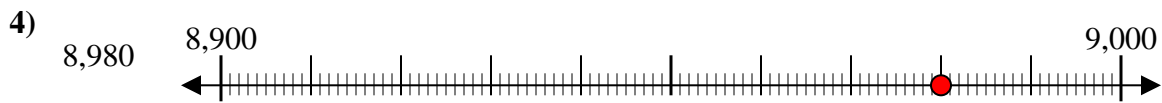
1. **900**



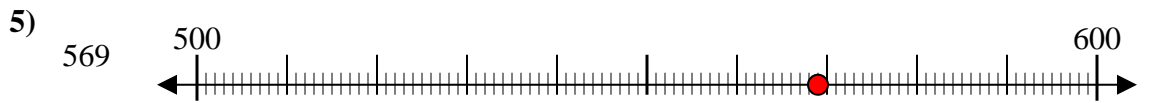
2. **800**



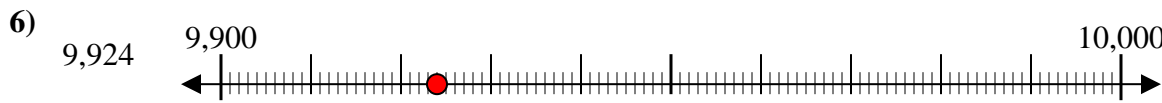
3. **9,700**



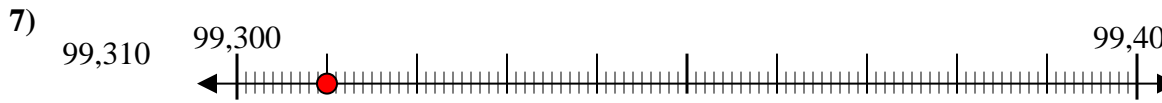
4. **9,000**



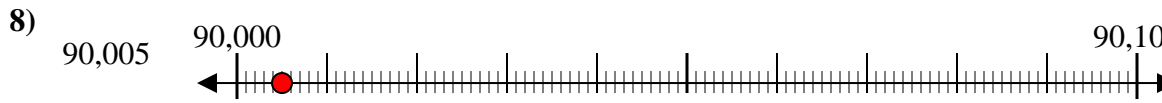
5. **600**



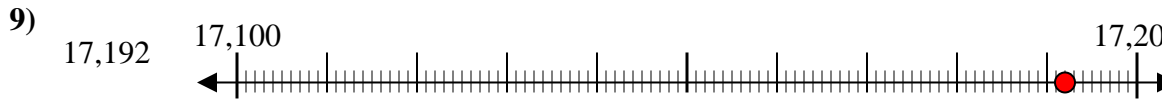
6. **9,900**



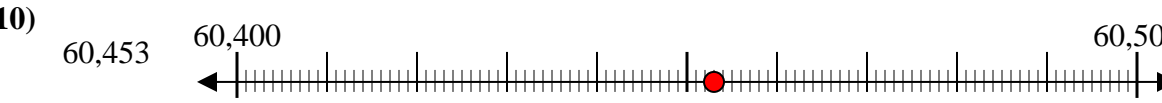
7. **99,300**



8. **90,000**



9. **17,200**



10. **60,500**



Use the numberlines to round each number to the nearest 100.

Answers

Ex)

1,224



Ex. 1,200

1)

9,937



1. _____

2)

81,895



2. _____

3)

791



3. _____

4)

3,821



4. _____

5)

216



5. _____

6)

45,078



6. _____

7)

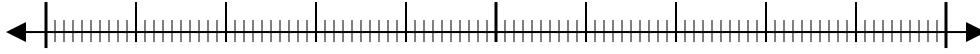
21,436



7. _____

8)

85,063



8. _____

9)

232



9. _____

10)

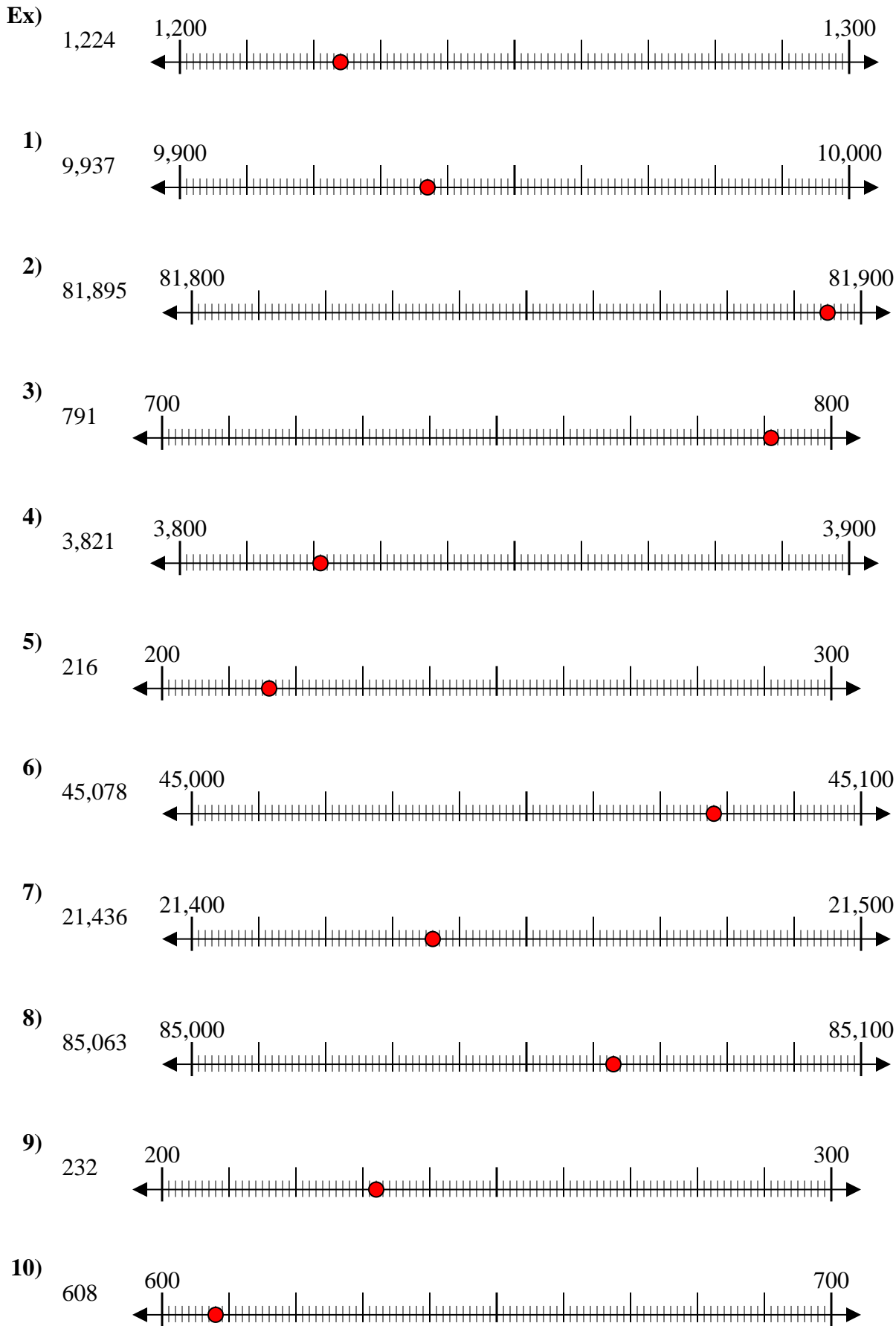
608



10. _____



Use the numberlines to round each number to the nearest 100.



Answers

- Ex. 1,200
1. 9,900
2. 81,900
3. 800
4. 3,800
5. 200
6. 45,100
7. 21,400
8. 85,100
9. 200
10. 600



Use the numberlines to round each number to the nearest 100.

Ex)

25,932



Ex. 25,900

1)

28,551



1. _____

2)

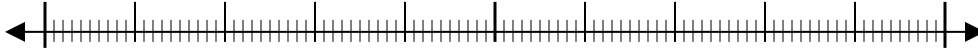
854



2. _____

3)

831



3. _____

4)

274



4. _____

5)

12,793



5. _____

6)

5,558



6. _____

7)

5,688



7. _____

8)

134



8. _____

9)

9,335



9. _____

10)

36,045



10. _____

Answers

Ex. 25,900

1. _____

2. _____

3. _____

4. _____

5. _____

6. _____

7. _____

8. _____

9. _____

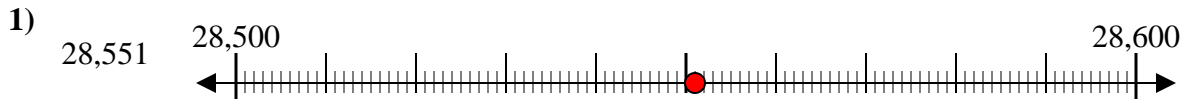
10. _____



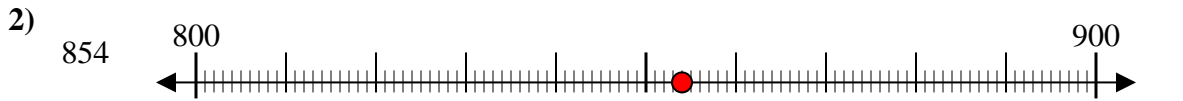
Use the numberlines to round each number to the nearest 100.



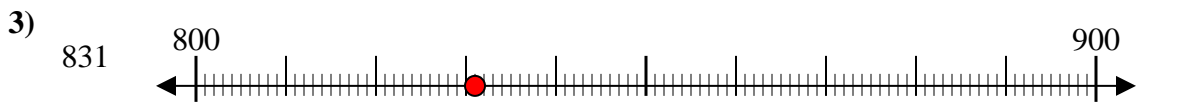
Answers
Ex. 25,900



1. 28,600



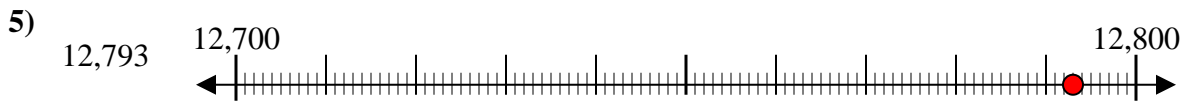
2. 900



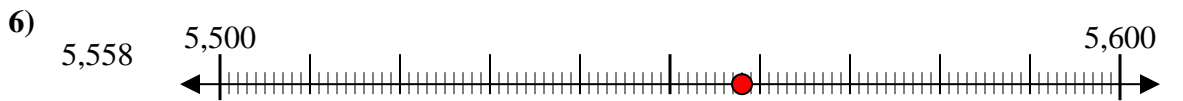
3. 800



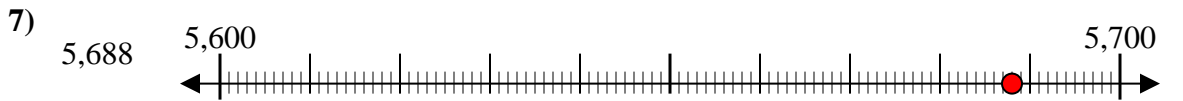
4. 300



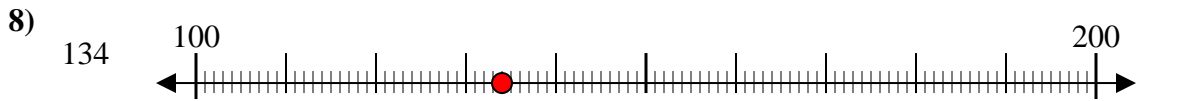
5. 12,800



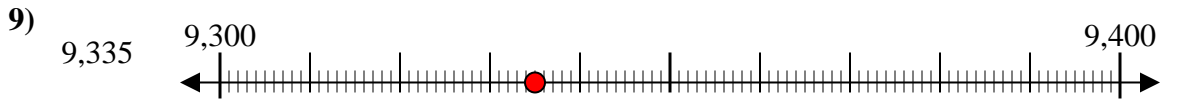
6. 5,600



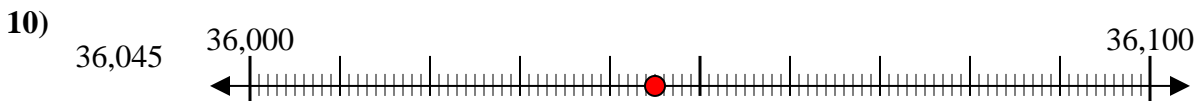
7. 5,700



8. 100



9. 9,300



10. 36,000



Use the numberlines to round each number to the nearest 100.

Answers

Ex)

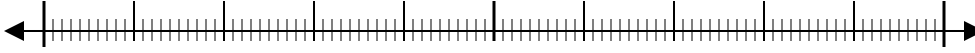
803



Ex. 800

1)

589



1. _____

2)

35,102



2. _____

3)

6,126



3. _____

4)

5,531



4. _____

5)

5,313



5. _____

6)

951



6. _____

7)

8,816



7. _____

8)

152



8. _____

9)

62,481



9. _____

10)

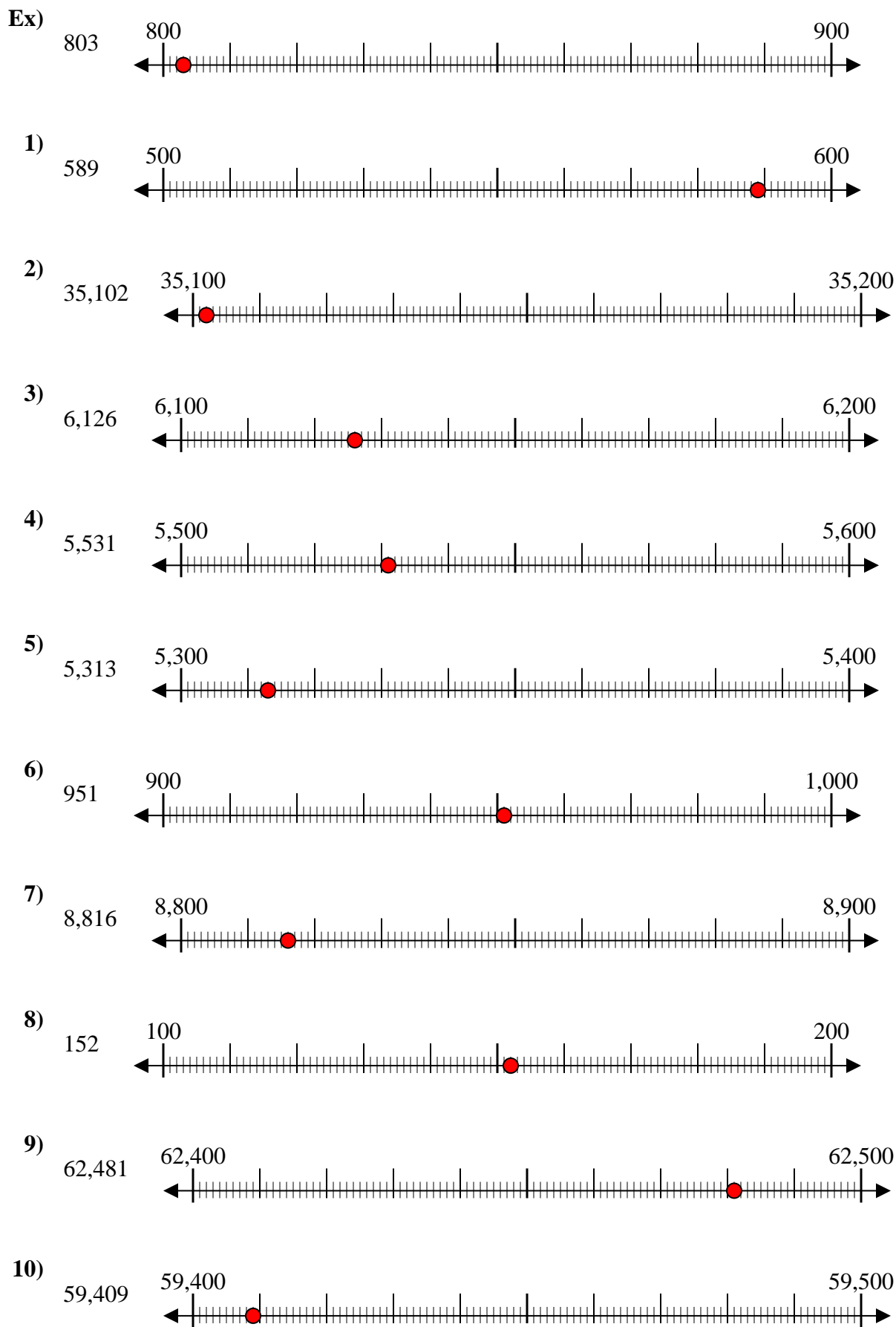
59,409



10. _____



Use the numberlines to round each number to the nearest 100.



Answers

- Ex. 800
1. 600
2. 35,100
3. 6,100
4. 5,500
5. 5,300
6. 1,000
7. 8,800
8. 200
9. 62,500
10. 59,400



Use the numberlines to round each number to the nearest 100.

Answers

Ex)

842



Ex. 800

1)

777



1. _____

2)

395



2. _____

3)

856



3. _____

4)

7,693



4. _____

5)

22,440



5. _____

6)

52,709



6. _____

7)

5,550



7. _____

8)

6,348



8. _____

9)

76,807



9. _____

10)

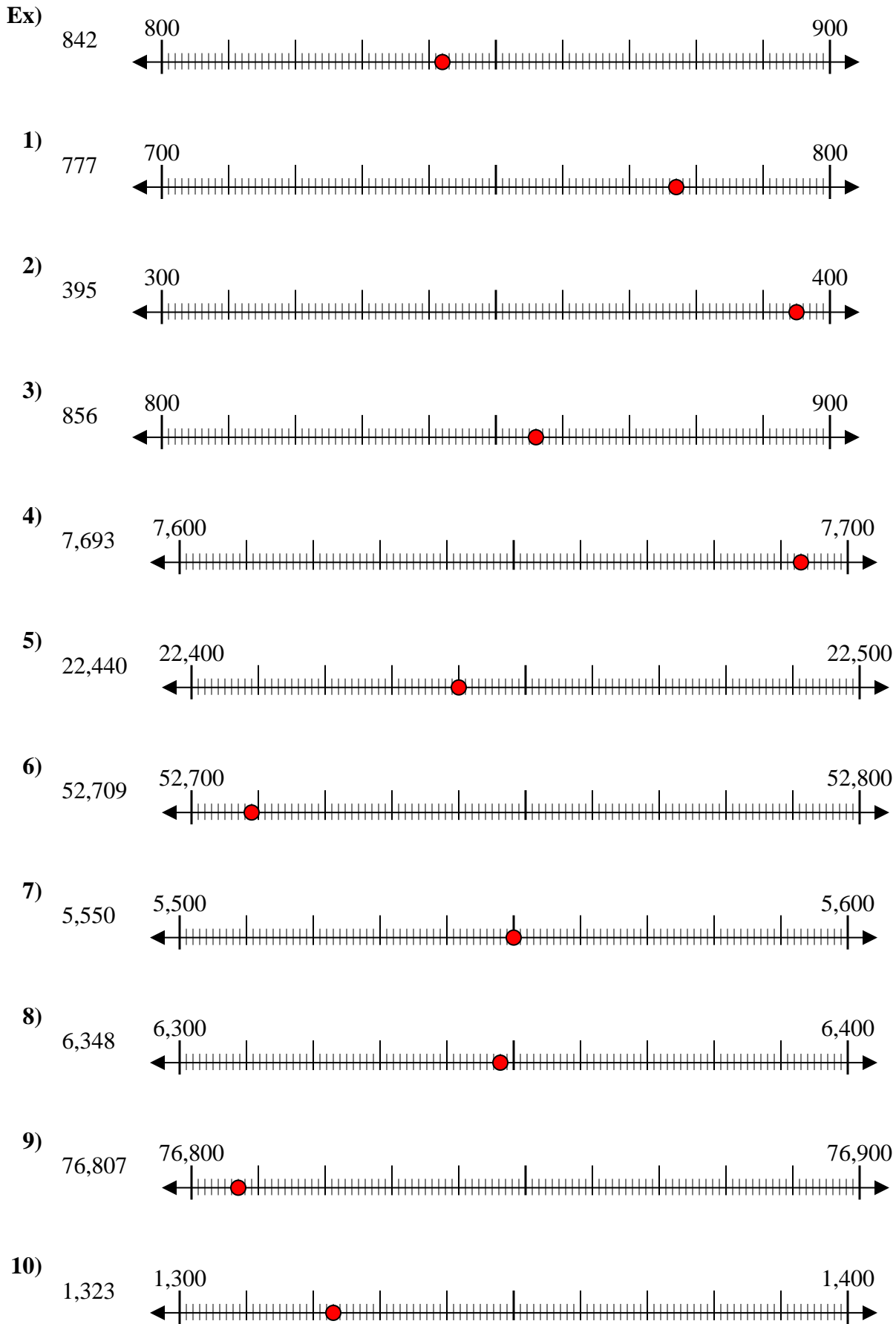
1,323



10. _____



Use the numberlines to round each number to the nearest 100.



Answers

- Ex. 800
1. 800
2. 400
3. 900
4. 7,700
5. 22,400
6. 52,700
7. 5,600
8. 6,300
9. 76,800
10. 1,300



Use the numberlines to round each number to the nearest 100.

Ex)

22,128



Ex. 22,100

1)

7,798



1. _____

2)

73,791



2. _____

3)

48,807



3. _____

4)

1,381



4. _____

5)

746



5. _____

6)

140



6. _____

7)

904



7. _____

8)

93,445



8. _____

9)

4,176



9. _____

10)

369



10. _____

Answers

Ex. 22,100

1. _____

2. _____

3. _____

4. _____

5. _____

6. _____

7. _____

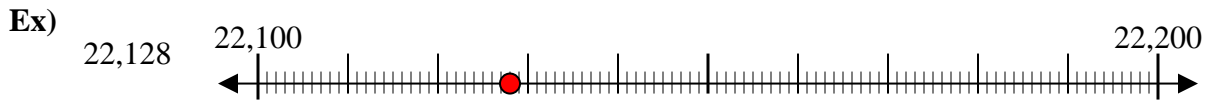
8. _____

9. _____

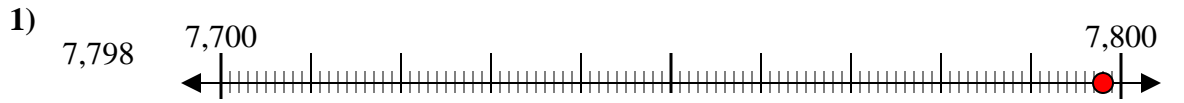
10. _____



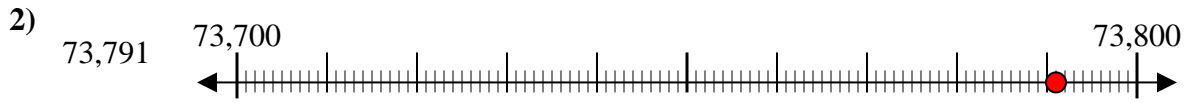
Use the numberlines to round each number to the nearest 100.



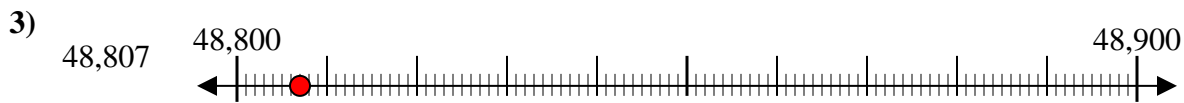
Answers
Ex. 22,100



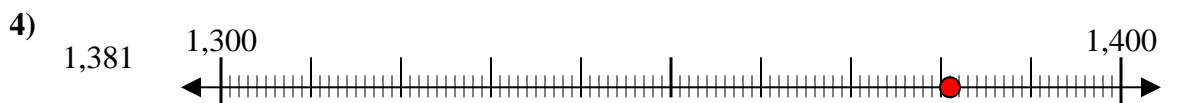
1. 7,800



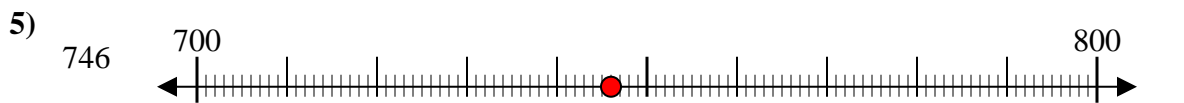
2. 73,800



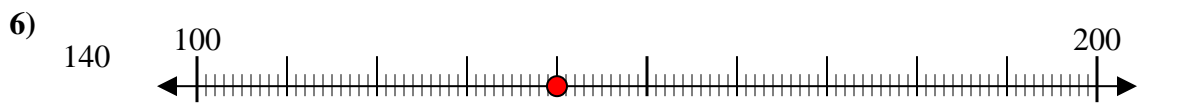
3. 48,800



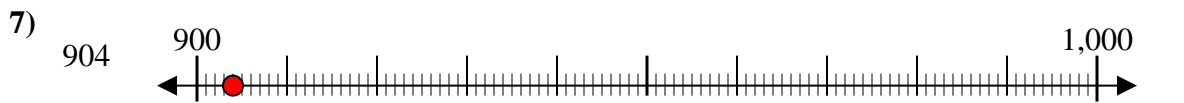
4. 1,400



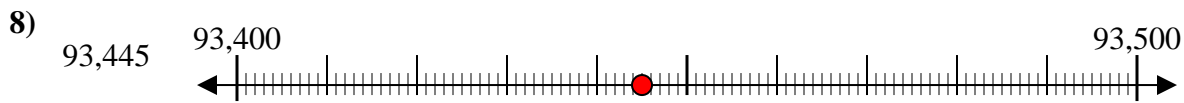
5. 700



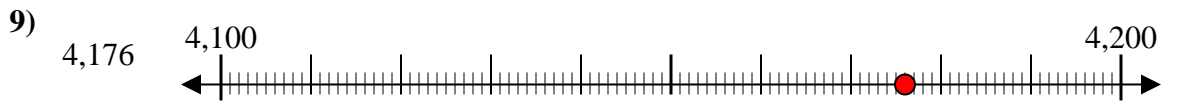
6. 100



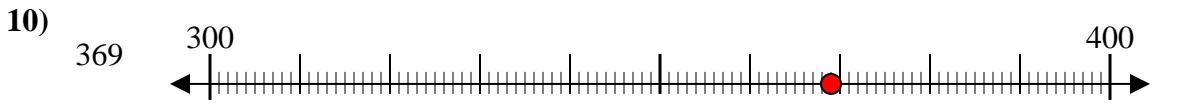
7. 900



8. 93,400



9. 4,200



10. 400



Use the numberlines to round each number to the nearest 100.

Answers

Ex)

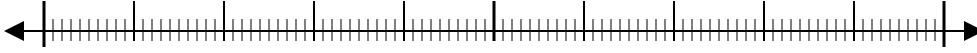
4,028



Ex. 4,000

1)

905



1. _____

2)

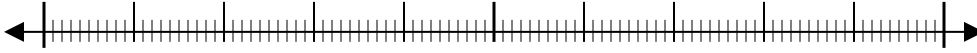
4,915



2. _____

3)

984



3. _____

4)

6,410



4. _____

5)

43,902



5. _____

6)

20,088



6. _____

7)

59,370



7. _____

8)

815



8. _____

9)

38,901



9. _____

10)

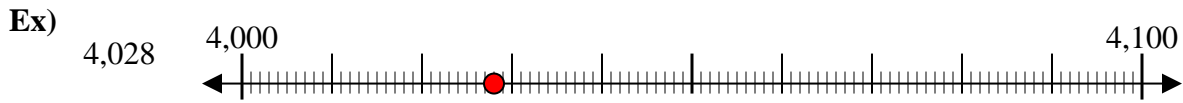
4,908



10. _____



Use the numberlines to round each number to the nearest 100.



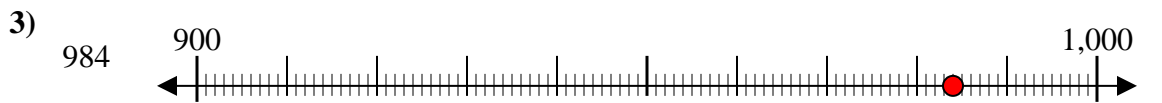
Answers
Ex. 4,000



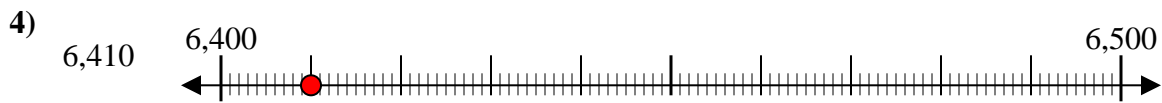
1. 900



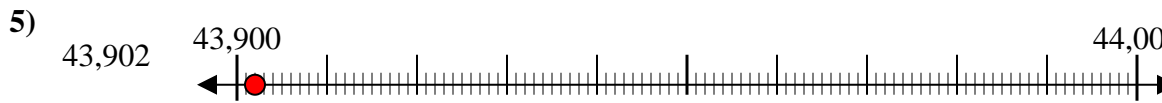
2. 4,900



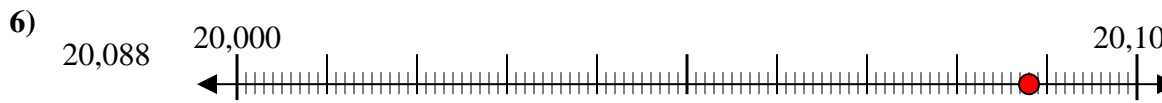
3. 1,000



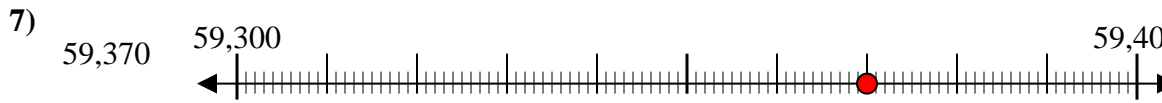
4. 6,400



5. 43,900



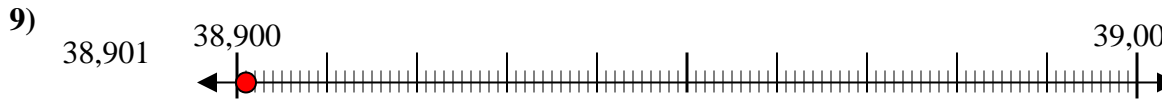
6. 20,100



7. 59,400



8. 800



9. 38,900



10. 4,900