



Use the numberlines to round each number to the nearest 100.

Answers

Ex)

25,932



Ex. 25,900

1)

28,551



1. _____

2)

854



2. _____

3)

831



3. _____

4)

274



4. _____

5)

12,793



5. _____

6)

5,558



6. _____

7)

5,688



7. _____

8)

134



8. _____

9)

9,335



9. _____

10)

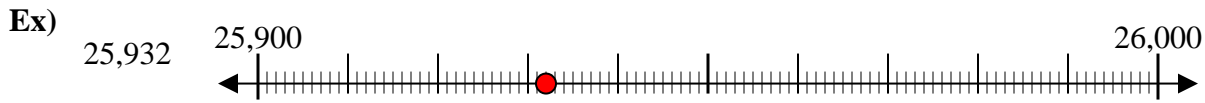
36,045



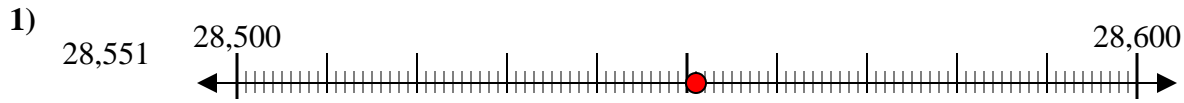
10. _____



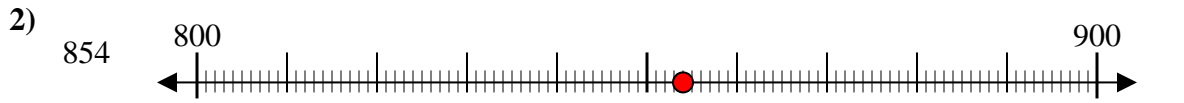
Use the numberlines to round each number to the nearest 100.



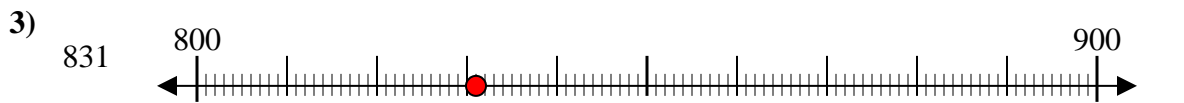
Answers
Ex. 25,900



1. 28,600



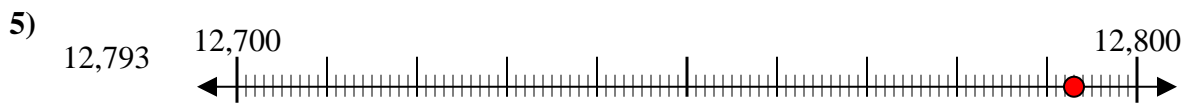
2. 900



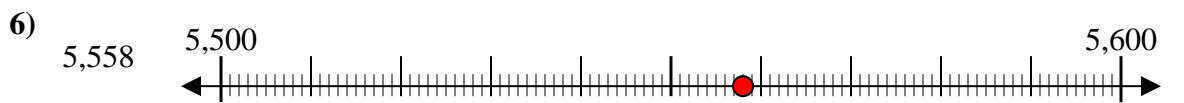
3. 800



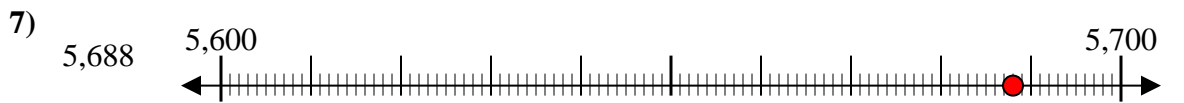
4. 300



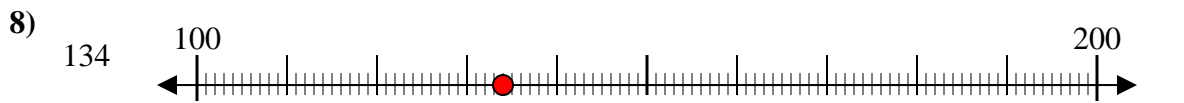
5. 12,800



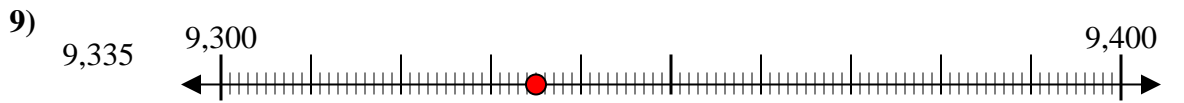
6. 5,600



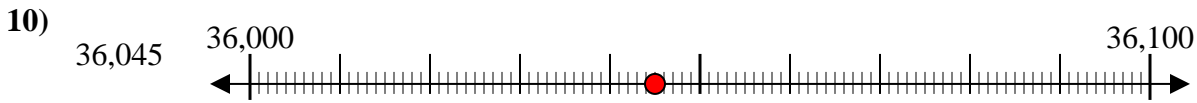
7. 5,700



8. 100



9. 9,300



10. 36,000