





Solve each problem.

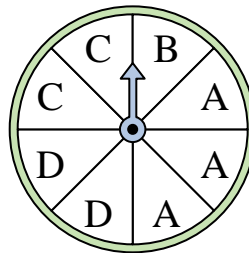
- 1) Which number is the spinner most likely to land on?



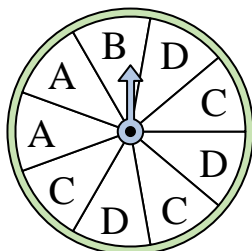
- 2) Which number is the spinner least likely to land on?



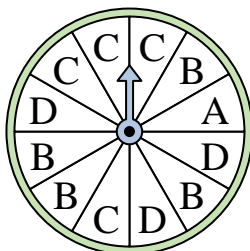
- 3) Which two letters is the spinner equally likely to land on?



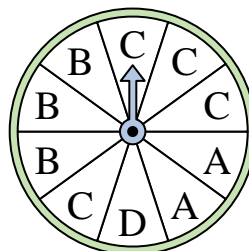
- 4) Which two letters is the spinner equally likely to land on?



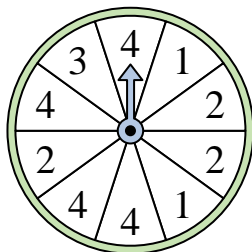
- 5) Which letter is the spinner least likely to land on?




- 6) Which letter is the spinner least likely to land on?



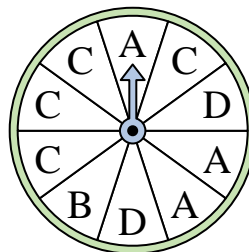
- 7) Which number is the spinner most likely to land on?



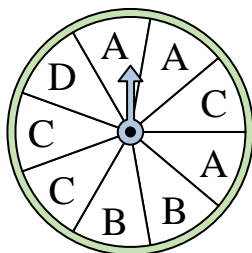
- 8) Which number is the spinner most likely to land on?




- 9) Which letter is the spinner least likely to land on?



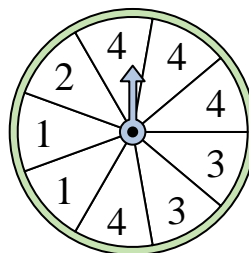
- 10) Which two letters is the spinner equally likely to land on?



- 11) Which number is the spinner least likely to land on?



- 12) Which number is the spinner most likely to land on?




**Answers**

1. \_\_\_\_\_
2. \_\_\_\_\_
3. \_\_\_\_\_
4. \_\_\_\_\_
5. \_\_\_\_\_
6. \_\_\_\_\_
7. \_\_\_\_\_
8. \_\_\_\_\_
9. \_\_\_\_\_
10. \_\_\_\_\_
11. \_\_\_\_\_
12. \_\_\_\_\_




Solve each problem.

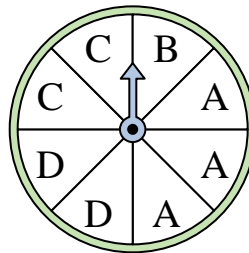
- 1) Which number is the spinner most likely to land on?



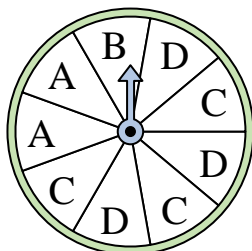
- 2) Which number is the spinner least likely to land on?



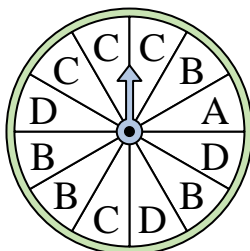
- 3) Which two letters is the spinner equally likely to land on?



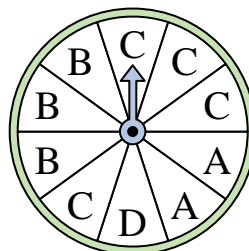
- 4) Which two letters is the spinner equally likely to land on?



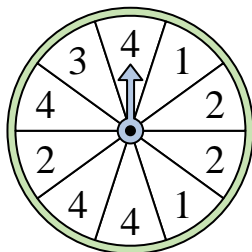
- 5) Which letter is the spinner least likely to land on?




- 6) Which letter is the spinner least likely to land on?



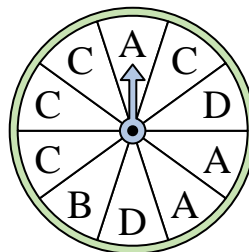
- 7) Which number is the spinner most likely to land on?



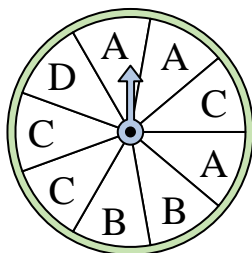
- 8) Which number is the spinner most likely to land on?




- 9) Which letter is the spinner least likely to land on?



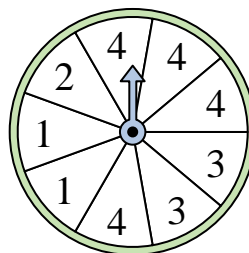
- 10) Which two letters is the spinner equally likely to land on?



- 11) Which number is the spinner least likely to land on?



- 12) Which number is the spinner most likely to land on?



Answers

1. 2
2. 1
3. C & D
4. C & D
5. A
6. D
7. 4
8. 4
9. B
10. A & C
11. 2
12. 4