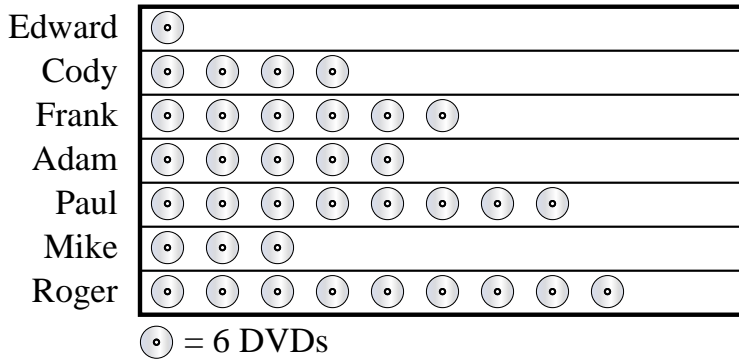




Frank and his friends were comparing the number of movies they owned. They organized the information in the pictograph below.

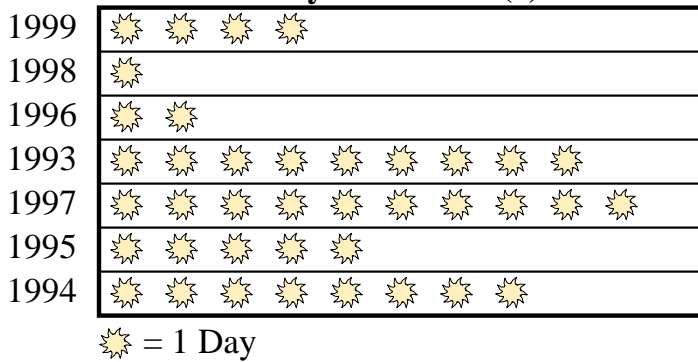
DVDs owned



- Who owned the fewest DVDs?
- Who had more DVDs, Edward or Cody?
- Who owned the largest number of DVDs?
- How many DVDs did Frank own?
- Who owned exactly 30 DVDs?

A weatherman was recording the number of days where the temperature was over 90°. He recorded the information in the pictograph below.

Days over 90° (f)



- Which year had more days over 90°, 1999 or 1998?
- Which year had the fewest days where the temperature was over 90°?
- How many days was the temperature over 90° in 1996?
- Which year had the most days where the temperature was over 90°?
- Which year had exactly 9 days over 90°?

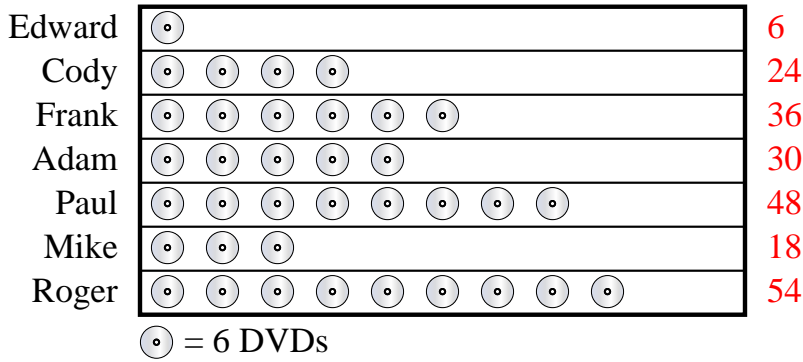
Answers

- _____
- _____
- _____
- _____
- _____
- _____
- _____
- _____
- _____
- _____



Frank and his friends were comparing the number of movies they owned. They organized the information in the pictograph below.

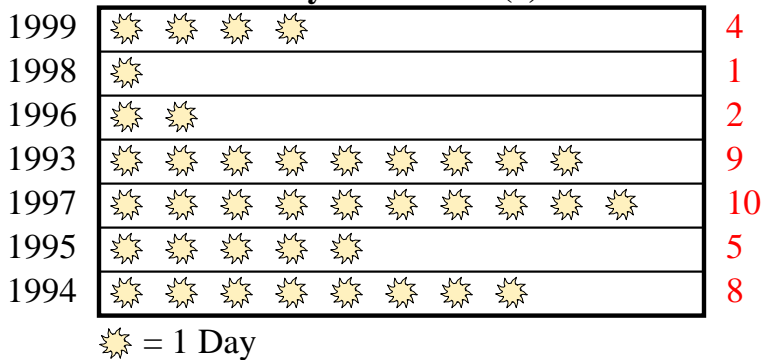
DVDs owned



- Who owned the fewest DVDs?
- Who had more DVDs, Edward or Cody?
- Who owned the largest number of DVDs?
- How many DVDs did Frank own?
- Who owned exactly 30 DVDs?

A weatherman was recording the number of days where the temperature was over 90°. He recorded the information in the pictograph below.

Days over 90° (f)



- Which year had more days over 90°, 1999 or 1998?
- Which year had the fewest days where the temperature was over 90°?
- How many days was the temperature over 90° in 1996?
- Which year had the most days where the temperature was over 90°?
- Which year had exactly 9 days over 90°?

Answers

- Edward**
- Cody**
- Roger**
- 36**
- Adam**
- 1999**
- 1998**
- 2**
- 1997**
- 1993**