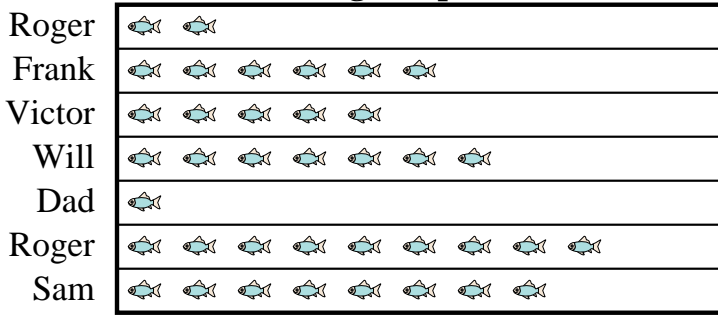




Frank's father took Frank and 5 friends on a fishing trip. They recorded the number of fish they caught using the pictograph below.

**Fishing Trip Results**

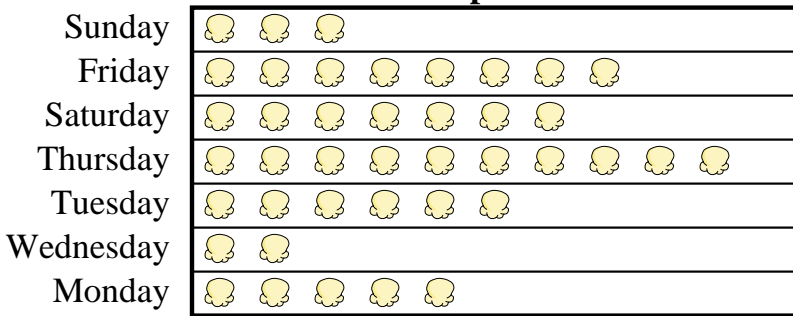


= 9 Fish Caught

- Who caught more fish, Roger or Frank?
- How many fish did Victor catch?
- Who caught the most fish?
- Who caught the fewest fish?
- Who caught exactly 63 fish?

A movie theater was tracking the number of small popcorns they sold each day. They organized the information in the pictograph below.

**Small Popcorns Sold**



= 8 Bags Sold

- Which day did they sell exactly 80 bags?
- Which day did they sell the most popcorn?
- Which day did they sell more popcorn, Sunday or Friday?
- How many bags did they sell on Saturday?
- Which day did they sell the least amount of popcorn?

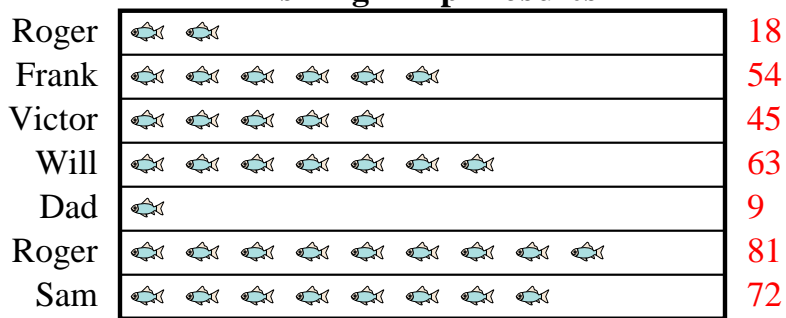
Answers

- \_\_\_\_\_
- \_\_\_\_\_
- \_\_\_\_\_
- \_\_\_\_\_
- \_\_\_\_\_
- \_\_\_\_\_
- \_\_\_\_\_
- \_\_\_\_\_
- \_\_\_\_\_
- \_\_\_\_\_



Frank's father took Frank and 5 friends on a fishing trip. They recorded the number of fish they caught using the pictograph below.

**Fishing Trip Results**

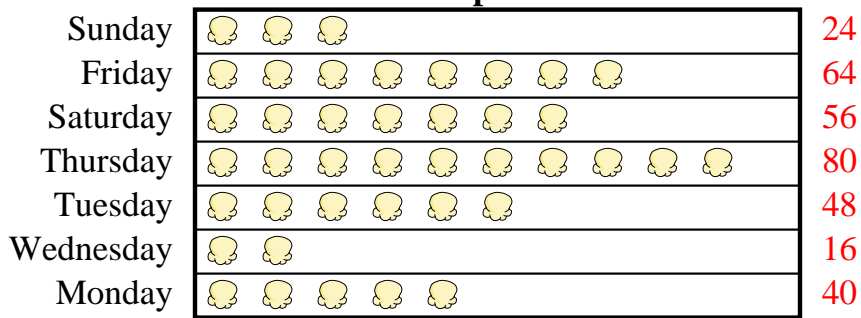


 = 9 Fish Caught

- Who caught more fish, Roger or Frank?
- How many fish did Victor catch?
- Who caught the most fish?
- Who caught the fewest fish?
- Who caught exactly 63 fish?

A movie theater was tracking the number of small popcorns they sold each day. They organized the information in the pictograph below.

**Small Popcorns Sold**



 = 8 Bags Sold

- Which day did they sell exactly 80 bags?
- Which day did they sell the most popcorn?
- Which day did they sell more popcorn, Sunday or Friday?
- How many bags did they sell on Saturday?
- Which day did they sell the least amount of popcorn?

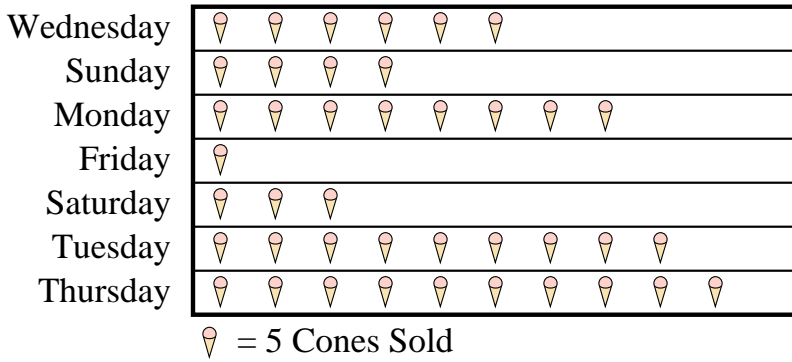
Answers

- Roger
- 45
- Roger
- Dad
- Will
- Thursday
- Thursday
- Friday
- 56
- Wednesday



At a fundraiser students from Mrs. Long's class were selling ice cream cones. Mrs. Long recorded their sales information in the pictograph below.

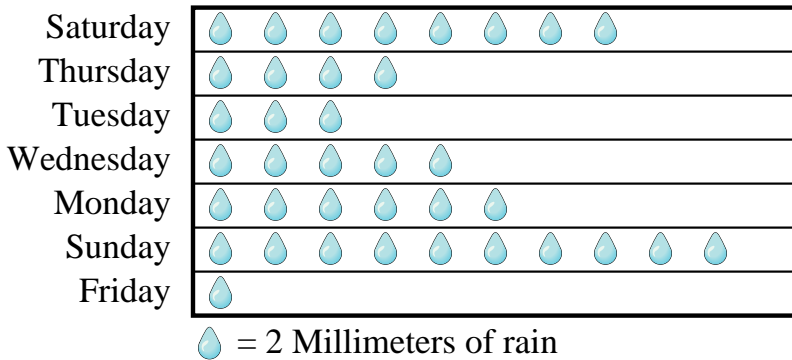
**Cones Sold**



- How many ice cream cones did they sell on Monday?
- Which day did they sell exactly 5 ice cream cones?
- Which day did they sell the fewest ice cream cones?
- Did they sell more cones on Wednesday or Sunday?
- Which day did they sell the most ice cream cones?

Mr. Sanders class was performing an experiment to see which day of the week had the most rain. His class recorded their information in the pictograph below.

**Millimeters of Rain**



- Which day had the most rain?
- Which day was there exactly 10 millimeters of rain?
- How much rain was there on Tuesday?
- Did it rain more on Saturday or Thursday?
- Which day had the least rain?

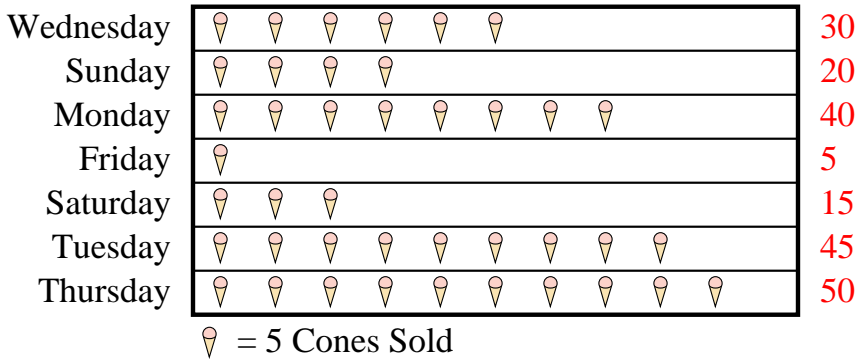
**Answers**

- \_\_\_\_\_
- \_\_\_\_\_
- \_\_\_\_\_
- \_\_\_\_\_
- \_\_\_\_\_
- \_\_\_\_\_
- \_\_\_\_\_
- \_\_\_\_\_
- \_\_\_\_\_
- \_\_\_\_\_



At a fundraiser students from Mrs. Long's class were selling ice cream cones. Mrs. Long recorded their sales information in the pictograph below.

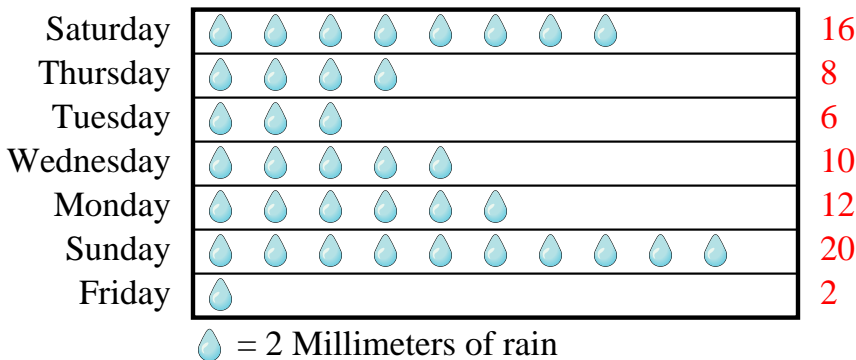
**Cones Sold**



- How many ice cream cones did they sell on Monday?
- Which day did they sell exactly 5 ice cream cones?
- Which day did they sell the fewest ice cream cones?
- Did they sell more cones on Wednesday or Sunday?
- Which day did they sell the most ice cream cones?

Mr. Sanders class was performing an experiment to see which day of the week had the most rain. His class recorded their information in the pictograph below.

**Millimeters of Rain**



- Which day had the most rain?
- Which day was there exactly 10 millimeters of rain?
- How much rain was there on Tuesday?
- Did it rain more on Saturday or Thursday?
- Which day had the least rain?

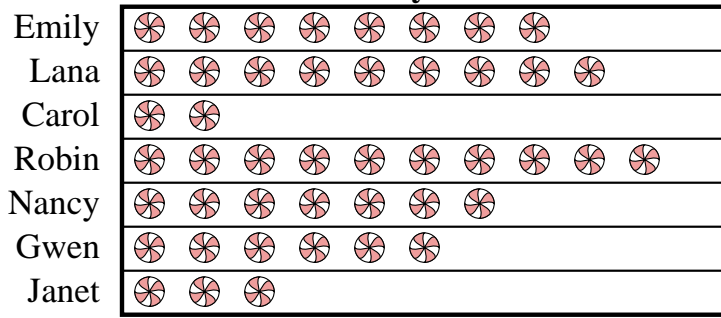
Answers

- 40
- Friday
- Friday
- Wednesday
- Thursday
- Sunday
- Wednesday
- 6
- Saturday
- Friday



Janet and her friends were comparing the amount of candy they received on Halloween. They recorded their information in the pictograph below.

**Candy Haul**




= 3 kilograms of candy

- How many kilograms of candy did Carol get?
- Who got the most candy?
- Who got exactly 30 kilograms of candy?
- Who got more candy, Emily or Lana?
- Who got the least amount of candy?

Sam was recording how many slam dunks his favorite teams scored. He organized the information in the pictograph below.

**Slam Dunks**



= 4 slam dunks

- Which team had the largest number of slam dunks?
- Which team had more slam dunks, Warriors or Hawks?
- Which team had the fewest number of slam dunks?
- Which team scored exactly 32 slam dunks?
- How many slam dunks did the Bulls make?

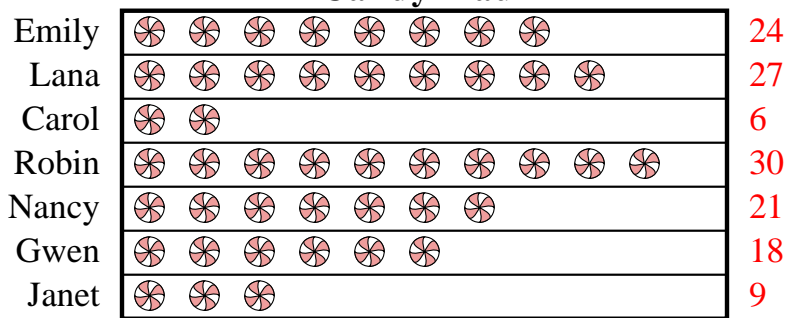
Answers

- \_\_\_\_\_
- \_\_\_\_\_
- \_\_\_\_\_
- \_\_\_\_\_
- \_\_\_\_\_
- \_\_\_\_\_
- \_\_\_\_\_
- \_\_\_\_\_
- \_\_\_\_\_
- \_\_\_\_\_



Janet and her friends were comparing the amount of candy they received on Halloween. They recorded their information in the pictograph below.

**Candy Haul**




= 3 kilograms of candy

- How many kilograms of candy did Carol get?
- Who got the most candy?
- Who got exactly 30 kilograms of candy?
- Who got more candy, Emily or Lana?
- Who got the least amount of candy?

Sam was recording how many slam dunks his favorite teams scored. He organized the information in the pictograph below.

**Slam Dunks**



= 4 slam dunks

- Which team had the largest number of slam dunks?
- Which team had more slam dunks, Warriors or Hawks?
- Which team had the fewest number of slam dunks?
- Which team scored exactly 32 slam dunks?
- How many slam dunks did the Bulls make?

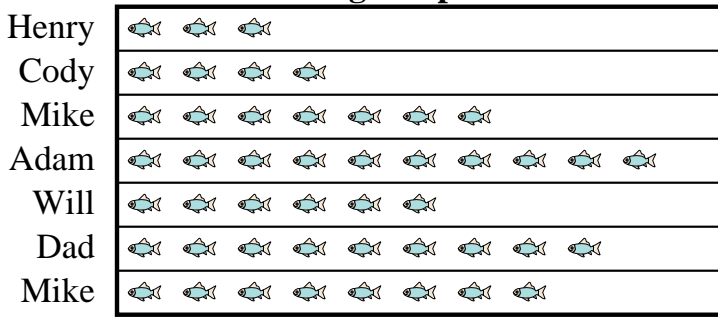
Answers

- 6
- Robin
- Robin
- Lana
- Carol
- Warriors
- Warriors
- Rockets
- Celtics
- 12



Henry's father took Henry and 5 friends on a fishing trip. They recorded the number of fish they caught using the pictograph below.

**Fishing Trip Results**

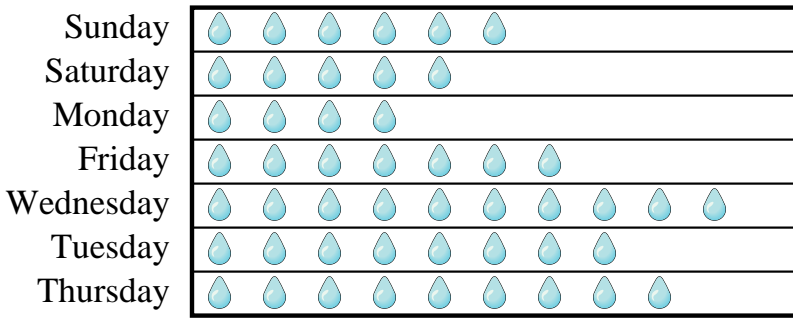


= 7 Fish Caught

- 1) Who caught the most fish?
- 2) Who caught exactly 70 fish?
- 3) Who caught the fewest fish?
- 4) How many fish did Mike catch?
- 5) Who caught more fish, Henry or Cody?

Mr. Sanders class was performing an experiment to see which day of the week had the most rain. His class recorded their information in the pictograph below.

**Millimeters of Rain**



= 6 Millimeters of rain

- 6) Which day had the least rain?
- 7) Which day was there exactly 42 millimeters of rain?
- 8) How much rain was there on Monday?
- 9) Which day had the most rain?
- 10) Did it rain more on Sunday or Saturday?


Answers

1. \_\_\_\_\_
2. \_\_\_\_\_
3. \_\_\_\_\_
4. \_\_\_\_\_
5. \_\_\_\_\_
6. \_\_\_\_\_
7. \_\_\_\_\_
8. \_\_\_\_\_
9. \_\_\_\_\_
10. \_\_\_\_\_



Henry's father took Henry and 5 friends on a fishing trip. They recorded the number of fish they caught using the pictograph below.

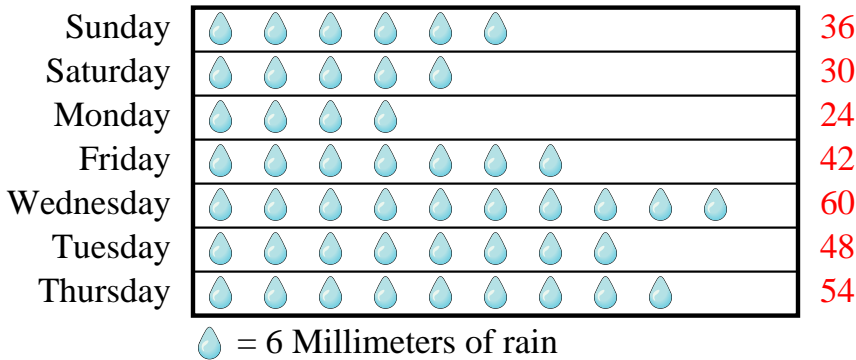
**Fishing Trip Results**



- Who caught the most fish?
- Who caught exactly 70 fish?
- Who caught the fewest fish?
- How many fish did Mike catch?
- Who caught more fish, Henry or Cody?

Mr. Sanders class was performing an experiment to see which day of the week had the most rain. His class recorded their information in the pictograph below.

**Millimeters of Rain**



- Which day had the least rain?
- Which day was there exactly 42 millimeters of rain?
- How much rain was there on Monday?
- Which day had the most rain?
- Did it rain more on Sunday or Saturday?

Answers

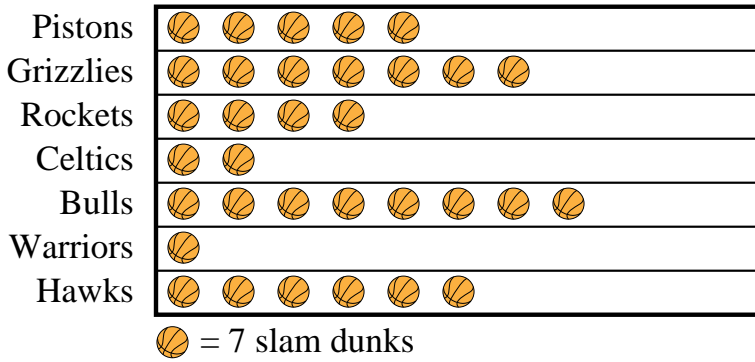
- Adam
- Adam
- Henry
- 56
- Cody
- Monday
- Friday
- 24
- Wednesday
- Sunday





Sam was recording how many slam dunks his favorite teams scored. He organized the information in the pictograph below.

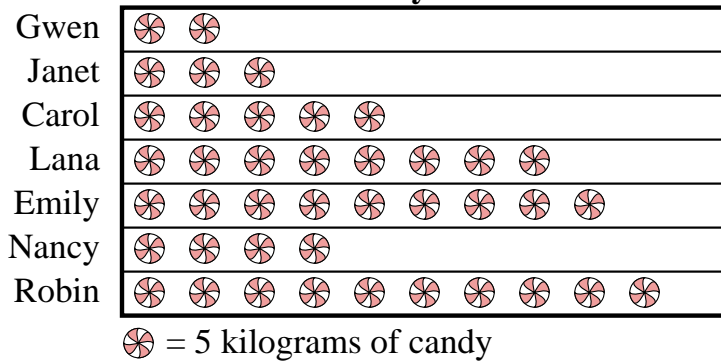
**Slam Dunks**



- Which team scored exactly 14 slam dunks?
- Which team had the fewest number of slam dunks?
- Which team had more slam dunks, Pistons or Grizzlies?
- How many slam dunks did the Rockets make?
- Which team had the largest number of slam dunks?

Janet and her friends were comparing the amount of candy they received on Halloween. They recorded their information in the pictograph below.

**Candy Haul**




- Who got the least amount of candy?
- Who got exactly 40 kilograms of candy?
- Who got more candy, Gwen or Janet?
- How many kilograms of candy did Carol get?
- Who got the most candy?

Answers

- \_\_\_\_\_
- \_\_\_\_\_
- \_\_\_\_\_
- \_\_\_\_\_
- \_\_\_\_\_
- \_\_\_\_\_
- \_\_\_\_\_
- \_\_\_\_\_
- \_\_\_\_\_
- \_\_\_\_\_

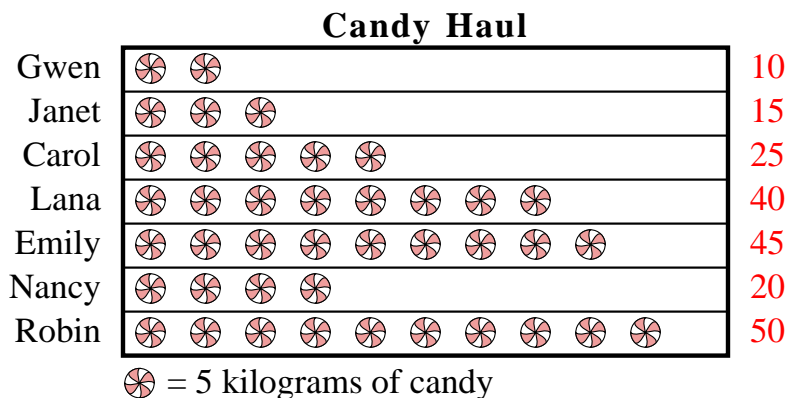


Sam was recording how many slam dunks his favorite teams scored. He organized the information in the pictograph below.



- Which team scored exactly 14 slam dunks?
- Which team had the fewest number of slam dunks?
- Which team had more slam dunks, Pistons or Grizzlies?
- How many slam dunks did the Rockets make?
- Which team had the largest number of slam dunks?

Janet and her friends were comparing the amount of candy they received on Halloween. They recorded their information in the pictograph below.



- Who got the least amount of candy?
- Who got exactly 40 kilograms of candy?
- Who got more candy, Gwen or Janet?
- How many kilograms of candy did Carol get?
- Who got the most candy?

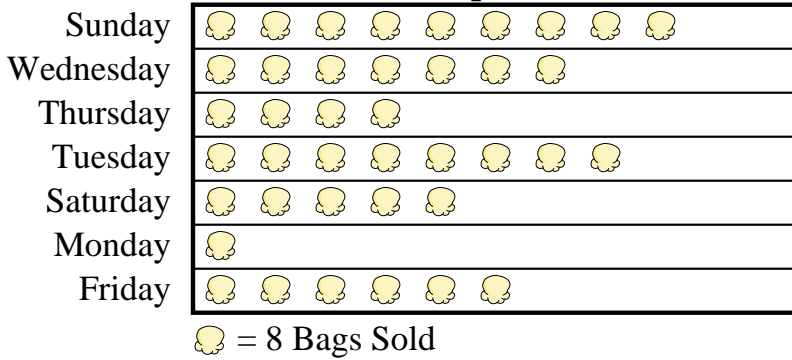
Answers

- Celtics
- Warriors
- Grizzlies
- 28
- Bulls
- Gwen
- Lana
- Janet
- 25
- Robin



A movie theater was tracking the number of small popcorns they sold each day. They organized the information in the pictograph below.

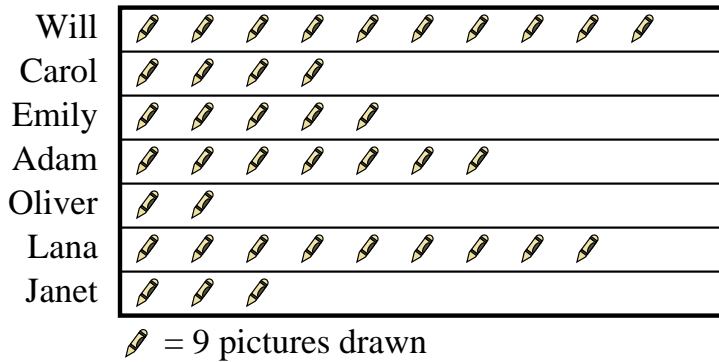
**Small Popcorns Sold**



- How many bags did they sell on Thursday?
- Which day did they sell the most popcorn?
- Which day did they sell exactly 64 bags?
- Which day did they sell the least amount of popcorn?
- Which day did they sell more popcorn, Sunday or Wednesday?

Several students were helping to decorate the school halls by drawing pictures to hang up. The pictograph below shows the number of pictures each student drew.

**Pictures Drawn**



- Who drew exactly 63 pictures?
- Did Will or Carol draw more pictures?
- How many pictures did Emily draw?
- Who drew the fewest pictures?
- Who drew the most pictures?

Answers

- \_\_\_\_\_
- \_\_\_\_\_
- \_\_\_\_\_
- \_\_\_\_\_
- \_\_\_\_\_
- \_\_\_\_\_
- \_\_\_\_\_
- \_\_\_\_\_
- \_\_\_\_\_
- \_\_\_\_\_



A movie theater was tracking the number of small popcorns they sold each day. They organized the information in the pictograph below.

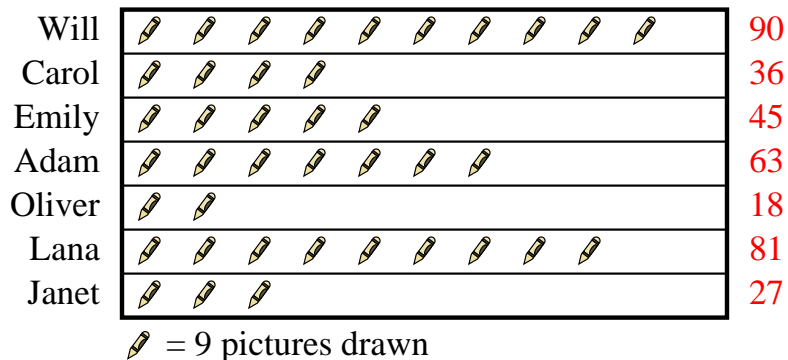
**Small Popcorns Sold**



- How many bags did they sell on Thursday?
- Which day did they sell the most popcorn?
- Which day did they sell exactly 64 bags?
- Which day did they sell the least amount of popcorn?
- Which day did they sell more popcorn, Sunday or Wednesday?

Several students were helping to decorate the school halls by drawing pictures to hang up. The pictograph below shows the number of pictures each student drew.

**Pictures Drawn**



- Who drew exactly 63 pictures?
- Did Will or Carol draw more pictures?
- How many pictures did Emily draw?
- Who drew the fewest pictures?
- Who drew the most pictures?


Answers

- 32
- Sunday
- Tuesday
- Monday
- Sunday
- Adam
- Will
- 45
- Oliver
- Will



Sam and his friends were trying to see who could catch the most bugs in a day. They recorded their information in the pictograph below.

**Bug Catching Contest**

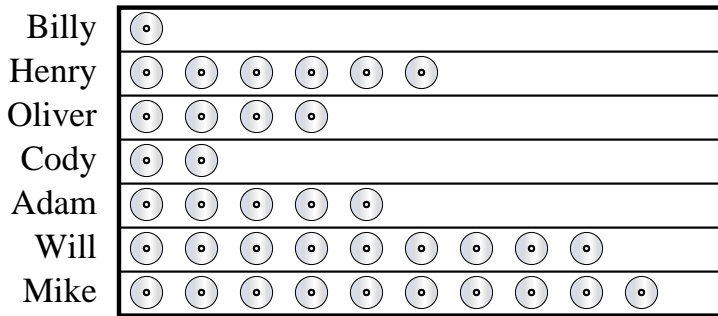


= 8 Bugs

- Who caught the greatest number of bugs?
- Who caught more bugs, Will or Mike?
- Who caught exactly 56 bugs?
- Who caught the fewest number of bugs?
- How many bugs did Adam catch?

Henry and his friends were comparing the number of movies they owned. They organized the information in the pictograph below.

**DVDs owned**



= 5 DVDs

- Who owned the fewest DVDs?
- Who owned exactly 10 DVDs?
- Who had more DVDs, Billy or Henry?
- Who owned the largest number of DVDs?
- How many DVDs did Oliver own?


Answers

- \_\_\_\_\_
- \_\_\_\_\_
- \_\_\_\_\_
- \_\_\_\_\_
- \_\_\_\_\_
- \_\_\_\_\_
- \_\_\_\_\_
- \_\_\_\_\_
- \_\_\_\_\_
- \_\_\_\_\_



Sam and his friends were trying to see who could catch the most bugs in a day. They recorded their information in the pictograph below.

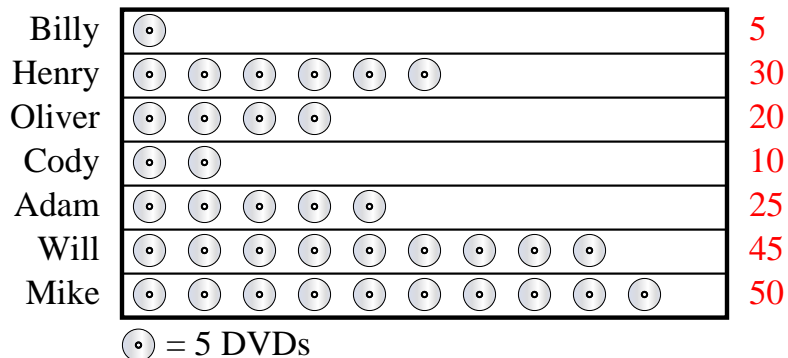
**Bug Catching Contest**



- Who caught the greatest number of bugs?
- Who caught more bugs, Will or Mike?
- Who caught exactly 56 bugs?
- Who caught the fewest number of bugs?
- How many bugs did Adam catch?

Henry and his friends were comparing the number of movies they owned. They organized the information in the pictograph below.

**DVDs owned**



- Who owned the fewest DVDs?
- Who owned exactly 10 DVDs?
- Who had more DVDs, Billy or Henry?
- Who owned the largest number of DVDs?
- How many DVDs did Oliver own?


Answers

- Henry**
- Mike**
- Henry**
- Will**
- 24**
- Billy**
- Cody**
- Henry**
- Mike**
- 20**



Victor and his friends were trying to see who could catch the most bugs in a day. They recorded their information in the pictograph below.

**Bug Catching Contest**

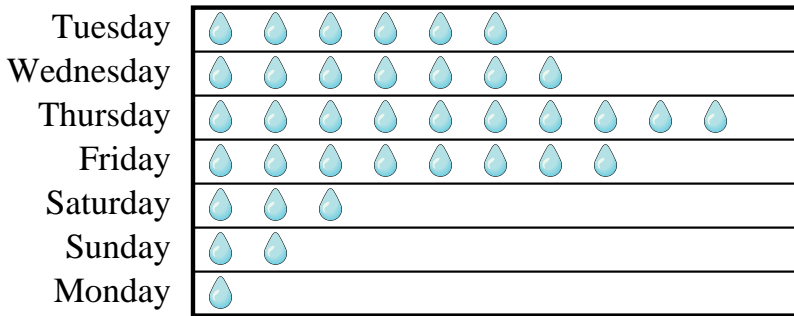


= 3 Bugs

- Who caught the fewest number of bugs?
- How many bugs did Sam catch?
- Who caught more bugs, Frank or Roger?
- Who caught exactly 15 bugs?
- Who caught the greatest number of bugs?

Mr. Sanders class was performing an experiment to see which day of the week had the most rain. His class recorded their information in the pictograph below.

**Millimeters of Rain**



= 7 Millimeters of rain

- How much rain was there on Thursday?
- Did it rain more on Tuesday or Wednesday?
- Which day had the least rain?
- Which day was there exactly 56 millimeters of rain?
- Which day had the most rain?


Answers


- \_\_\_\_\_
- \_\_\_\_\_
- \_\_\_\_\_
- \_\_\_\_\_
- \_\_\_\_\_
- \_\_\_\_\_
- \_\_\_\_\_
- \_\_\_\_\_
- \_\_\_\_\_
- \_\_\_\_\_



Victor and his friends were trying to see who could catch the most bugs in a day. They recorded their information in the pictograph below.

**Bug Catching Contest**

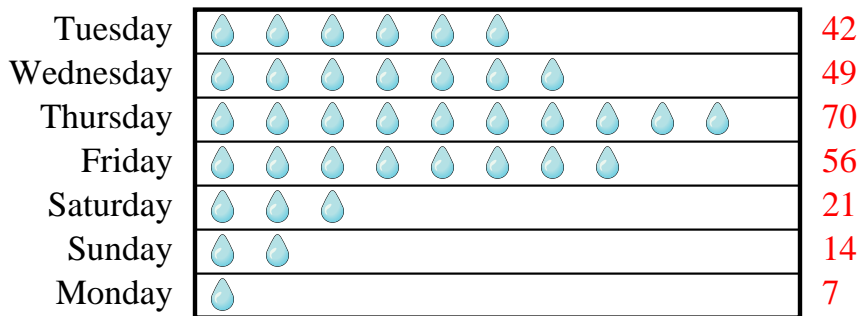


 = 3 Bugs

- Who caught the fewest number of bugs?
- How many bugs did Sam catch?
- Who caught more bugs, Frank or Roger?
- Who caught exactly 15 bugs?
- Who caught the greatest number of bugs?

Mr. Sanders class was performing an experiment to see which day of the week had the most rain. His class recorded their information in the pictograph below.

**Millimeters of Rain**



 = 7 Millimeters of rain

- How much rain was there on Thursday?
- Did it rain more on Tuesday or Wednesday?
- Which day had the least rain?
- Which day was there exactly 56 millimeters of rain?
- Which day had the most rain?

Answers

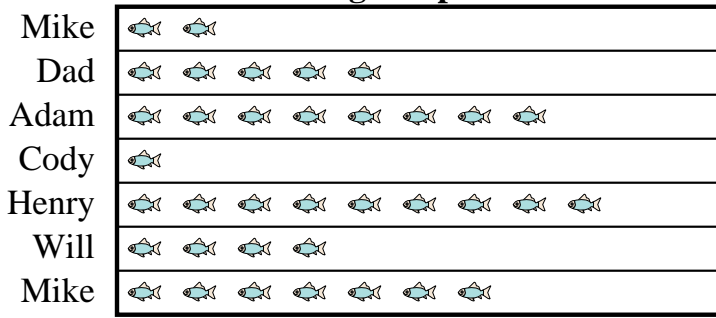
- Jerry
- 9
- Frank
- Billy
- Frank
- 70
- Wednesday
- Monday
- Friday
- Thursday





Henry's father took Henry and 5 friends on a fishing trip. They recorded the number of fish they caught using the pictograph below.

**Fishing Trip Results**

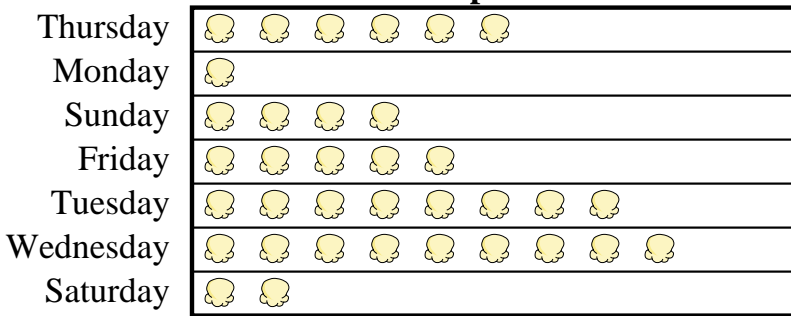


= 4 Fish Caught

- How many fish did Adam catch?
- Who caught the most fish?
- Who caught the fewest fish?
- Who caught more fish, Mike or Dad?
- Who caught exactly 4 fish?

A movie theater was tracking the number of small popcorns they sold each day. They organized the information in the pictograph below.

**Small Popcorns Sold**



= 4 Bags Sold

- Which day did they sell exactly 20 bags?
- How many bags did they sell on Sunday?
- Which day did they sell the most popcorn?
- Which day did they sell more popcorn, Thursday or Monday?
- Which day did they sell the least amount of popcorn?


Answers

- \_\_\_\_\_
- \_\_\_\_\_
- \_\_\_\_\_
- \_\_\_\_\_
- \_\_\_\_\_
- \_\_\_\_\_
- \_\_\_\_\_
- \_\_\_\_\_
- \_\_\_\_\_
- \_\_\_\_\_



Henry's father took Henry and 5 friends on a fishing trip. They recorded the number of fish they caught using the pictograph below.

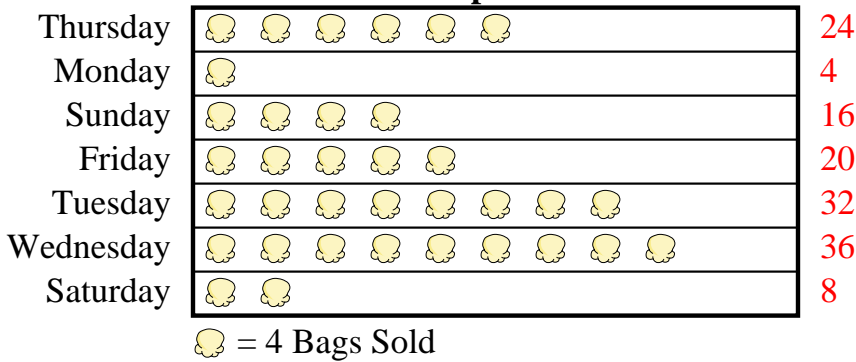
**Fishing Trip Results**



- How many fish did Adam catch?
- Who caught the most fish?
- Who caught the fewest fish?
- Who caught more fish, Mike or Dad?
- Who caught exactly 4 fish?

A movie theater was tracking the number of small popcorns they sold each day. They organized the information in the pictograph below.

**Small Popcorns Sold**



- Which day did they sell exactly 20 bags?
- How many bags did they sell on Sunday?
- Which day did they sell the most popcorn?
- Which day did they sell more popcorn, Thursday or Monday?
- Which day did they sell the least amount of popcorn?


Answers

- 32
- Henry
- Cody
- Mike
- Cody
- Friday
- 16
- Wednesday
- Thursday
- Monday



Sam and his friends were trying to see who could catch the most bugs in a day. They recorded their information in the pictograph below.

**Bug Catching Contest**

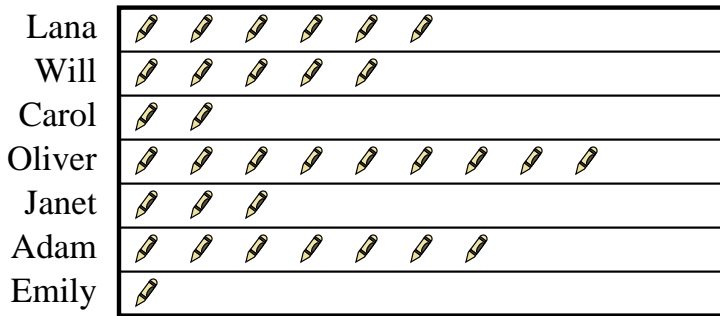


= 3 Bugs

- Who caught exactly 30 bugs?
- Who caught the greatest number of bugs?
- Who caught the fewest number of bugs?
- Who caught more bugs, Mike or Mike?
- How many bugs did Adam catch?

Several students were helping to decorate the school halls by drawing pictures to hang up. The pictograph below shows the number of pictures each student drew.

**Pictures Drawn**



= 5 pictures drawn

- Who drew exactly 45 pictures?
- Who drew the most pictures?
- How many pictures did Carol draw?
- Who drew the fewest pictures?
- Did Lana or Will draw more pictures?


Answers

- \_\_\_\_\_
- \_\_\_\_\_
- \_\_\_\_\_
- \_\_\_\_\_
- \_\_\_\_\_
- \_\_\_\_\_
- \_\_\_\_\_
- \_\_\_\_\_
- \_\_\_\_\_
- \_\_\_\_\_



Sam and his friends were trying to see who could catch the most bugs in a day. They recorded their information in the pictograph below.

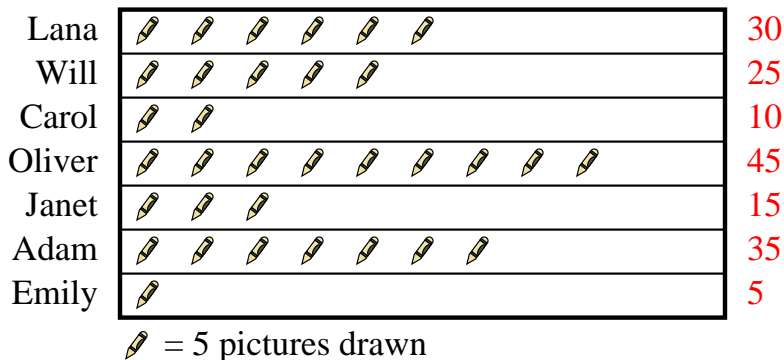
**Bug Catching Contest**



- Who caught exactly 30 bugs?
- Who caught the greatest number of bugs?
- Who caught the fewest number of bugs?
- Who caught more bugs, Mike or Mike?
- How many bugs did Adam catch?

Several students were helping to decorate the school halls by drawing pictures to hang up. The pictograph below shows the number of pictures each student drew.

**Pictures Drawn**



- Who drew exactly 45 pictures?
- Who drew the most pictures?
- How many pictures did Carol draw?
- Who drew the fewest pictures?
- Did Lana or Will draw more pictures?

Answers

- Henry
- Henry
- Will
- Mike
- 27
- Oliver
- Oliver
- 10
- Emily
- Lana