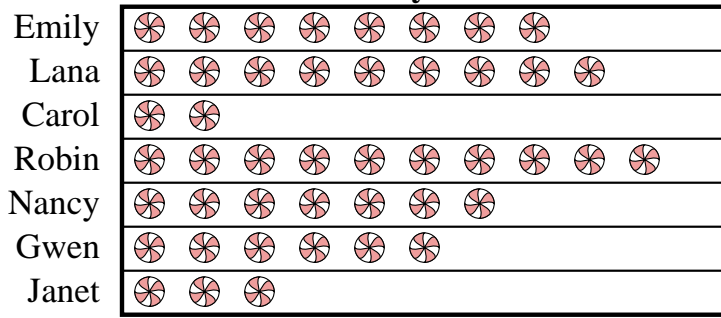




Janet and her friends were comparing the amount of candy they received on Halloween. They recorded their information in the pictograph below.

Candy Haul




= 3 kilograms of candy

- How many kilograms of candy did Carol get?
- Who got the most candy?
- Who got exactly 30 kilograms of candy?
- Who got more candy, Emily or Lana?
- Who got the least amount of candy?

Sam was recording how many slam dunks his favorite teams scored. He organized the information in the pictograph below.

Slam Dunks



= 4 slam dunks

- Which team had the largest number of slam dunks?
- Which team had more slam dunks, Warriors or Hawks?
- Which team had the fewest number of slam dunks?
- Which team scored exactly 32 slam dunks?
- How many slam dunks did the Bulls make?

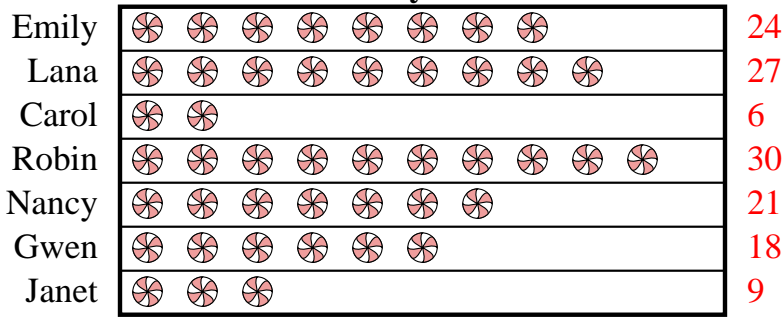
Answers

- _____
- _____
- _____
- _____
- _____
- _____
- _____
- _____
- _____
- _____



Janet and her friends were comparing the amount of candy they received on Halloween. They recorded their information in the pictograph below.

Candy Haul




= 3 kilograms of candy

- How many kilograms of candy did Carol get?
- Who got the most candy?
- Who got exactly 30 kilograms of candy?
- Who got more candy, Emily or Lana?
- Who got the least amount of candy?

Sam was recording how many slam dunks his favorite teams scored. He organized the information in the pictograph below.

Slam Dunks



= 4 slam dunks

- Which team had the largest number of slam dunks?
- Which team had more slam dunks, Warriors or Hawks?
- Which team had the fewest number of slam dunks?
- Which team scored exactly 32 slam dunks?
- How many slam dunks did the Bulls make?

Answers

- 6
- Robin
- Robin
- Lana
- Carol
- Warriors
- Warriors
- Rockets
- Celtics
- 12