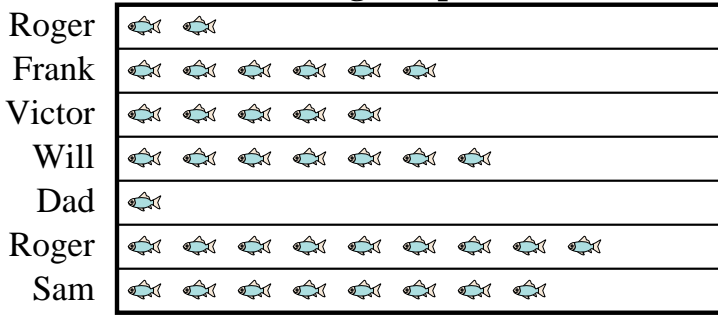




Frank's father took Frank and 5 friends on a fishing trip. They recorded the number of fish they caught using the pictograph below.

Fishing Trip Results

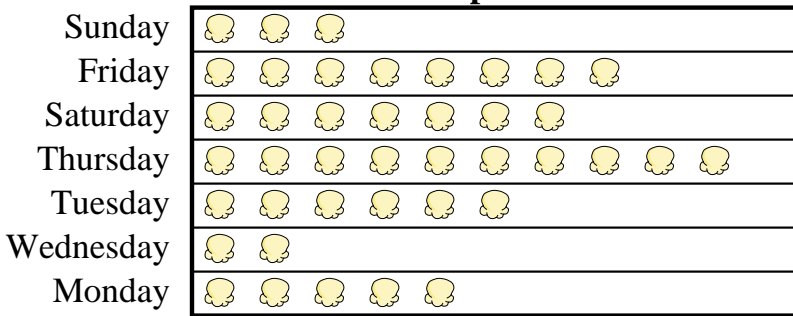


= 9 Fish Caught

- Who caught more fish, Roger or Frank?
- How many fish did Victor catch?
- Who caught the most fish?
- Who caught the fewest fish?
- Who caught exactly 63 fish?

A movie theater was tracking the number of small popcorns they sold each day. They organized the information in the pictograph below.

Small Popcorns Sold



= 8 Bags Sold

- Which day did they sell exactly 80 bags?
- Which day did they sell the most popcorn?
- Which day did they sell more popcorn, Sunday or Friday?
- How many bags did they sell on Saturday?
- Which day did they sell the least amount of popcorn?

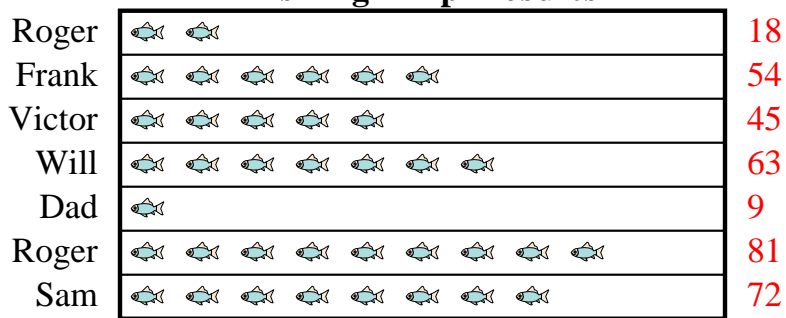
Answers

- _____
- _____
- _____
- _____
- _____
- _____
- _____
- _____
- _____
- _____



Frank's father took Frank and 5 friends on a fishing trip. They recorded the number of fish they caught using the pictograph below.

Fishing Trip Results

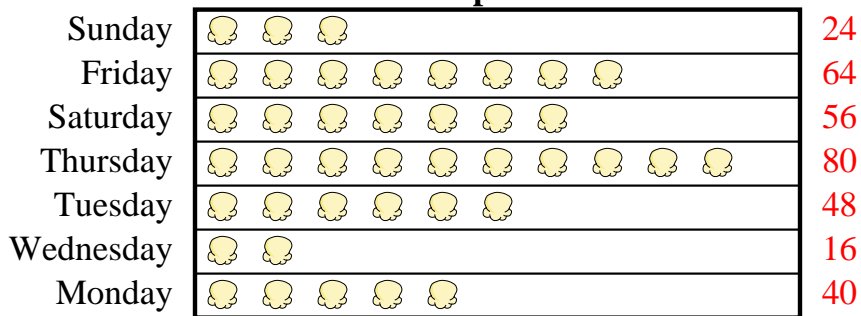


= 9 Fish Caught

- Who caught more fish, Roger or Frank?
- How many fish did Victor catch?
- Who caught the most fish?
- Who caught the fewest fish?
- Who caught exactly 63 fish?

A movie theater was tracking the number of small popcorns they sold each day. They organized the information in the pictograph below.

Small Popcorns Sold



= 8 Bags Sold

- Which day did they sell exactly 80 bags?
- Which day did they sell the most popcorn?
- Which day did they sell more popcorn, Sunday or Friday?
- How many bags did they sell on Saturday?
- Which day did they sell the least amount of popcorn?

Answers

- Roger
- 45
- Roger
- Dad
- Will
- Thursday
- Thursday
- Friday
- 56
- Wednesday