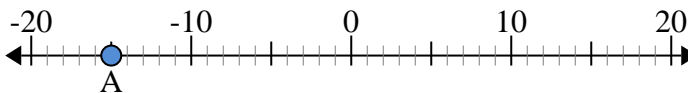




Use the numberlines to find the absolute value.

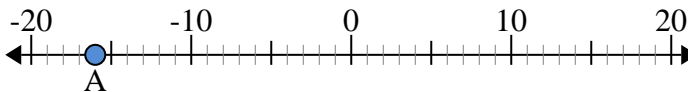
Answers

- 1) a. What is the value of 'A'?
- b. How far is 'A' from 0 (absolute value)?



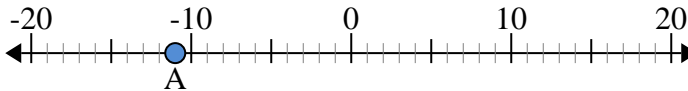
1. \_\_\_\_\_

- 2) a. What is the value of 'A'?
- b. How far is 'A' from 0 (absolute value)?



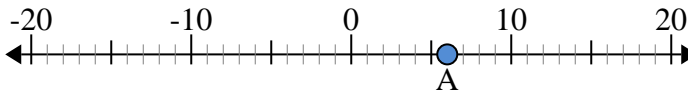
2. \_\_\_\_\_

- 3) a. What is the value of 'A'?
- b. How far is 'A' from 0 (absolute value)?



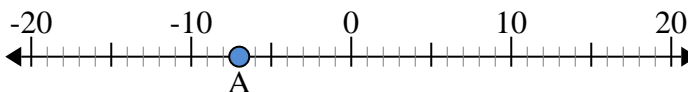
3. \_\_\_\_\_

- 4) a. What is the value of 'A'?
- b. How far is 'A' from 0 (absolute value)?



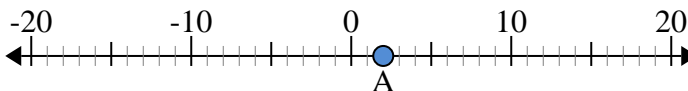
4. \_\_\_\_\_

- 5) a. What is the value of 'A'?
- b. How far is 'A' from 0 (absolute value)?



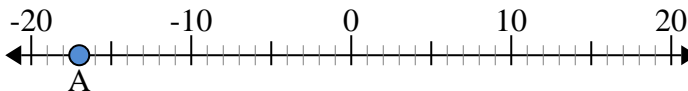
5. \_\_\_\_\_

- 6) a. What is the value of 'A'?
- b. How far is 'A' from 0 (absolute value)?



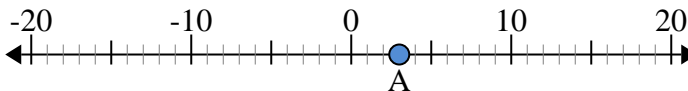
6. \_\_\_\_\_

- 7) a. What is the value of 'A'?
- b. How far is 'A' from 0 (absolute value)?



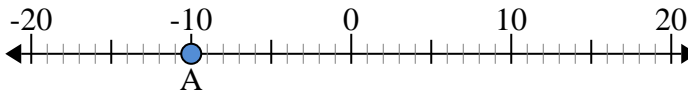
7. \_\_\_\_\_

- 8) a. What is the value of 'A'?
- b. How far is 'A' from 0 (absolute value)?



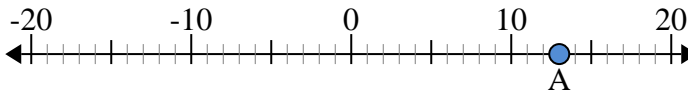
8. \_\_\_\_\_

- 9) a. What is the value of 'A'?
- b. How far is 'A' from 0 (absolute value)?



9. \_\_\_\_\_

- 10) a. What is the value of 'A'?
- b. How far is 'A' from 0 (absolute value)?

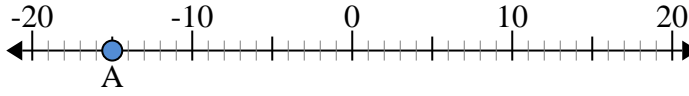


10. \_\_\_\_\_

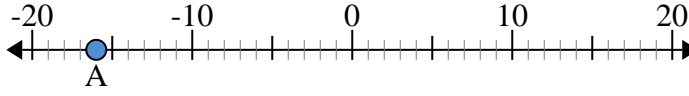


Use the numberlines to find the absolute value.

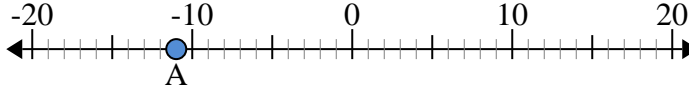
- 1) a. What is the value of 'A'?  
b. How far is 'A' from 0 (absolute value)?



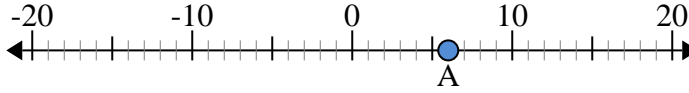
- 2) a. What is the value of 'A'?  
b. How far is 'A' from 0 (absolute value)?



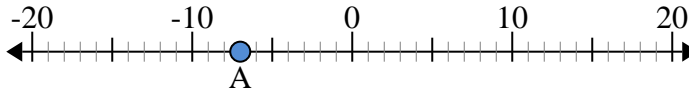
- 3) a. What is the value of 'A'?  
b. How far is 'A' from 0 (absolute value)?



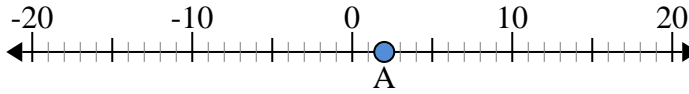
- 4) a. What is the value of 'A'?  
b. How far is 'A' from 0 (absolute value)?



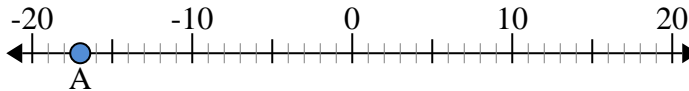
- 5) a. What is the value of 'A'?  
b. How far is 'A' from 0 (absolute value)?



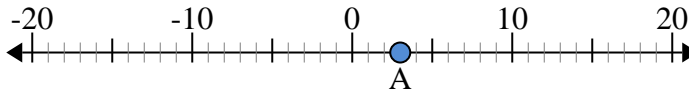
- 6) a. What is the value of 'A'?  
b. How far is 'A' from 0 (absolute value)?



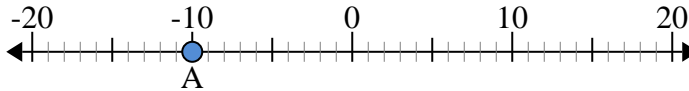
- 7) a. What is the value of 'A'?  
b. How far is 'A' from 0 (absolute value)?



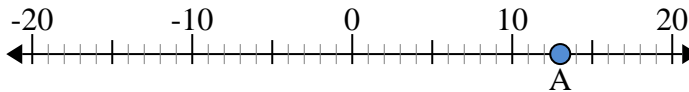
- 8) a. What is the value of 'A'?  
b. How far is 'A' from 0 (absolute value)?



- 9) a. What is the value of 'A'?  
b. How far is 'A' from 0 (absolute value)?



- 10) a. What is the value of 'A'?  
b. How far is 'A' from 0 (absolute value)?



Answers

|     |            |           |
|-----|------------|-----------|
| 1.  | <u>-15</u> | <u>15</u> |
| 2.  | <u>-16</u> | <u>16</u> |
| 3.  | <u>-11</u> | <u>11</u> |
| 4.  | <u>6</u>   | <u>6</u>  |
| 5.  | <u>-7</u>  | <u>7</u>  |
| 6.  | <u>2</u>   | <u>2</u>  |
| 7.  | <u>-17</u> | <u>17</u> |
| 8.  | <u>3</u>   | <u>3</u>  |
| 9.  | <u>-10</u> | <u>10</u> |
| 10. | <u>13</u>  | <u>13</u> |