



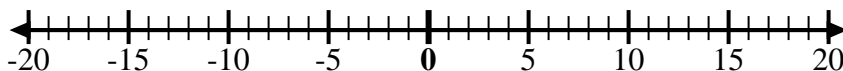
Use the numberlines to show each expression and solve.

Ex) Start at -8 and add 18



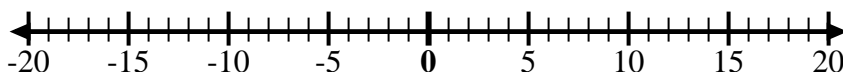
Ex.  $-8 + 18 = 10$

1) Start at -6 and add 3



1. \_\_\_\_\_

2) Start at -4 and add -6



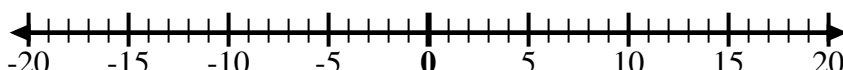
2. \_\_\_\_\_

3) Start at -1 and add -8



3. \_\_\_\_\_

4) Start at -4 and add -3



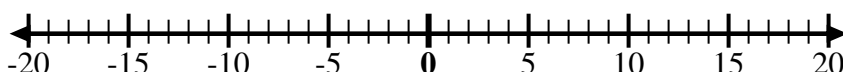
4. \_\_\_\_\_

5) Start at 0 and add -10



5. \_\_\_\_\_

6) Start at -7 and add 12



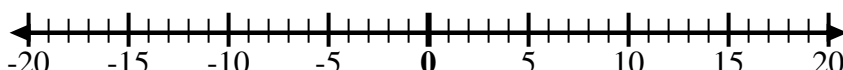
6. \_\_\_\_\_

7) Start at 2 and add -10



7. \_\_\_\_\_

8) Start at -6 and add -2



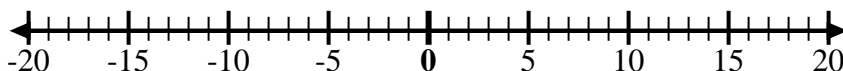
8. \_\_\_\_\_

9) Start at 1 and add -10



9. \_\_\_\_\_

10) Start at 3 and add -10



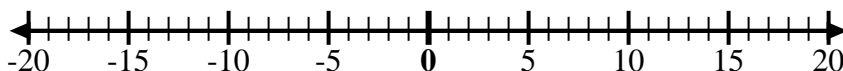
10. \_\_\_\_\_

11) Start at -4 and add -2



11. \_\_\_\_\_

12) Start at -10 and add 6



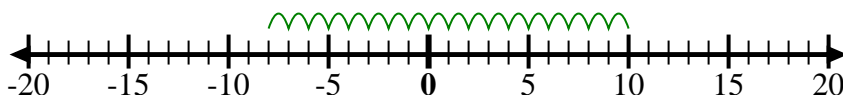
12. \_\_\_\_\_

Answers



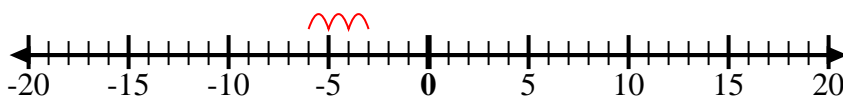
Use the numberlines to show each expression and solve.

Ex) Start at -8 and add 18



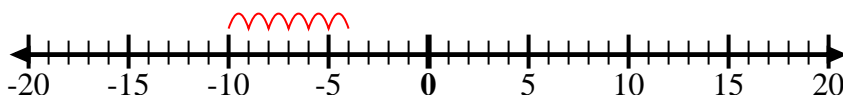
Ex.  $-8 + 18 = 10$

1) Start at -6 and add 3



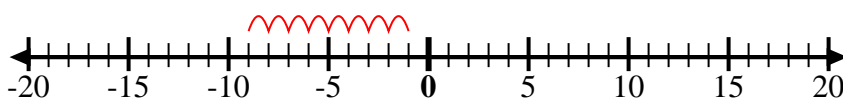
1.  $-6 + 3 = -3$

2) Start at -4 and add -6



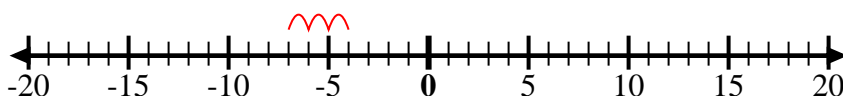
2.  $-4 + -6 = -10$

3) Start at -1 and add -8



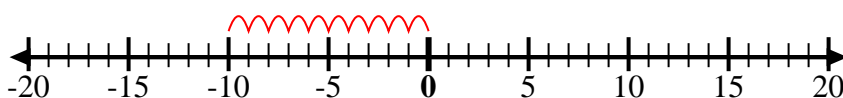
3.  $-1 + -8 = -9$

4) Start at -4 and add -3



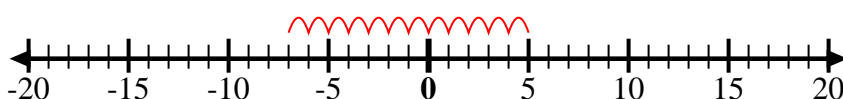
4.  $-4 + -3 = -7$

5) Start at 0 and add -10



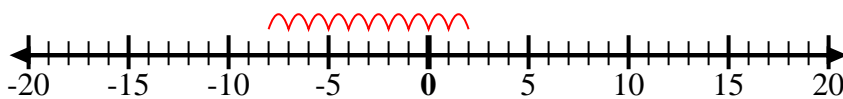
5.  $0 + -10 = -10$

6) Start at -7 and add 12



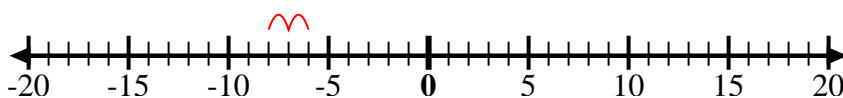
6.  $-7 + 12 = 5$

7) Start at 2 and add -10



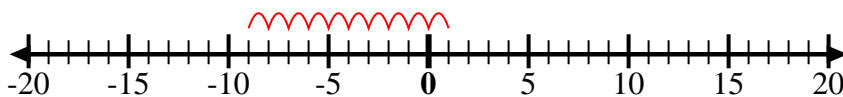
7.  $2 + -10 = -8$

8) Start at -6 and add -2



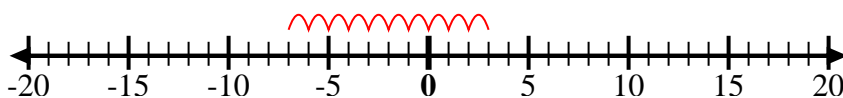
8.  $-6 + -2 = -8$

9) Start at 1 and add -10



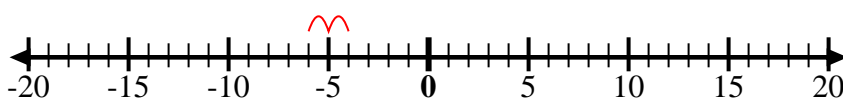
9.  $1 + -10 = -9$

10) Start at 3 and add -10



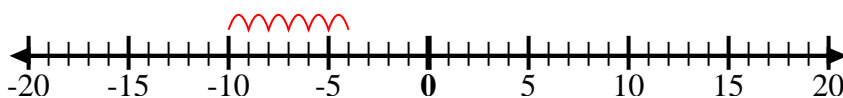
10.  $3 + -10 = -7$

11) Start at -4 and add -2



11.  $-4 + -2 = -6$

12) Start at -10 and add 6



12.  $-10 + 6 = -4$

**Answers**