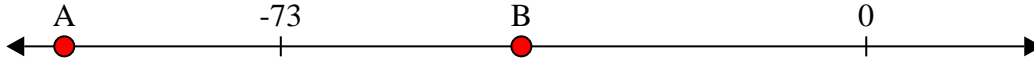




Solve each problem.


Answers

1) Which letter best shows -43?




1. _____

2) Which letter best shows -19?



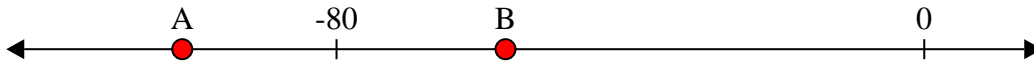
2. _____

3) Which letter best shows -14?




3. _____

4) Which letter best shows -101?




4. _____

5) Which letter best shows -100?




5. _____

6) Which letter best shows -102?



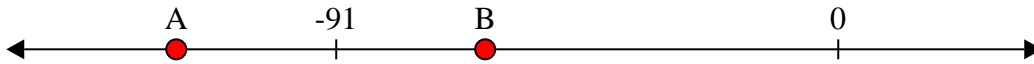
6. _____

7) Which letter best shows -32?




7. _____

8) Which letter best shows -120?




8. _____

9) Which letter best shows -122?



9. _____

10) Which letter best shows -10?

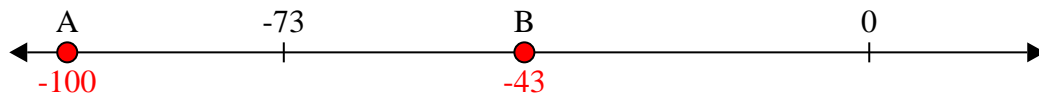


10. _____




Solve each problem.


1) Which letter best shows -43?



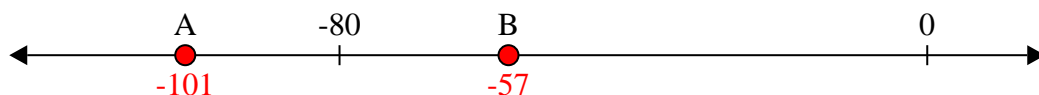
2) Which letter best shows -19?




3) Which letter best shows -14?



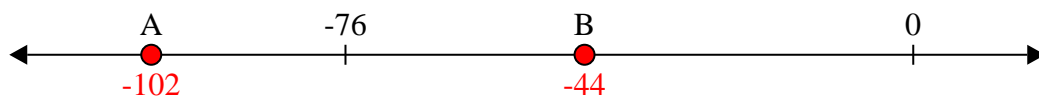
4) Which letter best shows -101?



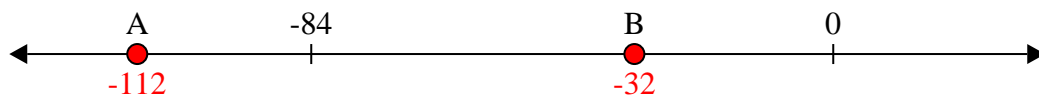
5) Which letter best shows -100?



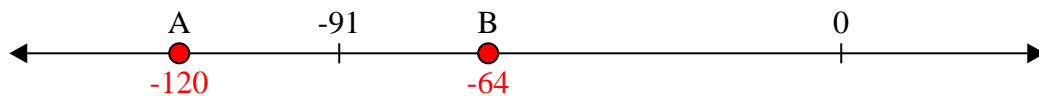
6) Which letter best shows -102?




7) Which letter best shows -32?



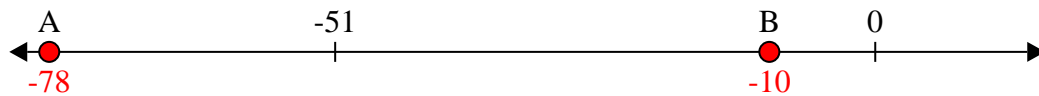
8) Which letter best shows -120?



9) Which letter best shows -122?



10) Which letter best shows -10?



Answers

1. **B**

2. **B**

3. **B**

4. **A**

5. **A**

6. **A**

7. **B**

8. **A**

9. **A**

10. **B**