




Measure the width and height of each block in inches and in centimeters.

Ex)



**Answers**


Ex(w-in). 4

Ex(h-in). 1 1/2

Ex(w-cm). 10.2

Ex(h-cm). 3.8

1)



1(w-in). \_\_\_\_\_

1(h-in). \_\_\_\_\_

1(w-cm). \_\_\_\_\_

1(h-cm). \_\_\_\_\_

2)




2(w-in). \_\_\_\_\_

2(h-in). \_\_\_\_\_

2(w-cm). \_\_\_\_\_

2(h-cm). \_\_\_\_\_

3)



3(w-in). \_\_\_\_\_

3(h-in). \_\_\_\_\_

3(w-cm). \_\_\_\_\_

3(h-cm). \_\_\_\_\_

4)



4(w-in). \_\_\_\_\_

4(h-in). \_\_\_\_\_

4(w-cm). \_\_\_\_\_

4(h-cm). \_\_\_\_\_



Measure the width and height of each block in inches and in centimeters.

Ex)



Ex(w-in). 4

Ex(h-in). 1 1/2

Ex(w-cm). 10.2

Ex(h-cm). 3.8

1)



1(w-in). 2

1(h-in). 1 1/2

1(w-cm). 5.1

1(h-cm). 3.8

2)




2(w-in). 3

2(h-in). 0 1/2

2(w-cm). 7.6

2(h-cm). 1.3

3)



3(w-in). 3 1/2

3(h-in). 1 1/2

3(w-cm). 8.9

3(h-cm). 3.8

4)



4(w-in). 0 1/2

4(h-in). 0 1/2

4(w-cm). 1.3

4(h-cm). 1.3

**Answers**