



Measure the width and height of each block in inches and in centimeters.

Ex)



Answers

Ex(w-in). 2 1/2

Ex(h-in). 1

Ex(w-cm). 6.4

Ex(h-cm). 2.5

1(w-in). _____

1(h-in). _____

1(w-cm). _____

1(h-cm). _____

2(w-in). _____

2(h-in). _____

2(w-cm). _____

2(h-cm). _____

3(w-in). _____

3(h-in). _____

3(w-cm). _____

3(h-cm). _____


4(w-in). _____

4(h-in). _____


4(w-cm). _____

4(h-cm). _____


1)



2)



3)




4)





Measure the width and height of each block in inches and in centimeters.

Ex)



Answers

Ex(w-in). 2 1/2

Ex(h-in). 1

Ex(w-cm). 6.4

Ex(h-cm). 2.5

1)



1(w-in). 4 1/2

1(h-in). 1 1/2

1(w-cm). 11.4

1(h-cm). 3.8

2)




2(w-in). 3

2(h-in). 1

2(w-cm). 7.6

2(h-cm). 2.5

3)



3(w-in). 5

3(h-in). 1 1/2

3(w-cm). 12.7

3(h-cm). 3.8

4)



4(w-in). 2

4(h-in). 0 1/2

4(w-cm). 5.1

4(h-cm). 1.3