




Measure the width of each block in inches and in centimeters.

Ex)



Ex(in). 2 1/2

Ex(cm). 6 - 7

1)



1(in). _____

1(cm). _____

2)



2(in). _____

2(cm). _____

3)



3(in). _____

3(cm). _____

4)



4(in). _____

4(cm). _____

5)



5(in). _____

5(cm). _____


6)



6(in). _____

6(cm). _____

7)



7(in). _____

7(cm). _____


8)



8(in). _____

8(cm). _____

9)



9(in). _____

9(cm). _____

Answers



Measure the width of each block in inches and in centimeters.



Ex(in). 2 1/2

Ex(cm). 6 - 7



1(in). 3 1/2

1(cm). 8 - 9



2(in). 5

2(cm). 12 - 13



3(in). 1

3(cm). 2 - 3



4(in). 2

4(cm). 5 - 6



5(in). 4

5(cm). 10 - 11



6(in). 4 1/2

6(cm). 11 - 12



7(in). 5 1/2

7(cm). 13 - 14



8(in). 3

8(cm). 7 - 8



9(in). 0 1/2

9(cm). 1 - 2

Answers