



Measure the width of each block in inches and in centimeters.

Ex)



Ex(in). 2 1/2

Ex(cm). 6 - 7

1)



1(in). \_\_\_\_\_

1(cm). \_\_\_\_\_

2)



2(in). \_\_\_\_\_

2(cm). \_\_\_\_\_

3)



3(in). \_\_\_\_\_

3(cm). \_\_\_\_\_

4)



4(in). \_\_\_\_\_

4(cm). \_\_\_\_\_

5)



5(in). \_\_\_\_\_

5(cm). \_\_\_\_\_


6)



6(in). \_\_\_\_\_

6(cm). \_\_\_\_\_

7)



7(in). \_\_\_\_\_

7(cm). \_\_\_\_\_

8(in). \_\_\_\_\_

8(cm). \_\_\_\_\_

8)



9(in). \_\_\_\_\_

9(cm). \_\_\_\_\_

9)





Measure the width of each block in inches and in centimeters.



Ex(in). 2 1/2

Ex(cm). 6 - 7



1(in). 4 1/2

1(cm). 11 - 12



2(in). 3

2(cm). 7 - 8



3(in). 5

3(cm). 12 - 13



4(in). 2

4(cm). 5 - 6



5(in). 3 1/2

5(cm). 8 - 9



6(in). 5 1/2

6(cm). 13 - 14



7(in). 0 1/2

7(cm). 1 - 2



8(in). 1

8(cm). 2 - 3



9(in). 4

9(cm). 10 - 11

**Answers**



Measure the width of each block in inches and in centimeters.

Ex)



Ex(in). 1

Ex(cm). 2 - 3

1)



1(in). \_\_\_\_\_

1(cm). \_\_\_\_\_

2)



2(in). \_\_\_\_\_

2(cm). \_\_\_\_\_


3)



3(in). \_\_\_\_\_

3(cm). \_\_\_\_\_

4)



4(in). \_\_\_\_\_

4(cm). \_\_\_\_\_

5)



5(in). \_\_\_\_\_

5(cm). \_\_\_\_\_

6)



6(in). \_\_\_\_\_

6(cm). \_\_\_\_\_

7)



7(in). \_\_\_\_\_

7(cm). \_\_\_\_\_

8)



8(in). \_\_\_\_\_

8(cm). \_\_\_\_\_

9)



9(in). \_\_\_\_\_

9(cm). \_\_\_\_\_

Answers



Measure the width of each block in inches and in centimeters.



Answers

Ex(in). 1

Ex(cm). 2 - 3

1(in). 1 1/2

1(cm). 3 - 4

2(in). 5

2(cm). 12 - 13

3(in). 5 1/2

3(cm). 13 - 14

4(in). 0 1/2

4(cm). 1 - 2

5(in). 3

5(cm). 7 - 8

6(in). 2

6(cm). 5 - 6

7(in). 4

7(cm). 10 - 11

8(in). 4 1/2

8(cm). 11 - 12

9(in). 3 1/2

9(cm). 8 - 9



Measure the width of each block in inches and in centimeters.

Ex)



Ex(in.) 4 1/2

Ex(cm.) 11 - 12

1)



1(in.) \_\_\_\_\_

1(cm.) \_\_\_\_\_

2)



2(in.) \_\_\_\_\_

2(cm.) \_\_\_\_\_


3)



3(in.) \_\_\_\_\_

3(cm.) \_\_\_\_\_

4)



4(in.) \_\_\_\_\_

4(cm.) \_\_\_\_\_

5)



5(in.) \_\_\_\_\_

5(cm.) \_\_\_\_\_

6)



6(in.) \_\_\_\_\_

6(cm.) \_\_\_\_\_

7)



7(in.) \_\_\_\_\_

7(cm.) \_\_\_\_\_

8)



8(in.) \_\_\_\_\_

8(cm.) \_\_\_\_\_

9)



9(in.) \_\_\_\_\_

9(cm.) \_\_\_\_\_

**Answers**



Measure the width of each block in inches and in centimeters.



Ex(in). 4 1/2

Ex(cm). 11 - 12



1(in). 5 1/2

1(cm). 13 - 14



2(in). 1

2(cm). 2 - 3



3(in). 1 1/2

3(cm). 3 - 4



4(in). 4

4(cm). 10 - 11



5(in). 2

5(cm). 5 - 6



6(in). 2 1/2

6(cm). 6 - 7



7(in). 3

7(cm). 7 - 8



8(in). 0 1/2

8(cm). 1 - 2



9(in). 5

9(cm). 12 - 13

**Answers**



Measure the width of each block in inches and in centimeters.

Ex)



Ex(in). 3

Ex(cm). 7-8

1)



1(in). \_\_\_\_\_

1(cm). \_\_\_\_\_

2)



2(in). \_\_\_\_\_

2(cm). \_\_\_\_\_

3)



3(in). \_\_\_\_\_

3(cm). \_\_\_\_\_

4)



4(in). \_\_\_\_\_

4(cm). \_\_\_\_\_

5)



5(in). \_\_\_\_\_

5(cm). \_\_\_\_\_

6)



6(in). \_\_\_\_\_

6(cm). \_\_\_\_\_

7)



7(in). \_\_\_\_\_

7(cm). \_\_\_\_\_

8)



8(in). \_\_\_\_\_

8(cm). \_\_\_\_\_

9)



9(in). \_\_\_\_\_

9(cm). \_\_\_\_\_

**Answers**



Measure the width of each block in inches and in centimeters.



Ex(in). 3

Ex(cm). 7 - 8



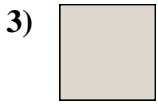
1(in). 5

1(cm). 12 - 13



2(in). 1 1/2

2(cm). 3 - 4



3(in). 0 1/2

3(cm). 1 - 2



4(in). 4 1/2

4(cm). 11 - 12



5(in). 3 1/2

5(cm). 8 - 9



6(in). 2 1/2

6(cm). 6 - 7



7(in). 5 1/2

7(cm). 13 - 14



8(in). 2

8(cm). 5 - 6



9(in). 4

9(cm). 10 - 11

Answers





Measure the width of each block in inches and in centimeters.

Ex)



Ex(in). 3

Ex(cm). 7 - 8

1)



1(in). \_\_\_\_\_

1(cm). \_\_\_\_\_

2)



2(in). \_\_\_\_\_

2(cm). \_\_\_\_\_

3)



3(in). \_\_\_\_\_

3(cm). \_\_\_\_\_

4)



4(in). \_\_\_\_\_

4(cm). \_\_\_\_\_

5)



5(in). \_\_\_\_\_

5(cm). \_\_\_\_\_


6)



6(in). \_\_\_\_\_

6(cm). \_\_\_\_\_

7)



7(in). \_\_\_\_\_

7(cm). \_\_\_\_\_

8)



8(in). \_\_\_\_\_

8(cm). \_\_\_\_\_

9)



9(in). \_\_\_\_\_

9(cm). \_\_\_\_\_

**Answers**



Measure the width of each block in inches and in centimeters.



Ex(in). 3

Ex(cm). 7 - 8



1(in). 1 1/2

1(cm). 3 - 4



2(in). 0 1/2

2(cm). 1 - 2



3(in). 5 1/2

3(cm). 13 - 14



4(in). 1

4(cm). 2 - 3



5(in). 4 1/2

5(cm). 11 - 12



6(in). 4

6(cm). 10 - 11



7(in). 5

7(cm). 12 - 13



8(in). 2

8(cm). 5 - 6



9(in). 2 1/2

9(cm). 6 - 7

**Answers**



Measure the width of each block in inches and in centimeters.

Ex)



Ex(in). 5 1/2

Ex(cm). 13 - 14


1)



1(in). \_\_\_\_\_

1(cm). \_\_\_\_\_

2)



2(in). \_\_\_\_\_

2(cm). \_\_\_\_\_

3)



3(in). \_\_\_\_\_

3(cm). \_\_\_\_\_

4)



4(in). \_\_\_\_\_

4(cm). \_\_\_\_\_


5)



5(in). \_\_\_\_\_

5(cm). \_\_\_\_\_

6)



6(in). \_\_\_\_\_

6(cm). \_\_\_\_\_

7)



7(in). \_\_\_\_\_

7(cm). \_\_\_\_\_

8)



8(in). \_\_\_\_\_

8(cm). \_\_\_\_\_

9)





9(in). \_\_\_\_\_

9(cm). \_\_\_\_\_

**Answers**



Measure the width of each block in inches and in centimeters.



**Answers**

Ex(in). 5 1/2

Ex(cm). 13 - 14

1(in). 3 1/2

1(cm). 8 - 9

2(in). 4

2(cm). 10 - 11

3(in). 5

3(cm). 12 - 13

4(in). 1

4(cm). 2 - 3

5(in). 3

5(cm). 7 - 8

6(in). 0 1/2

6(cm). 1 - 2

7(in). 1 1/2

7(cm). 3 - 4

8(in). 2

8(cm). 5 - 6

9(in). 4 1/2

9(cm). 11 - 12



Measure the width of each block in inches and in centimeters.

Ex)




**Answers**

Ex(in). 4

Ex(cm). 10 - 11

1)



1(in). \_\_\_\_\_

1(cm). \_\_\_\_\_

2)



2(in). \_\_\_\_\_

2(cm). \_\_\_\_\_

3)



3(in). \_\_\_\_\_

3(cm). \_\_\_\_\_

4)



4(in). \_\_\_\_\_

4(cm). \_\_\_\_\_

5)



5(in). \_\_\_\_\_

5(cm). \_\_\_\_\_

6)



6(in). \_\_\_\_\_

6(cm). \_\_\_\_\_

7)



7(in). \_\_\_\_\_

7(cm). \_\_\_\_\_

8)



8(in). \_\_\_\_\_

8(cm). \_\_\_\_\_

9)



9(in). \_\_\_\_\_

9(cm). \_\_\_\_\_



Measure the width of each block in inches and in centimeters.

Ex) 

1) 

2) 

3) 

4) 

5) 

6) 

7) 

8) 

9) 

**Answers**

Ex(in). 4

Ex(cm). 10 - 11

1(in). 0 1/2

1(cm). 1 - 2

2(in). 1 1/2

2(cm). 3 - 4

3(in). 5 1/2

3(cm). 13 - 14

4(in). 3

4(cm). 7 - 8

5(in). 2 1/2

5(cm). 6 - 7

6(in). 1

6(cm). 2 - 3

7(in). 2

7(cm). 5 - 6

8(in). 4 1/2

8(cm). 11 - 12

9(in). 3 1/2

9(cm). 8 - 9



Measure the width of each block in inches and in centimeters.

Ex)



Ex(in). 3 1/2

Ex(cm). 8 - 9

1)



1(in). \_\_\_\_\_

1(cm). \_\_\_\_\_

2)



2(in). \_\_\_\_\_

2(cm). \_\_\_\_\_

3)



3(in). \_\_\_\_\_

3(cm). \_\_\_\_\_

4)



4(in). \_\_\_\_\_

4(cm). \_\_\_\_\_

5)



5(in). \_\_\_\_\_

5(cm). \_\_\_\_\_

6)



6(in). \_\_\_\_\_

6(cm). \_\_\_\_\_

7)



7(in). \_\_\_\_\_

7(cm). \_\_\_\_\_


8)



8(in). \_\_\_\_\_

8(cm). \_\_\_\_\_

9)



9(in). \_\_\_\_\_

9(cm). \_\_\_\_\_

Answers



Measure the width of each block in inches and in centimeters.



Ex(in). 3 1/2

Ex(cm). 8 - 9



1(in). 1

1(cm). 2 - 3



2(in). 1 1/2

2(cm). 3 - 4



3(in). 5 1/2

3(cm). 13 - 14



4(in). 5

4(cm). 12 - 13



5(in). 2

5(cm). 5 - 6



6(in). 3

6(cm). 7 - 8



7(in). 4 1/2

7(cm). 11 - 12



8(in). 2 1/2

8(cm). 6 - 7



9(in). 0 1/2

9(cm). 1 - 2

**Answers**





Measure the width of each block in inches and in centimeters.

Ex)



Ex(in). 4

Ex(cm). 10 - 11

1)



1(in). \_\_\_\_\_

1(cm). \_\_\_\_\_

2)



2(in). \_\_\_\_\_

2(cm). \_\_\_\_\_


3)



3(in). \_\_\_\_\_

3(cm). \_\_\_\_\_

4)



4(in). \_\_\_\_\_

4(cm). \_\_\_\_\_

5)



5(in). \_\_\_\_\_

5(cm). \_\_\_\_\_

6)



6(in). \_\_\_\_\_

6(cm). \_\_\_\_\_

7)



7(in). \_\_\_\_\_

7(cm). \_\_\_\_\_

8)



8(in). \_\_\_\_\_

8(cm). \_\_\_\_\_

9)



9(in). \_\_\_\_\_

9(cm). \_\_\_\_\_

**Answers**



Measure the width of each block in inches and in centimeters.

Ex) 

1) 

2) 

3) 


4) 

5) 

6) 

7) 

8) 

9) 

**Answers**

Ex(in). 4

Ex(cm). 10 - 11

1(in). 2

1(cm). 5 - 6

2(in). 3

2(cm). 7 - 8

3(in). 3 1/2

3(cm). 8 - 9

4(in). 0 1/2

4(cm). 1 - 2

5(in). 1 1/2

5(cm). 3 - 4

6(in). 2 1/2

6(cm). 6 - 7

7(in). 5

7(cm). 12 - 13

8(in). 4 1/2

8(cm). 11 - 12

9(in). 5 1/2

9(cm). 13 - 14



Measure the width of each block in inches and in centimeters.



Ex(in). 1

Ex(cm). 2 - 3



1(in). \_\_\_\_\_

1(cm). \_\_\_\_\_



2(in). \_\_\_\_\_

2(cm). \_\_\_\_\_



3(in). \_\_\_\_\_

3(cm). \_\_\_\_\_



4(in). \_\_\_\_\_

4(cm). \_\_\_\_\_



5(in). \_\_\_\_\_

5(cm). \_\_\_\_\_



6(in). \_\_\_\_\_

6(cm). \_\_\_\_\_




7(in). \_\_\_\_\_

7(cm). \_\_\_\_\_



8(in). \_\_\_\_\_

8(cm). \_\_\_\_\_





9(in). \_\_\_\_\_

9(cm). \_\_\_\_\_

**Answers**



Measure the width of each block in inches and in centimeters.



Answers

Ex(in). 1

Ex(cm). 2 - 3

1(in). 3 1/2

1(cm). 8 - 9

2(in). 5 1/2

2(cm). 13 - 14

3(in). 5

3(cm). 12 - 13

4(in). 4 1/2

4(cm). 11 - 12

5(in). 1 1/2

5(cm). 3 - 4

6(in). 4

6(cm). 10 - 11

7(in). 2

7(cm). 5 - 6

8(in). 3

8(cm). 7 - 8

9(in). 0 1/2

9(cm). 1 - 2