

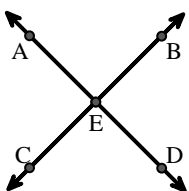


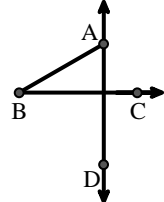
Match the description on the top with the visual image on the bottom.

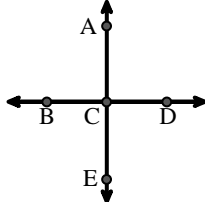
**Answers**

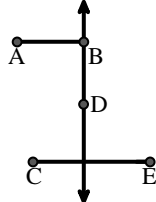
- 1)  $\overleftrightarrow{AE}$  intersecting  $\overleftrightarrow{DB}$
- 2)  $\overleftrightarrow{AD}$  intersecting  $\overleftrightarrow{BC}$  at point E
- 3)  $\overleftrightarrow{BD}$  intersecting  $\overline{CE}$
- 4)  $\overleftrightarrow{AC}$  perpendicular to  $\overleftrightarrow{AD}$
- 5)  $\angle BAC$  creating an obtuse angle
- 6) Acute  $\angle ABC$  intersecting  $\overleftrightarrow{AD}$
- 7) Right  $\angle ADE$
- 8)  $\overleftrightarrow{BC}$  intersecting  $\angle ACD$
- 9)  $\overleftrightarrow{AB}$  parallel to  $\overleftrightarrow{CD}$
- 10)  $\overleftrightarrow{AC}$  parallel to  $\overleftrightarrow{EB}$
- 11) Acute  $\angle BDE$
- 12)  $\overleftrightarrow{AB}$  intersecting  $\overleftrightarrow{AD}$

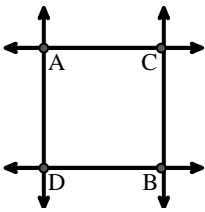
1. \_\_\_\_\_
2. \_\_\_\_\_
3. \_\_\_\_\_
4. \_\_\_\_\_
5. \_\_\_\_\_
6. \_\_\_\_\_
7. \_\_\_\_\_
8. \_\_\_\_\_
9. \_\_\_\_\_
10. \_\_\_\_\_
11. \_\_\_\_\_
12. \_\_\_\_\_

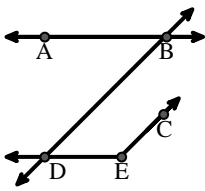
**A.** 

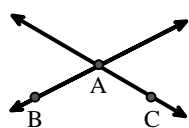
**B.** 

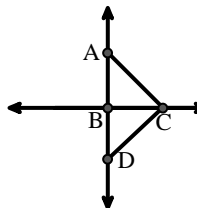
**C.** 

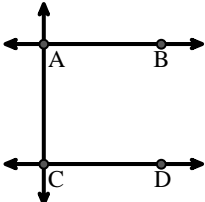
**D.** 

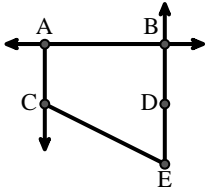
**E.** 

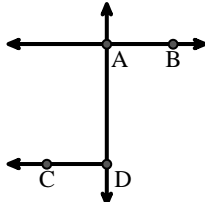
**F.** 

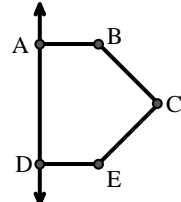
**G.** 

**H.** 

**I.** 

**J.** 

**K.** 

**L.** 




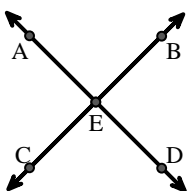
Match the description on the top with the visual image on the bottom.

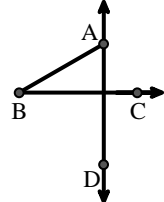
**Answers**

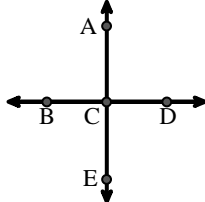
- 1)  $\overleftrightarrow{AE}$  intersecting  $\overleftrightarrow{DB}$
- 2)  $\overleftrightarrow{AD}$  intersecting  $\overleftrightarrow{BC}$  at point E
- 3)  $\overleftrightarrow{BD}$  intersecting  $\overline{CE}$
- 4)  $\overleftrightarrow{AC}$  perpendicular to  $\overleftrightarrow{AD}$
- 5)  $\angle BAC$  creating an obtuse angle
- 6) Acute  $\angle ABC$  intersecting  $\overleftrightarrow{AD}$
- 7) Right  $\angle ADE$
- 8)  $\overleftrightarrow{BC}$  intersecting  $\angle ACD$
- 9)  $\overleftrightarrow{AB}$  parallel to  $\overleftrightarrow{CD}$
- 10)  $\overleftrightarrow{AC}$  parallel to  $\overleftrightarrow{EB}$
- 11) Acute  $\angle BDE$
- 12)  $\overleftrightarrow{AB}$  intersecting  $\overleftrightarrow{AD}$

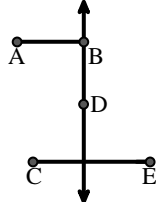
1. **C**
2. **A**
3. **D**
4. **E**
5. **G**
6. **B**
7. **L**
8. **H**
9. **I**
10. **J**
11. **F**
12. **K**

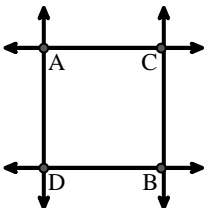


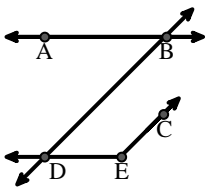
**A.** 

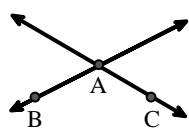
**B.** 

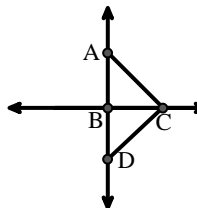
**C.** 

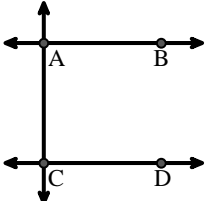
**D.** 

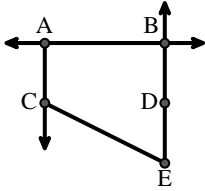
**E.** 

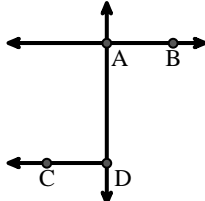
**F.** 

**G.** 

**H.** 

**I.** 

**J.** 

**K.** 

**L.** 