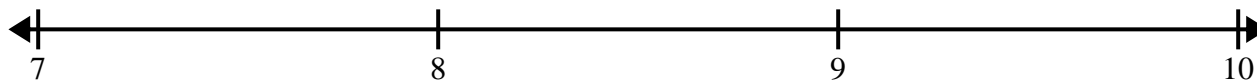





Create and label the line plot using the set of numbers provided.


- 1)  $7\frac{6}{8}$     $7\frac{5}{8}$     $9\frac{3}{8}$     $9\frac{7}{8}$     $8\frac{3}{8}$    8    $7\frac{3}{8}$     $9\frac{2}{8}$   
 $7\frac{3}{8}$     $8\frac{4}{8}$     $9\frac{1}{8}$     $8\frac{3}{8}$     $8\frac{2}{8}$     $7\frac{6}{8}$     $9\frac{1}{8}$     $9\frac{2}{8}$




- 2)  $3\frac{1}{8}$     $5\frac{1}{8}$     $3\frac{7}{8}$    3   4    $3\frac{5}{8}$     $5\frac{6}{8}$     $3\frac{6}{8}$   
 $4\frac{5}{8}$     $5\frac{5}{8}$     $3\frac{5}{8}$     $4\frac{6}{8}$     $4\frac{2}{8}$     $3\frac{3}{8}$    4    $3\frac{4}{8}$



- 3) 6    $8\frac{1}{4}$     $6\frac{2}{4}$     $6\frac{1}{4}$     $7\frac{2}{4}$     $8\frac{2}{4}$     $8\frac{2}{4}$     $8\frac{1}{4}$   
 $6\frac{2}{4}$     $6\frac{2}{4}$    8   8   6   8    $8\frac{1}{4}$     $8\frac{3}{4}$



- 4)  $9\frac{2}{4}$    8    $9\frac{1}{4}$     $8\frac{2}{4}$     $9\frac{2}{4}$     $8\frac{2}{4}$     $10\frac{2}{4}$     $9\frac{3}{4}$   
 $8\frac{1}{4}$     $9\frac{3}{4}$     $8\frac{2}{4}$     $9\frac{2}{4}$     $9\frac{1}{4}$     $9\frac{3}{4}$     $8\frac{3}{4}$     $8\frac{3}{4}$



- 5)  $8\frac{1}{2}$    10    $10\frac{1}{2}$    10    $10\frac{1}{2}$    10    $9\frac{1}{2}$    9  
 $10\frac{1}{2}$     $8\frac{1}{2}$    8   9   9    $9\frac{1}{2}$     $9\frac{1}{2}$    8

