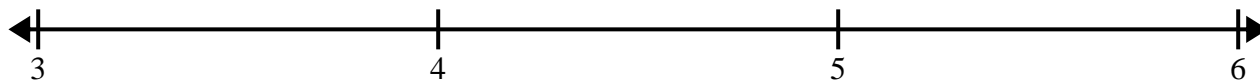





Create and label the line plot using the set of numbers provided.

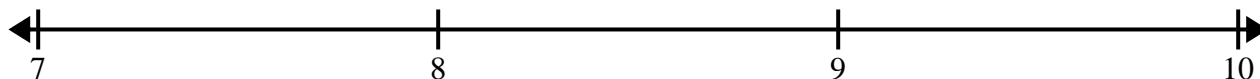
- 1) 4 $3\frac{1}{4}$ $5\frac{1}{4}$ $4\frac{3}{4}$ 3 $5\frac{3}{4}$ $5\frac{1}{4}$ $4\frac{2}{4}$
 $4\frac{3}{4}$ $3\frac{1}{4}$ $5\frac{1}{4}$ 4 $4\frac{1}{4}$ $3\frac{3}{4}$ $3\frac{3}{4}$ $3\frac{3}{4}$




- 2) $3\frac{1}{4}$ $3\frac{2}{4}$ $3\frac{3}{4}$ $3\frac{1}{4}$ $5\frac{3}{4}$ $4\frac{2}{4}$ $4\frac{3}{4}$ 3
 4 4 $5\frac{2}{4}$ $4\frac{2}{4}$ $3\frac{3}{4}$ $4\frac{1}{4}$ $3\frac{3}{4}$ $5\frac{1}{4}$



- 3) $9\frac{1}{2}$ 8 $7\frac{1}{2}$ $9\frac{1}{2}$ 8 8 $9\frac{1}{2}$ 7
 9 7 $7\frac{1}{2}$ 7 $7\frac{1}{2}$ 9 9 $8\frac{1}{2}$



- 4) 7 $9\frac{6}{8}$ $7\frac{4}{8}$ $7\frac{7}{8}$ $7\frac{1}{8}$ $8\frac{4}{8}$ $9\frac{1}{8}$ $8\frac{6}{8}$
 $7\frac{7}{8}$ $9\frac{1}{8}$ $9\frac{5}{8}$ $7\frac{6}{8}$ 7 $8\frac{6}{8}$ $7\frac{4}{8}$ $7\frac{1}{8}$



- 5) $10\frac{7}{8}$ $9\frac{6}{8}$ $10\frac{6}{8}$ $8\frac{1}{8}$ $8\frac{5}{8}$ $8\frac{4}{8}$ $8\frac{3}{8}$ $8\frac{3}{8}$
 $9\frac{2}{8}$ $10\frac{3}{8}$ $10\frac{5}{8}$ $10\frac{6}{8}$ $9\frac{2}{8}$ $9\frac{4}{8}$ $10\frac{3}{8}$ $10\frac{2}{8}$

