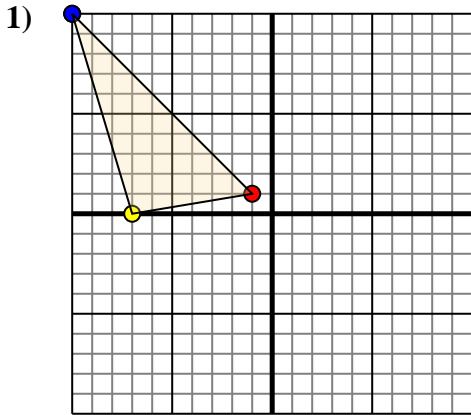




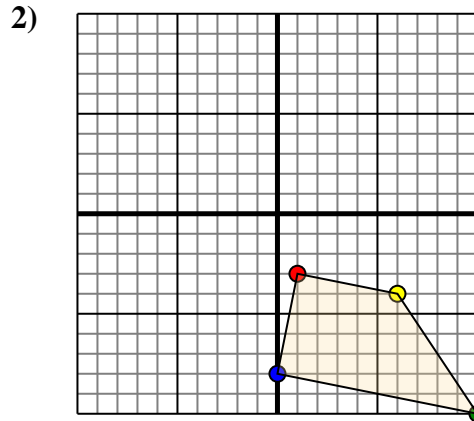
Translate each shape as described.



The shape above has the following coordinates:

- A. (-1,1)
- B. (-7,0)
- C. (-10,10)

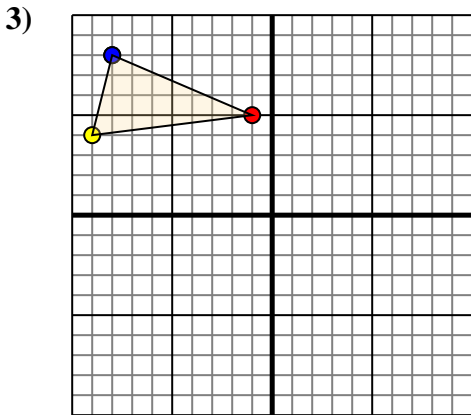
Move the shape 2 units right and 7 units down.



The shape above has the following coordinates:

- A. (1,-3)
- B. (6,-4)
- C. (10,-10)
- D. (0,-8)

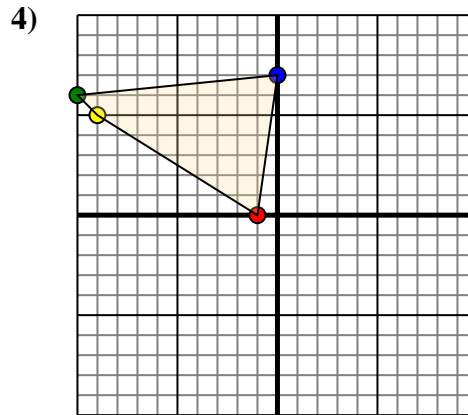
Move the shape 3 units left and 6 units up.



The shape above has the following coordinates:

- A. (-1,5)
- B. (-9,4)
- C. (-8,8)

Move the shape 6 units right and 10 units down.



The shape above has the following coordinates:

- A. (-1,0)
- B. (-9,5)
- C. (-10,6)
- D. (0,7)

Move the shape 5 units right and 10 units down.

Answers

1a. _____

1b. _____

1c. _____

1d. **Graph**

2a. _____

2b. _____

2c. _____

2d. _____

2e. **Graph**

3a. _____

3b. _____

3c. _____

3d. **Graph**

4a. _____

4b. _____

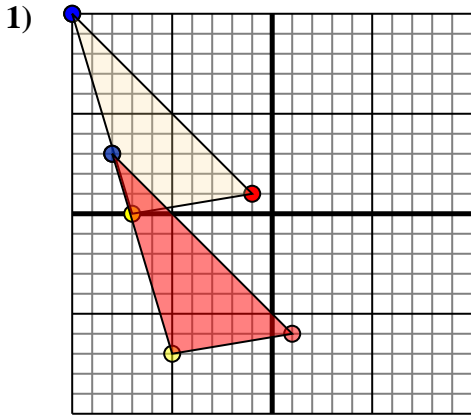
4c. _____

4d. _____

4e. **Graph**



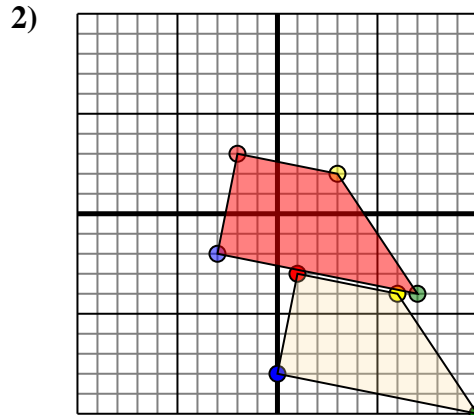
Translate each shape as described.



The shape above has the following coordinates:

- A. (-1,1)
- B. (-7,0)
- C. (-10,10)

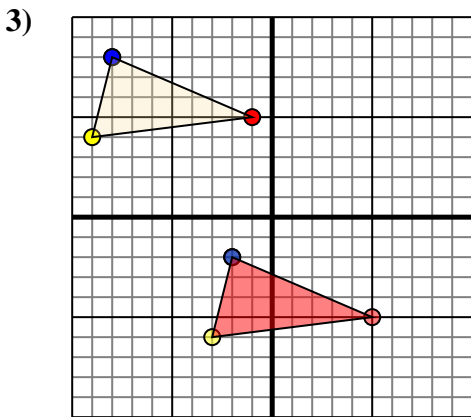
Move the shape 2 units right and 7 units down.



The shape above has the following coordinates:

- A. (1,-3)
- B. (6,-4)
- C. (10,-10)
- D. (0,-8)

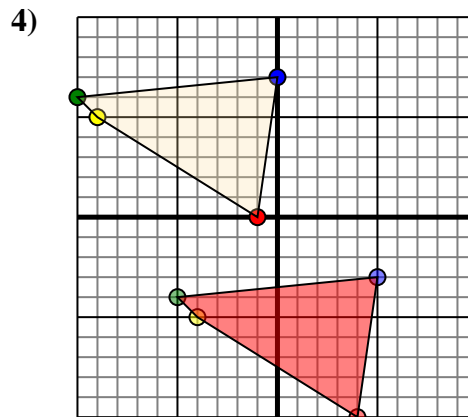
Move the shape 3 units left and 6 units up.



The shape above has the following coordinates:

- A. (-1,5)
- B. (-9,4)
- C. (-8,8)

Move the shape 6 units right and 10 units down.



The shape above has the following coordinates:

- A. (-1,0)
- B. (-9,5)
- C. (-10,6)
- D. (0,7)

Move the shape 5 units right and 10 units down.

Answers

1a. 1,-6

1b. -5,-7

1c. -8,3

1d. Graph

2a. -2,3

2b. 3,2

2c. 7,-4

2d. -3,-2

2e. Graph

3a. 5,-5

3b. -3,-6

3c. -2,-2

3d. Graph

4a. 4,-10

4b. -4,-5

4c. -5,-4

4d. 5,-3

4e. Graph