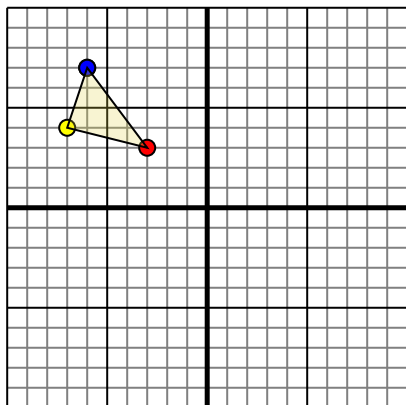




Rotate each shape as described.

1)

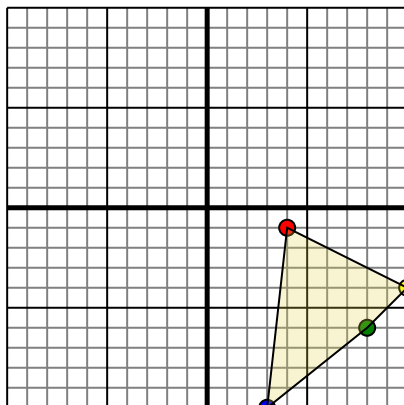


The shape above has the following coordinates:

- A. (-3,3)
- B. (-7,4)
- C. (-6,7)

Rotate the shape 270° counter-clockwise.

2)

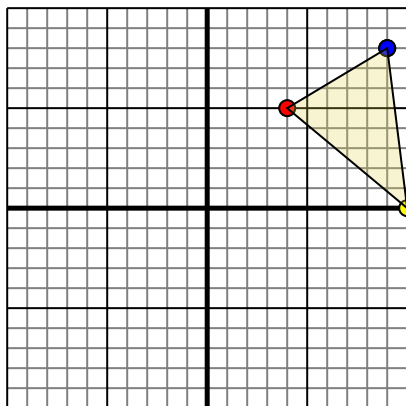


The shape above has the following coordinates:

- A. (4,-1)
- B. (10,-4)
- C. (8,-6)
- D. (3,-10)

Rotate the shape 180° counter-clockwise.

3)

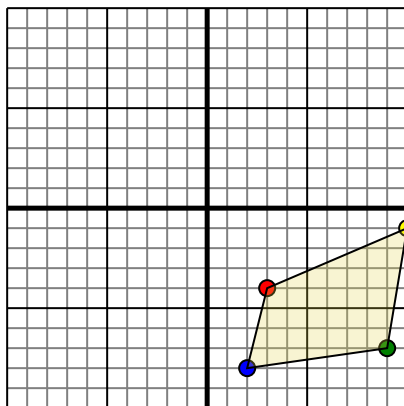


The shape above has the following coordinates:

- A. (4,5)
- B. (10,0)
- C. (9,8)

Rotate the shape 90° counter-clockwise.

4)



The shape above has the following coordinates:

- A. (3,-4)
- B. (10,-1)
- C. (9,-7)
- D. (2,-8)

Rotate the shape 90° clockwise.

Answers

1a. _____

1b. _____

1c. _____

1d. **Graph**

2a. _____

2b. _____

2c. _____

2d. _____

2e. **Graph**

3a. _____

3b. _____

3c. _____

3d. **Graph**

4a. _____

4b. _____

4c. _____

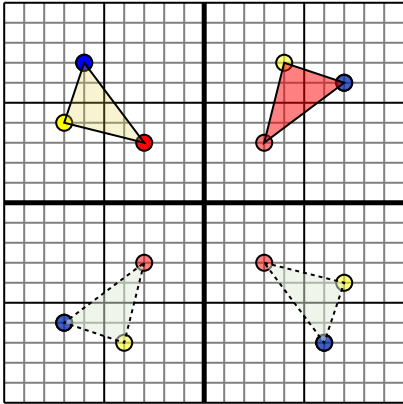
4d. _____

4e. **Graph**



Rotate each shape as described.

1)

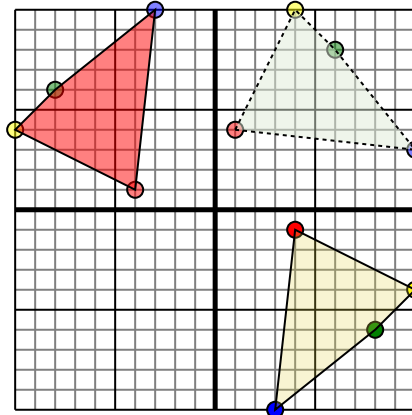


The shape above has the following coordinates:

- A. (-3,3)
- B. (-7,4)
- C. (-6,7)

Rotate the shape 270° counter-clockwise.

2)

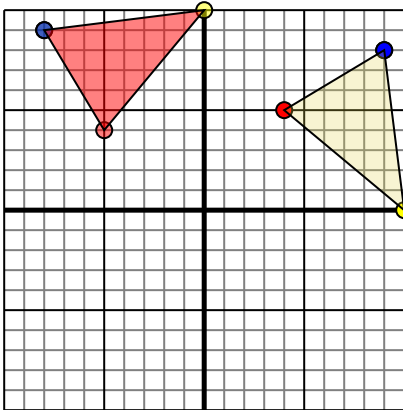


The shape above has the following coordinates:

- A. (4,-1)
- B. (10,-4)
- C. (8,-6)
- D. (3,-10)

Rotate the shape 180° counter-clockwise.

3)

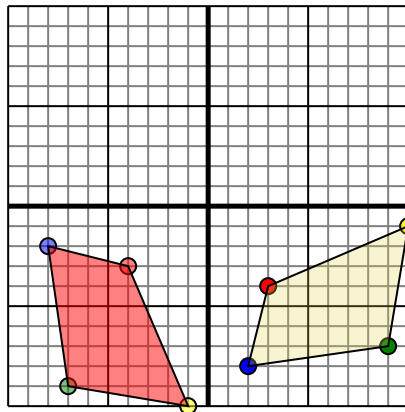


The shape above has the following coordinates:

- A. (4,5)
- B. (10,0)
- C. (9,8)

Rotate the shape 90° counter-clockwise.

4)



The shape above has the following coordinates:

- A. (3,-4)
- B. (10,-1)
- C. (9,-7)
- D. (2,-8)

Rotate the shape 90° clockwise.

Answers

1a. **3,3**

1b. **4,7**

1c. **7,6**

1d. **Graph**

2a. **-4,1**

2b. **-10,4**

2c. **-8,6**

2d. **-3,10**

2e. **Graph**

3a. **-5,4**

3b. **0,10**

3c. **-8,9**

3d. **Graph**

4a. **-4,-3**

4b. **-1,-10**

4c. **-7,-9**

4d. **-8,-2**

4e. **Graph**