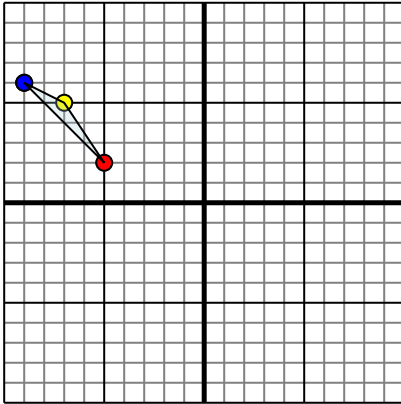




Reflect each shape as described.

1)

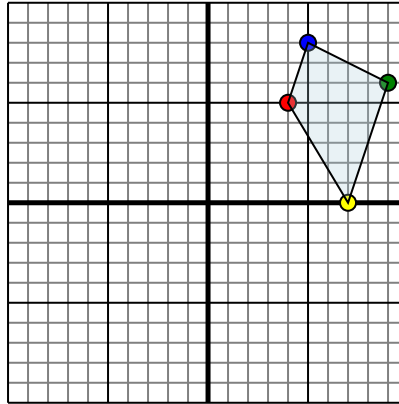


The shape above has the following coordinates:

- A. (-5,2)
- B. (-7,5)
- C. (-9,6)

Reflect the shape over the X axis.

2)

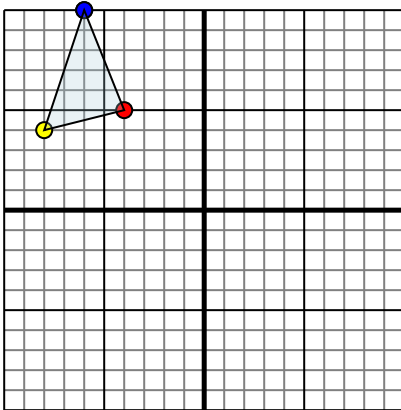


The shape above has the following coordinates:

- A. (4,5)
- B. (7,0)
- C. (9,6)
- D. (5,8)

Reflect the shape over the Y axis.

3)

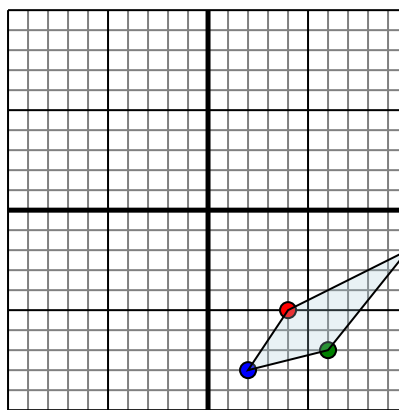


The shape above has the following coordinates:

- A. (-4,5)
- B. (-8,4)
- C. (-6,10)

Reflect the shape over the X axis.

4)



The shape above has the following coordinates:

- A. (4,-5)
- B. (10,-2)
- C. (6,-7)
- D. (2,-8)

Reflect the shape over the X axis.

Answers

1a. \_\_\_\_\_

1b. \_\_\_\_\_

1c. \_\_\_\_\_

1d. \_\_\_\_\_

2a. \_\_\_\_\_

2b. \_\_\_\_\_

2c. \_\_\_\_\_

2d. \_\_\_\_\_

2e. \_\_\_\_\_

3a. \_\_\_\_\_

3b. \_\_\_\_\_

3c. \_\_\_\_\_

3d. \_\_\_\_\_

4a. \_\_\_\_\_

4b. \_\_\_\_\_

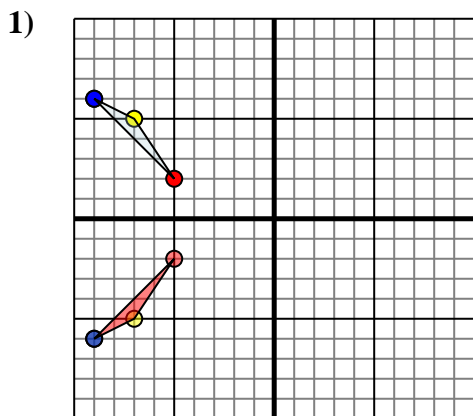
4c. \_\_\_\_\_

4d. \_\_\_\_\_

4e. \_\_\_\_\_



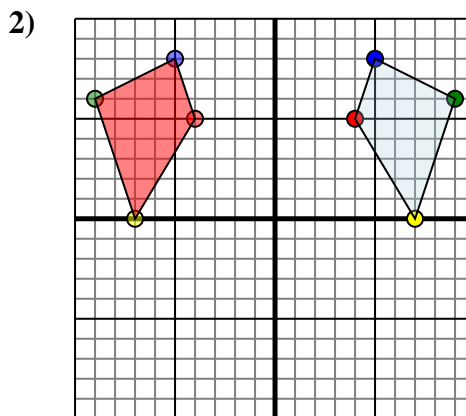
Reflect each shape as described.



The shape above has the following coordinates:

- A. (-5,2)
- B. (-7,5)
- C. (-9,6)

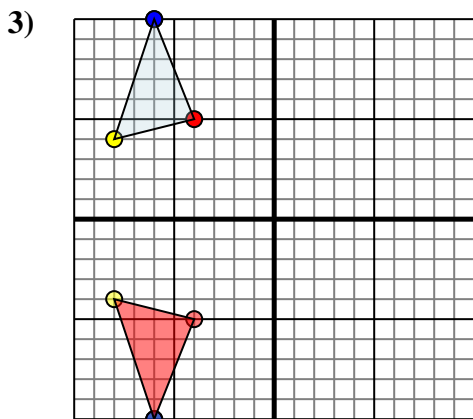
Reflect the shape over the X axis.



The shape above has the following coordinates:

- A. (4,5)
- B. (7,0)
- C. (9,6)
- D. (5,8)

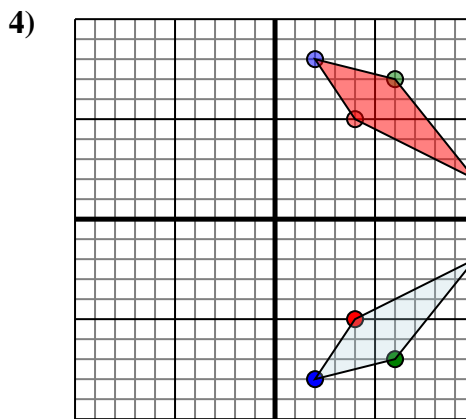
Reflect the shape over the Y axis.



The shape above has the following coordinates:

- A. (-4,5)
- B. (-8,4)
- C. (-6,10)

Reflect the shape over the X axis.



The shape above has the following coordinates:

- A. (4,-5)
- B. (10,-2)
- C. (6,-7)
- D. (2,-8)

Reflect the shape over the X axis.

Answers

1a. -5,-2

1b. -7,-5

1c. -9,-6

1d. Graph

2a. -4,5

2b. -7,0

2c. -9,6

2d. -5,8

2e. Graph

3a. -4,-5

3b. -8,-4

3c. -6,-10

3d. Graph

4a. 4,5

4b. 10,2

4c. 6,7

4d. 2,8

4e. Graph