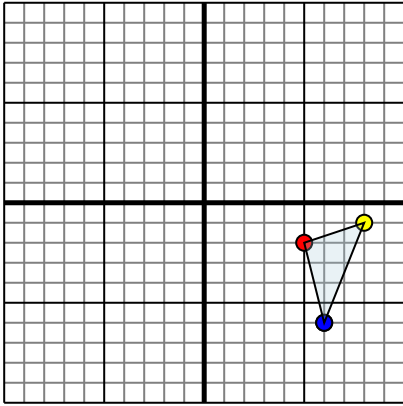




Reflect each shape as described.

1)

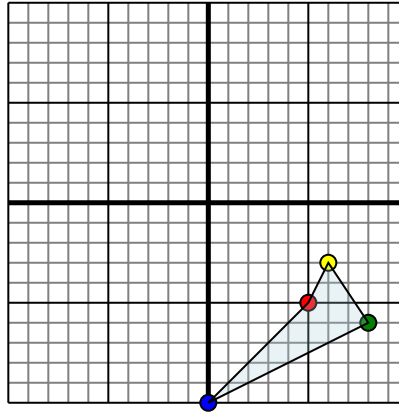


The shape above has the following coordinates:

- A. (5,-2)
- B. (8,-1)
- C. (6,-6)

Reflect the shape over the X axis.

2)

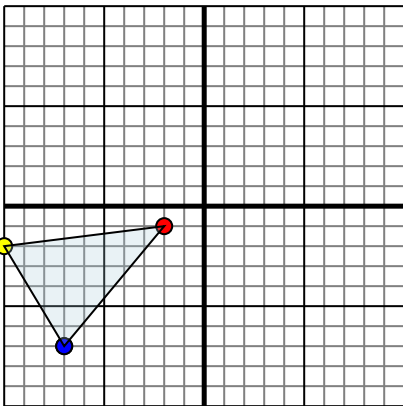


The shape above has the following coordinates:

- A. (5,-5)
- B. (6,-3)
- C. (8,-6)
- D. (0,-10)

Reflect the shape over the Y axis.

3)

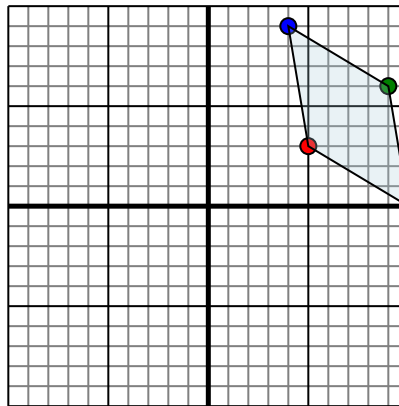


The shape above has the following coordinates:

- A. (-2,-1)
- B. (-10,-2)
- C. (-7,-7)

Reflect the shape over the X axis.

4)



The shape above has the following coordinates:

- A. (5,3)
- B. (10,0)
- C. (9,6)
- D. (4,9)

Reflect the shape over the X axis.

Answers

1a. \_\_\_\_\_

1b. \_\_\_\_\_

1c. \_\_\_\_\_

1d. \_\_\_\_\_

2a. \_\_\_\_\_

2b. \_\_\_\_\_

2c. \_\_\_\_\_

2d. \_\_\_\_\_

2e. \_\_\_\_\_

3a. \_\_\_\_\_

3b. \_\_\_\_\_

3c. \_\_\_\_\_

3d. \_\_\_\_\_

4a. \_\_\_\_\_

4b. \_\_\_\_\_

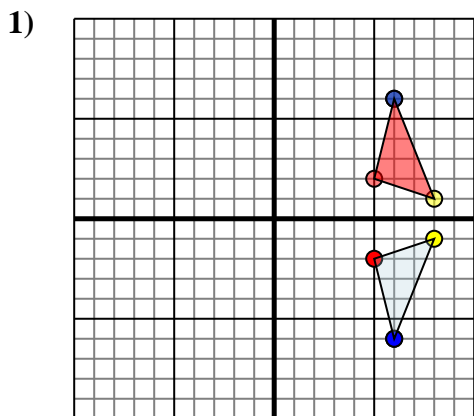
4c. \_\_\_\_\_

4d. \_\_\_\_\_

4e. \_\_\_\_\_



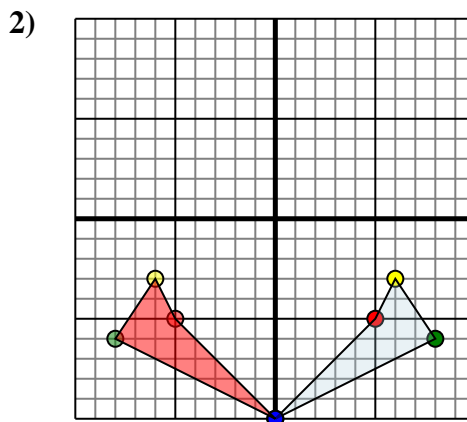
Reflect each shape as described.



The shape above has the following coordinates:

- A. (5,-2)
- B. (8,-1)
- C. (6,-6)

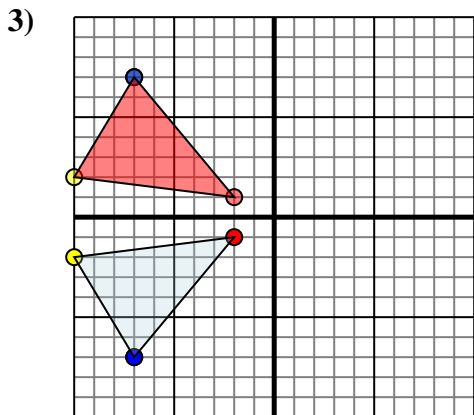
Reflect the shape over the X axis.



The shape above has the following coordinates:

- A. (5,-5)
- B. (6,-3)
- C. (8,-6)
- D. (0,-10)

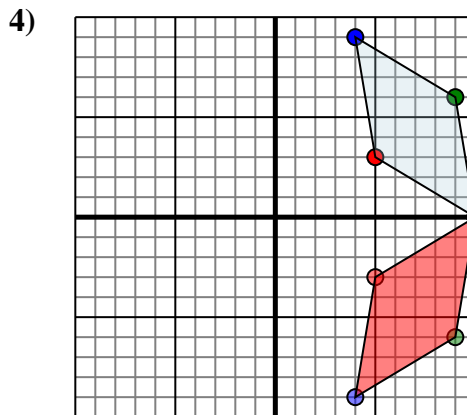
Reflect the shape over the Y axis.



The shape above has the following coordinates:

- A. (-2,-1)
- B. (-10,-2)
- C. (-7,-7)

Reflect the shape over the X axis.



The shape above has the following coordinates:

- A. (5,3)
- B. (10,0)
- C. (9,6)
- D. (4,9)

Reflect the shape over the X axis.

Answers

1a. 5,2

1b. 8,1

1c. 6,6

1d. Graph

2a. -5,-5

2b. -6,-3

2c. -8,-6

2d. 0,-10

2e. Graph

3a. -2,1

3b. -10,2

3c. -7,7

3d. Graph

4a. 5,-3

4b. 10,0

4c. 9,-6

4d. 4,-9

4e. Graph