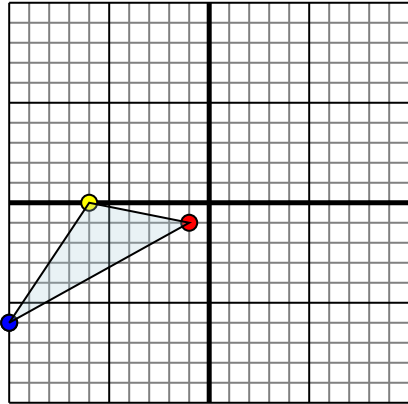




Reflect each shape as described.

1)

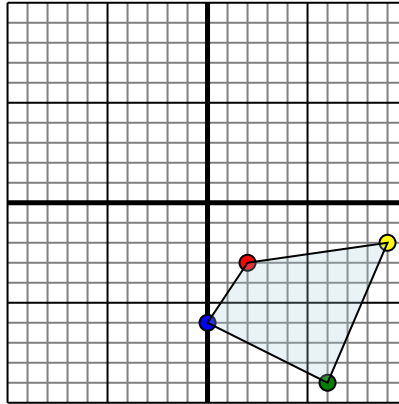


The shape above has the following coordinates:

- A. (-1,-1)
- B. (-6,0)
- C. (-10,-6)

Reflect the shape over the X axis.

2)

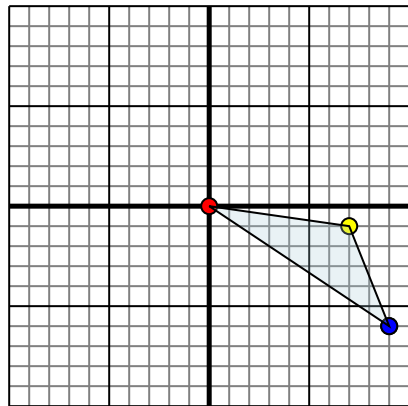


The shape above has the following coordinates:

- A. (2,-3)
- B. (9,-2)
- C. (6,-9)
- D. (0,-6)

Reflect the shape over the Y axis.

3)

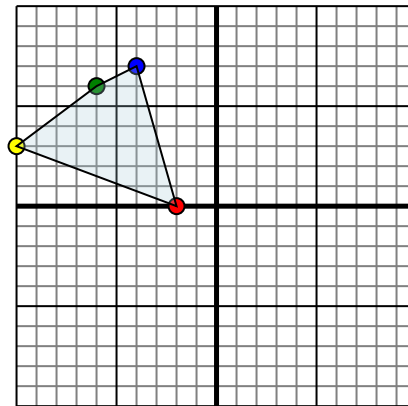


The shape above has the following coordinates:

- A. (0,0)
- B. (7,-1)
- C. (9,-6)

Reflect the shape over the X axis.

4)



The shape above has the following coordinates:

- A. (-2,0)
- B. (-10,3)
- C. (-6,6)
- D. (-4,7)

Reflect the shape over the X axis.

Answers

1a. _____

1b. _____

1c. _____

1d. _____

2a. _____

2b. _____

2c. _____

2d. _____

2e. _____

3a. _____

3b. _____

3c. _____

3d. _____

4a. _____

4b. _____

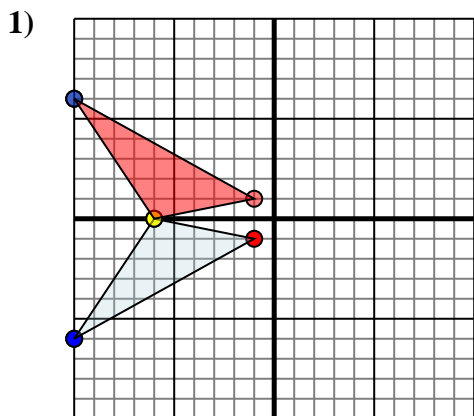
4c. _____

4d. _____

4e. _____



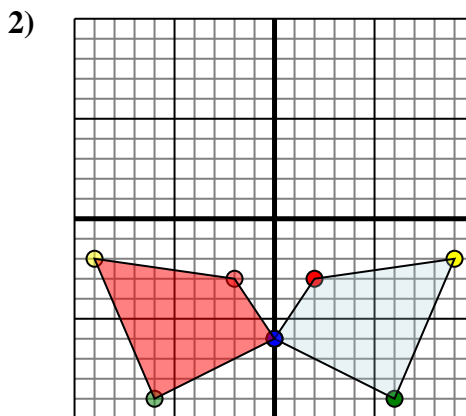
Reflect each shape as described.



The shape above has the following coordinates:

- A. (-1,-1)
- B. (-6,0)
- C. (-10,-6)

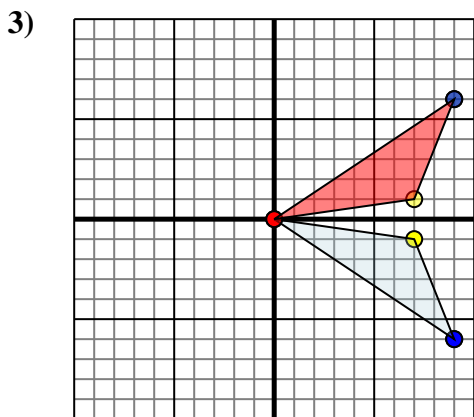
Reflect the shape over the X axis.



The shape above has the following coordinates:

- A. (2,-3)
- B. (9,-2)
- C. (6,-9)
- D. (0,-6)

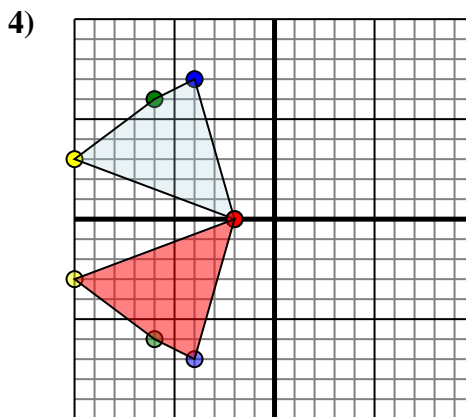
Reflect the shape over the Y axis.



The shape above has the following coordinates:

- A. (0,0)
- B. (7,-1)
- C. (9,-6)

Reflect the shape over the X axis.



The shape above has the following coordinates:

- A. (-2,0)
- B. (-10,3)
- C. (-6,6)
- D. (-4,7)

Reflect the shape over the X axis.

Answers

1a. -1,1

1b. -6,0

1c. -10,6

1d. Graph

2a. -2,-3

2b. -9,-2

2c. -6,-9

2d. 0,-6

2e. Graph

3a. 0,0

3b. 7,1

3c. 9,6

3d. Graph

4a. -2,0

4b. -10,-3

4c. -6,-6

4d. -4,-7

4e. Graph