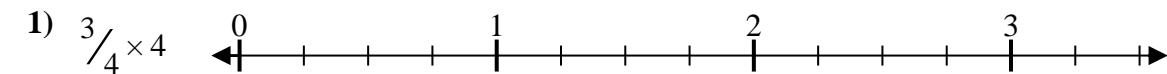


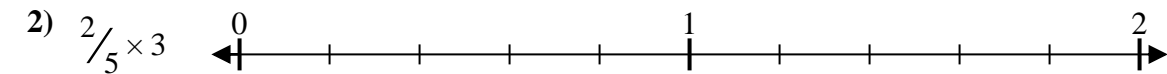


Solve each problem.

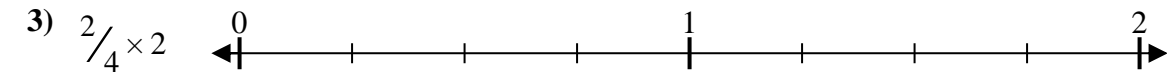
**Answers**



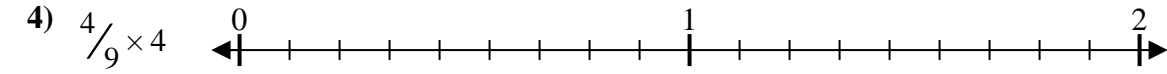
1. \_\_\_\_\_



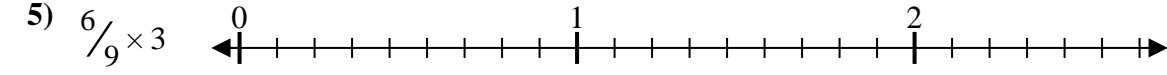
2. \_\_\_\_\_



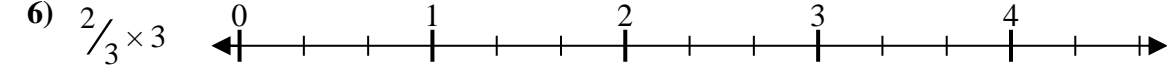
3. \_\_\_\_\_



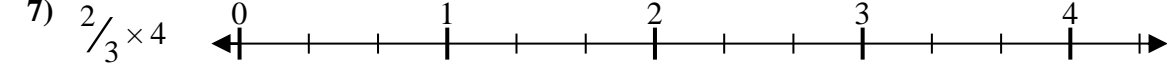
4. \_\_\_\_\_



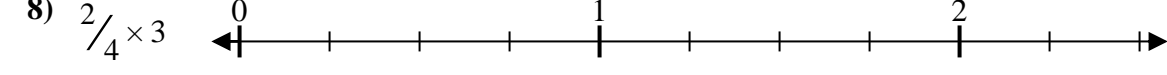
5. \_\_\_\_\_



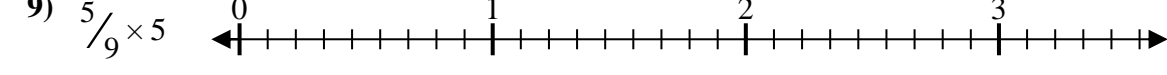
6. \_\_\_\_\_



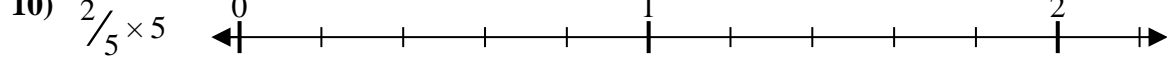
7. \_\_\_\_\_



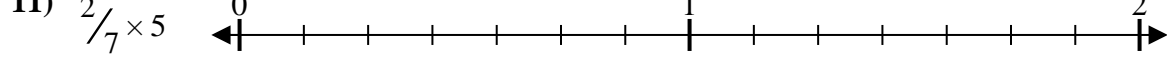
8. \_\_\_\_\_



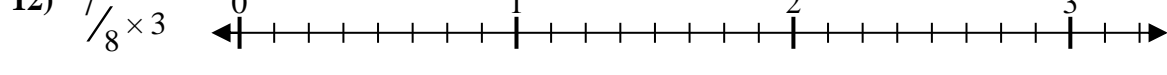
9. \_\_\_\_\_



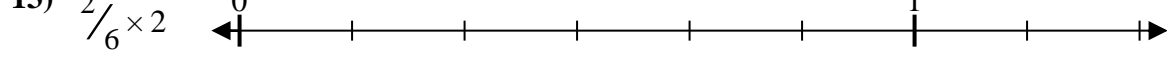
10. \_\_\_\_\_




11. \_\_\_\_\_



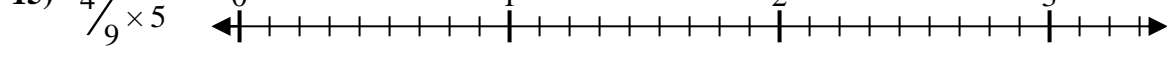
12. \_\_\_\_\_



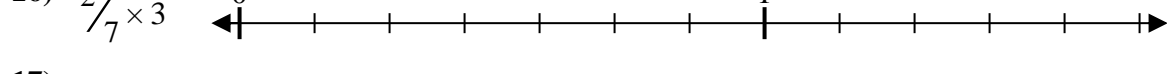
13. \_\_\_\_\_



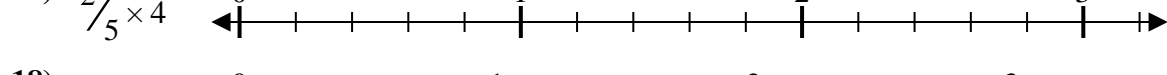
14. \_\_\_\_\_



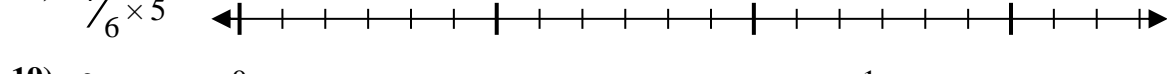
15. \_\_\_\_\_



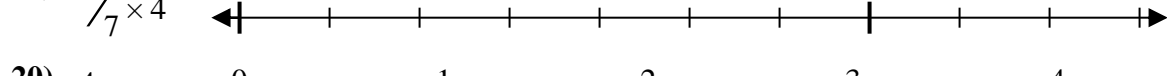
16. \_\_\_\_\_



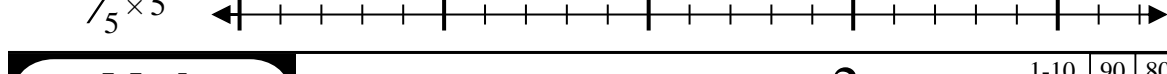
17. \_\_\_\_\_



18. \_\_\_\_\_



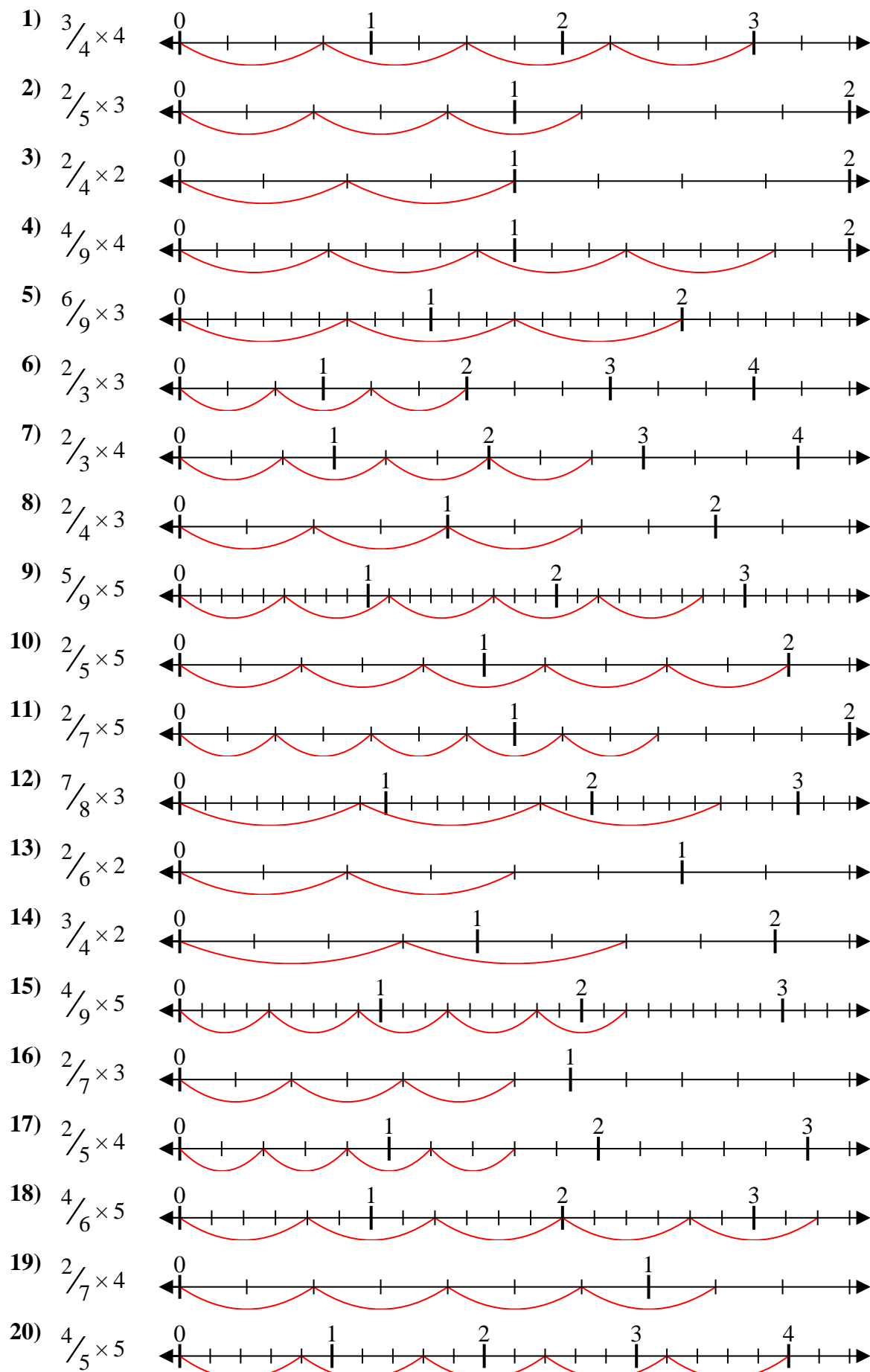
19. \_\_\_\_\_



20. \_\_\_\_\_



Solve each problem.



**Answers**

1.  $\frac{12}{4} = 3$
2.  $\frac{6}{5} = 1\frac{1}{5}$
3.  $\frac{4}{4} = 1$
4.  $\frac{16}{9} = 1\frac{7}{9}$
5.  $\frac{18}{9} = 2$
6.  $\frac{6}{3} = 2$
7.  $\frac{8}{3} = 2\frac{2}{3}$
8.  $\frac{6}{4} = 1\frac{1}{2}$
9.  $\frac{25}{9} = 2\frac{7}{9}$
10.  $\frac{10}{5} = 2$
11.  $\frac{10}{7} = 1\frac{3}{7}$
12.  $\frac{21}{8} = 2\frac{5}{8}$
13.  $\frac{4}{6} = \frac{2}{3}$
14.  $\frac{6}{4} = 1\frac{1}{2}$
15.  $\frac{20}{9} = 2\frac{2}{9}$
16.  $\frac{6}{7} = \frac{6}{7}$
17.  $\frac{8}{5} = 1\frac{3}{5}$
18.  $\frac{20}{6} = 3\frac{1}{3}$
19.  $\frac{8}{7} = 1\frac{1}{7}$
20.  $\frac{20}{5} = 4$