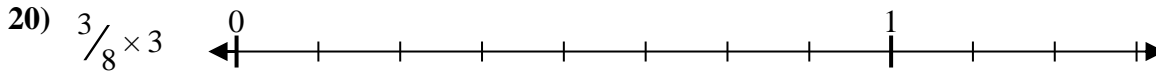
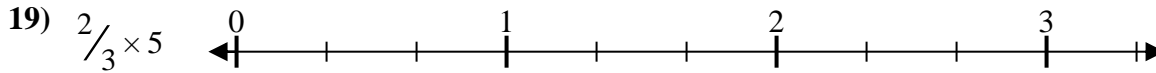
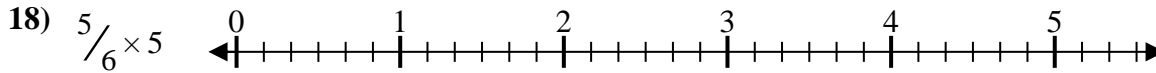
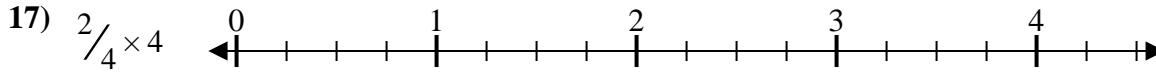
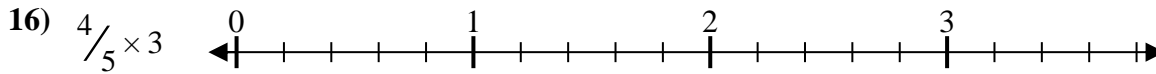
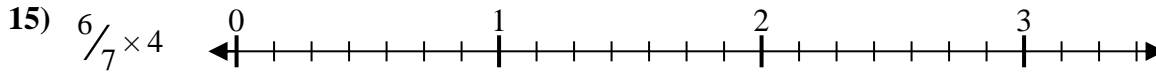
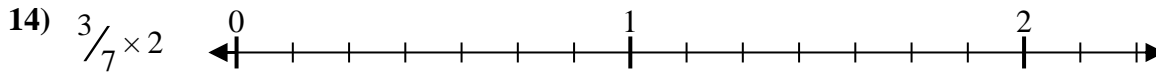
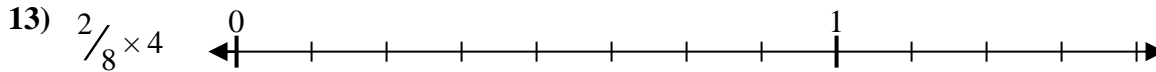
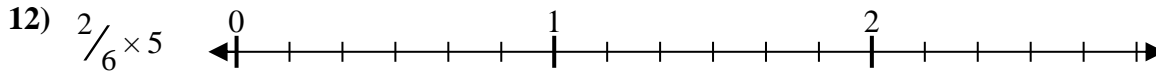
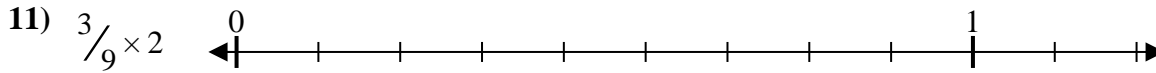
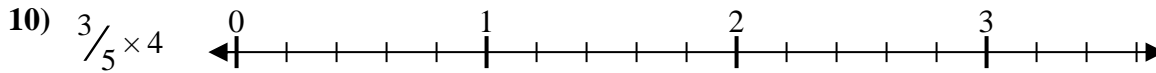
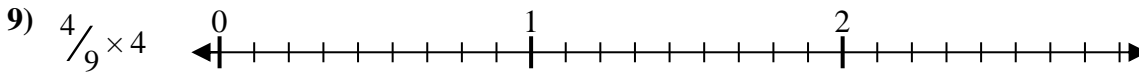
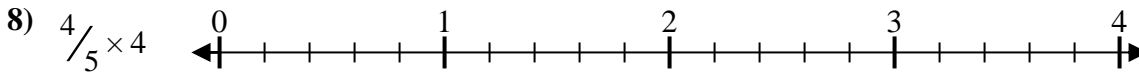
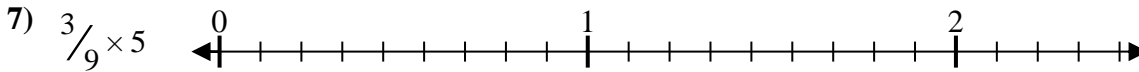
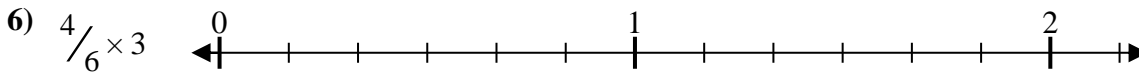
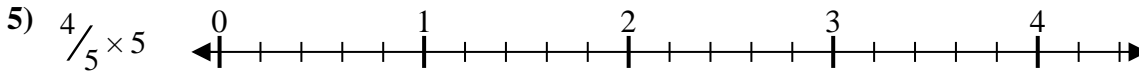
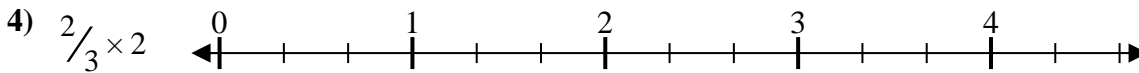

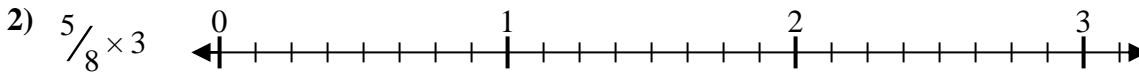
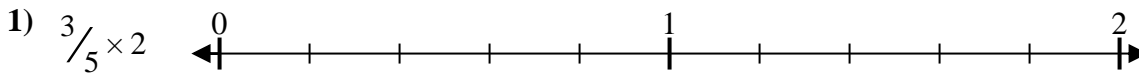




Solve each problem.

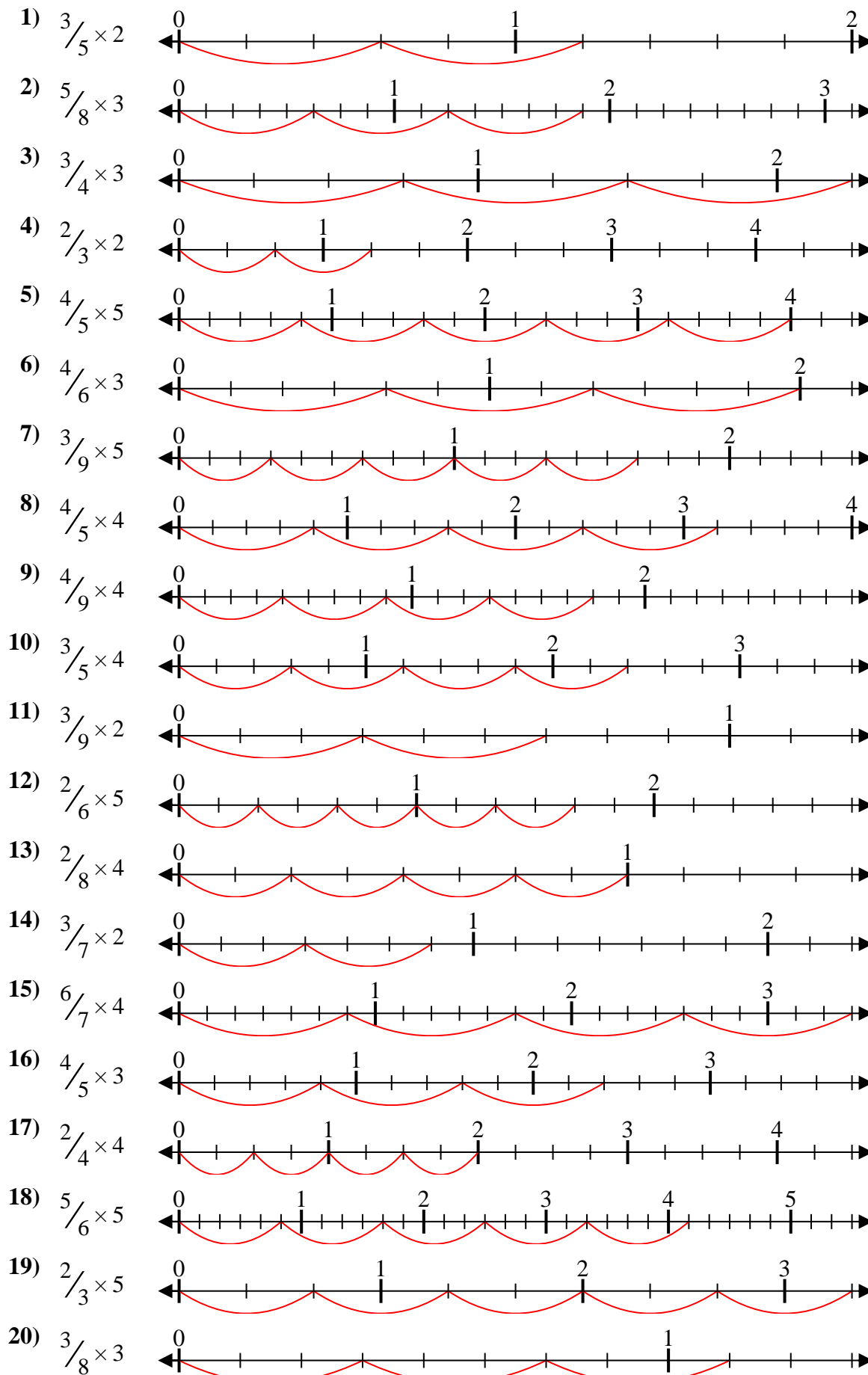
Answers



1. \_\_\_\_\_
2. \_\_\_\_\_
3. \_\_\_\_\_
4. \_\_\_\_\_
5. \_\_\_\_\_
6. \_\_\_\_\_
7. \_\_\_\_\_
8. \_\_\_\_\_
9. \_\_\_\_\_
10. \_\_\_\_\_
11. \_\_\_\_\_
12. \_\_\_\_\_
13. \_\_\_\_\_
14. \_\_\_\_\_
15. \_\_\_\_\_
16. \_\_\_\_\_
17. \_\_\_\_\_
18. \_\_\_\_\_
19. \_\_\_\_\_
20. \_\_\_\_\_



Solve each problem.



**Answers**

1.  $\frac{6}{5} = 1\frac{1}{5}$
2.  $\frac{15}{8} = 1\frac{7}{8}$
3.  $\frac{9}{4} = 2\frac{1}{4}$
4.  $\frac{4}{3} = 1\frac{1}{3}$
5.  $\frac{20}{5} = 4$
6.  $\frac{12}{6} = 2$
7.  $\frac{15}{9} = 1\frac{2}{3}$
8.  $\frac{16}{5} = 3\frac{1}{5}$
9.  $\frac{16}{9} = 1\frac{7}{9}$
10.  $\frac{12}{5} = 2\frac{2}{5}$
11.  $\frac{6}{9} = \frac{2}{3}$
12.  $\frac{10}{6} = 1\frac{2}{3}$
13.  $\frac{8}{8} = 1$
14.  $\frac{6}{7} = \frac{6}{7}$
15.  $\frac{24}{7} = 3\frac{3}{7}$
16.  $\frac{12}{5} = 2\frac{2}{5}$
17.  $\frac{8}{4} = 2$
18.  $\frac{25}{6} = 4\frac{1}{6}$
19.  $\frac{10}{3} = 3\frac{1}{3}$
20.  $\frac{9}{8} = 1\frac{1}{8}$