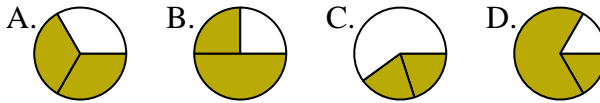




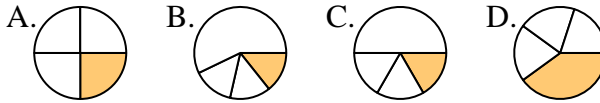
Determine which letter best represents each fraction.

Answers

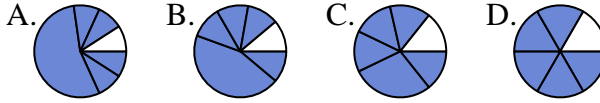
1) Which choice best represents $\frac{2}{3}$?



2) Which choice best represents $\frac{1}{4}$?



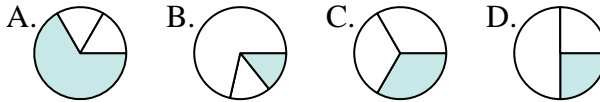
3) Which choice best represents $\frac{5}{6}$?



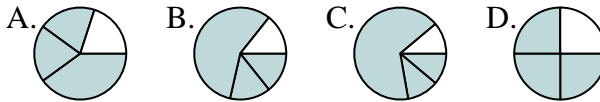
4) Which choice best represents $\frac{3}{8}$?



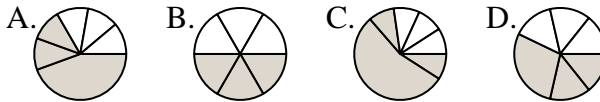
5) Which choice best represents $\frac{1}{3}$?



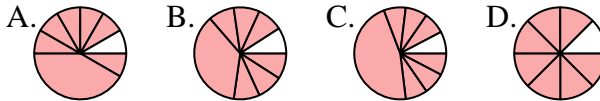
6) Which choice best represents $\frac{3}{4}$?



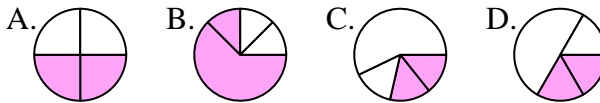
7) Which choice best represents $\frac{3}{6}$?



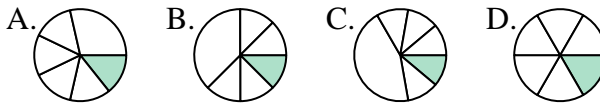
8) Which choice best represents $\frac{7}{8}$?



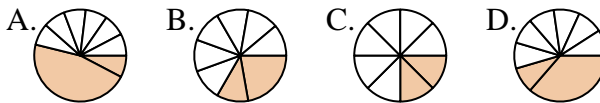
9) Which choice best represents $\frac{2}{4}$?



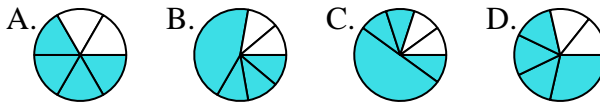
10) Which choice best represents $\frac{1}{6}$?



11) Which choice best represents $\frac{2}{8}$?



12) Which choice best represents $\frac{4}{6}$?



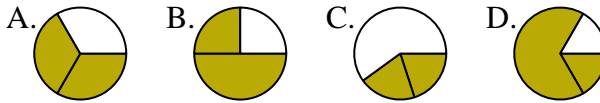
1. _____
2. _____
3. _____
4. _____
5. _____
6. _____
7. _____
8. _____
9. _____
10. _____
11. _____
12. _____



Determine which letter best represents each fraction.

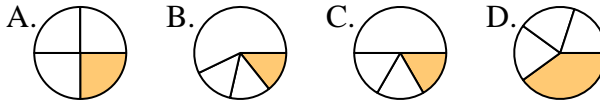
Answers

1) Which choice best represents $\frac{2}{3}$?



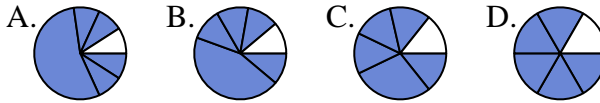
1. **A**

2) Which choice best represents $\frac{1}{4}$?



2. **A**

3) Which choice best represents $\frac{5}{6}$?



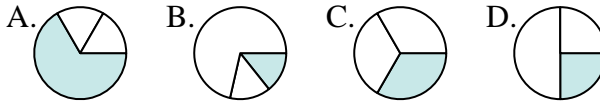
3. **D**

4) Which choice best represents $\frac{3}{8}$?



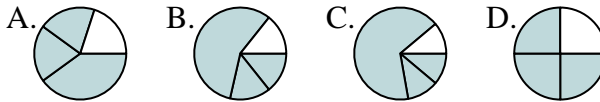
4. **D**

5) Which choice best represents $\frac{1}{3}$?



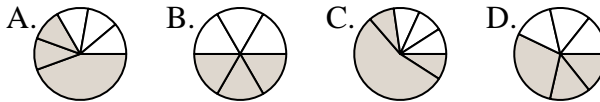
5. **C**

6) Which choice best represents $\frac{3}{4}$?



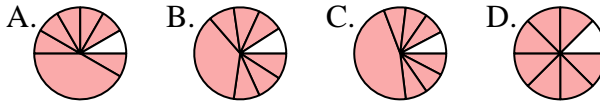
6. **D**

7) Which choice best represents $\frac{3}{6}$?



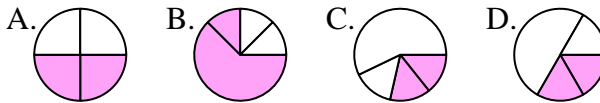
7. **B**

8) Which choice best represents $\frac{7}{8}$?



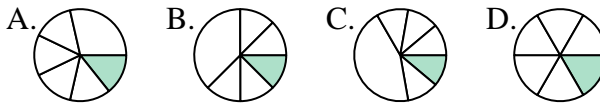
8. **D**

9) Which choice best represents $\frac{2}{4}$?



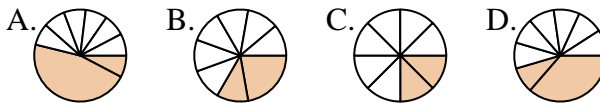
9. **A**

10) Which choice best represents $\frac{1}{6}$?



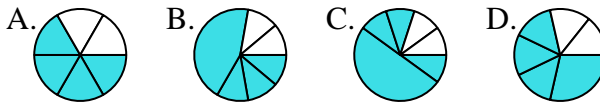
10. **D**

11) Which choice best represents $\frac{2}{8}$?



11. **C**

12) Which choice best represents $\frac{4}{6}$?



12. **A**