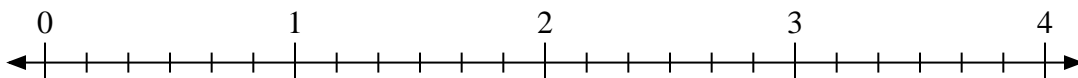




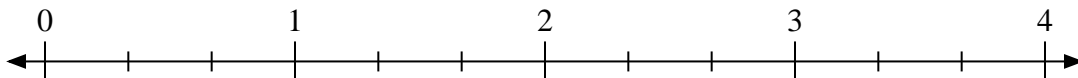
Use the numberline to solve.

Answers

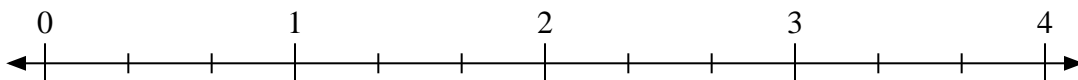
1) $3 \div \frac{2}{6}$



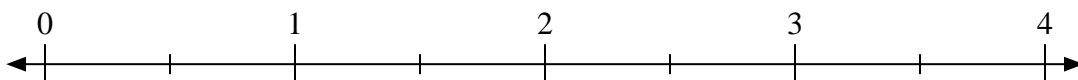
2) $2 \div \frac{2}{3}$



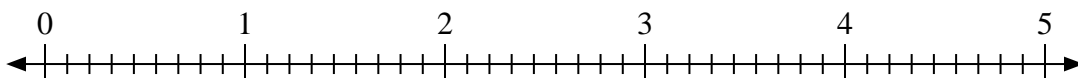
3) $4 \div \frac{1}{3}$



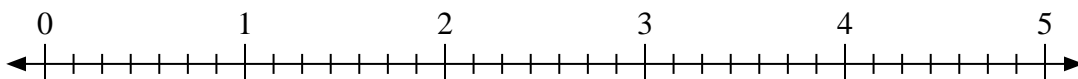
4) $2 \div \frac{1}{2}$



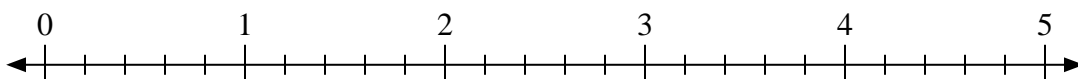
5) $3 \div \frac{5}{9}$



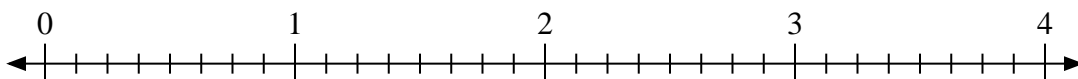
6) $4 \div \frac{1}{7}$



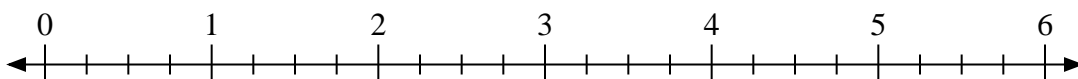
7) $4 \div \frac{2}{5}$



8) $4 \div \frac{3}{8}$



9) $2 \div \frac{1}{4}$



1. _____

2. _____

3. _____

4. _____

5. _____

6. _____

7. _____

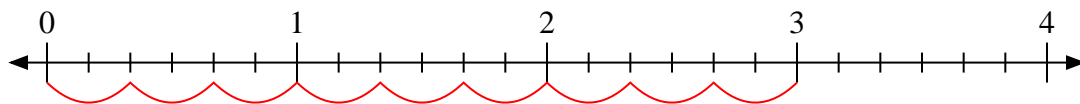
8. _____

9. _____

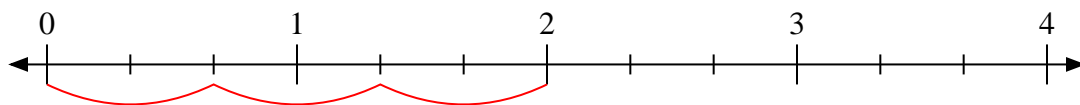


Use the numberline to solve.

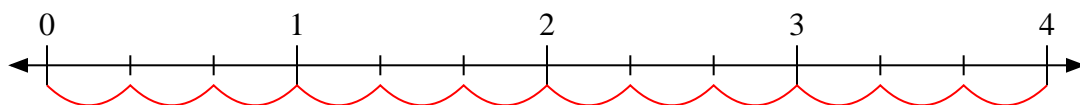
1) $3 \div \frac{2}{6}$



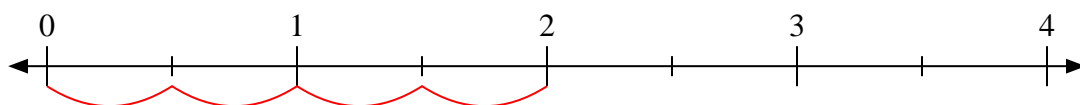
2) $2 \div \frac{2}{3}$



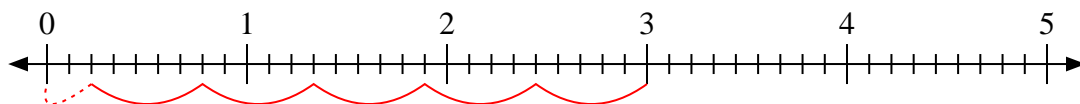
3) $4 \div \frac{1}{3}$



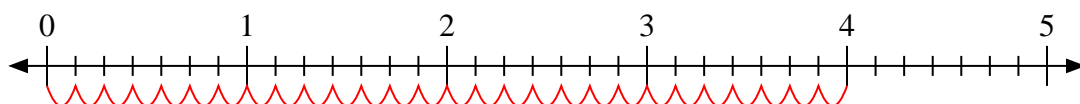
4) $2 \div \frac{1}{2}$



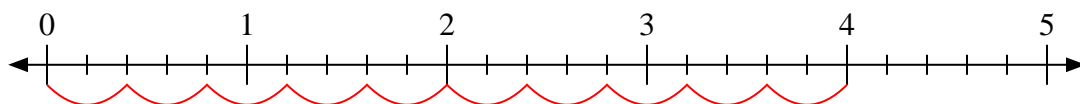
5) $3 \div \frac{5}{9}$



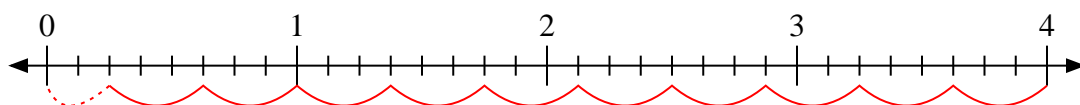
6) $4 \div \frac{1}{7}$



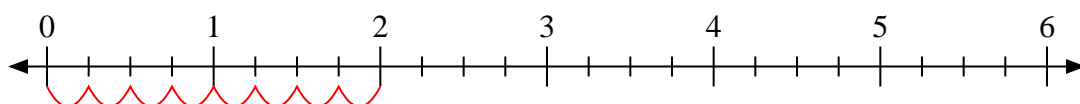
7) $4 \div \frac{2}{5}$



8) $4 \div \frac{3}{8}$



9) $2 \div \frac{1}{4}$



Answers

1. 9

2. 3

3. 12

4. 4

5. $5 \frac{2}{5}$

6. 28

7. 10

8. $10 \frac{2}{3}$

9. 8