

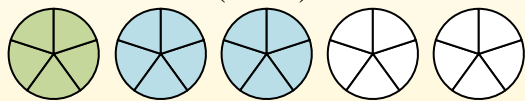


Use the visual model to solve each problem.

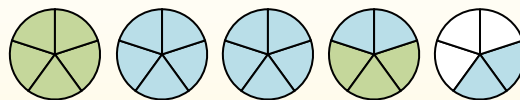
$1\frac{3}{5} + 2\frac{4}{5} = ?$



To solve a fraction addition problem one strategy is to shade in the whole amounts first (1 & 2).



Next fill in the fraction amounts ($\frac{3}{5}$ & $\frac{4}{5}$).



When all of the pieces are filled in we can see that $1\frac{3}{5} + 2\frac{4}{5} = 4\frac{2}{5}$

Answers

- 1. _____
- 2. _____
- 3. _____
- 4. _____
- 5. _____
- 6. _____
- 7. _____
- 8. _____
- 9. _____
- 10. _____

1) $2\frac{5}{12} + 2\frac{8}{12} =$

2) $3\frac{1}{4} + 2\frac{2}{4} =$

3) $3\frac{2}{5} + 3\frac{3}{5} =$

4) $1\frac{1}{4} + 1\frac{3}{4} =$

5) $3\frac{3}{6} + 2\frac{5}{6} =$

6) $3\frac{9}{10} + 1\frac{4}{10} =$

7) $3\frac{4}{12} + 3\frac{10}{12} =$

8) $1\frac{8}{10} + 2\frac{2}{10} =$

9) $3\frac{8}{10} + 1\frac{5}{10} =$

10) $3\frac{3}{12} + 1\frac{7}{12} =$



Use the visual model to solve each problem.

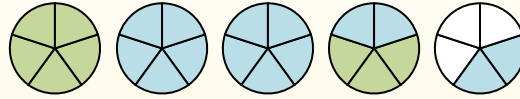
$$1 \frac{3}{5} + 2 \frac{4}{5} = ?$$



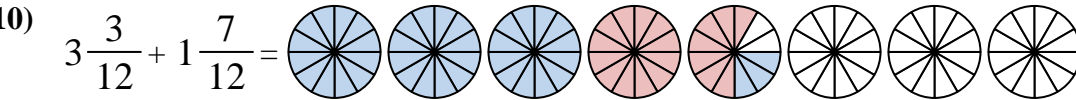
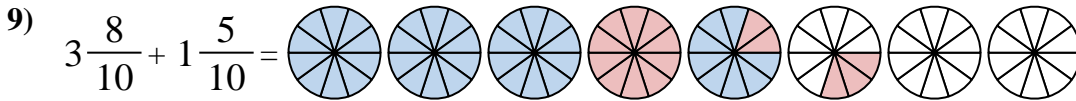
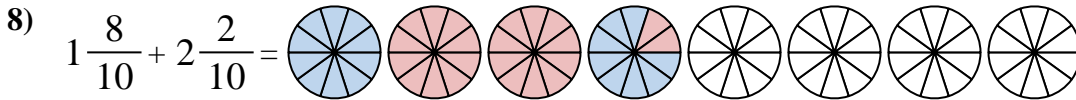
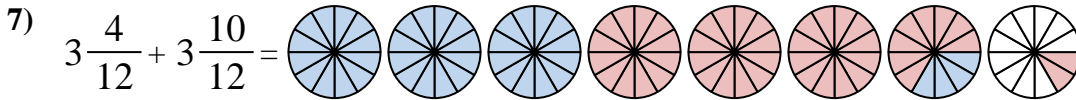
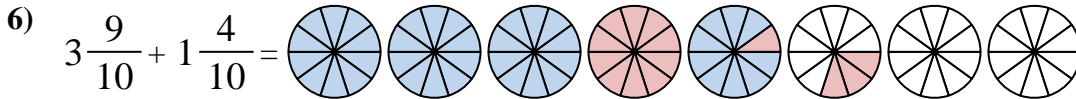
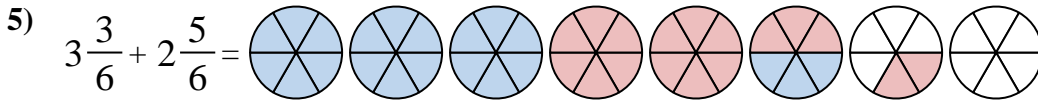
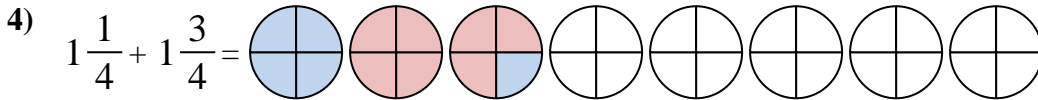
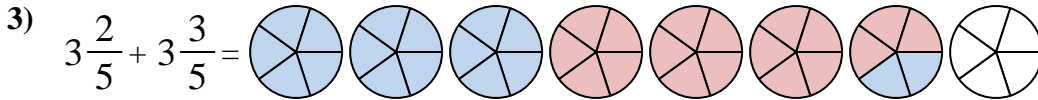
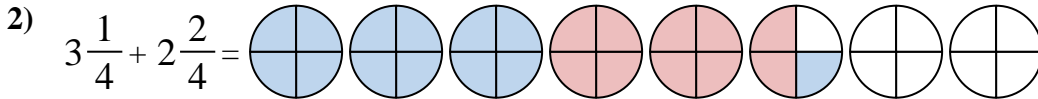
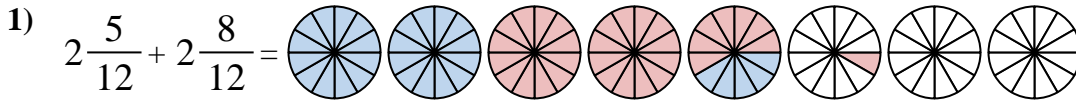
To solve a fraction addition problem one strategy is to shade in the whole amounts first (1 & 2).



Next fill in the fraction amounts ($\frac{3}{5}$ & $\frac{4}{5}$).



When all of the pieces are filled in we can see that $1 \frac{3}{5} + 2 \frac{4}{5} = 4 \frac{2}{5}$



Answers

1. $5 \frac{1}{12}$

2. $5 \frac{3}{4}$

3. $7 \frac{0}{5}$

4. $3 \frac{0}{4}$

5. $6 \frac{2}{6}$

6. $5 \frac{3}{10}$

7. $7 \frac{2}{12}$

8. $4 \frac{0}{10}$

9. $5 \frac{3}{10}$

10. $4 \frac{10}{12}$