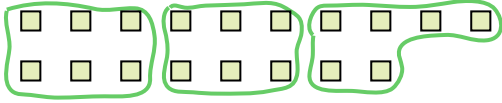







Use the shapes provided to answer the questions.

Ex) How many groups of 6 can you make with the 18 shapes below?




1) How many groups of 3 can you make with the 30 shapes below?



Answers


Ex. 3

2) How many groups of 4 can you make with the 28 shapes below?



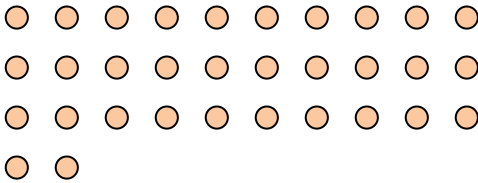
1. 10

3) How many groups of 2 can you make with the 40 shapes below?



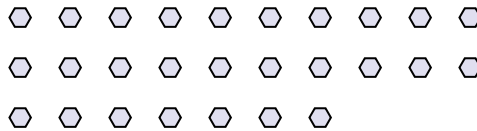
2. 7

4) How many groups of 4 can you make with the 32 shapes below?



3. 20

5) How many groups of 9 can you make with the 27 shapes below?




4. 8

6) How many groups of 6 can you make with the 36 shapes below?




5. 3

7) How many groups of 3 can you make with the 36 shapes below?



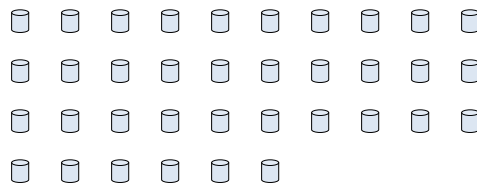
6. 6

8) How many groups of 6 can you make with the 36 shapes below?



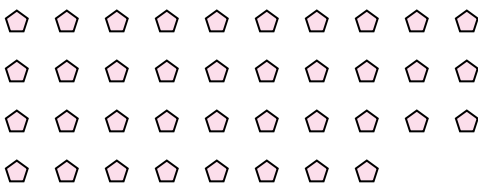
7. 12

9) How many groups of 4 can you make with the 36 shapes below?



8. 6

10) How many groups of 2 can you make with the 38 shapes below?



9. 9

11) How many groups of 7 can you make with the 14 shapes below?



10. 19

11. 2