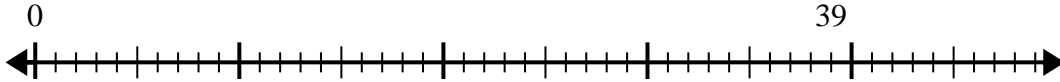


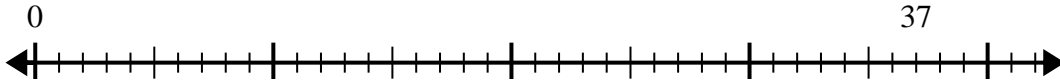


Use the number line to solve the division problem.

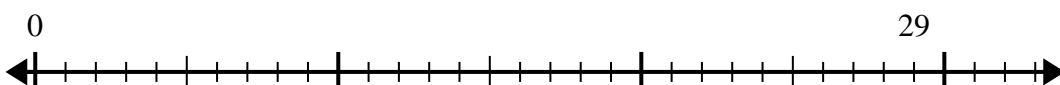
1) $39 \div 8 =$
0



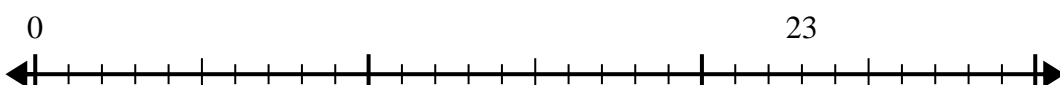
2) $37 \div 7 =$
0



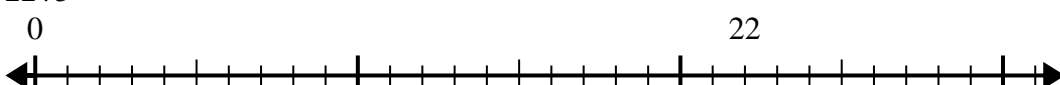
3) $29 \div 4 =$
0



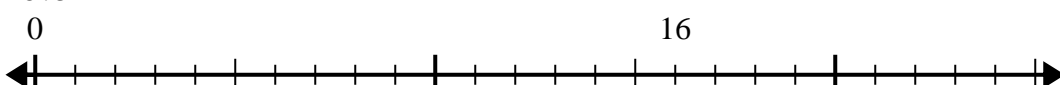
4) $23 \div 7 =$
0



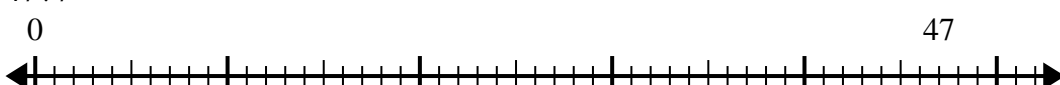
5) $22 \div 5 =$
0



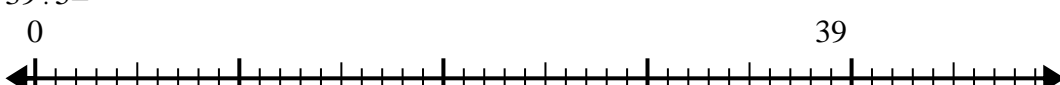
6) $16 \div 5 =$
0



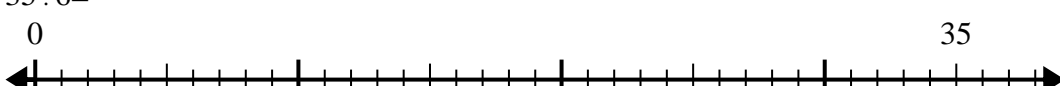
7) $47 \div 7 =$
0



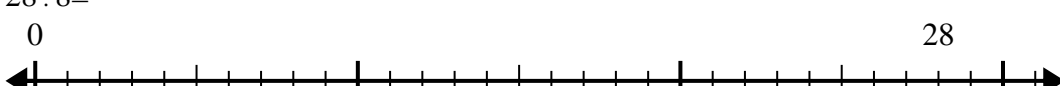
8) $39 \div 5 =$
0



9) $35 \div 6 =$
0



10) $28 \div 8 =$
0



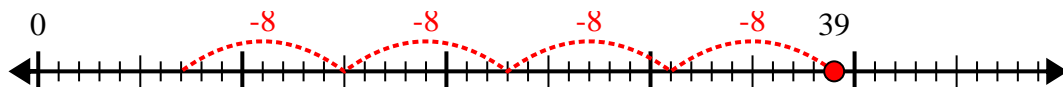
Answers

1. _____
2. _____
3. _____
4. _____
5. _____
6. _____
7. _____
8. _____
9. _____
10. _____



Use the number line to solve the division problem.

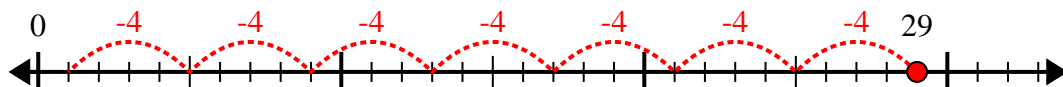
1) $39 \div 8 =$



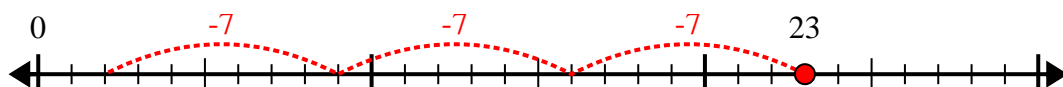
2) $37 \div 7 =$



3) $29 \div 4 =$



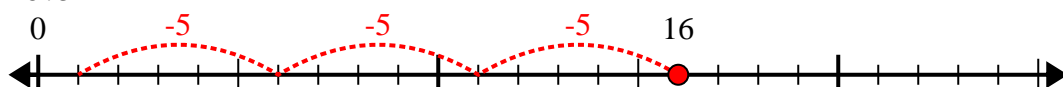
4) $23 \div 7 =$



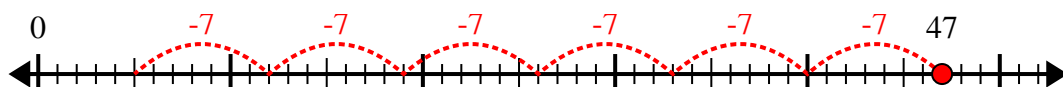
5) $22 \div 5 =$



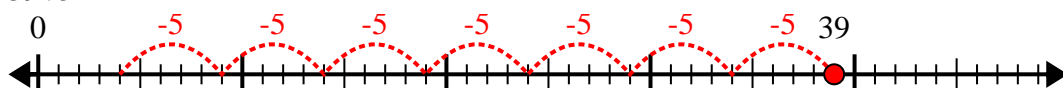
6) $16 \div 5 =$



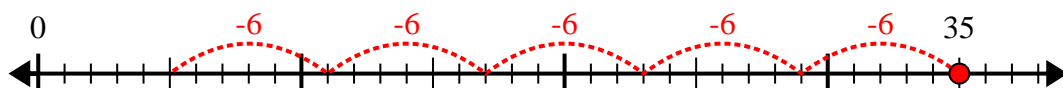
7) $47 \div 7 =$



8) $39 \div 5 =$



9) $35 \div 6 =$



10) $28 \div 8 =$



Answers

1. 4r7

2. 5r2

3. 7r1

4. 3r2

5. 4r2

6. 3r1

7. 6r5

8. 7r4

9. 5r5

10. 3r4