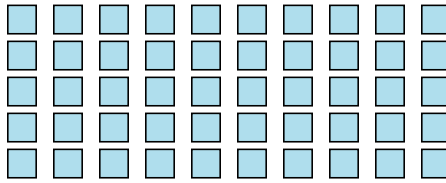
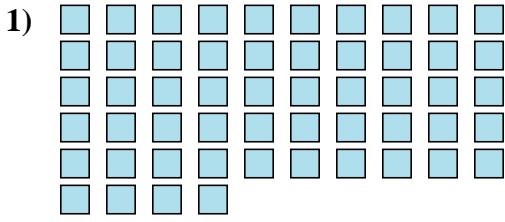




Count the number of shapes shown.

Answers



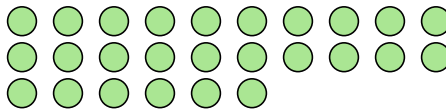
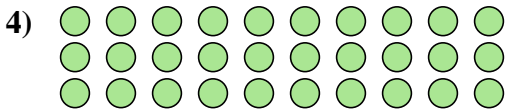
1. _____

2. _____

3. _____

4. _____

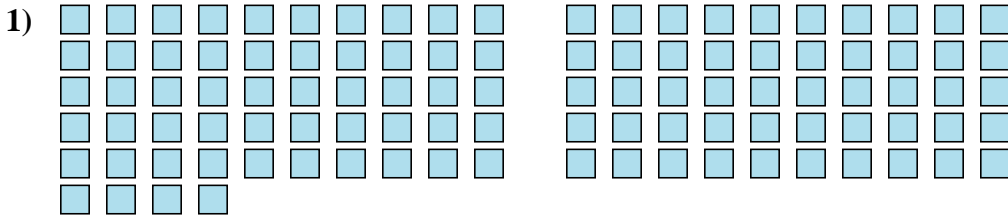
5. _____





Count the number of shapes shown.

Answers



1. 104

2. 69

3. 17

4. 56

5. 25

